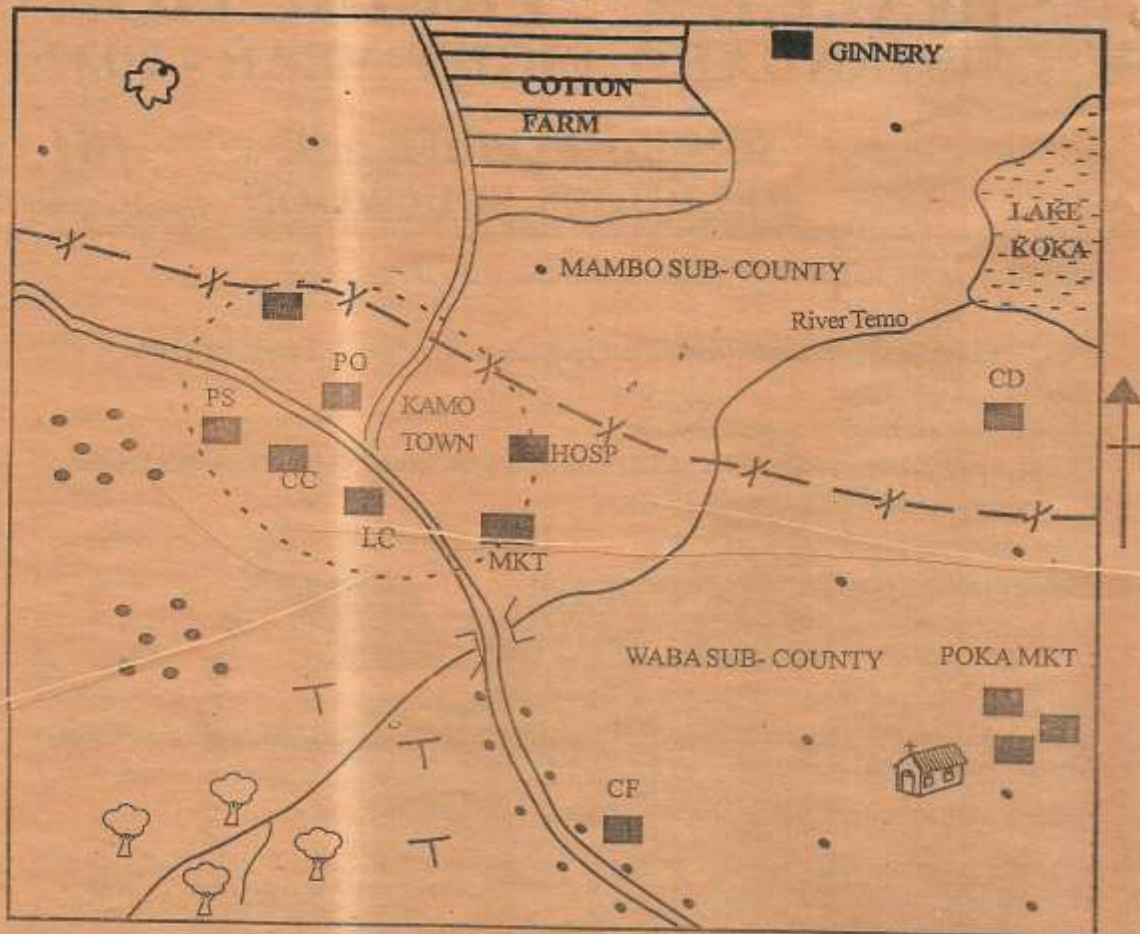


KAMO AREA



key

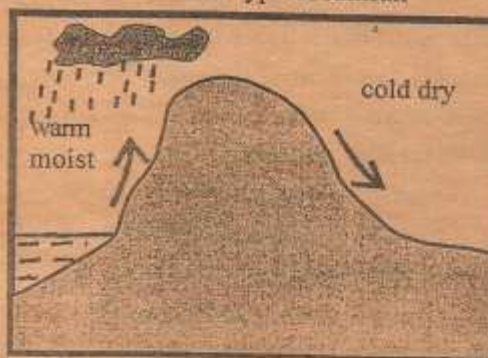
Scale 0 1 2 3 4 5 6 7 8 9 10 | Km

	Tarmac road		Sub-county boundary	PO	Post office
	Murram road		Houses	CD	Cattle dip
	River and bridge		Church	T	Tea
	Forest	CC	County commissioner	LC	Law Court
	Town boundary	PS	Police station	CF	Coffee factory
	Permanent buildings	HOSP	Hospital	MKT	Market
					Quarry

Study the map of Kamo area provided and answer questions 1- 7

- What is the direction of the forest from Lake Koka?
A. North east B. South west
C. North west D. South east
- The feature formed by River Temo at its mouth is called
A. a tributary B. a confluence
C. a delta D. an estuary
- The climate experienced in the North eastern part of Kamo area is likely to be
A. hot and wet B. cool and dry
C. hot and dry D. cool and wet
- The settlement pattern found in the western part of Kamo area can be described as
A. nucleated B. linear
C. clustered D. scattered
- Which one of the following economic activities is not practised in Kamo area?
A. Mining B. Tourism
C. Farming D. Trading
- Three of the following are functions of Kamo town except
A. religious centre
B. administrative centre
C. health centre
D. communication centre
- Kamo area is likely to be a
A. sub -location B. sub- county
C. location D. county
- Which one of the following factors least explains why the cushites migrated from their original homeland into Eastern Africa?
A. Internal quarrels
B. Spirit of adventure
C. Search for arable land
D. Population pressure

- In traditional African societies, medical practices were taught through
A. oral work B. observation
C. riddles D. apprenticeship
- Which one of the following groups of people live in west Africa?
A. Nzoma, Hausa, Bambara
B. Mande, Hadza, Twareg
C. Tonga, Fulani, Baluba
D. Chewa, Dagomba, Malinke
- In traditional weather observation, the movement of large swarm of locusts was interpreted to mean
A. onset of rains
B. beginning of a long dry period
C. end of a rainy season
D. onset of a dry season
- The diagram below represents the formation of a type of rainfall



Which one of the following counties does not receive this type of rainfall?

- Kiambu county
 - Kakamega county
 - Kilifi county
 - Meru county
- The most economic method of poultry farming is
A. battery system B. free range
C. deep litter system D. fold system

14. Below are conditions that favour the growing of a certain crop:
 i) Heavy and well distributed rainfall
 ii) Deep, well drained volcanic soils
 iii) High temperatures
 iv) Protection from direct sunlight
 The conditions described above favour the growing of
 A. maize B. coffee
 C. cloves D. pyrethrum
15. Which one of the following items of trade are major imports of Kenya?
 A. Minerals B. Petroleum
 Coffee Coffee
 Flowers Machinery
 B. Electronics C. Textiles
 Vehicles Canned fruits
 Machinery Metals
16. Which one of the following is the correct definition of interstate succession?
 A. Succession done when the deceased has written a will
 B. Succession conducted according to traditions
 C. Succession done when the deceased leaves behind no will
 D. Succession carried out by the state
17. Lake Kyoga and Lake Chad have one factor in common. It is that both lakes
 A. have salty water
 B. were formed through downwarping
 C. are used for water transport
 D. receive relief rainfall
18. Which one of the following statements is true about the economic organization of the Khoikhoi during the pre-colonial period?
 A. Originally they were hunters
 B. They practised farming
 C. Pastoralism was their main economic activity
 D. They were long distance traders
19. Samouri Toure resisted the invasion of his empire by the French mainly because he
 A. had a well trained army
 B. needed to safeguard Islam
 C. required support against traditional enemies
 D. wanted to remain independent.
20. Below are challenges facing transport
 i) Inadequate passenger control points
 ii) Limited carrying capacity
 iii) Risk of hijacking
 iv) High cost of maintenance
 The above challenges face
 A. road transport B. water transport
 C. air transport D. railway transport
21. The system of colonial administration used by the Portugues in Mozambique was
 A. direct rule B. assimilation
 C. association D. indirect rule
22. Which one of the following communities in Eastern Africa is correctly matched with its origin?

<u>Community</u>	<u>Origin</u>
A. Langi	Horn of Africa
B. Zaramo	South Sudan
C. Gabbra	Congo forest
D. Falasha	South Arabia

23. The government encourages the establishment of Jua Kali industries mainly in order to
- engage primary school drop outs
 - encourage self-employment
 - produce more goods for export
 - promote industrial development
24. Which one of the following statements is false about trees in natural forests?
- Many tree species grow together
 - They form a canopy
 - They mature within a few years
 - Tree harvesting is difficult
25. The early political associations in Kenya demanded all the following from colonialists except
- immediate independence
 - end to forced labour
 - abolition of the Kipande system
 - return of African land
26. Three of the following are roles of government in promoting trade. Which one is not?
- Providing currency
 - Standardization of goods
 - Creation of Export Processing Zone (EPZ)
 - Hoarding goods
27. Who among the following leaders was the chairman of the East African Association (EAA)?
- Kibwana Kombo
 - Harry Thuku
 - James Gichuru
 - Abdalla Tairara
28. A child has accidentally swallowed some insecticide. The immediate action that should be taken is to
- take him to hospital
 - punish him and be warned

- give him first aid
 - take the chemical to hospital for investigation
29. In traditional African societies, children were told stories with animal characters in order to
- be good hunters
 - develop their character
 - scare them
 - promote tourism
30. The main reason why Vasco Da Gama sailed round Africa was to
- discover the dark continent
 - learn more about the African people
 - search for trade items
 - find a sea route to India


Use the map of Kenya below to answer questions 31 to 34



31. The national park marked P is
- Dodori
 - Sibiloi
 - Malka mari
 - Arowale
32. The mineral mined at the place marked Q is
- salt
 - limestone
 - fluorspar
 - gemstones

33. Which one of the following is not a characteristic of the relief region marked R?
- It has several inland drainage systems
 - It rises above 250 metres above the sea level
 - There are some inselbergs
 - It has hot and wet climate
34. The town marked S is
- Mombasa
 - Lamu
 - Kilifi
 - Malindi
35. The statements below describe an early visitor to Eastern Africa
- He was a trader from Europe
 - He signed treaties of protection with African chiefs
 - He founded the GEACO
- The early visitor described above is
- William Mackinnon
 - Carl Peters
 - David Livingstone
 - Johann Rebmann
36. Petroleum refineries in Nigeria are located within the mining area mainly because
- it is safe
 - human labour is readily available
 - it reduces the cost of transport and refining
 - land is in plenty
37. The best way to manage population growth in India is by
- educating the youth on the dangers of early sexual relations
 - creating more job opportunities
 - penalising couples who get many children
 - promoting family planning services

38. Which one of the following is the main problem facing communication systems in Kenya?
- Inadequate capital for upgrading the system
 - Cyber crime
 - Frequent changes in election media
 - Breakdown of the equipment
39. The diagram below represents the formation of a type of a lake



- The above lake was formed as a result of
- faulting
 - erosion
 - deposition
 - down warping
40. The following are characteristics of a climate region of Africa
- Double maxima rainfall
 - Average temperature of 26°C
 - High humidity throughout the year
 - Low diurnal temperature
- The climatic region described above is
- savanna climate
 - tropical climate
 - mediterranean climate
 - humid subtropical climate
41. Lawlessness in the society may be caused by
- dialogue
 - intolerance
 - obedience of the law
 - transparency

42. Soda ash for export is transported from Lake Magadi to Mombasa port by
A. railway transport B. air transport
C. road transport D. water transport

43. Which one of the following was not a characteristic of European settler farming in Kenya?
A. Irrigation farming
B. Establishment of cooperative unions
C. Land fragmentation
D. Introduction of exotic breeds of livestock

44. The diagram below represents a road sign



The road sign means

- A. no left turn
B. no u- turn
C. no overtaking
D. no right turn
45. Tourists from around the world visit Egypt every year mainly due to
A. cultural heritage
B. Nile cruises
C. coastal beaches
D. monuments
46. The cockerel emblem found on the coat of arms represents
A. freedom fighters
B. agriculture as the backbone of the economy
C. symbol of the party that led Kenya to independence
D. the national symbols Harambee

47. European colonial powers acquired land in Africa mainly through
A. forced eviction
B. lease
C. signing treaties
D. negotiation with traditional leaders

48. Which one of the following statements is true about regional trade organizations in Africa?

- A. Membership is limited only to one organization
B. Generally they rely on agricultural produce
C. They make huge profits
D. They heavily rely on world Bank for loans.

49. A boy in your class has started abusing drugs. The best action that should be taken is to

- A. report the matter to the police
B. advise him on the dangers of abusing drugs
C. tell him to smoke only when away from school
D. be given a severe punishment

50. Nomination of candidates for various elective positions is done by the

- A. National Assembly
B. Supreme court
C. Political parties
D. Independent Electoral and Boundaries Commission (IEBC)

51. The most recent country to join the East African community (EAC) is

- A. DR. Congo
B. South Sudan
C. Rwanda
D. Eritrea

52. The most common form of communication system in rural areas in Kenya is
- print media
 - electronic media
 - postal services
 - social media
53. Which one of the following is a function of the body in charge of election in Kenya?
- Allocating campaign resources to political parties
 - Nominating candidates
 - Issuing permits for political rallies
 - Sourcing for election materials
54. Which one of the following is a subordinate court?
- Supreme court
 - Court of Appeal
 - Magistrate court
 - High court
55. The statements below describe a way of resolving conflicts
- a selected person is involved
 - facts about the dispute are collected
 - a decision is made independently
 - conflicting parties must abide by the decision
- The method of conflict resolution described above is
- reconciliation
 - arbitration
 - mediation
 - negotiation
56. Which one of the following national philosophies was to spear head economic growth in Kenya after independence?
- Harambee
 - Nyayo philosophy
 - African socialism
 - Pan- Africanism
57. Every year, 20th October is celebrated in Kenya as the day when
- Kenyatta was arrested
 - Kenya gained internal self government
 - Kenya was declared a British protectorate
 - Freedom fighters were arrested and detained
58. A foreigner wishing to become a Kenyan citizen must live in the country for a minimum period of
- ten years
 - five years
 - seven years
 - two years
59. Kenyans show their loyalty and patriotism when they
- buy imported goods
 - stand alert during flag raising time
 - participate in mob justice
 - attend religious services
60. Which one of the following reasons is least likely to cause a by - election?
- Death of an incumbent member
 - Successful challenge of election results by an opponent in a court of law
 - Jail term exceeding six months
 - Non- participation in legislative processes.
- C.R.E**
61. Which one of the following lessons do christians learn from the punishment Adam and Eve got in the garden of Eden? We should be
- cunning
 - obedient
 - able to plan evil
 - ready to do all that we think

62. All the following were promises God made to Abraham except
- to give him land
 - a curse from people
 - many descendants
 - a son
63. Who among the following people did God tell the following words (Gen 7:1) "..... I have found that you are the only one who does what is right"
- Abraham
 - Noah
 - Ezekiel
 - Daniel
64. When Joseph's brothers wanted to kill him one of them suggested they throw him into a dry pit. Who was it?
- Reuben
 - Judah
 - Dan
 - Naphtali
65. All the following were reasons why Moses fled to Egypt except
- he killed an Egyptian
 - he realised he had been known as a murderer
 - he feared Pharaoh
 - he was a stammerer
66. Which of the following was not done by the Israelites during the passover night?
- Eating boiled meat
 - Slaughtered a male lamb
 - Smearred blood on the doorposts
 - Taking bitter herbs
67. All the following are commandments that teach about relationship between God and man except
- worship no other God but the living God
 - honour your parents
 - do not mention God's name for evil purposes
 - do not make yourself images or worship them
68. Which of these commandments teaches about the importance of marriage?
- Do not kill
 - Do not covet
 - Do not cheat
 - Do not commit adultery
69. Who among the following annointed Saul to be king of Israel?
- Samuel
 - Nathan
 - Priest Zadock
 - Elijah
70. Which one of the following was a common miracle between Elijah and Elisha?
- Healing Peter
 - Raising the dead
 - Making an axe head float
 - Multiplying oil
71. All the following were judges in Israel. Who was not?
- Gideon
 - Shamgar
 - Deborah
 - Jehu
72. Which one was not among the reasons why Zachariah doubted God's message
- The wife was barren
 - The wife was old
 - The wife was past normal child bearing age
 - Zachariah was a high priest
73. Which one of the following is a reason why king Herod wanted to kill baby Jesus?
- He feared to be overthrown
 - He hated him
 - Baby Jesus was prettier than other babies
 - To show his power

74. The following people were present when Jesus was presented in the temple **except**
- A. Mary the mother of Jesus
 - B. Mary Magdalene
 - C. Prophetess Anna
 - D. Simeon
75. What made Jesus overcome the temptations of the devil in the wilderness?
- A. He was muscled
 - B. He fought with the devil and won
 - C. He knew the scriptures
 - D. He was all alone
76. All the following happened during the transfiguration of Jesus **except**
- A. a voice was heard from heaven
 - B. the body of Jesus dazzled
 - C. Elijah and Moses appeared
 - D. The Holy Spirit descended in form of a dove
77. Which miracle did Jesus perform to show that He had power to forgive sins?
- A. Healing the centurion servant
 - B. Healing the paralytic
 - C. Healing the woman who bled for twelve years
 - D. Raising the dead
78. Which parable teaches christians to pray with a lot of humility?
- A. The sower
 - B. The mustard seed
 - C. The ten maidens
 - D. The Pharisee and the tax collector
79. The triumphant entry of Jesus into Jerusalem riding on a donkey had been prophesied by
- A. Ezekiel
 - B. Zachariah
 - C. Micah
 - D. Isaiah
80. In which of the following events did Jesus wash the feet of the disciples?
- A. Baptism
 - B. Transfiguration
 - C. Last supper
 - D. Crucifixion
81. What does the Easter season remind christians?
- A. The temptations of Jesus
 - B. The arrest of Jesus
 - C. Death and resurrection of Jesus
 - D. The healing power of Jesus
82. What kind of suffering did Jesus experience when the soldiers arrested him in the garden of Gethsemane?
- A. Spiritual
 - B. Mental
 - C. Emotional
 - D. Physical
83. Who among the following led people in worship in traditional African society?
- A. Seers
 - B. Peers
 - C. Elders
 - D. Priests
84. Morals and information were passed from one generation to another in the traditional African Society through
- A. teaching in classrooms
 - B. story telling
 - C. reading books
 - D. watching television
85. All the following were girls' roles in the traditional African society **except**
- A. fetching firewood
 - B. fetching water
 - C. looking after the baby
 - D. looking after the animals
86. Who among the following used tricks and manipulated people's minds?
- A. Herbalists
 - B. Magicians
 - C. Warriors
 - D. Prophets
87. Which one was not a form of life in the traditional African Society?
- A. Baptism
 - B. Living dead
 - C. Ancestors
 - D. Dead

88. Musa and Mendes are friends and both are in class eight. Musa realised that Mendes is HIV positive. What should he do as a christian?
- A. Tell everybody in class
 B. Support him and love him more
 C. Tell his friend to drop out of school
 D. To end their friendship
89. Mwangaza is in class eight. She does not like finishing teachers' work. What should she do as a christian?
- A. To copy from the other pupils
 B. To avoid laziness
 C. To change to a different school
 D. To ask a friend to do the work for him.
90. Which one of the following did the missionaries not do in Africa?
- A. They taught Arithmetic
 B. They taught hygiene
 C. They taught the worshipping of God
 D. They taught christianity

I.R.E

61. Which among the following is not right of a Muslim over his brother Muslim?
- A. Responding the greeting
 B. Visiting the sick
 C. Accepting his invitation
 D. Throwing dirty in his door step
62. Which among the following is prohibited in the cemetery
- A. Digging grave
 B. Stepping of grave
 C. Drinking water
 D. Praying for the dead
63. Among the following which one is not a role of Muslim leader?
- A. Guiding Muslims to the right path
 B. Developing the society

- C. Practicing injustice
 D. Helping the needy
64. A Muslim leader who wants to be role model should follow the foot step of
- A. Former President
 B. King Namrud
 C. Other People
 D. Prophet Muhammed(SAW)
65. A Muslim leader should posses three of the following characteristics. Which one is not?
- A. be just B. be knowledge
 C. be corrupt D. be wise
66. The Arabic word (Taawun) means
- A. Corruption B. co-operation
 C. division D. interest
67. The prophet (SAW) said the hands of Allah are with those who are
- A. relative B. same tribe
 C. united D. enemies
68. When the prophet (SAW) was talking about the importance of co-operation in Islam he said Muslims are like.
- A. One animal B. One car
 C. One sky D. One building
69. What was going on in Kenya coast before the arrival of Muslims?
- A. dancing B. cattle keeping
 C. trade D. fighting
70. The early visitors of Kenya coast came from the following countries except
- A. China B. turkey
 C. Persia D. India
71. Which wind brought the early visitors into Kenya coastal area
- A. North East Monsoon
 B. East-West Monsoon
 C. South West Monsoon
 D. West Monsoon

72. Which month did early visitors arrive in east African coast?
 A. June B. December
 C. September D. April
73. Years after the death of the prophet (SAW) civil war broke out in Arabia.
 A. 50 B. 60
 C. 63 D. 40
74. Which wind assisted the early visitors to go back to their homes?
 A. South west monsoon
 B. North West monsoon
 C. East wind
 D. West wind
75. The Oman local chiefs Suleiman and said arrived in Lamu in which year.
 A. 700 C.E B. 600 C.E
 C. 750 C.E D. 800 C.E
76. Hassan Bin Ali the leader of Shirazi group came with..... fleet of ships.
 A. six B. five
 C. seven D. ten
77. Which among the following items was brought by early visitors?
 A. carpet B. ivory
 C. skin D. spices
78. Three of the following are reasons that brought the early visitors which one is not.
 A. need to earn living
 B. desire for adventure
 C. outbreak of war
 D. out break of Aids
79. The early visitors to East African coast use to take back home the following items which one is not
 A. cloth B. ivory
 C. skin D. spices
80. Prophet Yusuf (AS) was the son of prophet
 A. Yaaqub B. Zakariya
 C. Suleyman D. Idris
81. The only Prophet Yusuf's brother whom they shared a mother with was
 A. Yuhuda B. Ilyai
 C. Canan D. Benyamin
82. Prophet Yusuf (AS) saw the moon, sun and eleven stars prostrating for him while he was.....age.
 A. 12 B. 7
 C. 80 D. 20
83. Why did prophet Yusuf's brothers throw him inside a well?
 A. they fight
 B. he killed one of them
 C. because they were jealousy
 D. they love him
84. Who remove prophet Yusuf from the well?
 A. his father B. caravan
 C. his brothers D. his uncle
85. What was the name of the governor who was sold to prophet Yusuf?
 A. Firam B. Namrod
 C. Fotifar D. Herod
86. When he was in Egypt prophet Yusuf (AS) was staying in the house of
 A. Halima B. Asla
 C. Khadijah D. Zulekha
87. How many inmates did prophet Yusuf met in the prison?
 A. two B. three
 C. six D. five
88. Prophet Muhammed (SAW) said seek knowledge as afar as
 A. Egypt B. India
 C. China D. Rwanda
89. The main source of knowledge is
 A. man B. prophets
 C. Allah D. angels
90. Prophet Yaqub (AS) lived in Egypt for years?
 A. 16 B. 20
 C. 10 D. 17