

K.C.P.E SEVENTH TRIAL STANDARD EIGHT 2022

SOCIAL STUDIES
AND
RELIGIOUS
EDUCATION

Time: 2 hours 15 minutes

READ THESE INSTRUCTIONS CAREFULLY

1. You have been given this question booklet and a separate answer sheet. The question booklet contains 90 questions.
2. Do any necessary rough work in this booklet.
3. When you have chosen your answer, mark it on the ANSWER SHEET, not in the question booklet.

HOW TO USE THE ANSWER SHEET

4. Use an ordinary pencil.
5. Make sure that you have written on the answer sheet:
 - YOUR INDEX NUMBER**
 - YOUR NAME**
 - NAME OF YOUR SCHOOL**
6. By drawing a **dark line** inside the correct numbered boxes mark your full Index Number (i.e. School Code Number and the three-figure Candidate's Number) in the grid near the top of the answer sheet.
7. Do not make any marks outside the boxes.
8. Keep your answer sheet as clean as possible and do not fold it.
9. For each of the questions 1 - 90, four answers are given. The answers are lettered A, B, C and D. In each case only **ONE** of the four answers is correct. Choose the correct answer.
10. On the answer sheet the correct answer is to be shown by drawing a **dark line** inside the box in which the letter you have chosen is written.

Example

In the question booklet:

- 33.** The best method of fishing in deep sea is
- A. harpooning
 - B. trawling
 - C. seining
 - D. net drifting

The correct answer is (B)

On the answer sheet:

A B C D 13 A B C D 23 A B C D 33 A B C D 43 A B C D

In the set of boxes numbered 33, the box with the letter B printed in it is marked.

11. Your dark line **MUST** be within the box.
12. For each question **ONLY ONE** box is to be marked in each set of four boxes.

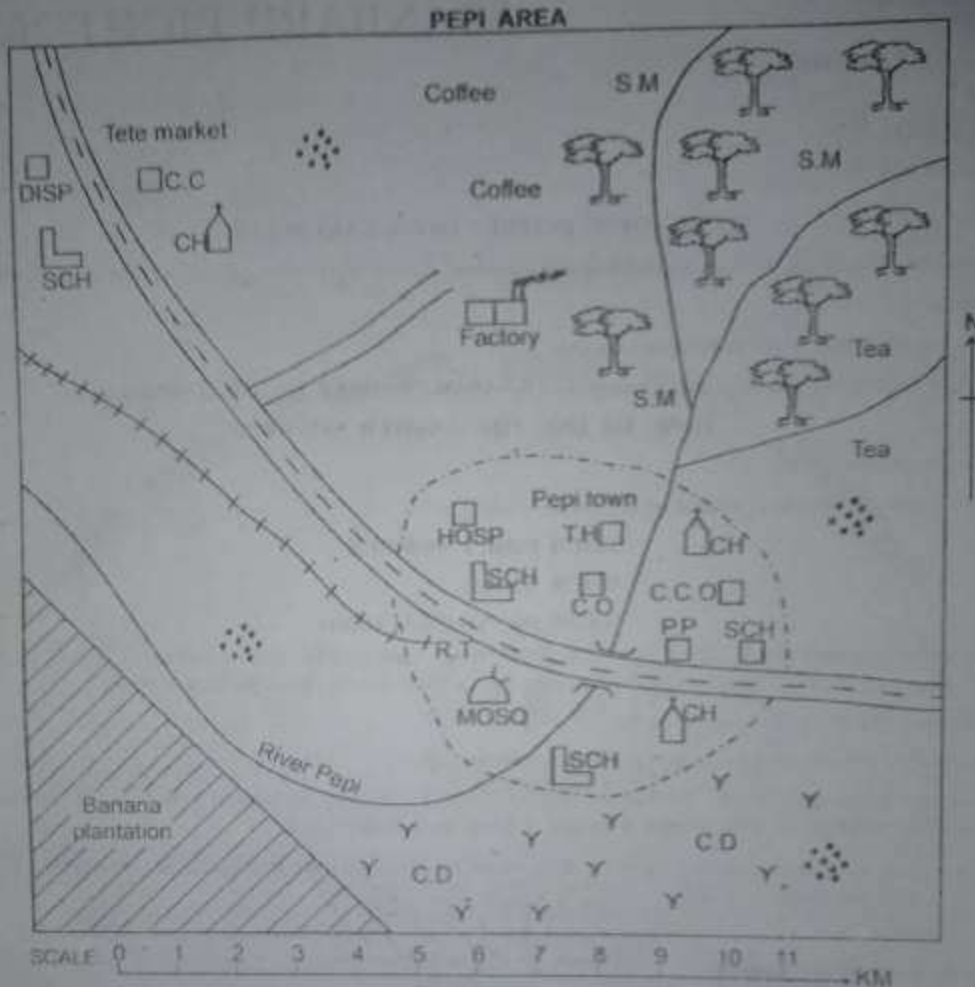
This question paper consists of 12 printed pages.

Candidates should check the question paper to ensure that all the pages are printed as indicated and no questions are missing.

Website: www.kcpe.or.ke

info@jesma.or.ke

PART I: SOCIAL STUDIES



KEY

R.T	Railway Terminus	MOSQ	Mosque		Railway line
DISP	Dispensary	C.O	County offices		Tarmac road
SCH	School	P.P	Police post		Murrum road
C.C	Chief's camp		Grass		Town boundary
CH	Church	S.M	Saw mill		Forest
HOSP	Hospital	C.CO	County commissioner		Human settlement
T.H	Town Hall		Permanent buildings	C.D	Cattle dip

Study the map of Pepi area and use it to answer questions 1 to 7

- The land in Pepi area rises towards
 - South West
 - North West
 - West
 - North East
- What is the approximate area of the banana plantation in Pepi area?
 - 35km²
 - 18km²
 - 20km²
 - 15km²
- Most of the residents in Pepi area are
 - Muslims
 - Hindus
 - Christians
 - Pagans
- The **main** economic activity in Pepi area is
 - agriculture
 - lumbering
 - trade
 - fishing
- Traders in Tete market obtain trading licences from the
 - chief's camp
 - county commissioner
 - dispensary
 - county offices
- The settlement pattern in Pepi area is called
 - isolated settlement
 - linear settlement
 - clustered settlement
 - nucleated settlement
- Which one of the following social services is **not** offered in Pepi town?
 - Education
 - Health
 - Recreation
 - Security
- Three of the following are results of the coming of explorers to Eastern Africa. Which one is **not**? They
 - spread Islam in Eastern Africa
 - helped stop slave trade
 - opened Eastern Africa for the colonialists
 - revealed to the world the natural resources in Eastern Africa

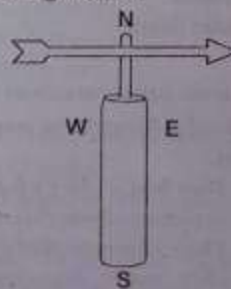
- Which one of the following is **not true** about Koitalel arap Samoei of the Nandi? He
 - was a prophet and spiritual leader
 - was a long distance trader
 - was a medicine man
 - resisted colonial rule

- In the pre-colonial period, most African communities interacted through
 - education
 - trade
 - social media
 - games and sports

- The origin of human beings is explained through the following **except**
 - evolution theory
 - creative stories
 - myths
 - parables

- In traditional African societies, the following skills were taught through apprenticeship **except**
 - wood carving
 - iron-smelting
 - herding
 - medicine

- The diagram below shows an instrument used in measuring weather.



- Which one of the following statements is **true** about the instrument shown above? It is used to
- determine the direction of wind
 - record changes in temperature
 - determine the atmospheric pressure
 - record the strength of wind

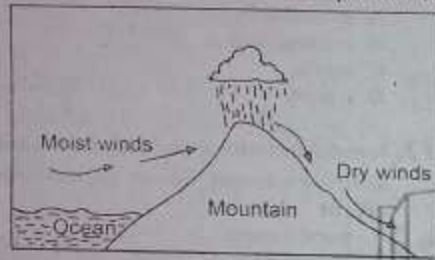
14. Which one of the following Kenyan communities belong to the same language groups?

- A. Abagusii, Maasai, Luo
- B. Burji, Somali, Rendile
- C. Agikuyu, Ogiek, Dorobo
- D. Waswahili, Teso, Sumburu

15. The revolution of the earth causes

- A. different seasons.
- B. day and night.
- C. formation of land and sea breeze.
- D. differences in time along different longitudes.

Use the diagram below to answer question 16.



16. The type of rainfall shown above is known as

- A. Cyclonic rainfall.
- B. Convective rainfall.
- C. El-nino.
- D. Relief rainfall.

17. Below are statements about a community that lived in Africa in the precolonial period.

- (i) They had a chief who ruled with assistance from elders.
- (ii) Their language had click sounds.
- (iii) they made decisions through a general consensus.
- (iv) They were organised into clans.
- (v) They were mainly animal keepers.

The community described above was the

- A. San
- B. Tswana
- C. Khoikhoi
- D. Soninke

18. One of the soil conservation measures in Kenya is

- A. dry farming.
- B. up-the-slope cultivation.
- C. heavy rainfall.
- D. siltation.

19. The main factor that influences population distribution in Eastern Africa is

- A. relief.
- B. climate.
- C. vegetation.
- D. employment opportunities.

20. The basic unit in the society is the

- A. clan.
- B. school.
- C. family.
- D. ageset.

21. Which one of the following countries is correctly matched with the European nation that colonised her?

- A. Equatorial Guinea - Portugal
- B. Botswana - Germany
- C. Rwanda - Britain
- D. Madagascar - France

22. The following are characteristics of a type of a climate region in Africa.

- i) It lies between 5° and 15° North and South of the Equator.
- ii) It experiences two dry seasons and two wet seasons.
- iii) It experiences high temperatures throughout the year.
- iv) It covers the largest section of Africa.

The climate region described above is likely to be

- A. equatorial climatic region.
- B. temperate climatic region.
- C. tropical climatic region.
- D. desert climatic region.

23. Which one of the following groups of pre-historic sites shows those from Kenya **only**?

- | | |
|-------------------------------------|-----------------------------------|
| A. Hyrax hills
Ntusi
Nsongezi | B. Nachola
Kanapoi
Lothagam |
| C. Engaruka
Laetoli
Isimilia | D. Nuri
Amara
Lalibela |

24. Which one of the following is a traditional method of catching fish?

- A. Harpooning.
- B. Purse seining.
- C. Trawling
- D. Long lining.

25. Chief Mkwawa of the Hehe resisted German rule **mainly** because

- A. the Germans took away land from Africans.
- B. the Hehe had superior weapons.
- C. German rule was harsh.
- D. Mkwawa wanted to show his military power.

26. Which one of the following is an economic use of soil? Soil is used in

- A. burying the dead.
- B. decorating warriors before going to war.
- C. making shrines and alters.
- D. growing of food and cash crops.

27. Which one of the following shows the **correct** meaning of weather? Weather refers to the

- A. changes in the atmosphere tracked for at least 30 years.
- B. amount of water vapour in the air.
- C. condition of the atmosphere in an area at a particular time.
- D. atmospheric condition that prevails on a large area over a long period of time.

28. The British used indirect rule in Northern Nigerian **mainly** because

- A. the cost of running the colony directly was high.
- B. African chiefs were ready to cooperate
- C. there was poor transport and communication networks.
- D. the system had succeeded in Uganda.

29. Which one of the following is **not true** about shifting cultivation?

- A. Neighbours produced the same type of crops.
- B. Farmers practised crop rotation in shifting cultivation.
- C. It was a form of subsistence farming.
- D. Farming was mainly done by hand.

30. Below are contributions of an African leader towards the struggle for independence.

- i) He fought for the abolishment of apartheid rule.
- ii) He formed a military group to fight for freedom.
- iii) He united all races in his country
- iv) He provided leadership to liberation movements.

The leader referred to in the above contributions is

- A. Leopold Sedat Senghor
- B. Nelson Mandela
- C. Abdel Nasser.
- D. Julius Nyerere.

31. Below are conditions necessary for the growing of a crop.

- i) High monthly temperatures of over 24°C
- ii) Rainfall of less than 750mm.
- iii) It can grow on any type of soil mainly in low lying areas.
- iv) Plenty of sunshine before harvesting.

The conditions listed above favour of growing of

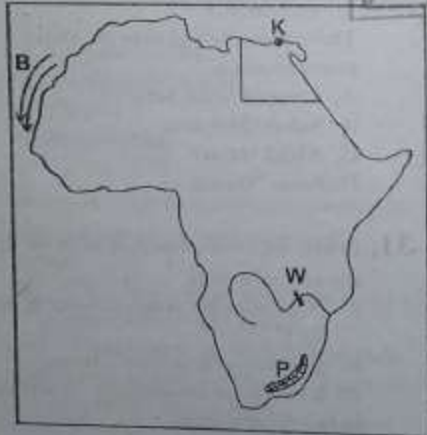
- A. sugarcane.
- B. maize.
- C. cotton.
- D. sisal.

32. European settler farmers introduced all the following **except**
- crop farming.
 - exotic breeds of cattle.
 - ranching.
 - plantation farming.

33. The **main** effect of HIV and AIDS on population growth is that it
- increases dependants in a country.
 - slows down population increase in a country.
 - reduces the fertility rate in a country.
 - lowers life expectancy in a nation.

34. The **best** way of protecting pupils against abuse in schools is by
- ensuring that pupils are busy with school work all the time.
 - educating the school community about child protection.
 - giving stiff punishments to child abusers.
 - educating children on their rights.

Use the map of Africa below to answer questions 35 to 38



35. The town marked **K** is called
- Cairo.
 - Benghazi.
 - Alexandria.
 - Tripoli.

36. The relief feature marked **P** is **likely** to be
- Kalahari semi-desert.
 - Cape ranges.
 - Bie plateau.
 - Drakensberg mountains.

37. The multi-purpose river project marked **W** is
- Kariba Dam.
 - Seven Forks.
 - Aswan High Dam.
 - Akosombo Dam.

38. The ocean current marked **B** is
- warm ocean current.
 - cold canary current.
 - cold Benguela current.
 - warm Mozambique current.

39. The **main** problem facing beef farming in Kenya and Tanzania is
- pests and diseases.
 - inadequate slaughterhouses.
 - drought and famine.
 - occasional attacks by wild animals.

40. The **main** contribution of tea farming in Kenya is that it
- promotes growth of towns.
 - leads to development of infrastructure.
 - creates employment opportunities.
 - is a source of foreign exchange.

41. Below are statements about a town in Kenya.
- It is situated in the middle of a rich farming area.
 - It is a tourist town.
 - It is home to an army barracks.
 - It is an administrative centre.
- The town described above is **likely** to be
- Nairobi
 - Eldoret
 - Kisumu
 - Nakuru

42. Below are statements about a mineral.
- It occurs in the sedimentary rocks of the earth.*
 - It is mined using a structure called a derrick.*
 - It is used in making chemicals.*
 - All forms of transport depend on it.*
- The minerals described above is **likely** to be
- petroleum.
 - gold.
 - copper.
 - soda ash.
43. The following are reasons for establishing jua kali industries in Kenya **except** to
- increase industrialization in the country.
 - provide school leavers with employment.
 - reduce use of electricity in the country.
 - help Kenyans to become self employed.
44. The **main** fishing area for both Kenya and Tanzania is
- Indian ocean.
 - Lake Victoria.
 - Lake Tanganyika.
 - River Nile.
45. The **main** problem affecting towns in Kenya is
- congestion in towns.
 - inadequate housing facilities.
 - pollution in towns.
 - lack of jobs.
46. Below are some lakes in Africa.
- Naivasha*
 - Caboga Bassa*
 - Karoti*
 - Mambara*
 - Kyoga*
 - Naxter*
- Which group of the lakes above consists of human made lakes **only**?
- (i), (ii), (vi)
 - (i), (iii), (v)
 - (iii), (iv), (v)
 - (iii), (iii), (vi)
47. Dennis, a std 8 pupil notices a sick elderly person along the road on his way home. The **best** action for Dennis to take is to
- call for help.
 - report to the nearest police station.
 - walk past the person and go home.
 - take the person to hospital.
48. Before setting up a poultry farm, the **main** factor to consider is availability of
- electricity.
 - poultry feeds.
 - ready market.
 - capital.
49. Which one of the following is **not true** about direct democracy?
- Citizens appoint officials to implement policies.
 - Power is in the hands of all citizens.
 - Citizens meet to make decisions and laws.
 - Citizens become owners of all laws governing them.
50. **Most** tourists visit Kenya in order to see
- good hotels.
 - wildlife.
 - Snow-capped mountains.
 - warm sandy beaches.
51. Which one of the following is **true** about the Organisation of African Unity (OAU)?
- It was formed mainly to improve trade in Africa.
 - All countries in Africa are members of OAU.
 - Its headquarters are in Lagos, Nigeria.
 - It was formed by independent countries in 1963.
52. Three of the following are duties of the headteacher in a primary school. Which one is **not**?
- Admitting pupils in the school.
 - Supervising duties performed by teachers.
 - Preparing the school block timetable.
 - Receiving all funds of the school.

53. Three of the following leaders were elected to the Legco in 1957. Who was **not**?
- A. Jomo Kenyatta.
 - B. Daniel arap Moi.
 - C. Oginga Odinga.
 - D. Thomas Joseph Mboya.
54. The constitution of Kenya states that the government is organised into the following **except**
- A. legislature.
 - B. executive.
 - C. the public service.
 - D. judiciary.
55. The **best** way of preventing human-wildlife conflict is by
- A. empowering the Kenya Wildlife Service (KWS).
 - B. arresting and punishing all poachers.
 - C. educating the public on importance of wildlife.
 - D. constructing electric fences around game parks.
56. The **most** effective method of resolving a conflict between two communities fighting over grazing land is by
- A. litigation.
 - B. dialogue.
 - C. mediation.
 - D. arbitration.
57. Which one of the following is **not** a business opportunity in Kenya?
- A. Smuggling goods at border points.
 - B. Commercial farming.
 - C. Trading activities in rural area.
 - D. Building houses.
58. Which one of the following forms of communication can be used to reach **most** people within the **shortest** time?
- A. E-mail
 - B. Telephone
 - C. Radio
 - D. Magazines
59. In Kenya member of parliament may lose a parliamentary seat if he/she is
- A. imprisoned for six weeks.
 - B. of sound mind.
 - C. elected as the chairperson of his/her clan.
 - D. declared bankrupt by a court of law.
60. The **main** role of the executive in Kenya is to
- A. interpret the law as per the constitution.
 - B. implement government policies.
 - C. make and amend laws.
 - D. oversee the electoral process during general election.

53. Three of the following leaders were elected to the Legco in 1957. Who was **not**?
- A. Jomo Kenyatta.
 - B. Daniel arap Moi.
 - C. Oginga Odinga.
 - D. Thomas Joseph Mboya.
54. The constitution of Kenya states that the government is organised into the following **except**
- A. legislature.
 - B. executive.
 - C. the public service.
 - D. judiciary.
55. The **best** way of preventing human-wildlife conflict is by
- A. empowering the Kenya Wildlife Service (KWS).
 - B. arresting and punishing all poachers.
 - C. educating the public on importance of wildlife.
 - D. constructing electric fences around game parks.
56. The **most** effective method of resolving a conflict between two communities fighting over grazing land is by
- A. litigation.
 - B. dialogue.
 - C. mediation.
 - D. arbitration.
57. Which one of the following is **not** a business opportunity in Kenya?
- A. Smuggling goods at border points.
 - B. Commercial farming.
 - C. Trading activities in rural area.
 - D. Building houses.
58. Which one of the following forms of communication can be used to reach **most** people within the **shortest** time?
- A. E-mail
 - B. Telephone
 - C. Radio
 - D. Magazines
59. In Kenya member of parliament may lose a parliamentary seat if he/she is
- A. imprisoned for six weeks.
 - B. of sound mind.
 - C. elected as the chairperson of his/her clan.
 - D. declared bankrupt by a court of law.
60. The **main** role of the executive in Kenya is to
- A. interpret the law as per the constitution.
 - B. implement government policies.
 - C. make and amend laws.
 - D. oversee the electoral process during general election.

PART II: RELIGIOUS EDUCATION
SECTION A
CHRISTIAN RELIGIOUS EDUCATION

61. After Adam and Eve disobeyed God, He punished them. Which one of following punishment was meant for Adam?
 A. He would be a wanderer.
 B. He would be subject to Eve.
 C. Increased pain during giving birth.
 D. He would work hard and toil in the land.
62. Which one of the following commands did God give to Noah?
 A. Run for your lives and don't look back or step in the valley.
 B. Have many children so that your descendant will live all over the earth.
 C. You will have to work hard and sweat to make the soil produce.
 D. You are cursed because the earth has opened its mouth for your brother's blood.
63. Which one of the following lessons do Christians learn from Joseph when he was in prison?
 A. We should overcome temptation.
 B. We should obey our parents.
 C. God always protect the innocent people.
 D. We should preach the good news to the prisoners.
64. Which one of the following is the **main reason** why the Hebrew midwives did not kill the baby boys as it was ordered by the King of Egypt?
 A. They feared God.
 B. They were bribed by the Hebrew women.
 C. They did not know how to kill the babies.
 D. They feared the Hebrew women.
65. When Moses went closer to the bush that was burning, God ordered him to remove his sandals because
 A. his sandals were dirty
 B. he was standing on a holy ground
 C. the sandals would catch fire
 D. God did not like the sandals.
66. Which one of the following ten commandments given to Moses by God shows that marriage should be honoured?
 A. Do not accuse anyone falsely.
 B. Observe the sabbath day and keep it holy.
 C. Do not commit murder.
 D. Do not commit adultery.
67. During the night of Exodus the Israelites were to observe the following in preparation for the Exodus. Which one was **not**? They were
 A. to smear blood on their doorposts.
 B. supposed to eat boiled meat.
 C. supposed to eat unleavened bread.
 D. supposed to eat bitter herbs.
68. Who among the following judges of Israel was led by the Holy spirit to fight the Midianites with only three hundred men?
 A. Samson
 B. Othniel
 C. Gideon
 D. Jephthah
69. (i) He was the most successful king of Israel.
 (ii) He brought the ark of covenant to Jerusalem.
 (iii) He united all the tribes of Israel.
 (iv) He made Jerusalem the centre of worship.
 Who among the following kings of Israel is described above?
 A. King David
 B. King Saul
 C. King Solomon
 D. King Rehoboam
70. The following were miracles performed by prophet Elisha. Which one was **not**?
 A. He unpoisoned the poisoners' stew.
 B. He made an axe head to float on water.
 C. He raised the son of the widow of Zarephath.
 D. He cursed the forty-two boys who jeered him.
71. Who among the following prophets prophesied the killing of the baby boys in Bethlehem by King Herod during the birth of Jesus? Prophet
 A. Jeremiah
 B. Isaiah
 C. Micah
 D. Joel
72. The **main lesson** that Christians learn from the announcement of the births of John the baptist and Jesus is that they should?
 A. Trust in God's power.
 B. Be persistent in prayer.
 C. Be humble before God.
 D. Be ready to do God's work.
73. Which one of the following gifts presented to Baby Jesus by the three wisemen is **correctly** matched with its meaning?
 A. Gold - priesthood
 B. Myrrh - death
 C. Frankincense - kingship
 D. Honey - glory

74. When John the baptist saw Jesus coming to be baptised he referred him to as the:
 A. prince of peace. B. lion of Judah.
 C. light of the Gentiles. D. lamb of God.
75. "When Jesus heard this, he was amazed at him and turning to the crowd following him, he said, "I tell you I have not found such great faith in Israel" Luke 7:9. Who was Jesus referring to in the above statements? The
 A. Roman Centurion. B. blind Bartimaeus.
 C. bleeding woman. D. paralysed man.
76. Which one of the following parables given by Jesus teaches how the word of God is received by people?
 A. The parable of the fig tree.
 B. The parable of the prodigal son.
 C. The parable of the sower.
 D. The parable of the last coin.
77. Which one of the following parables of Jesus teaches christians on praying without ceasing?
 A. Pharisee and the tax collector.
 B. The widow and the unjust judge.
 C. The unmerciful servants.
 D. The good samaritan.
78. When Jesus approached the towns of Bethphage and Bethany to the Mount of Olives, He sent the two of his disciples to a village ahead to bring him a colt. Mark 11:1-11. Who among the following disciples did he send?
 A. John and James B. Peter and James
 C. Peter and John D. Andrew and John
79. When Jesus was brought before Pilate during his arrest, He was accused of the following **except**
 A. claiming to be the Messiah.
 B. misleading the people.
 C. telling people not to pay taxes.
 D. claiming to be the King of Jews.
80. Jesus told his disciples to wait for the Holy spirit in the town of?
 A. Bethany B. Nazareth
 C. Bethlehem D. Jerusalem.
81. Which one among the following gifts of the Holy spirit helps one to believe in the things which you can't see?
 A. Prophecy B. Faith
 C. Faithfulness D. Speaking in tongues.
82. Which one of the following is the correct order of the four forms of African existence in African traditional religion?
 A. Unborn → living dead → living → ancestors
 B. Living → living dead → unborn → ancestors
 C. Unborn → living → living dead → ancestors → ancestors
 D. Living → unborn → living dead → ancestors → ancestors
83. Three of the following are reasons why circumcision was practiced in Traditional African communities except? The initiates
 A. were allowed to get married.
 B. passed from childhood to adulthood.
 C. became full members of their community.
 D. became members of the extended family.
84. On her way to school, Diana passed a one thousand shilling note and gave it to her classteacher. She later learnt that the money belonged to a needy widow who lived near the school and she was given back her money. What christian virtue did Diana portray through her action?
 A. Love B. Honesty
 C. Mercy D. Kindness
85. Through which one of the following ways can christian youths help to reduce the spread of HIV AIDS? By
 A. supporting those who are infected.
 B. avoiding being close to their opposite sex.
 C. living holy lives and having self control.
 D. attending guidance and counselling sessions.
86. Three of the following are examples of drug abuse. Which one is **not**?
 A. taking medicines prescribed by a doctor.
 B. Injecting yourself with a drug.
 C. Habitually depending on drugs.
 D. Taking medicine without doctors prescription.
87. You - deskmate Mwili has a habit of throwing waste paper in the school compound. What is the best action for you to take?
 A. Report her to the teacher on duty.
 B. Ask her to collect all the papers in the compound.
 C. Remind her on how to take care of the environment.
 D. Ask her friends to keep away from her.
88. Peter is a rich young man who lives in the midst of needy neighbours. As a christian, what is the best action for him to take?
 A. Ensure he has a very strong gate and fence.
 B. Invest his money in income generating projects.
 C. Move to a place where people of his class live.
 D. Provide jobs for his needy neighbours.

89. Anita is in Class Eight. She spends most of her free time visiting the sick in the hospitals and home praying for them and helping them. Which fruit of the Holy spirit does she **best** show?
 A. Kindness B. Patience
 C. Humility D. Tolerance.
90. Johann Rebman and Dr. Ludwing Krapf started the first mission school in Rabai mainly to
 A. stop slave trade
 B. help Africans get jobs
 C. help Africans live decent lives.
 D. help Africans be able to read the Bible.

SECTION B
ISLAMIC RELIGIOUS EDUCATION

61. "L. Alam Nashrah laka Swadirak
 2. Wawadhwaana anka waizrak
 3. Warafanna laka dhikrak
 4.
 The verse that follows in this chapter is
 A. Inna ma-al Usri yusra.
 B. Wa ilaa Rabbika lar-ghab.
 C. Fa Idhna faraghta fanswab.
 D. Fa lina ma-al Usri yusra.
62. Which chapter among the following chapters stresses on knowledge as an important component of Imaan?
 A. Surah Al-Maun B. Surah Al-Kafirun
 C. Surah Al-Alaq D. Surah Alim.
63. In the Surah Ad-Dhuha, Allah(s.w) reminds the prophet (p.b.u.h) that He found him wondering and He
 A. raised his fame B. gave him a shelter
 C. made him rich D. gave him direction.
64. All the following Surahs teach muslim faithfuls that they will be rewarded or punishment on the Last Day depending on ones deeds except one. Which one? Surah
 A. Al-Bayyinah B. Al-Humaza
 C. Al-Qaariah D. Al-Zalzalah.
65. In his attempt to destroy the holy Kaaba, Abrahah Ashram thought that he was fighting
 A. Abdal-Mutwallib
 B. Prophet Muhammad
 C. muslim business men
 D. Allah(s.w).

66. A man plants a tree or sow's a field from which men, animals and birds eat. The man who planted is rewarded for
 A. tax B. Swadaqa
 C. Kafuara D. Zakkat
67. Hadith, "Take advantage of five matters before five other matters: Your youth before old, your health before sickness, your wealth before poverty, your free before engagement and your life before death." This hadith encourages muslims to be
 A. generous B. punctual
 C. fast thinkers D. responsible
68. Islamic greetings are form of a dua in which muslims pray for all the following **except**
 A. handshake B. mercy
 C. peace D. blessings.
69. Complete the following hadith on purification correctly "..... is a means of purification and pleasing Allah."
 A. circumcision B. bathing
 C. taking Wudhu D. brushing teeth.
70. The following is a list of the six pillars of Iman. Belief in
 (i) The last day (ii) Allah
 (iii) Prophets (iv) Holy books
 (v) Qadar (vi) Angels
 Which one is the **correct** order of these pillar of Islam?
 A. iv, i, v, ii, vi, iii B. iii, v, vi, ii, i, iv
 C. ii, vi, iv, iii, i, v D. vi, iii, ii, v, i, iv
71. A mutawakkil is a muslim who
 A. fears Allah (s.w)
 B. relies on Allah(s.w)
 C. trusts in Allah(s.w)
 D. sacrifices for Allah(s.w)
72. The army of King Namrud threw prophet Ibrahim in fire to burn but the fire remained cool and safe for Ibrahim(A.S). This teaches muslims that
 A. prophets of Allah were created from fire
 B. prophet Ibrahim had powers over death
 C. Allah(s.w) has control over all things
 D. fire was friendly to Ibrahim(A.S).
73. Human beings and other creatures face so much danger in their life but Allah(s.w) always protect them because he is
 A. Al-Hafeedh B. Al-Hakam
 C. Al-Hayyu D. Al-Wahid

74. What among the following Angels is referred to as Al-Matakul minn?/angel
 A. Mikail (A.S) B. Israfil (A.S)
 C. Jibril (A.S) D. Israfil (A.S)
75. Which prophet of Allah is **not** in the list of the five Uhlul Uzm? Prophet
 A. Musa (A.S) B. Adam (A.S)
 C. Nuh (A.S) D. Issa (A.S)
76. Who is a Multadhur? A person who
 A. has just died.
 B. has just begun being sick.
 C. shows clear signs of death
 D. is recovering from sickness.
77. Which one of the following is a set of days which muslims can fast?
 A. Ayyamu l Baith
 B. Ayyamul Tashrik
 C. Ayyamud Iddain.
 D. Ayyamul Maadiudaat.
78. Which one of the following Hajj activities is **not** performed Seven times?
 A. Throwing stones at the stampid.
 B. Running between Swafa and Marwa.
 C. Going round the holy kaaba.
 D. Visiting the tomb of the prophet(S.A.W)
79. The following are occasions on which a muslim **one**?
 A. Instates of Janaba.
 B. To prepare for I or Friday.
 C. After washing a dead body.
 D. To prepare for Idd.
80. Who among the following Swahabas embraced Islam and for persecutions he underwent he always said Ahad! Ahad! Ahad!
 A. Uthman bin Affan
 B. Bilal bin Rabbah
 C. Abdallah bin Ubeyyi
 D. Zaid bin Thaabit
81. Which one of the following months of Islamic calendar is a sacred month?
 A. Shaaban B. Shawwal
 C. Rabiul Awwal D. Muharram
82. Which one of the following was the first event that demonstrated cooperation among muslims?
 A. The construction of the prophet's mosque.
 B. The migration of the prophet to Madina.
 C. The business activities at Shaam.
 D. Counter attack of the Abrahah's army.
83. In which of the following places did the prophet deliver his farewell speech?
 A. At Aqaba
 B. At Maqamu Ibrahim
 C. On mount Swafa
 D. Al Arafat.
84. Fir'aun was the King of
 A. Israel
 B. Canaan
 C. Egypt
 D. Madyaan.
85. The **main** reason why muslims should keep away from intoxicants is that
 A. it is a command of Allah
 B. they destroy the body health
 C. they make one spend extravagantly
 D. they lend to many other vices.
86. The prophet's mosque provided hospitality services by being a place of
 A. meeting trade caravans
 B. holding Nikah ceremonies
 C. planning war strategies
 D. lodging the way farers.
87. Which of the following sources of income is an un-lawful means of earning according to the Islamic Sharia? Work as
 A. a public toilet cleaner
 B. a money lender with interests
 C. a cemetery attendant
 D. an advocate in courts.
88. Which one of the following was **not** among the actions taken against the prisoners of badr war? Some
 A. were set free when they joined Islam
 B. were set free when they joined Islam
 C. paid ransom money to be set free
 D. were forgiven and set free.
89. Which one of the following is the Islamic perception on HIV/AIDS pandemic? It is a
 A. disease for the poor people
 B. punishment from Allah(S.W)
 C. temptation just like other temptations in life
 D. curse upon the immoral people
90. The difference between Idd and Friday festivals manner of conduct arise in all these areas **except** the
 A. time of the function
 B. number of rakaats in the Swafants
 C. order of reciting the Khotba sermon
 D. recommended place to carry out the function.