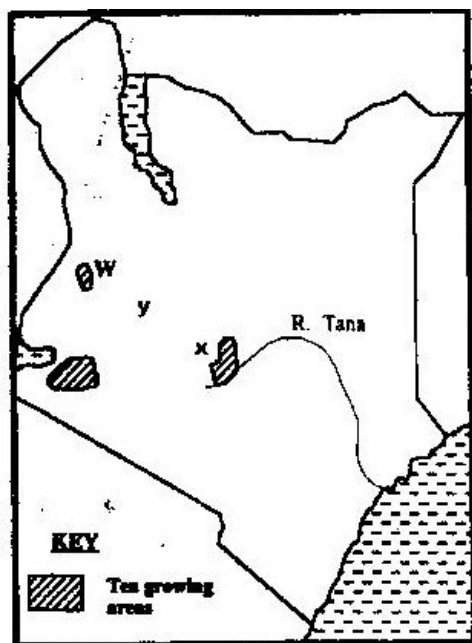


TRANSPORT AND COMMUNICATION.

1. State the causes of the decline in the use of letter writing as a means of communication in Kenya. 5 mks

2. (a) Give three advantages of railway over road transport. 3 mks

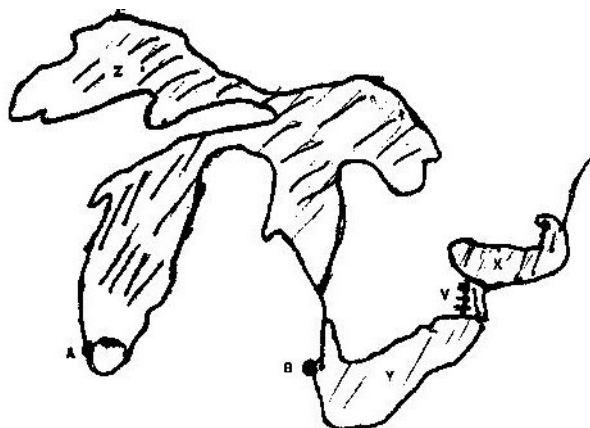
(b) The map below shows the extent of the oil pipeline in Kenya. Use it to answer question (b).



Name the towns marked X and Y which are served by the pipeline. 2 mks

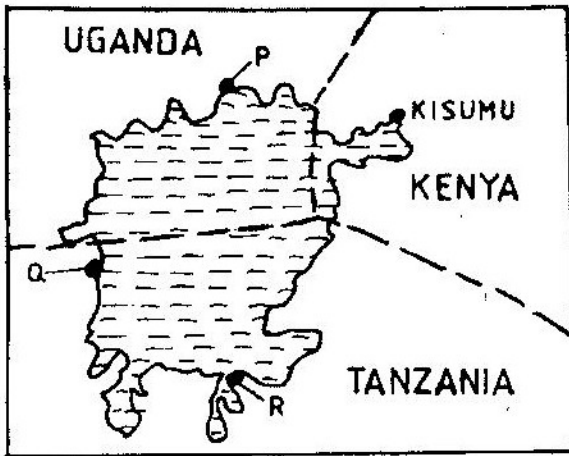
(c) State two disadvantages of using pipelines as means of transporting oil.

(d) Use the map drawn below of St. Lawrence sea way to answer the questions that follow.



- (i) Name the towns A and B
- (ii) Name lakes X, Y, Z
- (iii) Name canal marked V 3.

3. Use the sketch map of Lake Victoria below to answer question (a).



- (a) Name the lake ports marked P, Q, and R 3 mks
- (b) Outline two advantages of using containers while handling goods at the port of Kisumu.

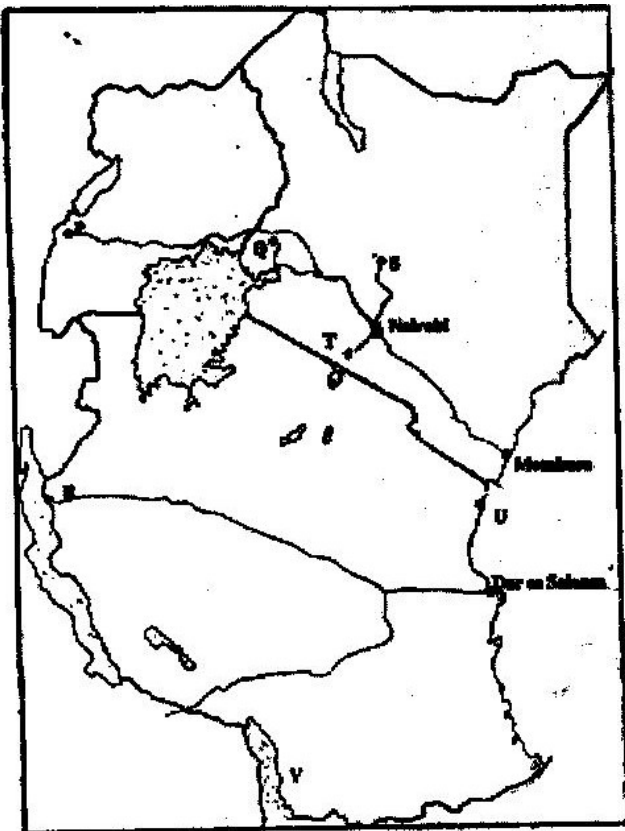
2 mks

4. (a) Give three reasons why road transport is used more than air transport in East Africa. 3 mks

- (b) In what three ways does Kenya benefit from air links with the rest of the world?

3 mks

5. Use the map of East Africa below to answer question (a).



- (a) Name the railway terminuses marked P, Q and R. 3 mks
- (b) Give the main commodities transported by the railway lines marked S and T. 2 mks
- (c) Name the port marked U and the lake marked V. 2 mks
- (d) State four reasons why road network is more widespread than railway network in East Africa. 4 mks
- (e) One of the problems facing road transport is the high frequency of accidents. Explain four conditions of roads in Kenya that may lead to accident.

8 mks

6. Give four benefits of the efforts the government is data in streamlining pubic transport sector.
4 mks
7. Outline two major problems affecting the development of trans- African highway in Africa.
2 mks
8. State two major problems hindering river transport in Kenya. 2 mks
9. Suggest three benefits of the proposed Southern bypasses to be constructed in Kenya.
3 mks
10. (a) Define containerization.
(b) Outline three merits of using containerization as a method of transportation.
3mks
11. (a) State three problems facing railway transport in Kenya. 3 mks
(b) Identify importance of railway transport in a country. 4 mks
12. Differentiate between 'transport' and communication. 4 mks
13. Apart from cell phones, mention other two modern methods of communication.
2 mks
14. State advantages of using cell phones communication. 3 mks
15. State reasons why St. Lawrence sea way was set up by the government of USA.
4 mks
16. (a) Define:
(i) Transport
(ii) Communication 4 mks
(b) Apart from water transport, list the other modes of transport. 2 mks
(c) Name the two types of waterways used in transportation. 2 mks
17. (a) Give three reasons why river transportation in Africa is poorly developed.

- 3 mks
- (b) Name the major ocean routes of the world. 3 mks
- (c) State the advantages of water transport. 6 mks
18. (a) Account for the poor rail linkages *j*, between the African countries. 2 mks
- (b) Name three trans-continental rail lines in Africa. 3 mks
- (c) What are the advantages and disadvantages of transporting goods by rail?
6 mks
19. (a) Why is railway transport less used in Africa? 4 mks
- (b) Name two railway systems in Africa. 2 mks
- (c) Discuss the advantages and disadvantages of railway transport. 4 mks
20. State the advantages of road transport. 4 mks
21. (a) What is containerization? 2 mks
- (b) Discuss advantages and disadvantages of containerization. 6 mks
- (c) State advantages and disadvantages of air transport. 6 mks
22. Identify the main types of communication. 4 mks
23. (a) Name two trans-African highways 2 mks
- (b) What are the benefits of trans-African highways? 2 mks
- (c) Explain the problems facing the trans-African highways. 4 mks
24. Discuss the role of transport and communication in economic development of Africa.
4 mks
25. (a) State the problems facing transport and communication in Africa. 4 mks
- (b) Outline the efforts being made to solve these problems. 4 mks
26. (a) (i) Identify the obstacles that face navigation along the St Lawrence
seaways. 3 mks

(ii) State ways in which navigation on the seaway was improved.

4 mks

(b) Explain the benefits of the St. Lawrence seaway on the economies of the United States of America and Canada.

6 mks