

SOCIAL STUDIES REVISION PAPER FOR CLASS THREE, 2014

AVAILABLE ONLINE AT:

Schools Net Kenya Consultancy

P.O. Box 8076 – 00200 Nairobi, Kenya | Tel: +254202319748

E-mail: infosnkenya@gmail.com | www.schoolsnetkenya.com

E-resources available online at www.schoolsnetkenya.com / Email: infosnkenya@gmail.com / Tel.: +254202319748 /

Order ANSWERS at www.schoolsnetkenya.com/order-e-copy

Source: Jesma, 2014


1. The pupil in charge of your class is called the class _____.

2. Write one school rule _____.

3. When a place is hot or cold, that is the _____ of the place.

4. People plant their crops during the _____ season.

5. Draw a church.



6. Many _____ make a sub-location.

7. The best weather for winnowing grains is when it is _____.
(calm, rainy, windy, sunny)

8. People who grow crops and keep animals are _____.

9. _____ is moving air.

10. People who live near us are called our _____.
(friends, enemies, neighbours, relatives)

11. A lot of rain causes _____.
(mud, drought, floods, slippery)

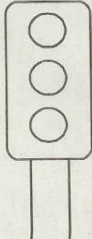
12. Our school is in _____ district.

13. Name one element of weather _____.

14. We wear gumboots when the weather is _____.

15. Name one natural feature _____.

16. Trees give us _____ for making tables and chairs.

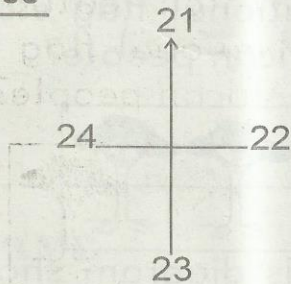
17.  This is a _____.

18. The colour orange on the above diagram means _____.

19. Hindus celebrate _____.

20. Muslims worship in the _____.

Name the points of the compass



21. _____

22. _____

23. _____


24. _____

25. People who use the road on foot are known as _____.

(walkers, runners, pedestrians, joggers)

26. Treating children unfairly is called _____.

27. Draw and name one weather sign



28. All children who go to school must wear _____ to look smart. (lesos, kitenge, uniform, kanzus)

29. Valleys, mountains, dams and hills are called _____.

30. The four main points of a compass are called _____ points. (major, cardinal, direction)

31. On 1st June, we celebrate _____ day. (Easter, Mashujaa, Madaraka)

32. We should always cross the road at _____.

33. Wild animals live in _____.











34. A _____ is the head of a division.

35. Lack of rain for a long time causes _____.

36. The first president of Kenya was called _____.

(Daniel arap Moi, Mwai Kibaki, Jomo Kenyatta, Uhuru Kenyatta)

Study the weather chart below and answer questions 37-40

Day	Morning	Afternoon
Monday		
Tuesday		
Wednesday		
Thursday		
Friday		

37. Which day did the children use umbrellas when going home? _____

38. Which day was good for washing clothes? _____

39. On Monday the weather was _____ and _____

40. How many days did people enjoy sunlight in the morning? _____

41. We go to school for _____ days in a week.

42.




This road sign shows that _____.

43. Animals kept at home are called _____ animals.

44. Name one part of a bicycle _____.

45. Which colour of our National flag stands for African people? _____

46.




This diagram shows that the weather is _____.

47. The current president of Kenya is called His Excellency _____.

48. Teachers usually work in a room in school called _____ room.

49. Draw a road sign showing bumps ahead.



50. The feature below shows a _____.

