

# GRADE 2 MID TERM 3 EXAM 2019

## MATHEMATICS ACTIVITIES


|        |  |         |
|--------|--|---------|
| NAME   |  |         |
| SCHOOL |  | GRADE 2 |

### Fill in missing numbers

1. (18) (16) (14) ( ) ( ) (8)
2. (40) (45) ( ) (55) ( ) (65)
3. (10) (20) (30) ( ) ( ) (60) (70)
4. (105) (106) (107) ( ) (109) ( )
5. (9) (12) ( ) (18) (21) ( ) (27)

### Place value


6. What is the place value of 8 in 386? \_\_\_\_\_
7.  $\begin{array}{ccccccc} \bigcirc & \bigcirc & \bigcirc & \bigcirc & \bigcirc & \bigcirc & \bigcirc \\ \bigcirc & \bigcirc & \bigcirc & \bigcirc & \bigcirc & \bigcirc & \bigcirc \end{array} = \square$   
\_\_\_\_\_ tens \_\_\_\_\_ ones
8.  $\begin{array}{cccccccc} \bigcirc & \bigcirc & \bigcirc & \bigcirc & \bigcirc & \bigcirc & \bigcirc & \bigcirc \\ \bigcirc & \bigcirc & \bigcirc & \bigcirc & \bigcirc & \bigcirc & \bigcirc & \bigcirc \end{array} = \square$   
\_\_\_\_\_ tens \_\_\_\_\_ ones
9.  $83 = \_ + 3$
10.  $\_ = 60 + 5$
11.  $492 = \_ + \_ + \_$
12. 6 tens = \_\_\_\_\_

13. 7 hundreds = \_\_\_\_\_
14. What is nine times 0 = \_\_\_\_\_
15. How many sides do three triangles have? \_\_\_\_\_
16. Multiply 3 by four = \_\_\_\_\_
17. Two boys have \_\_\_\_\_ horns
18. Kim had nineteen mangoes. He bought 8 more. How many mangoes did he have altogether? \_\_\_\_\_
19. How many days are in three weeks? \_\_\_\_\_
20.   
sugar cotton wool 2kg  
What is the mass of sugar? \_\_\_\_\_
21. Take away 9 from twenty = \_\_\_\_\_

### Divide

22.  $15 \div 3 =$
23.  $16 \div 8 =$

24. Share eight balls amongst 4 pupils. Each gets \_\_\_\_

25.   
 $\square \div 4 = 4$

26. Divide three by three = \_\_\_\_

Write in words or in symbols

27. Fifteen = \_\_\_\_

28. One hundred and twenty  
= \_\_\_\_

29.  $402 =$  \_\_\_\_

30.  $18 =$  \_\_\_\_

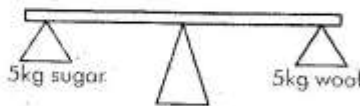
31. Sixty = \_\_\_\_

Measurement

32. 1 metre = \_\_\_\_ centimetres

33. Your school ruler has \_\_\_\_ centimetres. (100, 30, 20)

34. Distance is measured in \_\_\_\_ (kg, km, l)

35.   
Which one weighs more?  
\_\_\_\_

36. How heavy are you? \_\_\_\_

37. A day has \_\_\_\_ hours.

What is the time?



Show time

- 40.



12 O'clock

Addition and subtraction

41.  $53 + 22 =$  \_\_\_\_

42.  $18 - 9 =$  \_\_\_\_

43.  $\square + 3 = 23$

44.  $2 + 5 + 4 =$  \_\_\_\_

45.  $12 - \square = 0$

46. 
$$\begin{array}{r} 15 \\ - 9 \\ \hline \end{array}$$

47. 
$$\begin{array}{r} 46 \\ - 5 \\ \hline \end{array}$$

48. 
$$\begin{array}{r} 61 \\ + 36 \\ \hline \end{array}$$

49.  $12 + 0 + 3 =$  \_\_\_\_

50.  $10 + 10 + 5 =$  \_\_\_\_