

GRADE 2

MARKING SCHEME 2019

Fill in missing numbers

1. (18) (16) (14) (~~12~~) (10) (8)
2. \triangle 40 \triangle 45 \triangle 50 \triangle 55 \triangle 60 \triangle 65
3. \square 10 \square 20 \square 30 \square 40 \square 50 \square 60 \square 70
4. (105) (106) (107) (~~108~~) (109) (110)
5. (9) (12) (~~15~~) (18) (21) (~~24~~) (27)

Place value

6. What is the place value of 8 in 386? tens
7. $\begin{array}{ccccccc} \bigcirc & \bigcirc & \bigcirc & \bigcirc & \bigcirc & \bigcirc & \bigcirc \\ \bigcirc & \bigcirc & \bigcirc & \bigcirc & \bigcirc & \bigcirc & \bigcirc \end{array} = \begin{array}{|c|} \hline 76 \\ \hline \end{array} 13$
~~7~~ tens ~~6~~³ ones
8. $\begin{array}{cccccccc} \bigcirc & \bigcirc & \bigcirc & \bigcirc & \bigcirc & \bigcirc & \bigcirc & \bigcirc \\ \bigcirc & \bigcirc & \bigcirc & \bigcirc & \bigcirc & \bigcirc & \bigcirc & \bigcirc \end{array} = \begin{array}{|c|} \hline 17 \\ \hline \end{array}$
1 tens 7 ones
9. $83 = 80 + 3$
10. $65 = 60 + 5$
11. $492 = 400 + 90 + 2$
12. 6 tens = 60

13. 7 hundreds = 700

14. What is nine times 0 = 0
15. How many sides are do three triangles have? 9
16. Multiply 3 by four = 12
17. Two boys have 0 horns
18. Kim had nineteen mangoes. He bought 8 more. How many mangoes did he have altogether? 27
19. How many days are in three weeks? 21




What is the mass of sugar? 2kg

21. Take away 9 from twenty = 11

Divide

22. $15 \div 3 = 5$
23. $16 \div 8 = 2$

24. Share eight balls amongst 4 pupils. Each gets 2

25. 
 $16 \div 4 = 4$

26. Divide three by three = 1

Write in words or in symbols

27. Fifteen = 15

28. One hundred and twenty
= 120

29. 402 = Four hundred and two

30. 18 = Eighteen


31. Sixty = 60

Measurement

32. 1 metre = 100 centimetres

33. Your school ruler has 100 centimetres. (100, 30, 20)


34. Distance is measured in _____.
(kg, km, l)

35. 
 Which one weighs more?
Equal

36. How heavy are you? _____

37. A day has 24 hours.

What is the time?



3 o'clock A half past 12

Show time



12 O'clock

Addition and subtraction

41. $53 + 22 = \underline{75}$

42. $18 - 9 = \underline{9}$

43. $\boxed{20} + 3 = 23$

44. $2 + 5 + 4 = \underline{11}$

45. $12 - \boxed{12} = 0$

46.
$$\begin{array}{r} 15 \\ - 9 \\ \hline 6 \end{array}$$

47.
$$\begin{array}{r} 46 \\ - 5 \\ \hline 41 \end{array}$$

48.
$$\begin{array}{r} 61 \\ + 36 \\ \hline 97 \end{array}$$

49. $12 + 0 + 3 = \underline{15}$

50. $10 + 10 + 5 = \underline{25}$