

GRADE 3 END TERM 3 ANSWERS 2019

MATHEMATICS ACTIVITIES

Regroup the numbers

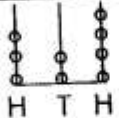
1. $243 = 200 + 40 + 3$

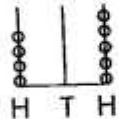
2. $815 = 800 + 10 + 5$


3. $104 = 100 + 4 + 0$


4. $89 = 80 + 9 + 0$

Answer correctly

5.  = 324

6.  = 405

7.  = 3 tens 3 ones

8.  = 2 Hundreds 4 Tens 1 Ones

9. 6 tens 3 ones = 63

10. 5 hundreds 8 tens 7 ones = 587

Add or subtract

11.
$$\begin{array}{r} 51 \\ + 20 \\ \hline 71 \end{array}$$

12.
$$\begin{array}{r} 39 \\ - 26 \\ \hline 13 \end{array}$$

13.
$$\begin{array}{r} 25 \\ - 11 \\ \hline 14 \end{array}$$

14.
$$\begin{array}{r} 25 \\ + 40 \\ \hline 65 \end{array}$$

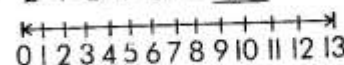
Break apart and add

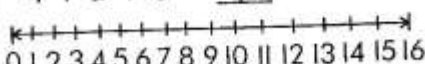
15.
$$\begin{array}{r} 46 \rightarrow 40 + 6 \\ + 23 \rightarrow 20 + 3 \\ \hline 69 \quad 60 \quad 9 \end{array}$$

16.
$$\begin{array}{r} 46 \rightarrow 40 + 6 \\ + 53 \rightarrow 50 + 3 \\ \hline 99 \quad 90 \quad 9 \end{array}$$

17.
$$\begin{array}{r} 16 \rightarrow 10 + 6 \\ + 7 \rightarrow 0 + 7 \\ \hline 23 \quad 2 \quad 3 \end{array}$$

Use number line

18. $2 + 5 + 5 = 12$


19. $4 + 2 + 3 = 9$


Work out

20. Take away 6 from 15 = 9

21. What is 14 plus 8 = 22

22. Multiply two by 10 = 20

23. A cow has 4 legs.
24. How many days make a week?
7
25. Divide 24 by six = 4
26. What is five times 4? = 20
27. What is the sum of 3, 7 and 9? = 19

What is the place value of 3 in

28. 321 hundreds
29. 839 tens
30. 943 ones

Divide

31. $16 \div 4 = \underline{4}$
32. $16 \div 2 = \underline{8}$
33. $28 \div 7 = \underline{4}$
34. $2 \div 1 = \underline{2}$
35. $30 \div 5 = \underline{6}$

36. $\begin{array}{|c|c|} \hline \text{oo} \\ \hline \end{array} \begin{array}{|c|c|} \hline \text{oo} \\ \hline \end{array} \begin{array}{|c|c|} \hline \text{oo} \\ \hline \end{array} \begin{array}{|c|c|} \hline \text{oo} \\ \hline \end{array}$

$8 \div \boxed{4} = 2$

Multiply

37. $4 \times 4 = \underline{4} + \underline{4} + \underline{4}$
 $\quad \quad \quad + \underline{4} = 16$
38. $2 + 2 + 2 = \underline{2} \times \underline{3}$
 $\quad \quad \quad = \underline{6}$

39. $\begin{array}{c} \text{oo} \text{ oo} \text{ oo} \text{ oo} \text{ oo} \\ \underline{3} \times \underline{5} = \underline{15} \end{array}$

40. $\begin{array}{c} \text{oooooo} \\ \text{oooooo} \\ \text{oooooo} \end{array} \underline{6} \times \underline{3} = \underline{18}$

41.

x	2	3	4	5
5	<u>10</u>	15	<u>20</u>	25

Complete: Fill in the missing numbers.

42. 100, 98, 96, 94, 92, 90, 88, 86
43. 44, 55, 66, 77, 88, 99

What is the time?




Nine o'clock



~~Six o'clock~~
Half Past Six

46. Which one has a bigger capacity? _____



47. You want to measure your exercise book. Which unit will you use? _____
(metres, centimetres, metres)
48. Nekesa had forty six sheep. She slaughtered six. How many remained? 40
49. A box has fifteen red pencils, three yellow ones and seven blue. How many pencils are there in total? 25
50. What X is five zero? 10 x 5