




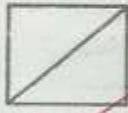







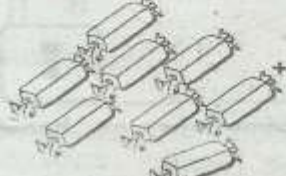
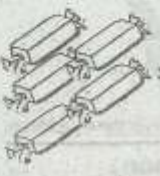


GRADE 2 MID TERM 2 EXAM 2019

MATHEMATICS ACTIVITIES ANSWER

SCHOOL	
Show numbers using objects	
<p>1. </p> <p>2. </p> <p>3. </p> <p>4. </p> <p>5. </p>	<p>14. 73 = <u>7</u> tens and 3 ones</p> <p>15. 10 = <u>1</u> tens and <u>0</u> ones</p> <p style="text-align: center;">Find the missing number</p> <p>16. 27, 21, 16, 12, <u>9</u></p> <p>17. 12, 14, 16, 18, <u>20</u></p> <p>18. 35, 30, 25, 20, <u>15</u></p> <p>19. 29, 38, 47, 56, <u>64</u></p> <p>20. 10, 11, 13, 16, <u>20</u></p> <p>21. Which one shows a half?</p> <div style="display: flex; justify-content: space-around; align-items: center;"> <div style="text-align: center;">  <u>A</u> ✓ </div> <div style="text-align: center;">  <u>B</u> </div> </div> <p>22. Which one shows a quarter?</p> <div style="display: flex; justify-content: space-around; align-items: center;"> <div style="text-align: center;">  <u>A</u> </div> <div style="text-align: center;">  <u>B</u> ✓ </div> </div> <p style="text-align: center;">Put together</p> <p>23.  +  = <u>14</u></p> <p>24.  +  = <u>19</u></p> <p>25.  +  = <u>13</u></p>
Fill in the missing numbers	
6. 50 <u>60</u> 70 80 90	
7. 86 <u>87</u> 88 89 90	
8. 34 33 32 31 <u>30</u>	
9. 40 38 <u>36</u> 34 32	
10. 16 18 20 <u>22</u> 24	
11. 69 = <u>6</u> tens and <u>9</u> ones	
12. 80 = 80 + _____	
13. <u>44</u> = 4 tens and 4 ones	

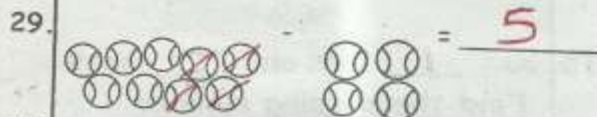
26. Gilbert had 4 pencils while Albert had 14 pencils. How many pencils did they have altogether? 18

27. $\begin{array}{r} 62 \\ +4 \\ \hline \end{array}$

66

Take away

28. $10 + 3 =$ 13




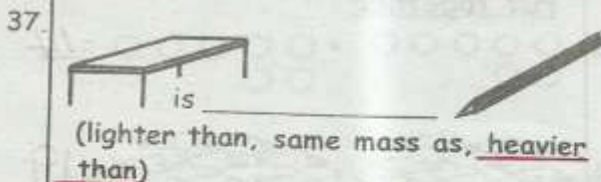
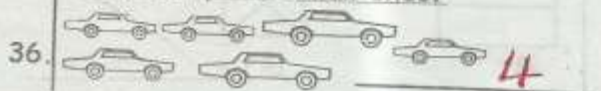
32. Mr. Andrew bought 16 sheep from Mr. Kamau. If 5 of the sheep died, how many sheep did Mr. Andrew remain with? 11

33. $\begin{array}{r} 80 \\ -60 \\ \hline \end{array}$

How many are long ones?



How many are small ones?



How many are the same



Who is lighter?



(Alice, Clement, Alice and Clement)

Which one holds less?



42. If today is Thursday, tomorrow will be

(Wednesday, Friday, Saturday)

43. Arrange from the first

(January, April, February, March)

January, February, March, April


44. How many sh. 5 coins are there in a sh. 20 coin? 4

45. How sh. 50 notes are equal to a sh. 100 note? 2

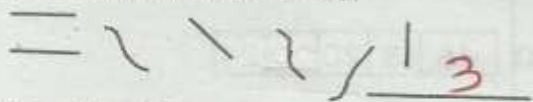
46. Tick a need.



47. Tick a want.



48. How many lines are curved?



49. Name the shape used to build the wall.



50. A sh. 1 coin is in the shape of triangle square circle