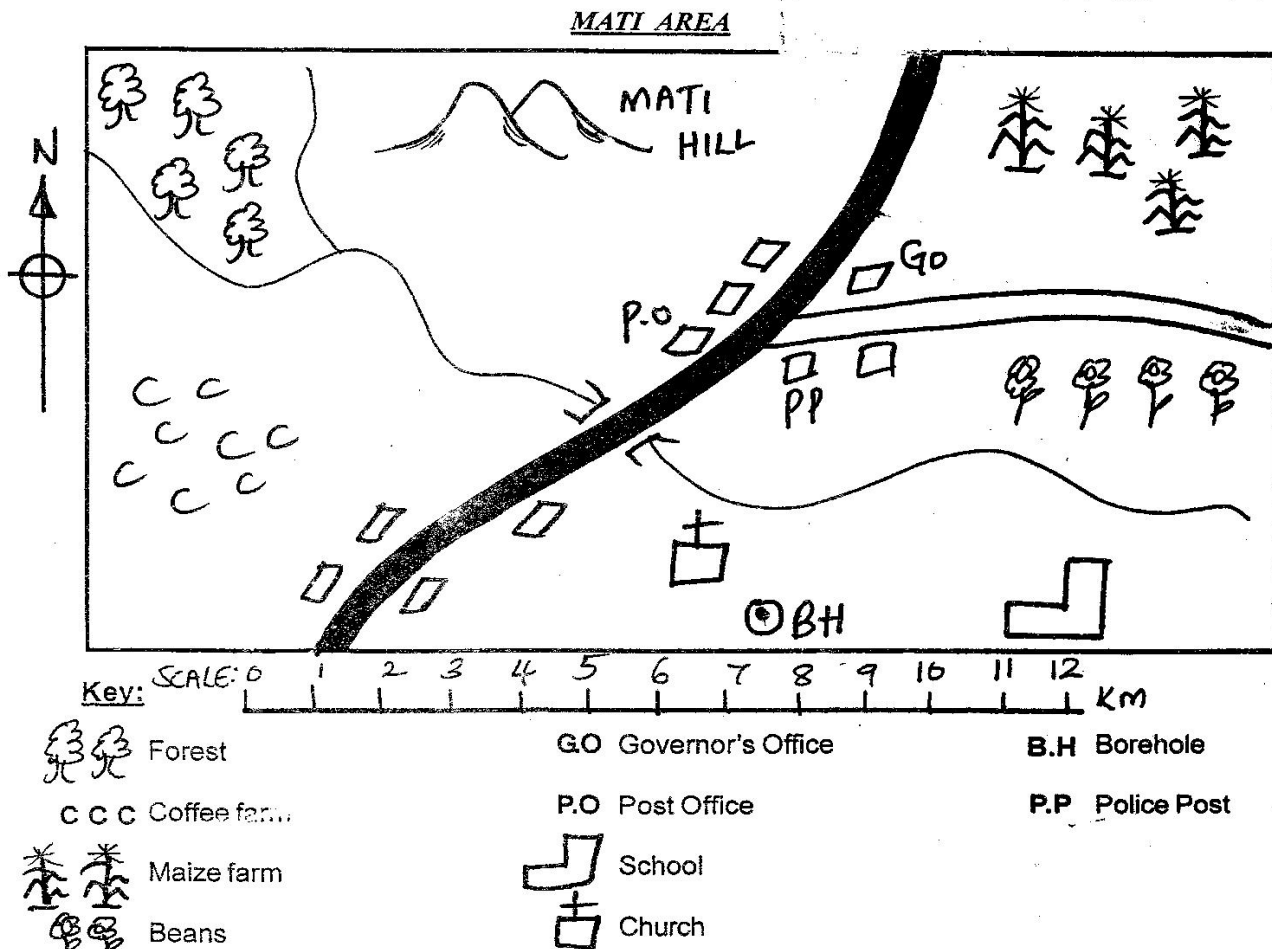


# STANDARD FOUR MID TERM 1 EXAMS-2019

## SOCIAL STUDIES AND CRE

1. Make sure that you have written on the answer sheet  
(i) Your name (ii) Name of your school

Time: 2hrs 15 mins




**Study the map of Mati Area and answer questions 1-7.**

- People in Mati area worship in a \_\_\_\_\_.  
A. forest B. church  
C. school D. Post Office
- Which one of the following is a cash crop in Mati area?  
A. Maize B. Forest C. Coffee D. Beans
- Which of the following is not a man-made feature in Mati area?  
A. Hill B. Borehole C. Bridge D. Road
- What is the direction of the forest from the borehole?  
A. North B. South  
C. North East D. North West

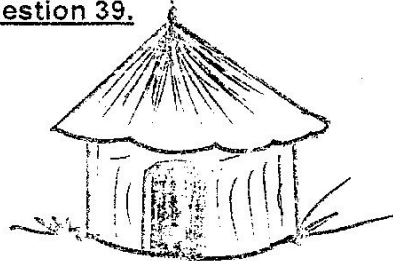
- Mati area is headed by \_\_\_\_\_.  
A. a chief B. pastor  
C. headteacher D. Governor
- What helps the people in Mati area to cross the river?  
A. The road B. The school  
C. The police D. The bridge
- The main means of transport in Mati area is \_\_\_\_\_.  
A. water B. air C. road D. railway
- Who among is not part of administration in the new constitution?  
A. Governor  
B. County representative  
C. Provincial Commissioner  
D. Deputy president

9. Which of the following communities used red ochre to decorate their bodies?  
A. Maasai B. Luo  
C. Akamba D. Agirima
10. A person can apply for an identity card at the age of \_\_\_\_\_.  
A. 21 years B. 25 years  
C. 18 years D. 35 years
11. Which of the following instruments is used to show the direction of a place?  
A. Compass B. Scale  
C. Windvane D. Key
12. Which type of soil is used in pottery?  
A. Sand B. Loam  
C. Clay D. Alluvial
13. Which one of the following is not a basic need?  
A. Car B. Food C. Shelter D. Clothing
14. Which one of the following is not a cardinal point?  
A. East B. West  
C. North D. South East
15. The following are poultry birds except.  
A. ducks B. chicken  
C. geese D. flamingo
16. The National Anthem has \_\_\_\_\_ stanzas.  
A. three B. four  
C. five D. two
17. People who walk on foot to the roads are called \_\_\_\_\_.  
A. walkers B. cyclist  
C. tourist D. pedestrians
18. A long period without rain is known as \_\_\_\_\_.  
A. famine B. drought  
C. desert D. sunshine
19. All the following are examples of the big five except.  
A. lion B. elephant C. camel D. buffalo
20. Below are various forms of communication. Which one was used in past?  
A. Telephone B. Radio  
C. Television D. Beating of drums
21. Which one of the following in Kenya is not a city?  
A. Nakuru B. Nairobi C. Mombasa D. Kisumu
22. Most of the houses in traditional African societies were built using \_\_\_\_\_.  
A. mud and sticks B. cements  
C. stones D. sands
23. Which of these forms of transport is best for transporting heavy goats on land?  
A. Water B. Air C. Road D. Railway
24. The road sign below means \_\_\_\_\_.




- A. round about B. round junction  
C. children crossing D. people crossing

25. The following are natural physical feature except.  
A. plateau B. plains  
C. valleys D. forests
26. Liquids and gases are mainly transported by \_\_\_\_\_.  
A. pipeline B. railway  
C. car D. road
27. Below are elements of a good map. Which one is not?  
A. Key B. Scale  
C. Compass D. Colours
28. We put on heavy clothes on a \_\_\_\_\_ day.  
A. cold B. sunny C. hot D. windy
29. Which one of the following is not gotten from forests?  
A. Firewood B. Herbs  
C. Timber D. Metals
30. Beef cattle are kept in \_\_\_\_\_.  
A. ponds B. dips C. forests D. ranches
31. Movement of people from one place to another is known as \_\_\_\_\_.  
A. tourism B. transport  
C. trading D. irrigation
32. Which one of the following is not found in the lakes?  
A. Plants B. Fish  
C. Crocodile D. Lion
33. Our way of life is our \_\_\_\_\_.  
A. culture B. religion  
C. history D. tradition
34. Which of the following items was not made by blacksmiths?  
A. Ropes B. Hoes  
C. Spears D. Arrow head
35. Areas which are flat are likely to be affected by \_\_\_\_\_ during heavy rains.  
A. drought B. famine  
C. floods D. landslides
36. A citizen is a person who belongs to a particular \_\_\_\_\_.  
A. ward B. famine  
C. country D. region
37. Special places for worship in the past were known as \_\_\_\_\_.  
A. synagogues B. shrines  
C. mosque D. churches
38. Which of these communities cannot be classified as Bantu?  
A. Akamba B. Mijikenda  
C. Borana D. Abagusii
- Use the diagram below to answer question 39.



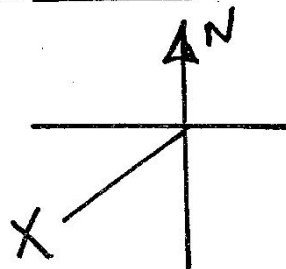
39. The diagram shows that \_\_\_\_\_.  
 A. bungalow. B. modern house  
 C. traditional hut D. manyatta
40. Which one is matched with the instrument measuring elements?  

Element	Instrument
A. Rainfall	Anemometer
B. Wind strength	Barometer
C. Humidity	Hygrometer
D. Air pressure	Raingauge
41. Dairy cattle are mainly kept for \_\_\_\_\_.  
 A. milk B. beef  
 C. meat D. hides and skin
42. Which day is labour day celebrated?  
 A. 1<sup>st</sup> June B. 12<sup>th</sup> December  
 C. 20<sup>th</sup> December D. 1<sup>st</sup> May
43. Moving air is called \_\_\_\_\_.  
 A. hill B. wind  
 C. inselberg D. rain
44. Growing flowers vegetation and fruits is known as \_\_\_\_\_.  
 A. mixed farming  
 B. agro-forestry  
 C. horticulture farming  
 D. dairy farming
45. Which one of the following is not a source of fish?  
 A. Rivers B. Lakes  
 C. Oceans D. Forests
46. The daily changes in atmosphere of a given place at a particular time is known as \_\_\_\_\_.  
 A. climate B. temperature  
 C. weather D. altitude
47. The official counting of people is known as \_\_\_\_\_.  
 A. voting B. election  
 C. census D. registration
48. Animals kept at home are known as \_\_\_\_\_.  
 A. wild animals B. domestic animals  
 C. home animals D. wildlife
49. A place where dead bodies are preserved is called a \_\_\_\_\_.  
 A. cemetery B. mortuary  
 C. hospital D. grave
- Study the diagram below is answer questions 52 - 53.



50. The type of house shown in the diagram is called a \_\_\_\_\_.  
 A. storey house B. hill  
 C. manyatta D. bungalow
51. Which of the following communities live in such kind of houses?  
 A. Luo B. Maasai  
 C. Giriama D. Agikuyu

52. Rainfall is measured in units called \_\_\_\_\_.  
 A. millimetres B. millilitres  
 C. degree celsius D. litres
53. The following colour is not found on our national flag. Which one?  
 A. Black B. Red  
 C. White D. Blue
54. Sick animals are treated by \_\_\_\_\_.  
 A. poachers B. veterinary doctors  
 C. herbalist D. medicine men
55. The four points of a compass are referred to as \_\_\_\_\_.  
 A. compass direction  
 B. points  
 C. points of a compass  
 D. cardinal points
56. Mountains, plateaus, hills, lakes, rivers and plains are all collectively known as \_\_\_\_\_.  
 A. physical feature B. man-made features  
 C. natural things D. sea features
57. Children without parents are known as \_\_\_\_\_.  
 A. street children B. beggars  
 C. orphans D. refugees
58. \_\_\_\_\_ gives us mutton and wool.  
 A. Goats B. Cows  
 C. Sheep D. Pigs
59. The point in the diagram marked X is known as \_\_\_\_\_.



- A. South B. South East  
 C. South West D. West
60. The first president of our country was called  
 A. Daniel Moi B. Uhuru Kenyatta  
 C. Jomo Kenyatta D. Raila Odinga

#### C.R.E

61. The story of creation is written in \_\_\_\_\_ book.  
 A. Genesis B. Exodus  
 C. Matthew D. Luke
62. Who among the following people was sent by God to free the Israelites from Egypt?  
 A. Noah B. Elijah  
 C. Moses D. Samuel
63. The Israelites fed on \_\_\_\_\_ when they were in the wilderness.  
 A. locusts B. milk  
 C. manna D. honey
64. When Jesus walked on water, He showed His power over \_\_\_\_\_.  
 A. demons B. death  
 C. salvation D. nature

65. The word Emmanuel means \_\_\_\_\_.  
A. Jesus Christ      B. God  
C. Rabil      D. God with us
66. During Jesus temptation, the devil told Jesus to change stone into \_\_\_\_\_.  
A. water      B. wine  
C. meat      D. bread
67. The disciples of Jesus received the Holy spirit in the day of \_\_\_\_\_.  
A. resurrection      B. pentecost  
C. Christians      D. Easter
68. The songs we sing for Christmas are called \_\_\_\_\_.  
A. carols      B. reggae  
C. lullabies      D. patriotic
69. The tax collector who went to pray with the Pharisee asked for \_\_\_\_\_.  
A. taxes      B. forgiveness  
C. food      D. money
70. The fifth book of the Bible is called \_\_\_\_\_.  
A. Matthew      B. Leviticus  
C. Exodus      D. Deutronomy
71. What was Jesus and His disciples doing when He washed their feet?  
A. Going to sleep  
B. Taking breakfast  
C. Having last supper  
D. Preparing to go for a journey
72. Zacharia the father of John the Baptist was a \_\_\_\_\_.  
A. angel      B. judge  
C. priest      D. king
73. Who helped Jesus carry the cross?  
A. Peter      B. Soldiers  
C. Simon of Cyrene      D. Mary His mother
74. Who among the following spent time doing good and helping the poor?  
A. Tabitha      B. Lydia  
C. Mary      D. Elizabeth
75. Which is the best action to take when we hurt others?  
A. Ask for forgiveness  
B. Ask the hurt person to keep quite  
C. Run away  
D. Ignore the issue
76. Which one of the following is a good quality of a leader?  
A. Proud      B. Peaceful  
C. Boastful      D. Selfish
77. People who die because of their faith are called \_\_\_\_\_.  
A. martyrs      B. believers  
C. saviours      D. disciples
78. When do we celebrate the birth of Jesus Christ?  
A. Easter holiday      B. Christmas  
C. Labour day      D. Madaraka day
79. In God's eyes we are all sinners and we should \_\_\_\_\_.  
A. ask for protection      B. ask for healing  
C. ask for miracle      D. ask for forgiveness
80. Who among the following was told by God to leave his land, father, mother and relatives to go to a new land?  
A. Moses      B. Abraham  
C. Daniel      D. Noah
81. Which one of the following is not learnt in school?  
A. Hatred      B. Love  
C. Kindness      D. Sharing
82. Judas Iscariot betrayed Jesus for \_\_\_\_\_ coins.  
A. 100      B. 12  
C. 30      D. 20
83. Jesus and His parents were refugees is \_\_\_\_\_.  
A. Canaan      B. Bethlehem  
C. Nazareth      D. Egypt
84. The story of Ananias and his wife Saphira teaches Christians to be \_\_\_\_\_.  
A. honest      B. disobedient  
C. selfish      D. courageous
85. Which of the following should we do to our neighbours?  
A. Hate them  
B. Love them only a little  
C. Deny them to come to our homes  
D. Love them as we love ourselves
86. The traditional role of boys in the traditional African communities was \_\_\_\_\_.  
A. advising those who misbehaved  
B. cooking food  
C. defending the community against enemies  
D. looking after the babies
87. Who among the following people was stoned to death because of his faith?  
A. John      B. Stephen  
C. Samuel      D. David
88. Which of the following did people in African traditional society not believe?  
A. Creator is God      B. Sacrifices  
C. Holy spirit      D. Offering
89. Which is the best time to pray?  
A. Always  
B. When taking meals  
C. When going to bed only  
D. When there are problems only
90. In the early church, Christians met in the \_\_\_\_\_ to pray and worship God.  
A. mosque      B. temple  
C. shrine      D. mugumo tree