


STANDARD FOUR MID TERM 1 EXAMS-2019

SCIENCE

1. Make sure that you have written on the answer sheet
(i) Your name (ii) Name of your school









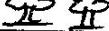

Time: 1hr 40 mins

1. Which one of the following is **best** for removing food particles between the teeth?
A. Twig B. Match stick
C. Dental floss D. Tooth pick
2. Which one of the following types of clouds brings heavy rainfall?
A. Cirrus B. Nimbus
C. Stratus D. Cumulus
3. The front teeth that appear first are called _____.
A. molars B. pre-molars
C. incisors D. canine
4. _____ depends on weather to do his work.
A. Farmer B. Optician
C. Policeman D. Dentist
5. Which one of the following is **not** good for strong and healthy tooth?
A. Exercising teeth
B. Drinking milk
C. Brushing teeth
D. Eating sugary foods
6. True insects have _____ parts of the body.
A. 2 B. 4
C. 3 D. 6
7. The type of weed that has black fruits and husks is called _____.
A. sodom apple B. wandering jew
C. black jack D. oxalis
8. Drinking water is boiled in order to _____.
A. kill germs B. remove soil
C. make it hot D. reduce smell
9. The disease AIDS is caused by a virus called _____.
A. HIV B. parasite
C. AIDS D. bacteria
10. Our clothes dry fast when it is _____.
A. hot and rainy B. windy and rainy
C. hot and windy D. rainy and cold
11. What do we call movement of animals in water?
A. Flying B. Swimming
C. Slithering D. Crawling
12. The phase of the moon shown below is known as _____.
- 
- A. full moon B. new moon
C. crescent D. gibbous
13. The last four teeth that grow later in adults stage are called _____.
A. permanent teeth B. deciduous teeth
C. milk teeth D. wisdom teeth

38. Which one of the following is **true** about molars?
- A. There are two molars in each jaw
 B. There are two molars in each side of the jaw
 C. There are three molars in each side of jaw
 D. Molars are used for chewing food.
39. Which of the following is **not** advisable to use while cleaning the teeth?
- A. Salty water B. Warm water
 C. Toothpaste D. Toothpick
40. The teeth that grow to replace the shed off teeth are called _____.
- A. milk teeth B. wisdom teeth
 C. artificial teeth D. permanent teeth
41. The following are items found at home. Which one of them should **not** be shared?
- A. Toothpaste B. Utensils
 C. Bathrooms D. Handkerchief
42. Blunt cutting tools should be _____.
- A. oiled B. sharpened
 C. painted D. cleaned
43. Animals have different methods they use to escape from their enemies. _____ changes its colour to hide from the enemies.
- A. Termite B. Louse
 C. Bat D. Chameleon
44. One of the following is the **main** source of heat and light. Which one?
- A. Sun B. Star
 C. Electricity D. Charcoal

45. The most common way of spreading HIV/AIDS is by _____.
- A. sexual intercourse B. sharing toothbrush
 C. breast feeding D. blood transfusion

Standard 4 pupils made the weather observations shown below. Use it to answer questions 46 - 49.

Day	Morning	Afternoon
Monday		
Tuesday		
Wednesday		
Thursday		
Friday		











46. The weather on Wednesday was _____.
- A. sunny and windy B. rainy and cloudy
 C. rainy and windy D. sunny and cloudy
47. On which day did the pupils go to school with umbrellas?
- A. Monday B. Tuesday
 C. Friday D. Thursday
48. The **best** day for drying farm harvest was ____.
- A. Friday B. Tuesday
 C. Monday D. Thursday
49. Which days had sunny conditions in the afternoon?
- A. Tuesday and Friday
 B. Monday and Tuesday
 C. Friday and Monday
 D. Tuesday and Wednesday
50. Scientists who study weather are called _____.
- A. meteorology B. weather scientist
 C. astronauts D. meteorologists

26. Which one is a harmful animal?
- A. Termite
 - B. Fish
 - C. Goat
 - D. Sheep
27. The following are examples of poultry. Which one is **not**?
- A. Ostrich
 - B. Duck
 - C. Turkey
 - D. Chicken
28. Which one of the practices **does not** show care for animals?
- A. Proper feeding
 - B. Providing water
 - C. Providing shelter
 - D. Overworking them
29. The following materials can be used to model clouds. Which one can be used to model cumulus clouds?
- A. Steel wool
 - B. Clay
 - C. Feather
 - D. Cotton wool
30. Insects use _____ for breathing.
- A. gills
 - B. spiracles
 - C. lungs
 - D. skin
31. Which of the food below helps in exercising the teeth?
- A. Milk
 - B. Sugarcane
 - C. Cooked bananas
 - D. Ripe bananas
32. A snake moves by _____.
- A. jumping
 - B. slithering
 - C. hopping
 - D. flying
33. We should not touch blood from other people **mainly** because _____.
- A. it stains our hands
 - B. it makes us dirty
 - C. it produces colour
 - D. it can spread HIV/AIDS
34. The sticky coat found on the surface of teeth is called _____.
- A. cavities
 - B. plaque
 - C. bad breath
 - D. gingivitis
35. The plants below grow in our environment. Which one of them grows very well in dry places?
- A. Cactus
 - B. Banana
 - C. Pineapples
 - D. Water lillies
36. Our shadow is shortest at what time?
- A. Early in the morning
 - B. Late in the evening
 - C. Midnight
 - D. Middy
37. The following are types of soil. Which of them is the **best** for farming?
- A. Sand
 - B. Loam
 - C. Clay
 - D. Sand with clay

38. Which one of the following is **true** about molars?
- A. There are two molars in each jaw
 B. There are two molars in each side of the jaw
 C. There are three molars in each side of jaw
 D. Molars are used for chewing food.
39. Which of the following is **not** advisable to use while cleaning the teeth?
- A. Salty water B. Warm water
 C. Toothpaste D. Toothpick
40. The teeth that grow to replace the shed off teeth are called _____.
- A. milk teeth B. wisdom teeth
 C. artificial teeth D. permanent teeth
41. The following are items found at home. Which one of them should **not** be shared?
- A. Toothpaste B. Utensils
 C. Bathrooms D. Handkerchief
42. Blunt cutting tools should be _____.
- A. oiled B. sharpened
 C. painted D. cleaned
43. Animals have different methods they use to escape from their enemies. _____ changes its colour to hide from the enemies.
- A. Termite B. Louse
 C. Bat D. Chameleon
44. One of the following is the **main** source of heat and light. Which one?
- A. Sun B. Star
 C. Electricity D. Charcoal

45. The most common way of spreading HIV/AIDS is by _____.
- A. sexual intercourse B. sharing toothbrush
 C. breast feeding D. blood transfusion

Standard 4 pupils made the weather observations shown below. Use it to answer questions 46 - 49.

Day	Morning	Afternoon
Monday		
Tuesday		
Wednesday		
Thursday		
Friday		

46. The weather on Wednesday was _____.
- A. sunny and windy B. rainy and cloudy
 C. rainy and windy D. sunny and cloudy
47. On which day did the pupils go to school with umbrellas?
- A. Monday B. Tuesday
 C. Friday D. Thursday
48. The **best** day for drying farm harvest was _____.
- A. Friday B. Tuesday
 C. Monday D. Thursday
49. Which days had sunny conditions in the afternoon?
- A. Tuesday and Friday
 B. Monday and Tuesday
 C. Friday and Monday
 D. Tuesday and Wednesday
50. Scientists who study weather are called _____.
- A. meteorology B. weather scientist
 C. astronauts D. meteorologists