

# STANDARD THREE

## END TERM 1 EXAM 2018

### MATHEMATICS

<b>NAME :</b>	
<b>SCHOOL :</b>	

Fill in the missing numbers.

1. 200, 300, \_\_\_\_\_  
\_\_\_\_\_ 900

2. 120, 121, \_\_\_\_\_

Write the numbers in words or symbols.

3. 70 \_\_\_\_\_

4. One hundred and twenty  
\_\_\_\_\_

5. Thirty five \_\_\_\_\_

6. Fourteen \_\_\_\_\_

Add

7. 
$$\begin{array}{r} 31 \\ + 24 \\ \hline \end{array}$$

8. 
$$\begin{array}{r} 93 \\ + 41 \\ \hline \end{array}$$

9. 
$$\begin{array}{r} 723 \\ + 206 \\ \hline \end{array}$$

10. 
$$\begin{array}{r} 39 \\ + 14 \\ \hline \end{array}$$

11.  $17 + 26 + 94 =$  \_\_\_\_\_

12. 
$$\begin{array}{r} 809 \\ + 146 \\ \hline \end{array}$$

13. 16 = \_\_\_\_\_ tens \_\_\_\_\_ ones.

14. 135 = \_\_\_\_\_ hundreds \_\_\_\_\_ tens  
\_\_\_\_\_ ones.

Subtract

15. 
$$\begin{array}{r} 58 \\ - 3 \\ \hline \end{array}$$

16. 
$$\begin{array}{r} 17 \\ - 9 \\ \hline \end{array}$$

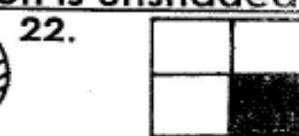
17. 
$$\begin{array}{r} 97 \\ - 16 \\ \hline \end{array}$$

18. 
$$\begin{array}{r} 345 \\ - 144 \\ \hline \end{array}$$

19. 
$$\begin{array}{r} 63 \\ - 45 \\ \hline \end{array}$$

20. 
$$\begin{array}{r} 600 \\ - 200 \\ \hline \end{array}$$

What fraction is unshaded?



23. Half of 6 = \_\_\_\_\_

Multiply

24.  $\frac{1}{2}$  of 6 = \_\_\_\_\_

25.  $4 \times 5 =$  \_\_\_\_\_

26.  $10 \times 3 =$  \_\_\_\_\_

27.  $6 \times 3 =$  \_\_\_\_\_

### Divide

28.  $9 \div 3 =$  \_\_\_\_\_

29.  $8 \div 4 =$  \_\_\_\_\_

30.  $20 \div 5 =$  \_\_\_\_\_

31. There are \_\_\_\_\_ days in a week.

32. Sunday \_\_\_\_\_, Tuesday, wednesday

33. We come to school for \_\_\_\_\_ days.

### Arrange the numbers from the smallest to the largest.

34. 7, 4, 10, 9, 3, 20,  
\_\_\_\_\_

35. 21, 28, 7, 14, 42, 35,  
\_\_\_\_\_

36. \_\_\_\_\_ is the third month of the year.

37. 2 cows have \_\_\_\_\_ legs.

38. What is the time?  
\_\_\_\_\_



### Fill in the missing numbers.

39.  $3 \times \square = 27$

40.  $15 - \square = 10$

41.  $8 + \square = 14$

42. Take away 8 from 16 = \_\_\_\_\_

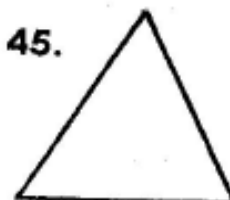
43. Musembi had 40 goats. he sold 12 goats. He was left with \_\_\_\_\_ goats.

### Name the shapes.


44.



45.



46.



47.  $\begin{array}{r} 272\text{m} \\ -227\text{m} \\ \hline \end{array}$

48.  $\begin{array}{r} 468\text{m} \\ +88\text{m} \\ \hline \end{array}$

49.  $9 - \square = 7$

50.  $6 - \square = 4$