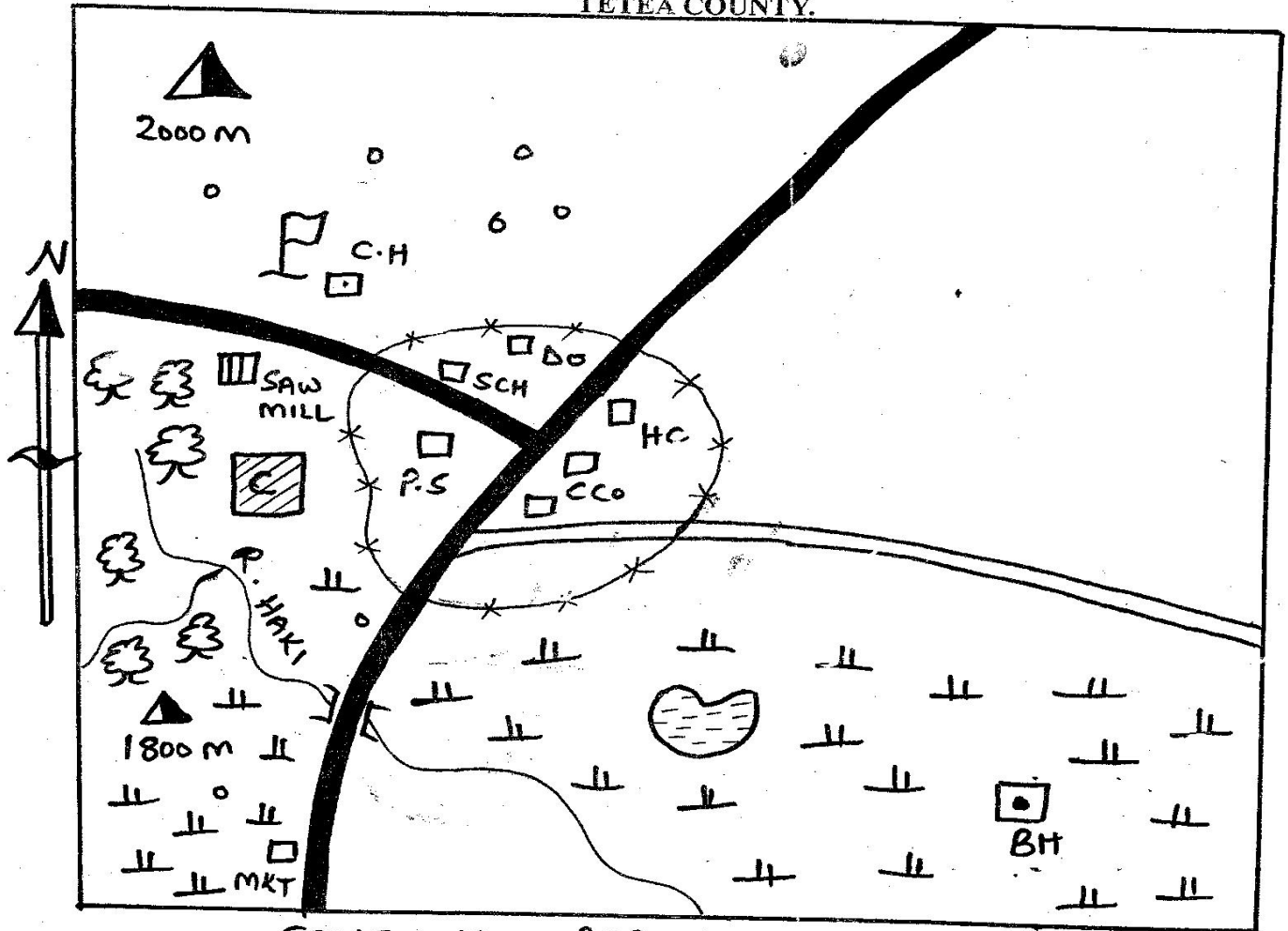


# STANDARD SEVEN END TERM THREE EXAM 2017, SOCIAL STUDIES/RE

## SECTION A

### SOCIAL STUDIES

#### TETEA COUNTY.




Key:-

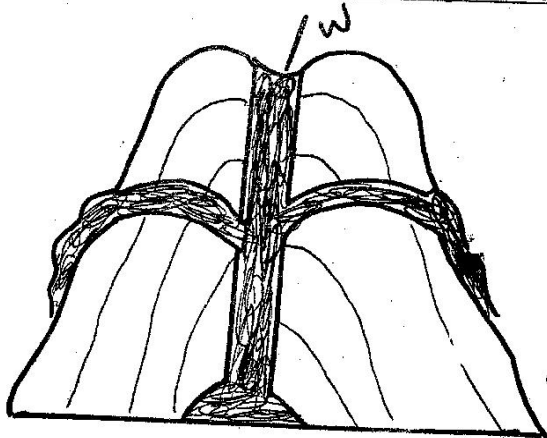
SCALE 1CM REP 10 KM

	Tarmac road		Murram road		Bridge		Houses
	Permanent houses		Town boundary		Hills		Coffee plantation
	Forest		Shrubs		Swamp		H.C:- Health Centre
	SCH:- School		CH		County headquarter		P.S:- Police station
	B.H:- Bore hole		Mkt:- Market		C.C.O:- County Council Office		

Study the map of TETEA COUNTY and answer the questions that follows.

1. The general direction of Haki river is from \_\_\_\_  
A. NE to SE                      B. NW to SW  
C. SW to NW                      D. West to South
2. The climate experienced in the Southern part of the Tetea area is \_\_\_\_  
A. cool and wet  
B. cool and dry  
C. hot and dry  
D. hot and wet
3. Tetea county is administered by \_\_\_\_  
A. a district commission  
B. governor  
C. chief  
D. a district officer
4. What is the approximate length of the murram road?  
A. 12 km                              B. 120 km  
C. 123 km                              D. 100 km
5. What is the direction of coffee plantation from the swamp?  
A. North East                      B. South West  
C. South East                      D. North West
6. The main economic activity carried out in Tetea county is \_\_\_\_  
A. subsistence farming  
B. cattle keeping  
C. cash crop farming  
D. mining
7. The settlement in Tetea county can be described as \_\_\_\_  
A. linear                              B. sparse  
C. dense                              D. nucleated
8. The earth turns about its axis like a spinning ball. This movement is called \_\_\_\_  
A. seasonality  
B. orbit  
C. revolution  
D. rotation of the earth
9. The main problem threatening forest vegetation in Eastern Africa is \_\_\_\_  
A. high temperature  
B. insects such as locust  
C. deforestation  
D. wild animals
10. All the following towns in Kenya are crossed by the equator **EXCEPT** \_\_\_\_  
A. Nyahururu                      B. Nakuru  
C. Nanyuki                          D. Hagadrera
11. Which of the following pre historic sites is **NOT** found in Kenya?  
A. Kariandusi  
B. Rusinga island  
C. Koobi fora  
D. a far depression
12. The Nyamwezi chiefs (Ntemi) ruled with the heir of soldiers called \_\_\_\_  
A. Vatwale                          B. Mteko  
C. Rugaruga                          D. Wanyampala
13. The miombo woodland of Tanzania are examples of \_\_\_\_  
A. a tropical rain forest  
B. savannah grass land  
C. woodland savannah  
D. mangrove forest
14. The diagram below represents \_\_\_\_  
  
A. a sea breeze  
B. a land breeze  
C. relief rainfall formation  
D. conventional rainfall
15. Which of the following types of fish is caught in Indian ocean?  
A. Tilapia                              B. Nile perch  
C. Mud fish                              D. Tuna
16. Which of the following factors will lead to a slow population growth?  
A. Improved medical care  
B. Early marriages  
C. Late marriages  
D. Polygamy

The diagram below shows the formation of a physical feature. Use it to answer questions 17-18

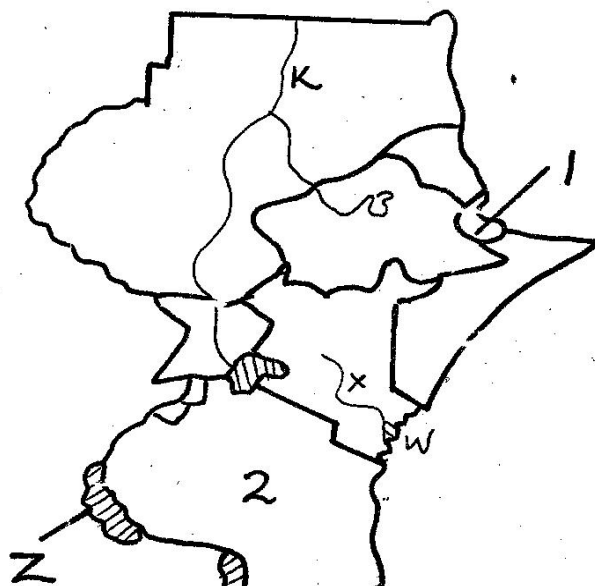


- The part of the diagram marked W is called  
 A. magma B. dyke  
 C. crater D. concrete
18. Which of the following mountains were formed as a result of the above process?  
 A. Usambara B. Ruwenzori  
 C. Virunga D. Atlas
19. In which climate zone would you find hot, dry, summer cool wet winters?  
 A. Desert B. Tropical  
 C. Equatorial D. Mediterranean
20. The headquarter of EAC are in \_\_\_\_\_  
 A. Tanzania B. Uganda  
 C. Ethiopia D. Kenya
21. Which one of these relief region is the smallest in Kenya?  
 A. Rift valley  
 B. Highlands  
 C. Coastal lowland  
 D. Lake region
22. According to the Kenyan constitution one is entitled to become a member of parliament at the age of \_\_\_\_\_  
 A. 21 years B. 18 years  
 C. 33 years D. 35 years
23. Kenya was a colony of the \_\_\_\_\_  
 A. French B. British  
 C. German D. Portuguese
24. Large farms where cattle are kept for beef is called \_\_\_\_\_

- A. Naivasha B. large farms  
 C. Lord Dalamere D. ranches

25. The main tourist attraction in Kenya is \_\_\_\_  
 A. climate  
 B. scenery  
 C. historical sites  
 D. wild life

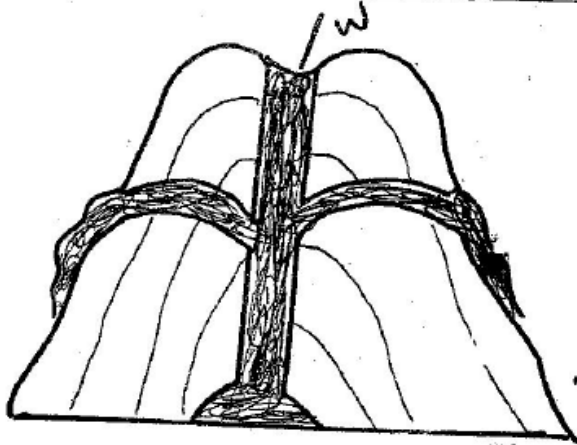
Study the map below and answer questions that follows 26 - 28.



26. The lake marked Z is \_\_\_\_\_  
 A. Magadi B. Turkana  
 C. Tanganyika D. Victoria
27. The river marked X is \_\_\_\_\_  
 A. Juba  
 B. Athi  
 C. Ewaso Nyiro  
 D. Tana
28. The river marked K is \_\_\_\_\_  
 A. Tana B. Athi  
 C. Nile D. Turkwel
29. Which of the following countries in Eastern Africa got independence last?  
 A. 3 B. 1  
 C. 2 D. 3
30. Which of the following counties in Eastern Africa was a colony of the German?  
 A. 1 B. 4  
 C. 2 D. 3



The diagram below shows the formation of a physical feature. Use it to answer questions 17-18



- The part of the diagram marked W is called
- |           |             |
|-----------|-------------|
| A. magma  | B. dyke     |
| C. crater | D. concrete |
18. Which of the following mountains were formed as a result of the above process?
- |             |              |
|-------------|--------------|
| A. Usambara | B. Ruwenzori |
| C. Virunga  | D. Atlas     |
19. In which climate zone would you find hot, dry, summer cool wet winters?
- |               |                  |
|---------------|------------------|
| A. Desert     | B. Tropical      |
| C. Equatorial | D. Mediterranean |
20. The headquarter of EAC are in \_\_\_\_\_
- |             |           |
|-------------|-----------|
| A. Tanzania | B. Uganda |
| C. Ethiopia | D. Kenya  |
21. Which one of these relief region is the smallest in Kenya?
- |                    |
|--------------------|
| A. Rift valley     |
| B. Highlands       |
| C. Coastal lowland |
| D. Lake region     |
22. According to the Kenyan constitution one is entitled to become a member of parliament at the age of \_\_\_\_\_
- |             |             |
|-------------|-------------|
| A. 21 years | B. 18 years |
| C. 33 years | D. 35 years |
23. Kenya was a colony of the \_\_\_\_\_
- |           |               |
|-----------|---------------|
| A. French | B. British    |
| C. German | D. Portuguese |
24. Large farms where cattle are kept for beef is called \_\_\_\_\_

- |                  |                |
|------------------|----------------|
| A. Naivasha      | B. large farms |
| C. Lord Dalamere | D. ranches     |

25. The main tourist attraction in Kenya is \_\_\_\_\_
- |                     |
|---------------------|
| A. climate          |
| B. scenery          |
| C. historical sites |
| D. wild life        |

Study the map below and answer questions that follows 26 - 28.


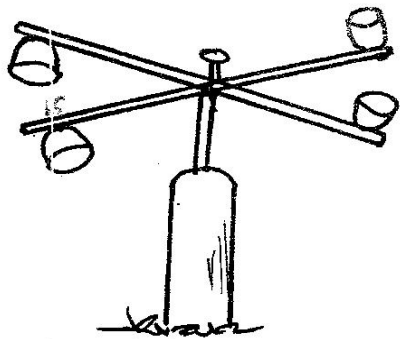


26. The lake marked Z is \_\_\_\_\_
- |               |             |
|---------------|-------------|
| A. Magadi     | B. Turkana  |
| C. Tanganyika | D. Victoria |
27. The river marked X is \_\_\_\_\_
- |                |
|----------------|
| A. Juba        |
| B. Athi        |
| C. Ewaso Nyiro |
| D. Tana        |
28. The river marked K is \_\_\_\_\_
- |         |            |
|---------|------------|
| A. Tana | B. Athi    |
| C. Nile | D. Turkwel |
29. Which of the following countries in Eastern Africa got independence last?
- |      |      |
|------|------|
| A. 3 | B. 1 |
| C. 2 | D. 3 |
30. Which of the following counties in Eastern Africa was a colony of the German?
- |      |      |
|------|------|
| A. 1 | B. 4 |
| C. 2 | D. 3 |

31. Which of the following forests is an example of a lowland forest?  
 A. Nyandarua forest  
 B. Londian forest  
 C. Man forest  
 D. Arabuko sokoke
32. The smaller country among the listed one is \_\_\_\_\_  
 A. Ethiopia  
 B. Kenya  
 C. Somalia  
 D. Tanzania
33. Which of the following lakes is **NOT** found on the floor of rift valley?  
 A. Lake Tanganyika  
 B. Lake Baringo  
 C. Lake Tana  
 D. Lake Magadi
34. A mouth of a river with many branches is called a \_\_\_\_\_  
 A. ox - bow  
 B. delta  
 C. source  
 D. estuary
35. The main function of the police is to \_\_\_\_  
 A. catch thieves.  
 B. maintain law and order.  
 C. prevent outside insurgence.  
 D. punish criminals.
36. Who among the following was not among those arrested together with Jomo Kenyatta after the state of emergency was declared in Kenya in 1952?  
 A. Oginga Odinga  
 B. Bildad Kagia  
 C. Fred Kabui  
 D. Kungu Karuba
37. The two countries that were never colonised in African were Ethiopia and \_\_\_\_  
 A. Senegal  
 B. Kenya  
 C. Mali  
 D. Liberia
38. Which leader is correctly matched with the community?  
 A. Mekatilili → Agiriana  
 B. Sakawa → Abaluhya  
 C. Samoei → Akamba  
 D. Masaku → Nandi
39. Africa's second largest river is \_\_\_\_\_  
 A. Niger  
 B. Nile  
 C. Congo  
 D. Volta
40. Which of the following is a traditional method of communication?  
 A. Telephone  
 B. Newspaper  
 C. Use of smoke  
 D. E - mails
41. The bantu originally migrated from \_\_\_\_\_  
 A. Mt. Kilimanjaro  
 B. Mt. Elgon  
 C. Congo forest  
 D. L. Victoria
42. The following information is gotten by government through census and vital registrations **EXCEPT** \_\_\_\_\_  
 A. life expectancy  
 B. crime rate in town.  
 C. growth rate.  
 D. population density.
43. The main reason why natural forests in Kenya should be conserved is to \_\_\_\_  
 A. preserve soil fertility.  
 B. preserve indigenous trees.  
 C. preserve trees for medicine.  
 D. preserve water catchment areas.
44. Which one of the following mountain is classified as a block mountain?  
 A. Mt. Ruwenzori  
 B. Mt. Atlas  
 C. Mt. Tibesti  
 D. Mt. Ahaggar

Use the map below to answer questions 45 - 47



45. The country marked J was colonised by \_\_\_\_  
 A. French  
 B. Portuguese  
 C. British  
 D. Belgians
46. The country marked K is \_\_\_\_  
 A. Sudan  
 B. Somalia  
 C. Egypt  
 D. Djibouti
47. The climate marked  is Known as \_\_\_\_  
 A. desert  
 B. savannah  
 C. mountain  
 D. equatorial
48. The original home of the Luo was \_\_\_\_  
 A. lake Victoria basin  
 B. Nile delta  
 C. Congo Cameroon region  
 D. Barehel ghazel in Sudan
49. Which of the following groups of lakes consist of salty water lake only  
 A. Bogoria, Turkana, Naivasha  
 B. Naivasha, Baringo, Magadi  
 C. Tanganyika, Edward, Albert  
 D. Magadi, Bogoria, Elmentaita
50. The main tourist attraction in lake Bogoria is \_\_\_\_  
 A. hot springs  
 B. wildlife  
 C. mangrove forest  
 D. dry beaches
51. The main benefit of cash crop growing to the economy of Kenya is that \_\_\_\_  
 A. it earns much foreign exchange to Kenya.  
 B. they are a source of food for the local people.  
 C. it offers employment opportunity to many people.  
 D. they are a source of raw materials for industries.
52. Which of the following colours in the Kenyan flag currently matched with what it stand for?  
 A. Green - rich agricultural land.  
 B. White - colour of the people.  
 C. Red - peaceful interaction of Kenyan  
 D. Black - Struggle for independence.
53. The weather instrument shown below is used to measure \_\_\_\_  
  
 A. speed of wind.  
 B. humidity  
 C. strength of wind.  
 D. air pressure
54. The Sun is overhead the equator in the month of \_\_\_\_  
 A. January and July  
 B. February and August  
 C. March and September  
 D. April and October
55. The largest desert land in Africa is \_\_\_\_  
 A. Namibia  
 B. Chalbi  
 C. Sahara  
 D. Kalahari
56. Which national holiday is celebrated on 1st June?  
 A. Labour day  
 B. Madaraka day  
 C. Kenyatta day  
 D. Jamhuri day
57. The headquarter of COMESA is \_\_\_\_  
 A. Addis ababa  
 B. Lusaka  
 C. Dar - es - salaam  
 D. Gaborone
58. Which of the following is NOT a factor affecting population growth?  
 A. unemployment  
 B. health services  
 C. warfare  
 D. diseases
59. During the pre - colonial period, the wanyamwezi were ruled by \_\_\_\_  
 A. a chief counsellor  
 B. chiefs  
 C. king's  
 D. queen mother
60. A set of rules which governs a country are called \_\_\_\_  
 A. the political system.  
 B. the government.  
 C. the constitution  
 D. the parliament



**SECTION B.**  
**CHRISTIAN RELIGIOUS EDUCATION.**

61. Human beings are different from the rest of the creation mainly because they \_\_\_\_\_.  
A. can talk to God.  
B. were made God's image  
C. are given the right to choose.  
D. were made rulers of the earth.
62. Which of the following books of the bible teaches about the origin of human beings  
A. Numbers                      B. Genesis  
C. Revelation                  D. Mathews
63. Cain killed his brother Abel because \_\_\_\_\_.  
A. God rejected his sacrifice.  
B. He quarrelled with his brothers.  
C. Cain was a sinner.  
D. God made him a wanderer.
64. Abraham is called a friend of God mainly because he \_\_\_\_\_.  
A. trusted in God.  
B. circumcised his son.  
C. he left his homeland.  
D. sacrificed his son
65. The second king of Israel was \_\_\_\_\_.  
A. Saul                          B. Solomon  
C. Samson                      D. David
66. Adam and Eve lost their friendship to God because they \_\_\_\_\_.  
A. disobeyed law of God.  
B. discovered that they were naked.  
C. ate fruit in the garden of Eden  
D. spoke to the snake
67. Abraham faith was tested when God commanded him to \_\_\_\_\_.  
A. be circumcised  
B. sacrifice the lamb  
C. sacrifice his son Isaac  
D. Change his name
68. According to the bible stories of creation, which one of the following was **NOT** a reason why God created woman?  
A. To work for the man.  
B. To be companion of the man  
C. To be a helper to the man.  
D. To have children with the man.
69. The following are some of the good things Jesus would expect from christians. Which one is **NOT**?  
A. Patience and tolerance  
B. Humility and obedience  
C. Unselfish and love  
D. Injustice and selfishness
70. \_\_\_\_\_ used his talent to keep of an evil spirit from king Saul.  
A. Abraham                      B. Jonathan  
C. Solomon                      D. David
71. \_\_\_\_\_ promised to share his property with the poor after receiving new life?  
A. Zachaeus  
B. David  
C. Jonathan  
D. Solomon
72. The first and the last books of the bible are \_\_\_\_\_.  
A. Genesis and Malachi  
B. Mathew and Revelation  
C. Genesis and Revelation  
D. Mathew and proverbs
73. The blind man who was healed by Jesus was told to go and wash his face in a pool of water called \_\_\_\_\_.  
A. Siloam  
B. Bethsaida  
C. Cana  
D. Galilee
74. The good behaviour we admire in a person is called \_\_\_\_\_.  
A. virtue                          B. vice  
C. mercy                          D. humility
75. How should we use the gift that God has given us?  
A. For the good of others.  
B. For the good of our friends.  
C. For the good of our relatives.  
D. For our own good.
76. The sermon on the mount is also known as \_\_\_\_\_.  
A. transfiguration  
B. secular values  
C. advent  
D. beatitudes

**SECTION B.**  
**CHRISTIAN RELIGIOUS EDUCATION.**

61. Human beings are different from the rest of the creation mainly because they \_\_\_\_\_.  
A. can talk to God.  
B. were made God's image  
C. are given the right to choose.  
D. were made rulers of the earth.
62. Which of the following books of the bible teaches about the origin of human beings  
A. Numbers                      B. Genesis  
C. Revelation                  D. Mathews
63. Cain killed his brother Abel because \_\_\_\_\_.  
A. God rejected his sacrifice.  
B. He quarrelled with his brothers.  
C. Cain was a sinner.  
D. God made him a wanderer.
64. Abraham is called a friend of God mainly because he \_\_\_\_\_.  
A. trusted in God.  
B. circumcised his son.  
C. he left his homeland.  
D. sacrificed his son
65. The second king of Israel was \_\_\_\_\_.  
A. Saul                          B. Solomon  
C. Samson                      D. David
66. Adam and Eve lost their friendship to God because they \_\_\_\_\_.  
A. disobeyed law of God.  
B. discovered that they were naked.  
C. ate fruit in the garden of Eden  
D. spoke to the snake
67. Abraham faith was tested when God commanded him to \_\_\_\_\_.  
A. be circumcised  
B. sacrifice the lamb  
C. sacrifice his son Isaac  
D. Change his name
68. According to the bible stories of creation, which one of the following was **NOT** a reason why God created woman?  
A. To work for the man.  
B. To be companion of the man  
C. To be a helper to the man.  
D. To have children with the man.
69. The following are some of the good things Jesus would expect from christians. Which one is **NOT**?  
A. Patience and tolerance  
B. Humility and obedience  
C. Unselfish and love  
D. Injustice and selfishness
70. \_\_\_\_\_ used his talent to keep of an evil spirit from king Saul.  
A. Abraham                      B. Jonathan  
C. Solomon                      D. David
71. \_\_\_\_\_ promised to share his property with the poor after receiving new life?  
A. Zachaeus  
B. David  
C. Jonathan  
D. Solomon
72. The first and the last books of the bible are \_\_\_\_\_.  
A. Genesis and Malachi  
B. Mathew and Revelation  
C. Genesis and Revelation  
D. Mathew and proverbs
73. The blind man who was healed by Jesus was told to go and wash his face in a pool of water called \_\_\_\_\_.  
A. Siloam  
B. Bethsaida  
C. Cana  
D. Galilee
74. The good behaviour we admire in a person is called \_\_\_\_\_.  
A. virtue                          B. vice  
C. mercy                          D. humility
75. How should we use the gift that God has given us?  
A. For the good of others.  
B. For the good of our friends.  
C. For the good of our relatives.  
D. For our own good.
76. The sermon on the mount is also known as \_\_\_\_\_.  
A. transfiguration  
B. secular values  
C. advent  
D. beatitudes



77. Which of the following statements is **NOT** true about the bible?  
 A. It is a special book.  
 B. It was written by God.  
 C. It helps us learn about God.  
 D. It contains God's message.
78. Which of the following is **NOT** a gift of the holy spirit according to *1 corinthians 12:4-10*  
 A. knowledge                      B. Love  
 C. Wisdom                         D. Healing
79. Eternal life means all the following **EXCEPT** \_\_\_\_\_  
 A. Life that begins here on earth when we believe in Jesus.  
 B. it begins when one is born.  
 C. it continues in heaven when we go there.  
 D. a life that begin here on earth when we believe in Jesus.
80. The following words were spoken by Jesus during the last supper **EXCEPT** \_\_\_\_\_  
 A. do this in memory of me.  
 B. this cup is God's new covenant.  
 C. this is my body which is for you.  
 D. am the ressurection and life.
81. Which one of the following is **NOT** a practise in traditional African societies?  
 A. Praying by pouring libation  
 B. Praying for the dead in the name of Jesus.  
 C. Naming children after ancestors.  
 D. Praying for the dead with their items.
82. What is the difference between a talent and ability?  
 A. Ability will be used in heaven but talents are used on earth.  
 B. We are born with talents but we get ability through learning.  
 C. Ability come from God but talents come from our parents.  
 D. Ability will be used in heaven but talents are used here on earth.
83. People who are killed because of their religious convicticy are called \_\_\_\_\_  
 A. saints  
 B. pastors  
 C. evangelists  
 D. martyrs
84. What can christians learn from the story of cain who killed Abel his brother?  
 A. That the sin of jealousy can lead to violence.  
 B. That man cannot control anger, hatred and violence.  
 C. That offering a sacrifice to God can lead to problems.  
 D. That there is no need to other sacrifice.
85. Which one of the following is **NOT** a reason why christians pray?  
 A. To thank God.  
 B. To ask help for friends.  
 C. To condemn sinners.  
 D. To ask God for forgiveness.
86. The following are problems related with misuse of sex in the community **EXCEPT** \_\_\_\_\_  
 A. it boost one self esteem.  
 B. it leads to contraction of HIV/AIDS  
 C. It can lead to abortion.  
 D. It leads to early pregnancies
87. A christian practise which is similar to the African traditional sacrificial meal is \_\_\_\_\_  
 A. confirmation  
 B. prayers  
 C. repentance  
 D. holy communion
88. The use of leisure time to play various games is beneficial to us because \_\_\_\_\_  
 A. it allows us to grow spiritually  
 B. it makes our bodies strong and healthy.  
 C. every child like to play.  
 D. it is a part of syllabus
89. Which of the following is the best way in which children can show respect for their parents? Its to \_\_\_\_\_  
 A. keep them for advise  
 B. care of their promotions.  
 C. do their homework.  
 D. ask them for advice
90. Hellen found a fifty shillings note near the school gate. What should she do?  
 A. Give the money to the headteacher.  
 B. Spend the money with his friends.  
 C. Leave the money where she found it.  
 D. Give the money to her best friend.