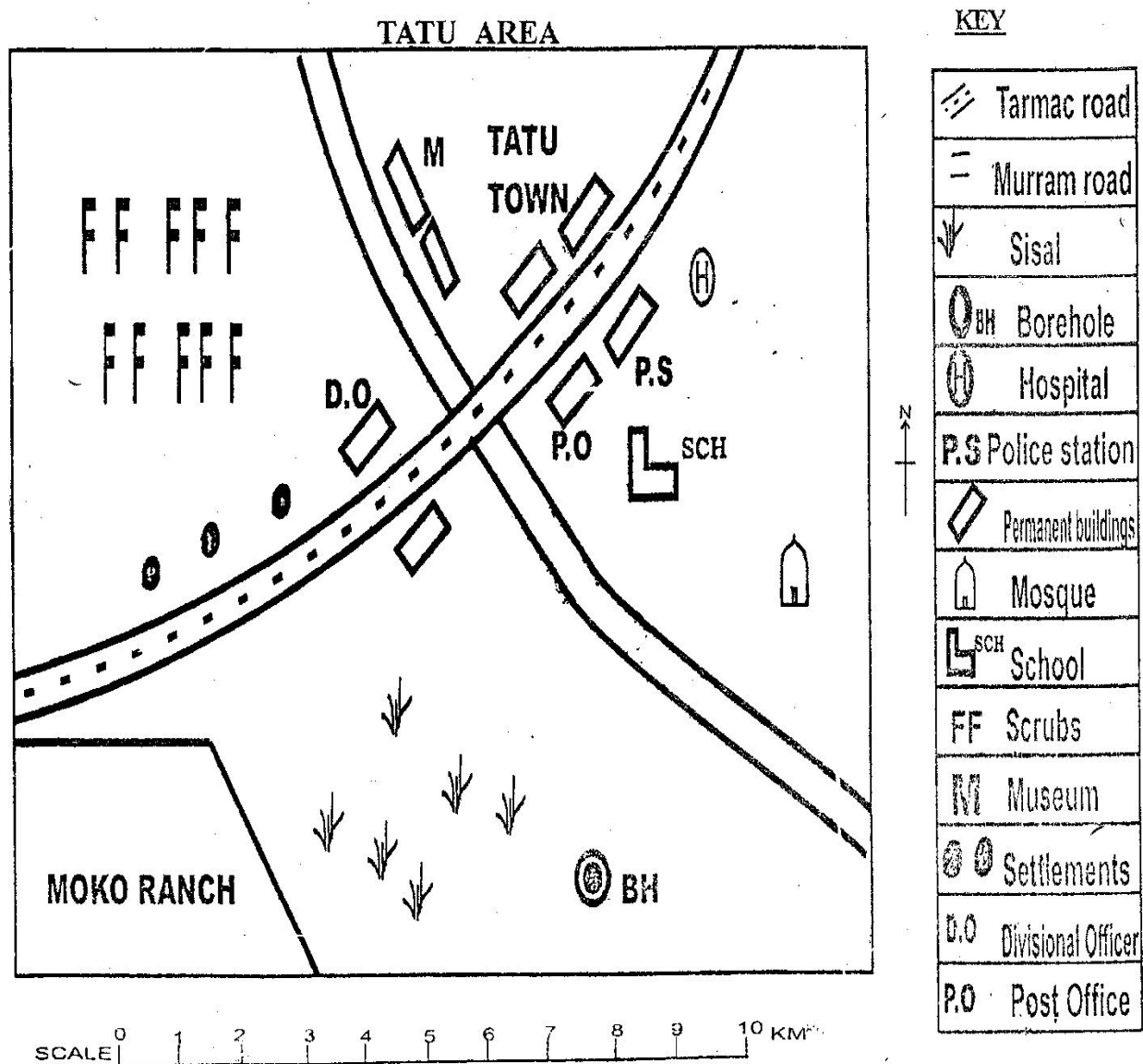


STANDARD SIX END TERM 3 EXAM, 2017

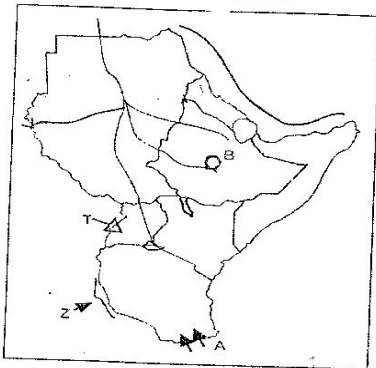
SOCIAL STUDIES / CRE / IRE



1. The climate of Tatu area is **likely** to be
A. cool and dry B. hot and dry
C. wet and hot D. cool and wet
2. The following are economic activities carried out in Tatu area **except**;
A. beef farming B. tourism
C. trading D. lumbering
3. Which is the dominant settlement pattern found in Tatu area?
A. Linear B. Nucleated
C. Clustered D. Evenly
4. Tatu town serves three of the following **except**;
A. administrative centre.
B. trading centre.
C. industrial centre.
D. a communication centre.
5. Which of the following animal breeds is **not** likely to be found in Tatu area?
A. Hereford B. Aberdeen Angus
C. Charlois D. Jersey
6. The people of Tatu area worship on
A. Friday B. Saturday
C. Sunday D. Thursday
7. What evidence on the map shows that recreation activities take place in the area?
Presence of the
A. road B. ranch
C. market D. museum
8. Three of the following communities are River Lake Nilotes of Uganda **except**;
A. Alur B. Japadhola
C. Nuer D. Lang'o
9. The weather instrument used to measure the amount of water vapour in the atmosphere is
A. barometer B. thermometer
C. anemometer D. hygrometer
10. Which one of the following mountains in Eastern Africa was formed through faulting?
Mt.
A. Elgon B. Ruwenzori
C. Kenya D. Moroto
11. Which of the following towns does **not** lie on the windward side of Mt. Kenya?
A. Nanyuki B. Meru
C. Nyeri D. Embu
12. The staple food for **most** people living in Uganda is
A. maize B. wheat
C. banana D. yams
13. The Bantu community that migrated into Tanzania from the South in the 19th Century is
A. Wanyamwezi B. Ngoni
C. Wachagga D. Yao
14. Which of the following is the **main** importance for growing cash crops in Eastern Africa?
A. Source of foreign exchange
B. Development of industries
C. Creation of employment
D. Establishment of industries
15. Three of the following are principles of democracy **except**;
A. equality of all before the law.
B. racial segregation.
C. respect for human rights.
D. free and fair elections.
16. Which one of the following pairs of countries are found on the Southern hemisphere?
A. Djibouti and Sudan
B. Tanzania and Burundi
C. Ethiopia and Kenya
D. Rwanda and Somalia
17. The game park in Tanzania that borders Maasai Mara game reserve in Kenya is
A. Amboseli B. Seolous
C. Ngorongoro D. Serengeti
18. Which of the following groups comprises of landlocked countries of E. Africa?
A. Uganda, Sudan, Ethiopia
B. Somalia, Uganda, Rwanda
C. Ethiopia, Burundi, South Sudan
D. Sudan, Djibouti, Somalia
19. Who were the earliest traders to arrive at the Kenyan coast?
A. British B. Arabs
C. Portuguese D. Germans
20. Which of the following natural vegetation is suitable in salty water bodies?
A. Bamboo B. Woodland
C. Scrubs D. Mangrove
21. The following are characteristics about a certain vegetation in Africa;
i. Consists of a very thick forest with mixed tree species.
ii. It is evergreen.
iii. Trees form a canopy.
iv. It consists of hardwood trees.
The type of vegetation zone described above is
A. mountain vegetation
B. tropical rain forest
C. desert vegetation
D. swampy vegetation
22. Which one of the following rivers of Eastern Africa is **not** correctly matched with its mouth?
A. R. Ruvuma - L. Victoria
B. R. Rufiji - Indian Ocean
C. R. Omo - L. Turkana
D. R. Mara - L. Victoria
23. Three of the following are factors that undermine peace in the society **except**;
A. political differences.
B. religious differences.
C. unfair distribution of resources.
D. arresting wrong doers.

24. The cheapest method of preserving fish is by
 A. freezing B. salting
 C. sun-drying D. boiling
25. Who introduced cloves in Zanzibar?
 A. Portuguese B. Arabs
 C. British D. Germans
26. African socialism was adopted in Kenya as a national philosophy in the year
 A. 1963 B. 1961
 C. 1964 D. 1965
27. The basic unit in the society is the
 A. family B. age group
 C. clan D. age set
28. Which type of climate is found around the coastal regions in Kenya?
 A. Cool and dry B. Hot and wet
 C. Hot and dry D. Cool and wet
29. The headquarters of the East Africa community are located in which country?
 A. Eritrea B. Djibouti
 C. Tanzania D. Uganda
30. Which Eastern Africa country was colonized by three European powers?
 A. Somalia B. Kenya
 C. Tanganyika D. Uganda

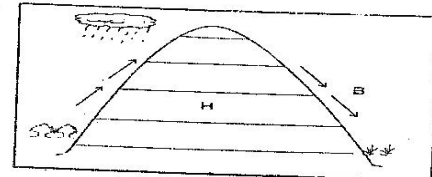
Use the map of Eastern Africa below to answer questions 31 - 34.



31. The lake marked Z is known as Lake
 A. Albert B. Malawi
 C. Edward D. Tanganyika
32. Which of the following mountains was **not** formed in a similar method as the one marked T on the map? Mt.
 A. Usambara B. Pare
 C. Danakil D. Elgon
33. Which community used the route marked A during its migration into Eastern Africa?
 A. Yao B. Nyamwezi
 C. Makonde D. Ngoni
34. The lake marked B is an example of _____ lake.
 A. a downwarped B. a crater
 C. a lava dammed D. an ox-bow
35. The staple food for both people of Kenya and Tanzania was introduced in Eastern Africa by the

- A. Asians B. Portuguese
 C. Arabs D. Settlers
36. The following are contributions of a prominent leader in Africa;
 i. *Founder member of OAU.*
 ii. *Led his country to independence in 1961.*
 iii. *Introduced Ujamaa philosophy in his country.*
 iv. *Supported liberation movements against colonial rule.*
 The leader described above is
 A. Haile Selassie B. Julius Nyerere
 C. Jomo Kenyatta D. Daniel Moi
37. Who among the following people was both a prophet and medicineman among the Nandi people?
 A. Masaku B. Koitalel arap Samoei
 C. Mekatilili D. Lenana
38. Isolated hills that have resisted erosion in the plateau region are known as
 A. mountains B. conelets
 C. volcanoes D. inselbergs
39. The **main** producer of inland fresh water fish in Eastern Africa is
 A. Kenya B. Tanzania
 C. Uganda D. Somalia
40. Which one of the following is the **mo** important and busiest sea port in Eastern Africa?
 A. Port Sudan B. Mombasa port
 C. Dar es salaam D. Kisumu port

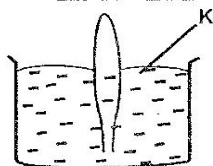
Use the diagram below to answer questions 41-43.



41. The nature of the winds marked B can be described as
 A. hot and dry B. cool and wet
 C. cool and dry D. hot and wet
42. The above type of rainfall is known as
 A. orographic B. convectional
 C. cyclonic D. frontal
43. Which one of the following vegetation is found at Zone H?
 A. Savannah grassland
 B. Rainforest
 C. Heath and moorland
 D. Bamboo forest
44. The **main** problem facing sisal growing in Tanzania and Kenya is
 A. prolonged droughts.
 B. stiff competition from synthetic fibres.
 C. pests and diseases.
 D. lack of market for the products.

45. Which one of the following communities is **not** one of the Kalenjin sub-tribes in Kenya?
 A. El Molo B. Keiyo
 C. Nandi D. Tugen
46. During the scramble for colonies in Eastern Africa, Tanganyika was taken by
 A. Britain B. France
 C. Germany D. Italy
47. Which one of the following types of fish is caught in fresh water lakes in Eastern Africa?
 A. Sardine B. Tuna
 C. Mullet D. Nile perch
48. Which of the following pair of crops consist of those grown in Tanzania in large plantations?
- | | |
|-------------------|-------------------------|
| A. Tea
Wheat | B. Pyrethrum
Bananas |
| C. Maize
Sisal | D. Bananas
Tea |
49. The Arabs came to Eastern Africa before the 19th Century to
 A. establish towns along the Coast.
 B. explore the source of River Nile.
 C. acquire colonies.
 D. look for trade items.

Use the diagram below to answer questions 50 and 51.



50. The weather instrument illustrated above is used to measure
 A. surface temperature
 B. atmospheric pressure
 C. amount of water vapour in the air
 D. speed of wind
51. The liquid marked **K** is likely to be
 A. mercury B. alcohol
 C. paraffin D. petrol
52. The **most** important lake for water transport in Eastern Africa is Lake
 A. Turkana B. Tanganyika
 C. Victoria D. Malawi
53. People who shared a common ancestor in traditional African societies formed
 A. a tribe B. a clan
 C. an age set D. an age group
54. Which of the following towns serves as the headquarters of Uasin Gishu county?
 A. Eldoret B. Kitale
 C. Eldama Ravine D. Kapsabet
55. Which one of the following crops is **mainly** grown in areas with red volcanic soils?
 A. Sugarcane B. Tea
 C. Cotton D. Rice
56. Which one of the following minerals mined in Kenya is used to manufacture cement?
 A. Limestone B. Salt
 C. Soda ash D. Diatomite
57. Cabinet secretaries in Kenya are appointed by the President after approval of
 A. Deputy president B. Judiciary
 C. Parliament D. Attorney General
58. Who among the following heads the Judiciary arm of government?
 A. The President
 B. The Chief Justice
 C. The Attorney General
 D. The Speaker of National Assembly
59. According to the new constitution, Kenya is divided into ____ constituencies.
 A. 47 B. 210
 C. 12 D. 290
60. The colour of the National Flag that shows that Kenya is a land of plenty is
 A. black B. green
 C. white D. red

C.R.E

61. In the beginning, when God created the universe the earth was
 A. dark and full
 B. full of rocks
 C. formless and desolate
 D. full of vegetation
62. When God destroyed the earth with floods Noah was ____ years old.
 A. 950 B. 600
 C. 650 D. 800
63. Which one of the following was **not** a promise given to the father of faith?
 A. Many descendants
 B. To be a king forever
 C. A great nation
 D. To be blessed and protected by God
64. Which one of the following is **not** a way through which God shares with us new life?
 A. Jesus christ B. Holy spirit
 C. Mercy D. Punishment
65. Which of these did not happen during the passover? The Israelites
 A. ate bitter herbs
 B. drank wine
 C. ate roasted meat
 D. ate unleavened bread
66. Abraham went to the promised land accompanied by his nephew called
 A. Lot B. Isaac
 C. Eliezar D. Sarah
67. During the time of Gideon, the Israelites were attacked by two tribes known as
 A. Philistines and Amalekites
 B. Egyptians and Jubesites
 C. Amalekites and Midianites
 D. Midianites and Canaanites

68. The Holy Spirit allowed Paul and Silas to preach in three places **except**;
 A. Macedonia B. Bithynia
 C. Corinth D. Jerusalem
69. The story of the early Christians is recorded in one of the books of the Bible. Which one?
 A. Esther B. Acts
 C. Luke D. Corinthians
70. Barnabas and Silas were accompanied by one of the followers of Jesus Christ. Who is it?
 A. Timothy B. Simon Peter
 C. John Mark D. Nathaniel
71. Which one of the following lifeskills did Jesus use to help the Pharisees realise that observing the law alone was not adequate?
 A. Creative thinking
 B. Critical thinking
 C. Listening and responding
 D. Self-awareness
72. Unity in the church can be seen through all the following **except**;
 A. working towards a common C.R.E syllabus.
 B. conducting inter denominational prayers
 C. doing charity works of mercy
 D. dividing Kenyans along their tribal lines.
73. Which life skill did Jesus use when Nicodemus visited him at night?
 A. Goal setting
 B. Listening and responding
 C. Assertiveness
 D. Decision making
74. Which one of the following is **not** a fruit of the Holy Spirit?
 A. Humility B. Patience
 C. Wisdom D. Kindness
75. Which one of the following parables did Jesus teach His disciples to make use of their abilities? The parables of the
 A. lost son B. three servants
 C. sower D. prodigal son
76. Which one of the following gifts did Jesus require from those who came to him for healing?
 A. Faith B. Kindness
 C. Humility D. Compassion
77. "All scripture is inspired by God." 2 Tim 3:16 These words were said by
 A. Peter B. Jesus
 C. Silas D. Paul
78. Which one of the following is a lesson we learn from the story of the Good Samaritan? We should
 A. help the people in trouble.
 B. not walk in lonely places.
 C. help people from our ethnic groups
 D. avoid people we do not know.
79. The man who was attacked by robbers was travelling from
 A. Jericho B. Jerusalem
 C. Samaria D. Nazareth
80. Joseph, the earthly father of Jesus was a
 A. farmer B. fisherman
 C. carpenter D. tent maker
81. Paul the Apostle to the gentiles also worked as a
 A. tent maker B. teacher
 C. doctor D. farmer
82. Initiation in African Traditional society is similar to
 A. repentance B. resurrection
 C. baptism D. holy communion
83. The children in African Traditional Communities were mainly taught to have
 A. humility B. obedience
 C. tolerance D. courage
84. It is our Christian duty to show our faith through
 A. words B. creeds
 C. actions D. prayer
85. In Acts 8:26-40, the Ethiopian Eunuch was reading from the book of ___ when Philip entered his carriage.
 A. Isaiah B. Ezekiel
 C. Jeremiah D. Nehemiah
86. The gift of telling what will happen in the future is known as
 A. wisdom B. knowledge
 C. prophecy D. faith
87. The disciples of Jesus received the Holy Spirit on the day of
 A. Easter B. Passover
 C. Good Friday D. Pentecost
88. The statement "Who was conceived by the Holy Spirit" is found in the
 A. Lord's prayer B. Apostle's creed
 C. National anthem D. Golden Bells
89. The **best** quality that a Christian should have in order to achieve his or her goals is
 A. fame B. popularity
 C. persistence D. pride
90. Which among the following is the **best** description of a refugee?
 A. People suffering in the community
 B. The old people
 C. A person who flees his/her country because of various reasons
 D. A job seeker.

I.R.E

61. The surah which encourages us to sacrifice during eid
 A. Al-Inshirah B. Al-Nasr
 C. Al-kauthar D. Al-asr
62. Al-Qadr means
 A. the night of power B. the pen
 C. the dot D. the biro
63. Surah Al-Alaq was
 A. revealed in the cave thaur
 B. revealed in full
 C. the start of prophethood
 D. revealed in madinah

64. Surah Al-Alace puts emphasis on
A. knowledge B. baadah
C. brotherhood D. the last day
65. Arrange in correct order:-
(i) Iqraa warabikkal akkram
(ii) Iqraa Bismi rabbikal adhi khalag
(iii) Alladhi allama bil qalam
(iv) khalag al insaana min alag
A. i, ii, iii, iv B. ii, i, iii, iv
C. ii, i, iv, iii D. ii, iv, i, iii
66. Tyn means
A. the holy book B. the olive tree
C. the fig tree D. the important
67. Wahadhal baladil amin is mentioned in surah at-Tyn, the words refer to
A. Makkah B. Madinah
C. Jerusalem D. Baitul maqdis
68. Turi Siinin is the place where Nabi Musa
A. met fil - khidr
B. received wahyi
C. helped two ladies
D. killed an Egyptian unintentionally
69. Mixing good quality with poor quality goods is called
A. ribaa B. ghush
C. hoarding D. usury
70. The draft of hudaibi yah was written by
A. Zaid B. ali bin abu twalib
C. umar D. masoud
71. Allah gave the mother of Nabii Musa
A. 1, 4 B. 3
C. 1,6 D. 1,6
72. Ibaadah in lailatul Qadr is equal to
A. almost 10 months B. almost 100 months
C. a life time D. 1000 months
73. Arrange the highlight of the story below in the right order.
(i) Musa is asked to work for 18 years
(ii) One girl was asked to call Musa
(iii) Musa helps two girls
(iv) Musa is fired and rests under a tree
A. i, ii, iii, iv B. iii, iv, ii, i
C. iii, ii, iv, ii D. iii, iv, i, ii
74. A table full of food was a miracle of Nabir
A. Musa B. Isa
C. Ibrahim D. Yunus
75. Nabi Ibrahim wanted to sacrifice his son in order to
A. obey Allah B. please his wife
C. punish his son D. learn to sacrifice
76. In the treaty of Hudaibiyyah, the prophet agreed not to be called the messenger of Allah because
A. he wanted to draft the treaty
B. it was the way agreements were written those days
C. suhail did not know how to read
D. all quraish insisted
77. Hiding goods inorder to get more profit is
A. Ribaa B. Ghush
C. Usually D. hoarding
78. The truth nabi Musa learnt from Al-khidhr was
A. bravely B. knowledge
C. politeness D. patience
79. Which statement is **not true** about friday prayers?
A. it is said at dhuhr time
B. It has adhan and iqamah
C. two khutbahs are said after swalah
D. it is a fardh prayer
80. Which one is not among the sacred months?
A. Ramadhan B. Dhul -Qaadah
C. Rajab D. Dhul - Hijjah
81. The month of Allah is
A. Ramadhan B. Dhul - Hijjah
C. Rabiul - awal D. Muharram
82. Umrah
A. is the same as hajj
B. must be performed during hajj
C. does not include staying at Arafah
D. cannot be performed during hajj
83. Which one of these is not a sunnah fast?
A. Mondays and Thursdays
B. Fasting in Ashura
C. Fasting in Rabiul Awwal
D. Fasting in Ramadhan
84. Who among the following is not cursed due to khamr?
A. the one who sells it
B. The one who hides it
C. The one who buys it
D. The one who drinks it
85. The treaty of Hudaibiyyah was to last for _____ years
A. 3 B. 5
C. 7 D. 10
86. After the first takbiirah in Eid prayer we say _____ more Takbiirah.
A. 2 B. 3
C. 5 D. 7
87. In shawwal it is sunnah to fast
A. the whole month
B. any six days
C. the first six days
D. the last six days
88. How many idols were around the kaabah?
A. 30 B. 360
C. 50 D. 100
89. Which is not true about AIDs it is spread through?
A. Sexual intercourse
B. Sharing, cutting and piercing instruments
C. Shaking hands with those who have AIDs
D. Blood transfusion
90. Juma and Ali are friends. One day Juma discovered that Ali had stolen money from a pupils bag Juma should
A. ask Ali to share the money.
B. tell Ali to return the money to the owner.
C. feport the matter to the teacher.
D. break off his friendship with Ali.