

# STANDARD FOUR END TERM THREE EXAM 2017

## SCIENCE

TIME: 1HR 40 MIN


1. Which one of the following is the function of the teeth drawn below?



- A. Tearing  
B. Biting  
C. Chewing  
D. Grinding
2. Which one of the following is **not** a reason why animals move?
- A. To look for food  
B. To look for water  
C. To look for enemies  
D. To look for shelter
3. Which one of the following is an example of unwanted plant?
- A. Maize  
B. Coffee  
C. Sunflower  
D. Blackjack
4. The following are ways in which animals protect themselves from enemies **except**
- A. Walking  
B. Flying away  
C. Coiling  
D. Stinging
5. HIV stands for,
- A. Human Immune Virus  
B. Human Immunodeficiency Virus  
C. House Immune Virus  
D. HIV/AIDS
6. An example of a beverage crop is \_\_\_\_\_
- A. cotton  
B. coffee  
C. sunflower  
D. wheat
7. Which one of the following is **not** a use of soil?
- A. Eating  
B. Modelling  
C. Building  
D. Farming
8. A lot of water can be transported using \_\_\_\_\_
- A. dams  
B. cans  
C. tankers  
D. water
9. The first type of teeth to shed are:-
- A. canines  
B. incisors  
C. molars  
D. premolars
10. \_\_\_\_\_ makes moving easier?
- A. Wheelbarrow  
B. Ladder  
C. Wheels  
D. Spade
11. Which one of the following plants grows in dry areas?
- A. Mangroves  
B. Acacia  
C. Reeds  
D. Maize


STD 4 SCIENCE

12. The type of leaf drawn below belong to a \_\_\_\_\_ plant.



- A. maize  
C. beans  
B. sugarcane  
D. sisal
13. We eat the stem of a \_\_\_\_\_ plant.  
A. carrot  
B. onions  
C. cassava  
D. sugarcane
14. Which one of the following is a sense organ for sight?  
A. Eye  
B. Nose  
C. Tongue  
D. Skin
15. A class four boy wanted to make a toy car. Which one of the following materials could **not** be used to make wheels?  
A. Maize cobs  
B. Sand  
C. Bottle tops  
D. Lids
16. A true insects has \_\_\_\_\_ legs.  
A. eight  
B. four  
C. six  
D. ten
17. On a cold day we wear \_\_\_\_\_ around the neck.  
A. shirt  
B. vest  
C. T- shirt  
D. scarf

18. The part marked x represents



- A. piece of cloth  
B. clean water  
C. dirty water  
D. soil
19. Nimbus clouds have a \_\_\_\_\_ colour.  
A. white  
B. yellow  
C. blue  
D. dark grey
20. Gestures are \_\_\_\_\_ that people make with their bodies to tell others something.  
A. movements  
B. noises  
C. words  
D. smiling
21. Weeds **cannot** be controlled by \_\_\_\_\_.  
A. watering them  
B. weeding  
C. uprooting  
D. slashing
22. \_\_\_\_\_ is used to cut big trees.  
A. Panga  
B. Knife  
C. Saw  
D. Axe
23. To be healthy we must eat \_\_\_\_\_.  
A. too much food  
B. very little food  
C. a balanced diet  
D. fried food

24. Poultry are classified into \_\_\_\_\_ and \_\_\_\_\_

- A. beef and dairy
- B. layers and broilers
- C. layers and dairy
- D. beef and broilers

25. For healthy strong teeth, one should eat

- A. vegetables
- B. cakes
- C. sweets
- D. honey

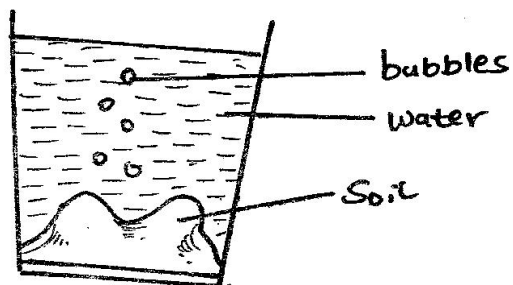
26. Which one of the following animals is not found in soil?

- A. Chameleon
- B. Millipede
- C. Safari ants
- D. Mole

27. All animals \_\_\_\_\_

- A. make food
- B. lay eggs
- C. give birth
- D. reproduce

28. The experiment below was carried out by pupils at Bidii Primary school?



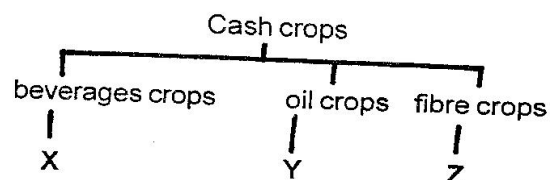
What were the pupils investigating?

- A. Soil in water
- B. Air in soil
- C. Bubbles in water
- D. Air in water

29. Which one of the following is a good table manner when having meals?

- A. Licking fingers
- B. Serving a lot of food
- C. Chewing food well before swallowing
- D. Chewing food with open mouth

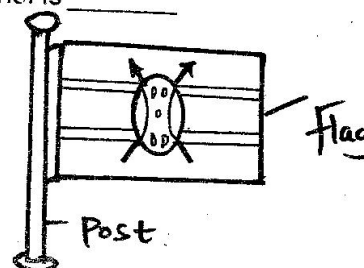
30. Study the diagram below



Which one of the following crops can be placed at the part marked Z?

- A. Coffee
- B. Tea
- C. Sunflower
- D. Sisal

31. From the diagram below, it is true to say that the weather is \_\_\_\_\_



- A. cloudy
- B. windy
- C. calm
- D. rainy

32. Sound travels in \_\_\_\_\_ directions.

- A. two
- B. four
- C. all
- D. one

33. Which one of the following food is eaten when not raw?  
A. Oranges                      B. Carrot  
C. Tomatoes                    D. Cabbage
34. Which one of the following is a source of water?  
A. Tap                              B. Tank  
C. Pipe                             D. Lake
35. Which one of the following is **not** a way of caring for animals?  
A. Watering them              B. Feeding them  
C. Beating them                D. Housing them
36. An inflated balloon is full of \_\_\_\_\_.  
A. water                          B. air  
C. soil                             D. saliva
37. Which one of the following fraction does not affect sinking and floating?  
A. Size                              B. Shape  
C. Weight                         D. Material
38. Goats are not kept for \_\_\_\_\_.  
A. milk                              B. meat  
C. mohair                         D. wool
39. Kales, spinach and cabbage are all examples of  
A. fruits                            B. cereal  
C. vegetable                      D. beverage
40. Which one of the following is a use of water at home?  
A. Irrigation                      B. bathing  
C. Transport                      D. Swimming
41. The instrument below produces sound when  
A. blown                            B. plucked  
C. beaten                          D. bitten
42. We should not \_\_\_\_\_ a towel.  
A. share                            B. wash  
C. use                               D. store
43. Most animals have one \_\_\_\_\_.  
A. leg                                B. ear  
C. eye                                D. tail
44. Holes in enamel part of teeth are known as  
A. dentines                        B. cavities  
C. gingivities                    D. dental carries
45. Which one of the following is **not** an harmful animal?  
A. Snake                            B. Spider  
C. Fish                              D. Tick
46. Cows removes solid wastes in the form of  
A. dung                              B. soil  
C. pellets                          D. urine
47. Shadows are shortest in the \_\_\_\_\_.  
A. morning                        B. evening  
C. noon                              D. 8 o'clock
48. After hardwork the body needs \_\_\_\_\_.  
A. sleep                              B. medicine  
C. food                               D. rest
49. Which statement is **incorrect** about molars?  
A. They are the last to shed off  
B. They grow last  
C. They have three roots  
D. They are located at the back of mouth
50. \_\_\_\_\_ is the best soil in building?  
A. Sand  
B. Clay  
C. Loam  
D. Loam and clay