

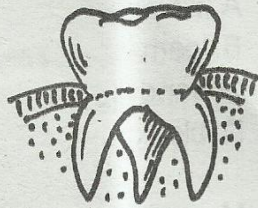
PRIMARY END TERM 1 2017
SCIENCE STANDARD 4

Schools Net Kenya (SNK) | P.O. Box 8076 – 00200, Nairobi
Tel: +254202319748 | +254 711 88 22 27 E-mail: infosnkenya@gmail.com
Website: www.schoolsnetkenya.com

SCIENCE

TIME: 1 HR 45 MINS

1. The type of teeth drawn below is used for



- A. tearing food
 - B. crushing food
 - C. cutting food
 - D. biting food
2. Which one of the following crops is a legume crop?
- A. Flax
 - B. Sisal
 - C. Beans
 - D. Coconut
3. Which one of the following animals reproduce by giving birth to litter?
- A. Rabbit
 - B. Goat
 - C. Cow
 - D. Sheep
4. Which pair consists of **only** products of a goat?
- A. Pork and mohair
 - B. Mohair and milk
 - C. Wool and beef
 - D. Milk and wool
5. Which one of the following is **not** a personal item at home?

- A. Socks
- B. Razor blade
- C. Towel
- D. Handkerchief


6. How many colours does a rainbow have?
- A. Five
 - B. Four
 - C. Eight
 - D. Seven
7. Young growing unwanted crops in our shamba are called
- A. weeds
 - B. seedlings
 - C. crops
 - D. maize
8. Which one of the following is **not** a teeth related problem?
- A. Tooth cavity
 - B. Dental floss
 - C. Dental carries
 - D. Bad breath
9. Which statements below **best** describes a canine tooth?
- A. Sharp edged
 - B. Chisel shaped
 - C. Has ridges
 - D. Sharp pointed
10. The animal drawn below makes it's movement by



- A. hopping
- B. crawling
- C. swimming
- D. leaping

11. The main source of natural light is the
A. stars
B. moon
C. sun
D. electricity
12. Insects are made up of _____ body parts?
A. six
B. three
C. four
D. eight
13. The first set of teeth to grow in human being are called
A. juice
B. small
C. permanent
D. milk
14. _____ is the sensory organ for sight.
A. Eyes
B. Ears
C. Nose
D. Tongue
15. Which one of the following is a pair of only foods that can be eaten raw?
A. Maize and beans
B. Cassava and carrots
C. Carrots and peas
D. Cassava and millet
16. We eat the stem of a _____ crop.
A. cabbage
B. Irish potato
C. onion
D. carrots

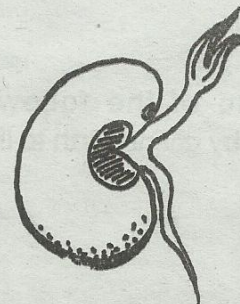
17. The weather illustrated below is,



- A. calmy
B. windy
C. cloudy
D. rainy

18. A _____ does not sink in water.
A. stone
B. iron
C. pin
D. paper
19. The best soil for growing crops is _____ soil.
A. clay
B. loam
C. sand
D. black
20. Mosquitoes are small animals that spreads
A. Cholera
B. Typhoid
C. Malaria
D. Measles

21. The seed drawn below is of a



- A. maize
B. sorghum
C. beans
D. millet

22. Light travels on a _____ line.
A. curved
B. wavy
C. straight
D. zigzag
23. The best time to fly a kite is on a _____ day
A. calmy
B. rainy
C. cloudy
D. windy

24. _____ water has no dust particles.
A. Boiled
B. Filtered
C. Fetched
D. Dirty

25. _____ foods are **not** good for good healthy teeth?

- A. Hard
- B. Soft
- C. Salty
- D. Sugary




26. A doctor who treats our sick animals is called a

- A. veterinary
- B. doctor
- C. optician
- D. farmer

27. Too much rain causes

- A. wind
- B. rain
- C. floods
- D. drought

28. Which one of the below shape is the **best** to make a wheel?



29. Which type of weed is referred to as the **most** poisonous?

- A. Pigweed
- B. Black jack
- C. Sodom apple
- D. Thorn apple


30. We can take care of our animals by _____ them.

- A. burning them
- B. killing them
- C. beating them
- D. feeding them

31. In the abbreviation AIDS, the initial 'S' stands for

- A. signs
- B. syndrome
- C. symptoms
- D. spread

32. The instrument drawn below produces sound when



- A. blown
- B. beaten
- C. plucked
- D. struck

33. Which one of the following plants grow in dry places?

- A. Watering
- B. Cactus
- C. Maize
- D. Bananas

34. Water can be stored in a

- A. tank
- B. river
- C. desk
- D. cupboard

35. Animals that feed on both plants and meat are called,

- A. monkeys
- B. herbivores
- C. omnivores
- D. carnivores

36. The young one of a dog is known as a

- A. piglet
- B. kitten
- C. kid
- D. puppy

37. The snail protects itself from its enemies by

- A. hiding in a shell
- B. stinging
- C. changing colour
- D. running away

38. The house of a pig is known as a
 A. hutch
 B. kennel
 C. sty
 D. shed
39. Cassava is an example of a _____ crops.
 A. cereal
 B. fibre
 C. oil
 D. tuber
40. Which one of the following is not a living thing?
 A. Water
 B. Plants
 C. Cow
 D. Elephant
41. Which one of the following animals is not a harmful animal?
 A. Tick
 B. Termites
 C. Dog
 D. Spider
42. Dental carries is a tooth related problem also called
 A. dental cavity
 B. tooth decay
 C. bleeding gums
 D. gingivitis
43. On a hot day people can wear
 A. heavy clothes
 B. pullovers
 C. jackets
 D. vests
44. Ugali and potatoes give us
 A. energy
 B. minerals
 C. vitamins
 D. water

45. Special sounds includes all the following except
 A. drum beatings
 B. screaming
 C. bell ringing
 D. hooting of a car
46. The leaf drawn below belongs to a _____ crop



- A. peas
 B. maize
 C. mango
 D. beans
47. People who cannot see far are said to be
 A. small eyed people
 B. big eyed
 C. long sighted
 D. short sighted
48. The best time to harvest mature crops is during the _____ season.
 A. windy
 B. dry
 C. rainy
 D. wet
49. Animals kept at home by a farmer are called
 A. domestic animals
 B. wild animals
 C. small animals
 D. home animals
50. The general rules of cleanliness are called,
 A. clothes
 B. smartness
 C. hygiene
 D. beauty