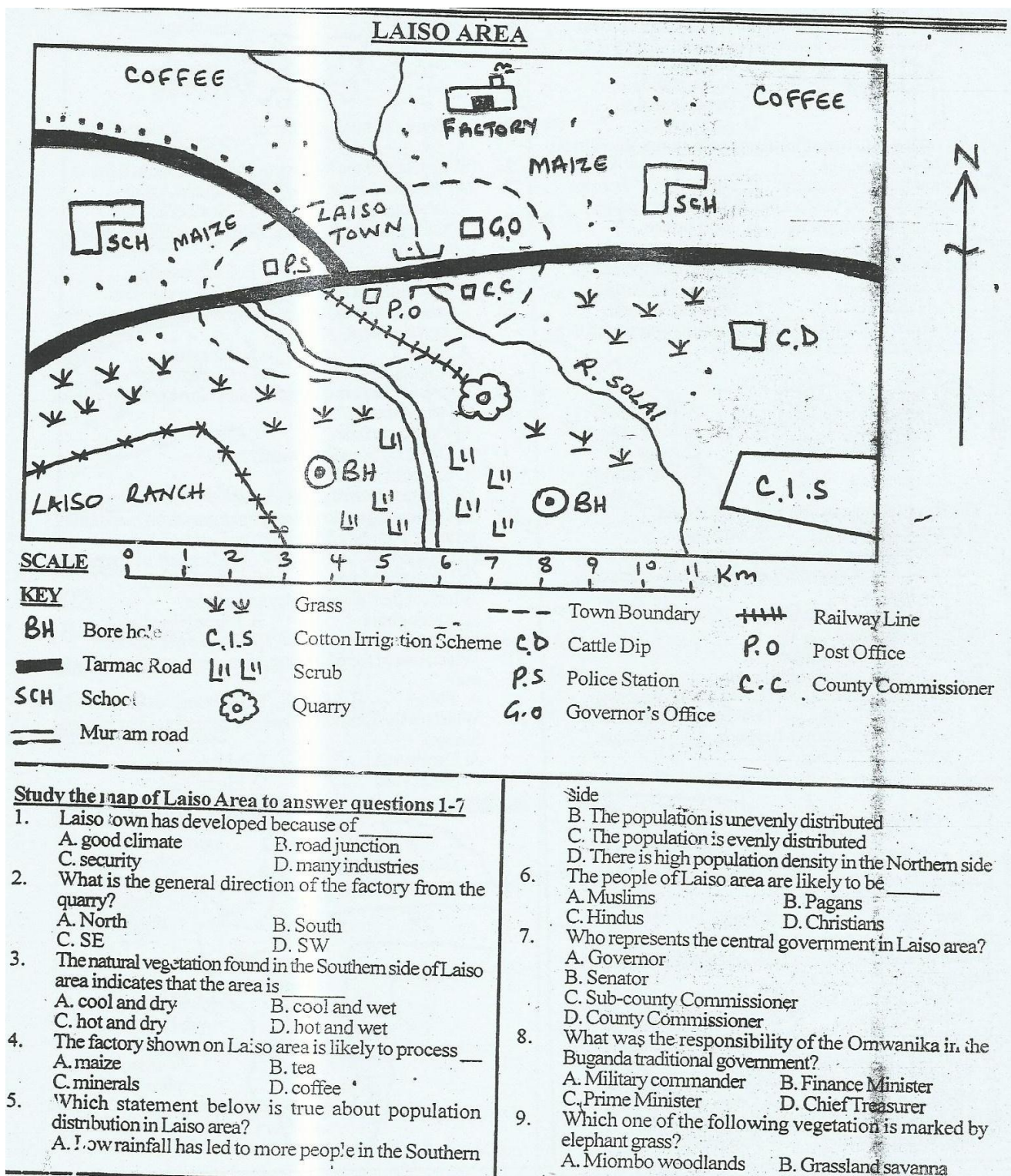

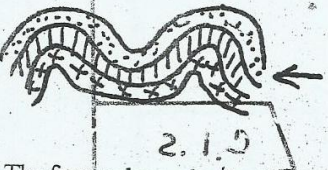


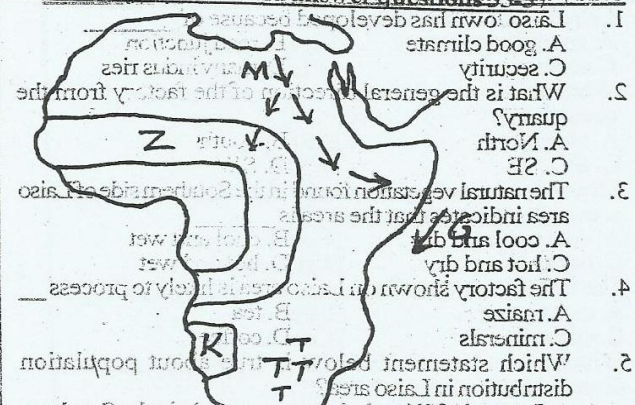




Standard 7 End Term 1 Exam, 2016



10. C. Mountain vegetation D. Mangrove vegetation
Tanganyika gained her independence mainly through
A. getting help from O.A.U. B. farming political parties
C. conducting armed struggle D. holding demonstrations
11. Which one of the following conditions is needed for sisal growing?
A. High altitude B. Red volcanic soils
C. Cool and wet climate D. Hot and dry climate
12. The weather instrument below is mostly found at the

A. airstrips B. police station
C. weather station D. game parks
13. According to the weather instrument above, the climate can be described as
A. cloudy B. sunny C. windy D. calm
14. Among the early visitors below, who was a trader?
A. Dr. David Livingstone B. John Speke
C. John Rebman D. Sir William Macdonald
15. The following were missionaries from Europe except
A. Dr. Livingstone B. Dr. Ludwig Krapf
C. H. H. Stanley D. Johanne Rebman
16. Which one of the following mountains was found as a result of the process below?

A. Kilimanjaro B. Mt. Elgon
C. Atlas D. Ruwenzori
17. The forces shown by the arrow are called
A. compressional B. tensional
C. horizontal D. vertical
18. Below is a description of a certain type of vegetation
(i) Thick forests
(ii) Has different type of trees
(iii) Evergreen trees
(iv) Grow near the equator
The vegetation described above is
A. Bushes and thickets B. Mountain vegetation
C. Tropical rain forest D. Savannah woodlands
19. The type of breeze shown below is

A. sea breeze B. land breeze
C. water breeze D. ocean current
20. Which Kabaka was captured by the British and sent to Seychelles where he died?
A. Kabaka Mutesa I B. Daudi Chwa
C. Kabaka Mwanga D. Kabaka Mutesa II
21. Which among the following were Africans not allowed to do by the British?
A. Work in settler farms B. Live in villages
C. Marry white women D. Grow cash crops
22. ICAD deals with all the following issues except
A. Promotion of trade B. Food security
C. Peace initiatives D. Promotion of a government with one central leader
23. A government with one central leader can best be described as
A. centralized government
B. decentralized government
C. a kingdom
D. democratic government
24. The fishing method drawn below is called

A. trawling B. purse seining
C. net drifting D. long lining
25. Africa has a total number of
A. 34 B. 50 C. 54 D. 58 countries
26. Which one of the following is not a region in Africa?
A. Western Africa B. Central Africa
C. Madagascar D. Northern Africa
27. Which one of the following factors does not affect climate negatively?
A. Global warming B. Deforestation
C. Damming of rivers D. Mining activities
28. Savannah woodland can be found in all of the following countries except
A. Malawi B. Tanzania
C. Angola D. Cameroon
29. Below are factors that influence climate in any part of the world except?
A. Ocean currents B. Distance from large water body
C. Shape of coastlines D. Distance from the meridians
30. The following are imaginary lines drawn on maps either running from North to South or East to West
(i) Equator (ii) Tropic of Cancer
(iii) Prime Meridian (iv) Arctic circle
Which of the following is not a latitude?
A. Arctic circle B. Prime Meridian
C. Tropic of Cancer D. Tropic of Capricorn
31. Which one of the following communities is the odd one out?
A. Fulani B. Maasai C. Turkana D. Tswana
32. Which of the following type of trees is found in planted forests?
A. Eucalyptus B. Mahogany
C. Meru Oak D. Elgon Teak

Study the map below and answer questions 1-4



33. Which of the following communities did not follow the migration route labelled M?
A. Dinka of Sudan B. Acholi of Uganda
C. Anuak of Ethiopia D. Luo of Kenya
34. The ocean current marked G is called
A. cold Somali B. warm Somali
C. cold Mozambique D. warm Mozambique
35. The major mineral mined at the area marked TT is called
A. copper B. diamond C. diatomite D. gold
36. The climatic region marked Z is called
A. Savanna B. Equatorial
C. Semi-desert D. Tundra
37. The capital city of the country marked K is
A. Rabat B. Windhoek
C. Tunis D. Bujumbura
38. Which of the following artificial lakes is the largest in surface area?
A. Lake Nasser B. Lake Kariba
C. Lake Volta D. Lake Akosombo
39. The cocoa triangle is made up of three towns. Which among the following is not among them?
A. Accra B. Tokoradi
C. Kumasi D. Akwapi
40. Which one of the following is the main product transported by the use of pipeline in Eastern Africa?
A. Milk B. Oil C. Water D. Paraffin
41. The major highway that enters East Africa at Mbeya and exists East Africa through Moyale is known as
A. Great North road B. Thika highway
C. Trans-Africa highway D. Kenya-Uganda highway
42. Among the following areas of Eastern Africa, which one is least populated?
A. Central Ethiopia highlands
B. Djibouti
C. Burundi
D. Area around Khartoum in Sudan
43. What time will it be in Manja town 10°W when it is 10.30pm in Dhamena 10°E?
A. 11.10am B. 9.50pm
C. 11.50pm D. 9.10am
44. The road sign drawn below means

A. road constructed ahead
B. no entry
C. no U-turn
D. no right turn
45. A politician was barred from holding a political rally. Which right was he denied? Right to
A. right to vote B. to work
C. freedom to movement D. freedom of association
46. Who among the following colonial agents is correctly matched with the region he was assigned?
A. Cecil Rhodes - Senegal
B. Dr. Wachtigalski - Southern Africa
C. Carl Peters - East Africa
D. Fredrick Jackson - Congo Basin
47. Which one of the following countries is not a member of ECOWAS?
A. Benin B. Ghana C. Gambia D. Madagascar
48. The following are foreigners who came to Eastern Africa.
(i) Vasco da Gama (ii) Seyyid Said
(iii) Carl Peter (iv) David Livingstone
Who among the arrived the earliest?
- A. Seyyid Said B. Carl Peters
C. Vasco da Gama D. David Livingstone
49. Which one of the following statements about Julius Nyerere is true. He
A. was a dictator
B. retired voluntarily as president of Tanzania
C. died while still in office
D. was the second president of Tanzania
50. Three of the following areas in Africa are sparsely populated except?
A. Nile Valley B. Namibia
C. Botswana D. Angola
51. Three of the following are not causes of soil erosion except?
A. mono culture B. overstocking
C. reforestation D. shifting cultivation
52. One of the physical features below is not found in Eastern Africa. Which one is it?
A. Fold mountain B. Ox-bow lake
C. Plains D. Plateau
53. The kingdom of the old Ghana was founded by the
A. Malinke B. Soninke
C. Mandinka D. Wolof
54. The type of rainfall shown below is called _____ rainfall

A. relief
B. frontal
C. convectional
D. highland
55. Among the following towns which one is likely to receive the above rainfall?
A. Mogadishu B. Arusha
C. Khartoum D. Addis Ababa
56. Who among the following is not a semitic speaker?
A. Nubians B. Falasha C. Tuaregs D. Aramanik
57. Three of the following were learnt through apprenticeship except.
A. wood carving B. iron smelting
C. herbal treatment D. livestock keeping
58. Three of the following resisted the colonial rule in Africa except.
A. Khoitalel Arap Samoei
B. Mekatilili wa Menza
C. Mekatilili wa Lozi D. Mkwawa wa hehe
59. Who is the head of the legal system in Kenya?
A. Chief Justice B. Head of state
C. Leader of the majority D. Attorney General
60. Who among the following African nationalists served the longest term?
A. Jomo Kenyatta B. Nelson Mandera
C. Gamal Abdel Nasser D. Mwalimu Julius Nyerere
- C.R.E.**
61. Which of these responsibilities was not given to man after creation?
A. Cultivate and guard the land
B. Name all animals
C. Care for all God's creation
D. To remain idle and free
62. The rainbow was a sign of the covenant between God and
A. Moses B. Noah C. Abraham D. Lot
63. When God told Abraham to leave his homeland, Abraham obeyed Him because
A. God promised to give him a new land

- B. God promised to give him many children
C. He had faith in God
D. He was a holy man
64. God asked the leaders of Israel to Mark the Passover by doing the following except
A. sacrifice lambs B. stay indoors
C. smear the door posts with blood
D. kill their first borns
65. God filled _____ with the ability of working in gold, silver and bronze.
A. David B. Bezalel C. Joshua D. Moses
66. The new covenant that Jeremiah foretold was to be _____
A. between God and the Israelites
B. between God and the nations
C. between God and each individual
D. fulfilled during the second coming of Jesus
67. Who among the following was a talented musician and could play the harp very well?
A. David B. Adam C. Abraham D. Joseph
68. Who of the following kings of Israel took Naboth's vineyard?
A. Ahab B. Saul C. Solomon D. David
69. During the journey to the promised land the Israelites encountered many problems. This teaches Christians to be _____
A. united B. hardworking
C. faithful D. tolerant
70. It is important for Christians to forgive others in order to
A. become famous in the community
B. win respect in the community
C. maintain harmony in the community
D. become leaders in the community
71. Which of the following is the best way to treat strangers?
A. Run away from strangers
B. Follow them
C. Eat whenever they give you
D. Invite them to our homes with the help of our parents
72. The ability to notice something after thinking carefully or after studying is called?
A. Life skills B. Judgement
C. Critical thinking D. Discernment
73. Which of the following is a reason why Jesus was born?
A. To reconcile us with God
B. To choose the twelve disciples
C. To perform miracles
D. To suffer for the sake of God
74. According to the beatitudes of Happy, are those who work for peace
A. God shall comfort them
B. God shall call them His children
C. For they shall see God
D. They shall receive what God has promised
75. The following are causes of child labour. Which one is not?
A. Poverty B. Death of parents
C. Irresponsible parents D. Education
76. Which of the following values we acquire in education mean honouring people by treating them in a kind way?
A. Obedience B. Honesty
C. Respect D. Sharing
77. Three of the following are ways to improve your abilities. Which one is not?
A. Telling your friends about your abilities
B. Constantly using your abilities
C. Praying to God to help you improve your abilities
D. Reading books about others who have used their abilities
78. Which of the following is the best way of helping refugees?
A. giving them identity cards
B. employing them as home helps
C. make their living better
D. building permanent homes
79. Which of the following happened on the day of Pentecost?
A. Jesus resurrected
B. Disciples were filled with the Holy Spirit
C. Zacheaus climbed a sycamore tree
D. Disciples shared meals
80. Which of the following actions of Jesus showed service?
A. Washing disciples feet
B. Whipping money-changers in the temple
C. Walking on water
D. Changing water into wine
81. Which one of the following was not brought to baby Jesus when he was born in Bethlehem?
A. Beads B. Myrrh
C. Gold D. Frankincense
82. The following are ways that make us be infected with HIV/AIDs. Which one is not?
A. Hugging people
B. Sharing cutting objects
C. Not abstaining from sex
D. Infected blood transfusion
83. Forgiveness and reconciliation promotes the following except?
A. Revenge B. Love C. Peace D. Care
84. Ceremonies connected with birth and pregnancy celebrate
A. new families B. baptism
C. initiation D. new life
85. Which of the following statements best describes the pain Jesus experienced on Mt. Olives? He _____
A. screamed
B. shivered
C. shouted
D. sweat large drops of blood
86. According to the teachings of Jesus eternal life means?
A. Life with an end
B. Obeying the ten commandments
C. Practising Christ
D. Life without an end
87. Which of the following statements is not true about authority?
A. Those in authority have power to punish wrongdoers
B. Authority comes from God
C. Authority brings peace and order in the society
D. Christians should not obey politicians because all politicians are corrupt
88. African used circumcision as a rite of passage. This rite is similar to _____ in Christianity.
A. baptism B. marriage
C. rebirth D. death
89. Who among the following was not among the seven deacons chosen by the early believers?
A. Permenas B. Barnabas
C. Timon D. Philip
90. Which one of the following actions can lead to immorality between boys and girls?
A. Singing and dancing B. Drinking alcohol
C. Visiting the sick D. Watching television