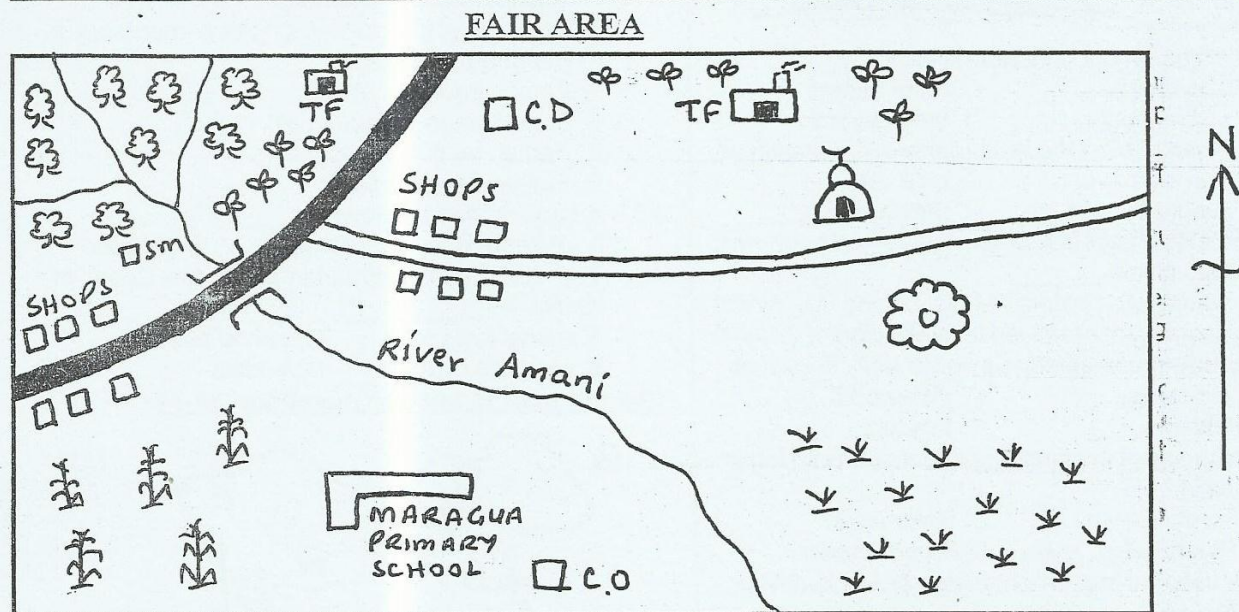


Standard 5 End Term 1 Exam, 2016

003

SOCIAL STUDIES/C.R.E.

TIME: 2HRS 15 MINS



KEY


	Forest		Maize plant		Quarry		Factory
	Grass		River and Bridge		School		Tarmac Road
	Tea		Shops		Saw Mill		Mosque
			C.O				Murram road


Study the map of Fair Area to answer questions

1-7

- The main economic activity of Fair county is?
 - Tourism
 - Fishing
 - Farming
 - Mining
- The religion of the people of Fair county is likely to be _____.
 - Hinduism
 - Christianity
 - Paganism
 - Islamic
- The river Amani flows from _____ to _____.
 - North East to South West
 - North West to South East
 - North to South
 - South to North
- The factory above is likely to process?
 - Tea
 - Coffee
 - Pyrethrum
 - Banana
- The source of river Amani is _____.
 - county office
 - maize plant
 - forest
 - farm
- The main means of transport in Fair county is
 - water transport
 - Air transport
 - Road transport
 - Rail transport
- Fair county is administered by _____.
 - governor
 - assistant chief
 - District officer
 - chief
- Which one of the following line of latitude is C?
 - longitude
 - Greenwich
 - equator
 - Prime meridian
- In the past people traded by exchanging goods for other goods. This was referred to as _____.
 - community trade
 - batter trade
 - export trade
 - slave trade
- The type of forest that is found along the coast of Kenya is known as _____.
 - planted forest
 - papyrus and reeds
 - mangrove
 - riverline
- A member of parliament is elected by registered voter to represent?
 - civic ward
 - constituency

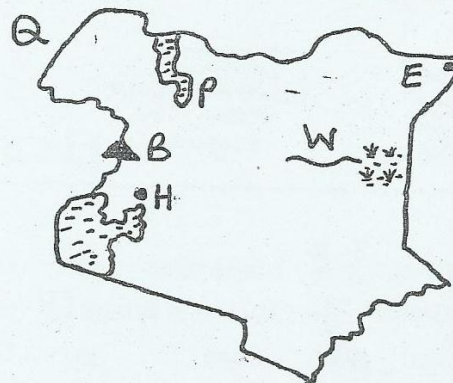
B. country D. county
 Use the diagram below to answer questions 12-14



12. The above type of rainfall is called _____.
 A. sea breeze C. relief rainfall
 B. convectional D. land breeze
13. The part of the mountain marked Y is known as
 A. rain side C. side ways
 B. windward side D. leeward side
14. The side marked X is famous for an economic activity called _____.
 A. farming B. pastoralism C. fishing D. mining
15. The coming of Arabs led to interaction of Coastal Bantus, that resulted to a community known as
 A. Mijikenda C. Waswahili
 B. Giriama D. Wataita
16. Which one of the following rivers drain into Indian Ocean?
 A. River Mfando C. River Ashir
 B. River Ewaso Nyiro D. River Turkwel
17. The weather instrument drawn below is called _____.

 A. windsock
 B. raingauge
 C. windvane
 D. barometer
18. Which of the following countries borders Kenya to North West?
 A. Ethiopia B. Uganda C. Somalia D. Sudan
19. The main means of transport in urban centres is
 A. Rail transport C. Water transport
 B. Road transport D. Air transport
20. Cash crops are grown in large farms known as _____.
 A. shamba system C. garden
 B. plantations D. ranches
21. The activity of cutting down of trees without replanting is known as _____.
 A. deforestation C. re-afforestation
 B. agro-forestry D. afforestation
22. A person who maintains law and order in a county is _____.
 A. Kenya army C. Area chief
 B. Local MP D. The police
23. The main tourist attraction in Kenyan Coast is
 A. Fort Jesus C. Beautiful scenery
 B. Sandy beaches D. Wildlife
24. Area where a lot of people live are said to be
 A. Sparsely populated C. Densely
 B. Densely populated D. Census
25. River that flows during rainy season and dry up during dry season are called _____.

- A. flowing river C. seasonal
 B. drying river D. permanent
26. Which one of the following groups of communities migrated into Kenya from the horn of Africa?
 A. Akamba, Ameru, Aembu
 B. Pokomo, Mijikenda, Taita
 C. Turkana, Samburu, Iteso
 D. Borana, Somali, Rendile
27. Which one of the following group represent a single parent family?
 A. Father, daughter, niece
 B. Father, nephew, daughter
 C. Father, mother, daughter
 D. Father, daughter, son
28. A chain of hills is known as _____.
 A. plateau B. nyika C. valley D. ranges
29. The main tourist attraction along the Coast of Kenya is _____.
 A. mangrove forest C. sandy beaches
 B. people's culture D. wildlife

Use the map to answer questions 30-34



30. The river marked W is river
 A. Ewaso Nyiro B. Tana C. Kuja D. Athi
31. The country that borders Kenya to the North West is _____.
 A. Somalia B. Sudan C. Uganda D. Ethiopia
32. The town marked H and E are _____.
 A. Kisumu and Mandera
 B. Kisii and Kisumu
 C. Kakamega and Mandera
 D. Kisumu and Wajir
33. The mountain marked B is Mt. _____.
 A. Elgon B. Meru C. Kenya D. Kulal
34. The lake marked P is _____.
 A. L. Magadi C. L. Nakuru
 B. L. Elementaita D. L. Turkana
35. Which of the following is not an element of weather?
 A. Winds C. Temperature
 B. Rainfall D. Altitude
36. The walls of either side of Rift Valley are called _____.
 A. landscapes C. escarpments
 B. slopes D. steep valley

37. The most commonly used means of transport in Kenya is _____.
A. Rail transport C. Water transport
B. Air transport D. Road transport
38. The place where a river joins a lake or an ocean is called _____.
A. tributary B. confluence C. mouth D. source
39. Which one of the following is not a factor causing soil erosion?
A. Afforestation C. Overstocking
B. Monocropping D. Deforestation
40. Cattle reared for meat are called _____.
A. meat cattle C. broilers cattle
B. beef cattle D. dairy cattle
41. Poultry kept for egg production are called _____.
A. beef B. broilers C. dairy D. layers
42. Which national holiday is celebrated on 20th October?
A. Kenyatta day C. Mashujaa day
B. Jamhuri day D. Moi day
43. One can get an identity card at the age of _____.
A. 21 years C. 15 years
B. 35 years D. 18 years
44. Which one of the following is not a cause of road accident in Kenya?
A. Being sober always B. Unroadworthy vehicles
C. Overspeeding D. Over loading
45. The following are ways in which people interacted in the past. Which one is not?
A. Imitation C. Initiation
B. Calamities D. Wars
46. Which of the following rivers is the longest in Kenya?
A. R. Yala B. R. Athi C. R. Tana D. Ewaso Nyiro
47. The illegal killing of wild animals is called _____.
A. drenching C. offence
B. poaching D. murder
48. The growing of flowers, fruits and vegetables is referred to as _____.
A. horticulture C. cash crop farming
B. mixed farming D. agriculture
49. Below are elements of good citizenship except?
A. promotion of peace C. nepotism
B. loyalty D. patriotism
50. What is referred to as culture?
A. people way of dressing
B. people way of life
C. what people eat
D. people's political life
51. Below are elements of a good map. Which is NOT?
A. Key B. Size C. Frame D. Scale
52. As a type of food, fish is rich in _____.
A. Salts B. Starch C. Fats D. Proteins
53. Which colour represents peace on the Kenyan flag?
A. Black B. White C. Green D. Red
54. Which one of these communities is NOT a Plain Nilotes?
A. Maasai B. Luo C. Samburu D. Turkana
55. The first Europeans to arrive at the Kenyan Coast were the _____.
A. Germans B. Italians C. Portuguese D. British
56. The first president of Kenya was _____.
A. Mwai Kibaki C. Daniel Arap Moi
B. Uhuru Kenyatta D. Johnstone Kamau
57. A Std. 5 pupil was going to school in the morning. He was walking towards his shadow. Which direction was he coming from?
A. North B. South C. East D. West
58. Three of the following are ways of protecting children from child abuse. Which one not?
A. Giving punishment to child abusers
B. Educate children on their rights
C. Encouraging children to study hard
D. To counsel their victim
59. Which one of the following is not importance of fishing?
A. Only one type of people should eat fish
B. It is a source of employment
C. It is a source of protein
D. It is a source of income
60. Which one of the following can cause disagreement among the pupils?
A. Pupils obeying the school rules and regulation
B. Pupils talking bad things about others
C. Pupils respecting the prefects
D. Pupils obeys the others
- C.R.E.**
61. _____ refers to the movement of Israelites from Egypt.
A. Exodus B. Movement C. Journey D. Migration
62. The last book in the New Testament is _____.
A. Malachi B. Revelation
C. Genesis D. Matthew
63. Unselfishness means _____.
A. hating others B. by loving his wife
C. being unkind to others D. being kind to others
64. How did Abraham show his faith to God?
A. By accepting to sacrifice his son
B. By loving his wife
C. By marrying Sarah
D. By praying always
65. The prince of peace is _____.
A. Jesus B. Abraham C. Samuel D. God
66. A good leader is someone who _____.
A. talks about other people's problems
B. ignore other people's problems
C. laughs at other people's problems
D. listens to other people's problems
67. Immanuel means _____.
A. beloved C. God with us

- B. saviour D. teacher
68. We remember the death and resurrection of Jesus on
A. Easter Monday C. Pentecostal day
B. Good Friday D. Christmas day
69. Which gift of the Holy Spirit did the disciples of Jesus receive during the day of Pentecost?
A. Wisdom C. Faith
B. Teaching D. Speaking in tongues
70. Ananias and Saphira were punished because of ____
A. killing
B. cheating the Holy Spirit
C. disobeying the apostles
D. stealing money
71. Jesus raised Lazarus after he was dead for ____ days.
A. two B. one C. four D. three
72. Who saw a burning bush?
A. Moses B. Noah C. Elijah D. Abraham
73. King Solomon was famous ____
A. because of his wealth
B. because of killing Goliath
C. for his many wives
D. for his wisdom
74. As a Christian child, if a shopkeeper gives you more money as change, what should you do?
A. Take the money to your parents
B. Make offering in church
C. Share the money with friends
D. Give it back to the shopkeeper
75. Eternal life means ____
A. short life C. life without an end
B. a happy life D. life after baptism
76. Adam and Eve were punished by God because they ____
A. were selfish C. killed Abel
B. talked to the snake D. disobeyed God
77. What is the right thing to do when fasting?
A. Stay alone so as not to be tempted by others
B. Look miserable so that people will know
C. Tell people that we are fasting
D. Be cheerful and do it privately
78. The word "Catholic" means?
A. God with us
B. Let the children come to me
C. Universal or worldwide
D. Christianity
79. Which is NOT a fruit of the Holy Spirit?
A. Humility B. Love C. Joy D. Anger
80. Christmass should be a time for ____
A. visiting recreation centres
B. Sharing and helping the needy
C. Visiting friends
D. Feasting
81. Jesus showed obedience to his parents by ____
A. agreeing to go back with his parents to Nazareth
B. change water into wine
C. calming the storm
D. remaining in the temple
82. The traditional communities had their own ways of worshipping God except?
A. Facing mountains C. In church
B. In caves D. Under trees
83. The first disciples of Jesus were ____
A. tax collectors C. fisherman
B. farmers D. teachers
84. A true Christian witness should do the following except?
A. friendship with other Christians
B. reading the Bible dairy
C. indiscipline
D. pray
85. The first miracle that Jesus performed was ____
A. turning water into wine
B. healing a sick man
C. raised Jairus daughter
D. walking over the water
86. Among the following which is good in leadership?
A. A leader who listens to others
B. A leader who talks much and does nothing
C. A violent leader
D. A dishonest leader
87. Jesus has power over life to provide food for help us our work and the weather. Which of the following shows power over the weather?
A. Calming the storm
B. Helping the work of fisherman
C. Raising Martha's brother
D. Feeding the five thousand
88. In African traditional way of life, a child was accepted as an adult after ____
A. going to school C. initiation
B. baptism D. marriage
89. Your younger brother leaves the gate open. The goats go into a shamba and you are quarreled by your mother. What should you do as a Christian?
A. Tell your mother that you are going to plant all the crops that were destroyed
B. Explain to your mother what happened and say sorry
C. Beat your younger brother
D. Run away from home
90. What is the most importance commandment according to Jesus
A. The commandment of the love for God and people
B. Remember to keep the Sabbath day holy
C. Honour your parents
D. Do not covet other people's property