

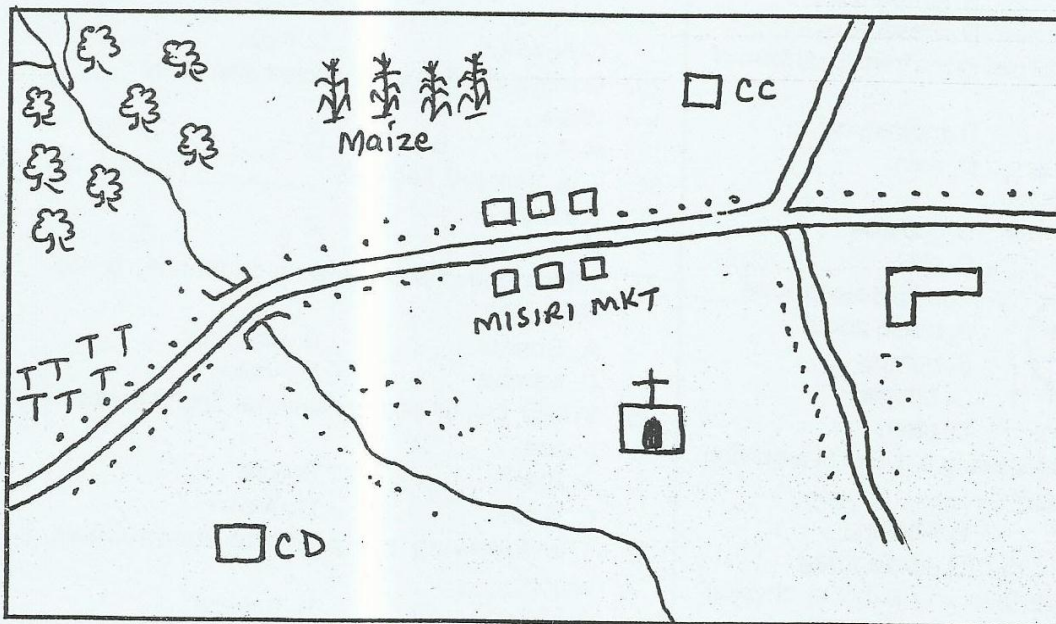
Standard 4 End Term 1 Exam, 2016

003

SOCIAL STUDIES/C.R.E.

TIME: 2HRS 15 MINS

MABANGA AREA



KEY



Bridge



Tea



Forest



Church



River



Chief's Camp



Maize



School



Murram Road



Market



Cattle Dip




Cattle Dip

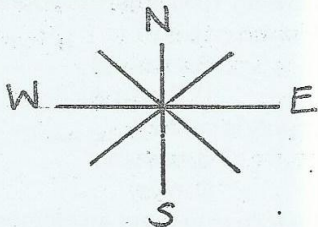
Study the map of Mabanga Area above to answer questions 1-7

- Which one of the following is cash crop grown in Mabanga area?
A. Maize B. Tea
C. Coffee D. Beans
- The direction of the school from the cattle dip is
A. North East B. West
C. South East D. North
- People in Mabanga area cross river Lutungu using ____
A. boat B. lift
C. bridge D. fly over
- Mabanga area is administered by ____
A. senator B. inspector
C. D.O. D. chief

- The main religion in Mabanga area is ____
A. Islam B. Christianity
C. Hinduism D. paganism
- The source of River Lutungu is ____
A. tea plantation B. maize plantation
C. bridge D. forest
- One of the following facility is not found in Mabanga area, which one is it?
A. School B. Hospital
C. Church D. Cattle dip
- The head of a county is called ____
A. senator B. governor
C. speaker D. chief
- Which one of the following is not an element of weather?
A. Rainfall B. Temperature
C. Wind D. Air

0. Which one of the following is a cash crop?
 A. Sweet potato B. Banana
 C. Pyrethrum D. Cassava
1. Areas where beef cattle are kept are known as ____
 A. cattle ranches B. cattle trough
 C. cattle dip D. cattle boma
2. The coldness or hotness of a place is called ____
 A. altitude B. temperature
 C. humidity D. pressure
13. Which one of the following is a traditional form of transport?
 A. aeroplane B. motorcycle
 C. animals D. train
14. Pots are made of ____
 A. palms B. papyrus
 C. ropes D. clay
15. The road sign shows ____

 A. round about B. bumps
 C. bridge D. stop
16. Which one of the following is a way of resolving problems at school?
 A. Fighting B. Abusing
 C. Revenging D. Apologizing
17. Which one of the following is not a physical feature?
 A. Mountain B. River
 C. Dam D. Plateau
18. Forests can give us the following except ____
 A. timber B. honey
 C. firewood D. fencing posts
19. Kenya is divided into ____ counties.
 A. 47 B. 290 C. 20 D. 8
20. Areas with many people are said to be ____ populated.
 A. sparsely B. densely
 C. thinly D. small


Use the compass below to answer 21-22



21. The direction between North and East is called ____
 A. North East B. North and East
 C. East North D. East and North

22. Akinyi's school is at the North she follows a road opposite her school when going home. Akinyi's home is at ____
 A. East B. South
 C. West D. North
23. Crop grown for food is called ____
 A. food crop B. cash crop
 C. sell crop D. relief crop
24. The Luo called their God ____
 A. Were B. Engoro
 C. Nyasaye D. Ngai
25. General election is conducted after every ____ years.
 A. 7 B. 5 C. 4 D. 10
26. The national flag has ____ number of colours.
 A. 4 B. 3 C. 6 D. 5
27. Which one of the following community is not Bantus?
 A. Borana B. Abagusii
 C. Kamba D. Ameru
28. Which colour of our National flag represent peace?
 A. Black B. Red
 C. White D. Green
29. The following are pastoral communities except ____
 A. Maasai B. Turkana
 C. Kamba D. Samburu
30. Mashujaa day is celebrated on ____
 A. 1st June B. 1st May
 C. 12th December D. 20th October
31. The following are modern methods of communication except?
 A. Smoke B. Telephone
 C. Radio D. Newspaper

Use the diagram below to answer questions 32-34



32. The arrows marked A carries ____
 A. moisture B. dust
 C. smoke D. temperature
33. The type of rainfall shown above is ____
 A. cloudy rain B. relief rain