

Standard 4 End Term 1 Exam, 2016

1. Name the tooth shown below _____



- A. incisor
- B. canine
- C. premolars
- D. molars

2. What is the function of the tooth shown above

- A cutting and biting food
- B. tearing flesh
- C. grinding food
- D. chewing food

3. Plants which grow in places where they are not wanted are called _____

- A. winds
- B. weeds
- C. grass
- D. mulches

4. Cereals includes the following except

- A. sorghum
- B. barley
- C. wheat
- D. cabbage

5. Shapes of the moon are referred to as

- A. faces
- B. paces
- C. phases
- D. crescents

6. Which clouds brings rainfall?

- A. Cirrus
- B. Nimbus
- C. Cumulus
- D. Gibbous

7. Which type of crops produces strings for weaving?

- A. Beverage
- B. Fibre
- C. Oil
- D. Cereal

8. The colour of the sky is _____

- A. blue
- B. grey
- C. white
- D. dark grey

9. HIV virus makes the body _____

- A. strong
- B. good
- C. weak
- D. wick

10. Tooth decay is a problem caused by,

- A. juice
- B. saliva
- C. acid
- D. soda

11. Which of the following is not a problem relating to teeth?

- A. Bleeding gums
- B. Tooth cavities
- C. Tooth decay
- D. Sweet smell

12. The following are ways of caring for animals at home which one is not?

- A. watering
- B. feeding
- C. housing
- D. beating

13. How can we make water safe for drinking?

A. Boiling

B. Adding mud

C. Putting humus

D. Pouring

14. The sense of sight uses _____

- A. ears
- B. eyes
- C. nose
- D. hands

15. Which of the following is not a requirement for good health?

- A. Food
- B. Rest
- C. Exercise
- D. Fighting

16. How do bees protect themselves?

- A. Biting
- B. Stinging
- C. Coiling
- D. Runs away

17. Which of the following is not a use of plants to human beings?

- A. Shade
- B. Medicine
- C. Food
- D. Transport

18. People who do not talk uses _____ to communicate.

- A. mouth
- B. gestures
- C. eyes
- D. head

19. Milk teeth are referred to as the following except

- A. wisdom
- B. temporary
- C. deciduous
- D. primary

20. Which of the following should not be shared?

- A. Tooth brush
- B. Plate
- C. Cup
- D. Ball pen

21. HIV stands for _____

- A. Human Immuno Deficiency Virus
- B. Health Immuno Deficiency Virus
- C. Human Immunity Virus
- D. Health Immunity Virus

22. Which problem of teeth is shown below



- A. gingivitis
- B. cavities
- C. dental canine
- D. gum

23. We see a doctor when we are _____

- A. hungry
- B. sick
- C. healthy
- D. fine

24. We record daily weather changes in a weather _____

- A. chart
C. map
B. symbol
D. title

25. A fish moves by _____

- A. jumping
C. hopping
B. walking
D. swimming

26. A doctor who treats teeth is called _____

- A. dentist
C. optician
B. surgeon
D. nurse

27. Moving air is also called _____

- A. dust
C. wind
B. rain
D. trees

Name the parts of the plant shown below



28. A leaf
C. root

B. flower
D. fruits

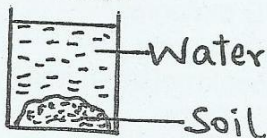
29. A. flower
C. leaf

B. stem
D. fruit

30. We make baskets from _____ crops.

- A. fibre
C. oil
B. beverage
D. legumes

31. When water is put in soil as shown below what can be seen



- A. air
B. stones
C. bubbles
D. rocks

32. We wear light clothes when it is _____

- A. sunny
C. raining
B. cold
D. wet


33. A bicycle has _____ wheels.

- A. 2
B. 3
C. 1
D. 4

34. We breath in _____

- A. heat
B. soil
C. water
D. air

35. The plant below grows in _____ areas.



- A. swampy
B. wet
C. dry
D. hot

36. A 5 years old boy has _____ teeth.

- A. 32
B. 4
C. 16
D. 20

37. _____ soil is used for modelling.

- A. Rocky
C. Clay
B. Loam
D. Sand


38. The ability of the body to fight against diseases is called _____

- A. acquired
C. immunity
B. deficiency
D. syndrome

39. How many canine are there in an adult _____

- A. 6
B. 4
C. 8
D. 12

Use the chart below to answer questions 40- 42



Tuesday Wednesday Thursday

40. What was the weather like on Thursday?

- A. Forestry
C. Rainy
B. Windy
D. Cloudy

41. Which day was sunny _____?

- A. Wednesday
C. All
B. Thursday
D. Tuesday

42. Pupils used _____ on Wednesday to protect themselves from rain.

- A. pilates
C. leaves
B. umbrellas
D. shoes

43. In the abbreviation AIDs 'S' stands for

- A. sex
C. symptoms
B. serious
D. socks

44. Which animals gives us pork meat?

- A. Cow
C. Pig
B. Hen
D. Sheep

45. Coffee is an example of _____ crops?

- A. beverage
C. fibre
B. oil
D. drinks

46. The following are organisms found in soil except

- A. earthworms
C. centipedes
B. butterflies
D. ants

47. Which one of the following is not a weed?

- A. Sodom apple
C. Sweet potatoes
B. Oxalis
D. Black jack

48. We eat the _____ of the sugarcane.

- A. leaves
C. roots
B. stem
D. flowers

49. People who study weather are called _____

- A. Meteorologists
C. Teachers
B. Scientists
D. Meteorology

50. Which of the following is not a way of storing water?

- A. Tap
C. Tank
B. Drum
D. Dam