

# Standard 3 End Term 1 Exam, 2016

003

## MATHEMATICS

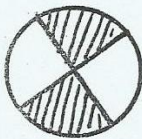
NAME: ..... SCHOOL: ..... DATE: .....

### Write in words

1. 400 \_\_\_\_\_
2. 46 \_\_\_\_\_
3. 160 \_\_\_\_\_
4. 80 \_\_\_\_\_
5. 102 \_\_\_\_\_

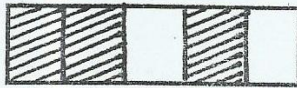
### What fraction is shaded?

6.



\_\_\_\_\_

7.



\_\_\_\_\_


### Name the shapes

8.




\_\_\_\_\_

9.



\_\_\_\_\_

10.



\_\_\_\_\_

11. 720 = \_\_\_\_\_ hundreds \_\_\_\_\_ tens \_\_\_\_\_ ones.

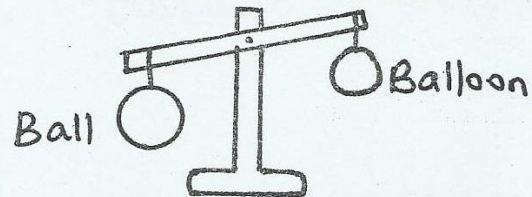
12. 507 = \_\_\_\_\_ hundreds \_\_\_\_\_ tens \_\_\_\_\_ ones.

13. 312 = \_\_\_\_\_ hundreds \_\_\_\_\_ tens \_\_\_\_\_ ones.

14. 96 = \_\_\_\_\_ hundreds \_\_\_\_\_ tens \_\_\_\_\_ ones.

15. 4 = \_\_\_\_\_ hundreds \_\_\_\_\_ tens \_\_\_\_\_ ones.

16. Which one is heavier?



17. 200 pupils + 420 pupils = \_\_\_\_\_ pupils.

### EXPAND

#### Example

$140 = 100 + 30 + 10$

18.  $490 = \underline{\hspace{1cm}} + \underline{\hspace{1cm}} + \underline{\hspace{1cm}}$

19.  $200 = \underline{\hspace{1cm}} + \underline{\hspace{1cm}} + \underline{\hspace{1cm}}$

20.  $310 = \underline{\hspace{1cm}} + \underline{\hspace{1cm}} + \underline{\hspace{1cm}}$

21. 3 cows have \_\_\_\_\_ legs.

22. Take away Shs. 200 from 500  
\_\_\_\_\_

23. How many legs do 10 girls have? \_\_\_\_\_





$$\begin{array}{r} 24. \quad 272 \\ - 60 \\ \hline \end{array}$$

$$\begin{array}{r} 25. \quad 107 \\ - 92 \\ \hline \end{array}$$

26. Lucy had 100 cups. If two broke how many remained?

27. There are \_\_\_\_\_ months in one year.

28. The month of December has \_\_\_\_\_ days.

29. There are \_\_\_\_\_ minutes in one hour.

**Draw**

30. Wavy line

31. Zig zag

32. Mark is 12 months old and Mary is 1 year old. Who is older? \_\_\_\_\_

$$33. \quad 16 - \boxed{\phantom{00}} = 4$$

$$34. \quad 28 - \boxed{\phantom{00}} = 17$$

$$35. \quad \boxed{\phantom{00}} - 12 = 13$$

$$\begin{array}{r} 36. \quad 74 \\ + 13 \\ \hline \end{array}$$

$$\begin{array}{r} 37. \quad 87 \\ - 15 \\ \hline \end{array}$$

38. Okoth bought 2 packets of milk and 1 book. How much did he pay altogether?



shs 40.



shs 10



sweet  
shs 3

39. How much money did Wambui pay for 1 packet of milk and 1 sweet? \_\_\_\_\_

40. Irene bought 4 books and a sweet. What balance was she given if she had one hundred shilling? \_\_\_\_\_

**Arrange from the biggest to the smallest.**

41. 111, 72, 610, 37, 105

42. 05, 12, 40, 06, 100, 4, 8

**Complete the following pattern**

43. 12, 15, 18, \_\_\_\_\_

44. \_\_\_\_\_, 20, 15, 10, 5

45. 33, \_\_\_\_\_, \_\_\_\_\_, \_\_\_\_\_, 37, 38

46.  $50 + 10 =$  \_\_\_\_\_

47. How many legs does one cow have? \_\_\_\_\_

48.  $4 \times 3 =$  \_\_\_\_\_

**ADD**

$$\begin{array}{r} 49. \quad 132 \\ + 100 \\ \hline \end{array}$$

$$\begin{array}{r} 50. \quad 270 \\ + 33 \\ \hline \end{array}$$