

# Standard 1 End Term 1 Exam, 2016

003


## MATHEMATICS

NAME: .....


SCHOOL .....

DATE .....

### Count and write

1.  = \_\_\_\_\_

2.  = \_\_\_\_\_

3.  = \_\_\_\_\_

4.  $4 + 6 =$

5.  $10 + 8 =$

6.  $3 + 4 + 2 =$

7.  $10 + 2 + 1 =$

8.  $9 + 9 + 9 =$

9.  $8 + 7 =$

10.  $20 + 50 =$

11. 
$$\begin{array}{r} 34 \\ + 21 \\ \hline \end{array}$$

12. 
$$\begin{array}{r} 6 \\ + 3 \\ \hline \end{array}$$

13.  $19 + 2 =$

14. 
$$\begin{array}{r} 96 \\ + 3 \\ \hline \end{array}$$

15. 
$$\begin{array}{r} 4 \\ + 2 \\ \hline \end{array}$$

### Take away

16.  $12 - 0 =$

17.  $9 - 3 =$

18.  $60 - 30 =$

19.  $5 - 5 =$

20.  $27 - 20 =$

21.  $40 - 20 =$

22. 
$$\begin{array}{r} 70 \\ - 10 \\ \hline \end{array}$$

23. 
$$\begin{array}{r} 66 \\ - 32 \\ \hline \end{array}$$

24. 
$$\begin{array}{r} 49 \\ - 27 \\ \hline \end{array}$$

25. 
$$\begin{array}{r} 77 \\ - 52 \\ \hline \end{array}$$

26.  $9 - \boxed{\phantom{00}} = 9$

27.  $\square + 3 = 12$

28.  $15 - \square = 9$

29.  $\square + \square = 10$

30.  $\square - 6 = 1$

31. 2 eggs + 4 eggs = \_\_\_\_ eggs.

32. Add four pens to two pens  
\_\_\_\_\_

33. Write from the largest to the smallest  
**19, 10, 3, 12, 5, 6, 11**  
\_\_\_\_\_

34. Take away one from six \_\_\_\_\_

Draw the shapes

35. triangle

36. square

37. oval

38. 
$$\begin{array}{r} 2 \\ + 4 \\ \hline \end{array}$$




39. 
$$\begin{array}{r} 3 \\ + 3 \\ \hline \end{array}$$

40. 
$$\begin{array}{r} 6 \\ + 9 \\ \hline \end{array}$$

41. A sheep has \_\_\_\_\_ legs.


42. One year have \_\_\_\_\_ months.

43. I have \_\_\_\_\_ fingers.

44.     
\_\_\_\_\_ tens \_\_\_\_\_ ones.

45. Add ten o four = \_\_\_\_\_

46. Which is bigger?



47. 12 take away 2 = \_\_\_\_\_

Complete numbers

48. 5, 4, 3, \_\_\_\_\_, \_\_\_\_\_

49. 10, 9, 8, 7, 6, \_\_\_\_\_, \_\_\_\_\_, \_\_\_\_\_

50. 32, \_\_\_\_\_, 34, 35, \_\_\_\_\_, 37, 38