

SOCIAL STUDIES PAPER
CLASS EIGHT
FOR K.C.P.E 2015

AVAILABLE ONLINE AT:

Schools Net Kenya Consultancy

P.O. Box 8076 – 00200 Nairobi, Kenya | Tel: +254202319748

E-mail: infosnkenya@gmail.com | www.schoolsnetkenya.com

**SOCIAL STUDIES
AND
RELIGIOUS
EDUCATION**

Time: 2 hours 15 minutes

READ THESE INSTRUCTIONS CAREFULLY

1. You have been given this question booklet and a separate answer sheet. The question booklet contains 90 questions.
2. Do any necessary rough work in this booklet.
3. When you have chosen your answer, mark it on the **ANSWER SHEET**, not in the question booklet.

HOW TO USE THE ANSWER SHEET

4. Use an ordinary pencil.
5. Make sure that you have written on the answer sheet:

YOUR INDEX NUMBER

YOUR NAME

NAME OF YOUR SCHOOL

6. By drawing a **dark line** inside the correct numbered boxes mark your full Index Number (i.e. School Code Number and the three-figure Candidate's Number) in the grid near the top of the answer sheet.
7. Do not make any marks outside the boxes.
8. Keep your answer sheet as clean as possible and do not fold it.
9. For each of the questions 1 – 90 four answers are given. The answers are lettered A, B, C and D. In each case only **ONE** of the four answers is correct. Choose the correct answer.
10. On the answer sheet the correct answer is to be shown by drawing a **dark line** inside the box in which the letter you have chosen is written.

Example

In the question booklet:

- 33.** The **BEST** method of conserving soil on bare uncultivated land is
- A. building gabions.
 - B. planting grass and trees.
 - C. fencing the area.
 - D. keeping cattle on the land.

The correct answer is **B** (planting grass and trees.)

On the answer sheet:

3 A B C D **13** A B C D **23** A B C D **33** A **B** C D **43** A B C D

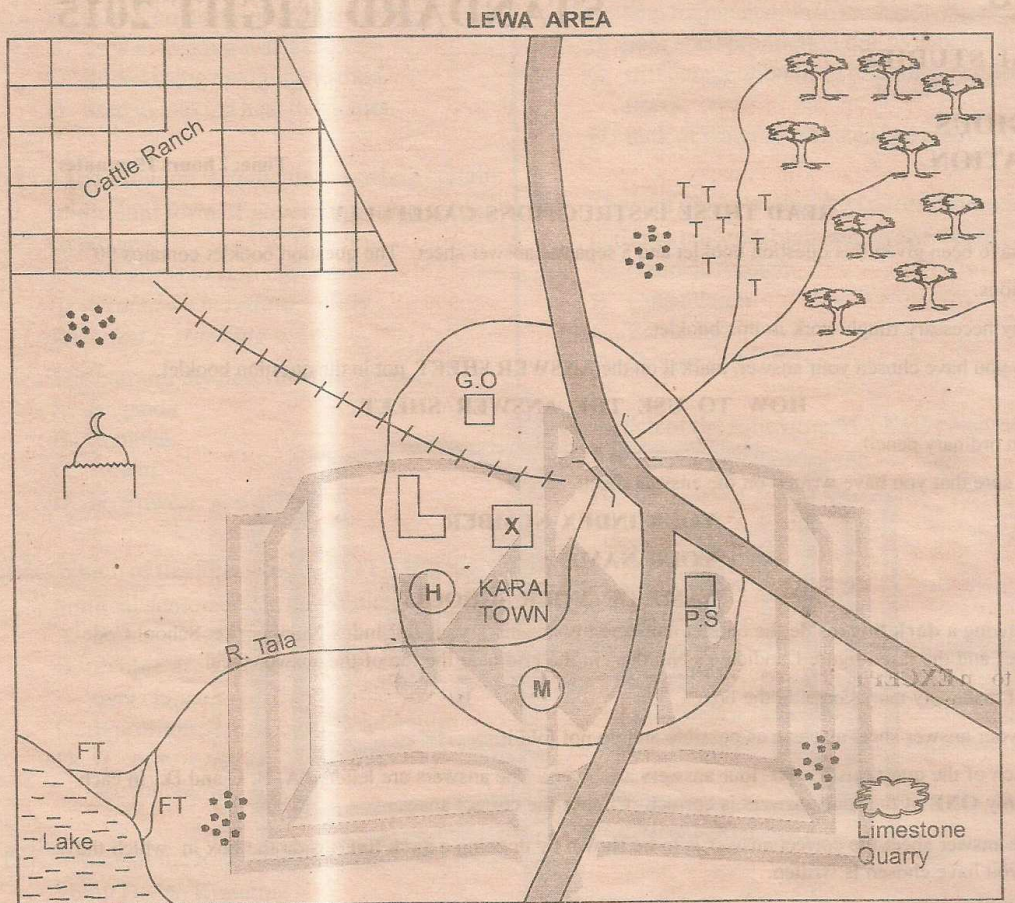
In the set of boxes numbered **33**, the box with the letter **B** printed in it is marked.

11. Your **dark line** **MUST** be within the box.
12. For each question **ONLY ONE** box is to be marked in each set of four boxes.

This question paper consists of 12 printed pages.

Candidates should check the question paper to ensure that all the pages are printed as indicated and no questions are missing.

PART I: SOCIAL STUDIES



SCALE 0 1 2 3 4 5 6 7 8 9 10 11 12 13 → kms

KEY

	Tarmac road		Forest
	Murram road		Tea plantation
	Fish trap		Human settlement
	Quarry		Museum
	Health centre		School
	Mosque		Police station
	Factory		Governor's office

Study the map of Lewa area and use it to answer questions 1 to 7

1. The general flow of River Tala is from
 - A. South west to North East.
 - B. North east to South West.
 - C. North to South.
 - D. North west to South East
2. The approximate area of the cattle ranch is
 - A. 15 km²
 - B. 20 km²
 - C. 22 km²
 - D. 16 km²
3. The **MAJOR** factor influencing population distribution in Lewa area is
 - A. means of transport.
 - B. climate of the area.
 - C. nearness to sources of water.
 - D. economic opportunities.
4. Three of the following are functions of Karai town **EXCEPT**
 - A. religious centre
 - B. administrative centre
 - C. tourist centre
 - D. transport centre
5. The factory marked **X** is **LIKELY** to be dealing with
 - A. tea processing
 - B. beef processing
 - C. cement manufacturing.
 - D. fish processing.
6. The feature formed at the mouth of river Tala is called
 - A. tributaries
 - B. confluence
 - C. delta
 - D. estuary
7. The lowest point of Lewa area is
 - A. at Karai town
 - B. near the quarry
 - C. near the tea plantation
 - D. around the lake
8. Central Tanzania has a sparse population **MAINLY** due to the area
 - A. has very high altitude.
 - B. is infested by tsetseflies
 - C. is set aside for large scale farming.
 - D. the area is always affected by heavy flooding.
9. A child below eight years of age found in Kenya whose nationality is not known is assumed to be a Kenyan citizen by
 - A. birth
 - B. registration
 - C. dual citizenship
 - D. adoption
10. Below are major political events that took place in Kenya after 1939.
 - (i) Election of first African to Legco .
 - (ii) Declaration of state of emergency.
 - (iii) Formation of K.P.U.
 - (iv) The first multiparty elections in Kenya.
 - (v) Kenyatta becomes the president.

Which is the correct order in which they happened?

 - A. (i), (iii), (ii), (v), (iv)
 - B. (i), (ii), (iii), (v), (iv)
 - C. (ii), (i), (iv), (v), (iii)
 - D. (i), (ii), (v), (iii), (iv)
11. The body in charge of elections in Kenya has the power to do three of the following **EXCEPT**
 - A. creating new electoral boundaries.
 - B. registering voters.
 - C. declaring winners in an election.
 - D. nullifying the election of an MP.
12. The chiefs of the conquered states of Old Ghana kingdom were required to do three of the following to show loyalty to the king **EXCEPT**
 - A. contribute soldiers whenever there was war.
 - B. marry the king's daughters.
 - C. take their first born sons to serve the king at the palace.
 - D. pay annual tribute to the king of Old Ghana.

13. Who among the following personalities was **NOT** among the founder members of KADU?

- A. Jaramogi Oginga Odinga.
- B. Ronald Ngala
- C. Masinde Muliro
- D. Justus ole Tipis

14. Which of the following statements is **UNTRUE** about the United Nations (UN)?

- A. Was formed to promote peace and security in the world.
- B. Has five permanent members of UN Security Council.
- C. Was formed after the first world war.
- D. It helped to rebuild countries that were affected by the war.

15. The property left behind by a person who has died is called

- A. inheritance
- B. will
- C. succession
- D. estate

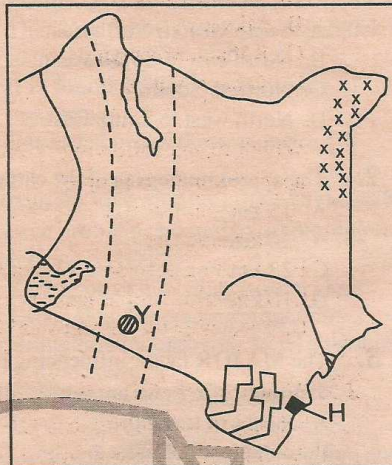
16. The following are conditions necessary for growth of a certain crop.

- (i) *High altitude between 1520m and 2280m above sea level.*
- (ii) *High rainfall at least 1250mm to 1650mm per year.*
- (iii) *Cool temperatures throughout the growing period.*
- (iv) *Deep well drained soil with gentle sloping land.*

The conditions are necessary for the growth of

- A. coffee
- B. tea
- C. pyrethrum
- D. cocoa

Use the map of Kenya to answer questions 17 to 19



17. The mineral mined at the place marked **H** is used for making

- A. cement
- B. limestone
- C. cans for storing perfume.
- D. water filter

18. The pre-historic site marked **Y** is called

- A. Koobi fora
- B. Olduvai gorge
- C. Ollorgesailie
- D. Penij

19. The major problem that had affected the region marked **xxxx** in the recent past is

- A. floods
- B. political stability
- C. unemployment
- D. terrorism

20. Which of the following countries is **CORRECTLY** matched with its capital city?

- A. Namibia - Niemy
- B. Angola - Luanda
- C. Cameroon - Windhoek
- D. Niger - Younde

21. Three of the following leaders resisted colonial rule. Who did **NOT**?

- A. Samori Toure
- B. Mkwawa
- C. Kabaka Mwanga
- D. Kabaka Mutesa I

22. Which of the following is **NOT** a role of government to its people?

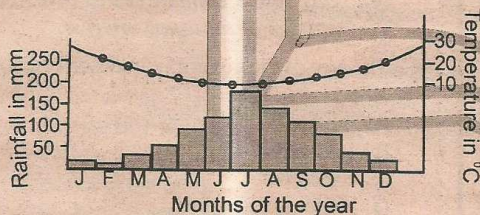
- A. Promoting people's welfare by providing social services.
- B. Initiating development projects.
- C. Protecting people against external attack.
- D. Protecting the corrupt individuals.

23. Which of the following group of people belongs to voltaic speakers **ONLY**?

- A. Gurma, Fulani, Songhai
- B. Mande, Malinke, Susu
- C. Mossi, Gurma, Bergu
- D. Hausa, Tuaregs, Dagomba

Use the graph below to answer questions

24 to 25



24. The climatic region described by the graph above is

- A. Mediterranean
- B. Equatorial climate
- C. Savanna climate
- D. Semi desert

25. Which of the following statements is **TRUE** about the climatic region described above?

- A. Humidity is high throughout the night.
- B. During winter the winds are onshore bringing rain.
- C. The difference between the highest and lowest temperature recorded is very small.
- D. The skies are generally clear.

26. The following are characteristics of forests

- i) Trees grows in a row.
- ii) Trees such as pine, cypress and eucalyptus are grown.
- iii) Trees take long time to mature.
- iv) Trees grow to different heights.
- v) Trees are mainly of the same species.

Which of the following characteristics given above fits Timboroa forest?

- A. (i), (iii), (iv)
- B. (i), (iii), (v)
- C. (iii), (iv), (v)
- D. (i), (ii), (v)

27. Which of the following is a **NOT** a function of Nairobi?

- A. Tourist centre
- B. A transport centre
- C. Headquarter of Kenya Navy
- D. Home for international bodies

28. Which of the following is a **SIMILARITY** in horticulture farming between Kenya and Netherland?

- A. Fruits, flowers and vegetables are mainly grown.
- B. Farming is done on reclaimed land.
- C. Sale of produce is done through co-operative societies.
- D. Most produce are exported to foreign market.

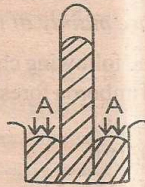
29. Which of the following groups of industries are manufacturing industries only?

- | | |
|---|--|
| A. Steel rolling
Glass making
Fruit canning | B. Paper making
Soap making
Cement making |
| C. Banking
Leather tanning
Shoe making | D. Grain milling
Soft drink making
Tourism |

30. Three of the following are electronic media. Which one is **NOT**?

A. Courier services B. Telephone
C. Radio D. E-mail

31. The diagram below is a mercury barometer



Which of the following statements is **NOT TRUE** about the diagram?

- A. It is used to measure atmospheric pressure.
B. The arrows marked A indicate air pressure.
C. At sea level the level of mercury is 760mm above the level of the bowl
D. The level of mercury increases with increase in altitude.

32. Which of the following is a way of managing rapid population growth?

A. Improving social services
B. Encouraging immigration
C. Developing national population policy
D. Increasing food production

33. Which of the following countries is **NOT** a member of inter-governmental authority on development?

A. Rwanda B. Uganda
C. Eritrea D. Somalia

34. The description below fits one of the early visitors in Kenya.

- (i) *A missionary as well as an explorer.*
(ii) *He helped to end slave trade.*
(iii) *Travelled around lake Tanganyika.*
(iv) *Confirmed that lake Tanganyia was not linked to Rive Nile.*

The early visitor described above is

A. John Speke
B. David Livingstone
C. Dr. Ludwig Krapf
D. Johann Rebmann

35. Which one of the following reasons explain why Mogadishu in Somalia receives very little rainfall yet it lies along the coast?

A. It is affected by warm Somali current.
B. The north easterly winds blow parallel to the coast.
C. It is found on the lee-ward side of the mountain.
D. It is found below the sea level.

36. Three of the following are efforts being made to solve problems related to urban centres. Which one is **NOT**?

A. Setting up of industries in rural areas.
B. Urban slums upgrading programme.
C. Bringing and improving social amenities in rural areas.
D. Encouraging family planning.

37. The following description fits a certain arm of the government

- i) *Approves National budget.*
ii) *Approves the appointment of senior government officials.*
iii) *Discuss the issues that affect the country.*
iv) *May select committees to investigate matters of national interest.*

The arm of the government described above is

A. Senate
B. Judiciary
C. Executive
D. National assembly

38. Which is the **BEST** way for Kenya to attract more tourists in Kenya?

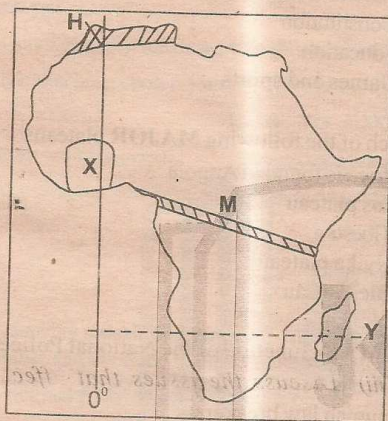
A. Advertise Kenya tourists destinations in foreign countries.
B. Building more tourists destinations in foreign countries.
C. Reducing the charges charged to foreign tourists.
D. Setting up more game parks.

39. Which of the following groups of countries were colonized by Germans?

A. Cameroon, Tanganyika, Namibia
B. Mozambique, Angola, Cape Verde
C. Eritrea, Libya, Senegal
D. Rwanda, Swaziland, Madagascar

40. Who has powers to declare a parliamentary seat vacant in case of a death of an MP or the loss of seat through election petition?
- The judge of High court.
 - Speaker of National Assembly.
 - The leader of majority in parliament.
 - The Attorney General.

Use the map of Africa below to answer questions 41 to 43



41. Which of the following countries is **NOT** crossed by the imaginary line marked **Y**?
- Namibia
 - Botswana
 - Mozambique
 - Swaziland
42. Which of the following statement **DO NOT** describe the country marked **X**?
- Used peaceful means to fight for independence.
 - Was a British colony
 - Got her independence in 1957
 - Kariba river project is a major source of power in the country.
43. The road marked **M** is called
- Great North Road
 - Trans Saharan highway
 - Trans-African highway
 - Mombasa - Lagos road

44. Three of the following are ways in which settlement schemes were established in Kenya. Which one is **NOT**?
- Government bought land from settlers.
 - Africans fought the settlers and took over their land.
 - Reclamation of unproductive area.
 - People formed land buying companies and bought land from settlers.

45. Which of the following Island country is found in the Atlantic ocean?
- Comoros
 - Madagascar
 - Re-union
 - Sao Tomé and Principe

46. The time at Kigali 21°E is 9.30am. What will be the time at Lagos Nigeria 4°E ?
- 8.22am
 - 10.38am
 - 9.58am
 - 11.22am

47. Which of the following places in Africa is below the sea level?
- Danakil alps
 - Lake Chad basin
 - Quattara depression
 - Rift valley

48. Nomination of the members of parliament is done by
- Independent Electoral and Boundaries Commission.
 - President
 - Courts of law
 - Political parties

49. The following description fits a prominent leader in Kenya
- Born in 1924
 - Trained as a teacher
 - Founder member of KADU
 - Served as vice-president
 - Retired from active politics in 2002

The leader described above is

- Daniel Moi
- Mwalimu Julius Nyerere
- Ronald Ngala
- Kijana Wamalwa

50. Which of the statements below is **NOT TRUE** about diatomite? It is
- mined on the floor of the rift valley.
 - used in making water filters.
 - mined using dredging method.
 - used in making heat insulators.
51. The following statements describe a certain traditional form of government in a certain community
- Organised into chiefdom*
 - Ruled by hereditary chief*
 - Had a standing army*
- The community described above is
- Buganda
 - Soninke
 - Ameru
 - Nyamwezi
52. Which of the following is **NOT** a benefit of political democracy in the country?
- Ensures equal opportunities for all.
 - People are able to elect leaders of their own choice.
 - It promotes tribal based leadership.
 - It encourages transparency and accountability.
53. Which of the following statements is **TRUE** about Dedan Kimathi?
- He led the Mau Mau fighters against the British.
 - He drafted the independence constitution.
 - He was among the leaders arrested in October 1952.
 - He represented Africans in the Legco.
54. Three of the following are effects of revolution of the earth. Which one is **NOT**?
- Different positions of the midday sun.
 - Difference in time at different longitudes.
 - Occurrence of the four seasons.
 - Influences the position of the midday sun.
55. Production of sisal in the country has decreased **MAINLY** due to
- land fragmentation in sisal growing areas.
 - poor sisal production due to lack of rain.
 - stiff competition from imported synthetic fibres.
 - lack of water to irrigate sisal plantation.
56. Three of the following are factors promoting national unity. Which one **DOES NOT**?
- National Anthem
 - Constitution
 - Education
 - Games and sports
57. Which of the following **MAJOR** plateaus in Africa is found in Angola
- Jos plateau
 - Tibesti
 - Nyika plateau
 - Bie Plateau
58. The **MAIN** function of the National Police Service is
- punish law breakers
 - protect country from external attack
 - maintaining law and order
 - passing judgement on convicted criminals
59. Which pair of Bantus are found in South Africa
- Ovambo and Yao
 - Bakongo and Balunda
 - Zulu and Xhosa
 - Tswana and Nyamwezi
60. Three of the following are ways in which human rights are abused. Which one is **NOT**?
- Nepotism
 - Forcing children to go to school
 - Wrongful arrest
 - Mob justice

PART II: RELIGIOUS EDUCATION

SECTION A

CHRISTIAN RELIGIOUS EDUCATION


61. The following were results of the disobedience of Adam and Eve in the garden of Eden. Which one is **NOT**?
- A. They were to die.
 - B. Womans trouble during birth was decreased.
 - C. They were sent out of the garden of Eden.
 - D. Adam had to toil to get food.
62. Which one of the following was performed by Moses at mount Sinai? He
- A. built an altar.
 - B. performed miracles.
 - C. fed people with manna.
 - D. removed water from the stone.
63. Which one of the following was the greatest prophet of God who spoke face to face with God?
- A. Isaiah
 - B. Jeremiah
 - C. Moses
 - D. Amos
64. According to Judges 15:16 which Judge used a jaw bone of a donkey to smite a thousand philistines?
- A. Jephthah
 - B. Samuel
 - C. Shamgar
 - D. Samson
65. Which one of the following rivers flow in the garden of Eden according to Genesis 2: 10 - 17 in order?
- A. Euphrates, Gihon, Tigris, Pishon
 - B. Pishon, Gihon, Tigris, Euphrates
 - C. Tigris, Euphrates, Pishon, Gihon
 - D. Gihon, Pishon, Euphrates, Tigris
66. Which one of the following books of the Bible is **NOT** a historical book?
- A. Judges
 - B. Deutronomy
 - C. Micah
 - D. Ezra
67. Which one of the following achievements of David made Jerusalem a centre of worship? He
- A. built the temple.
 - B. brought back the ark of covenant.
 - C. killed Goliath
 - D. fought 5,000 men
68. "My clan is the weakest in the tribe of Manasseh and I am the least important member of my family." Who spoke these words?
- A. Gideon
 - B. David
 - C. Isaiah
 - D. Joseph
69. Prophetess Anna, daughter of Phanuel described Jesus as
- A. the saviour of the world.
 - B. light to the Gentiles.
 - C. the lamb of God.
 - D. the one to set Jerusalem free.
70. When Herod realised that he had been tricked by the visitors, he ordered the killing of all the boys aged two years and below. Which prophet had prophesied this killing?
- A. Hosea
 - B. Jeremiah
 - C. Isaiah
 - D. Ezekiel
71. The man who was attacked by the robbers and left him half dead was travelling from ___ to ___
- A. Jericho, Jerusalem
 - B. Jerusalem, Jericho
 - C. Jerusalem, Damascus
 - D. Jerusalem, Bethlehem
72. Which one of the following Biblical characters misused leisure and did a shameful thing?
- A. Enoch
 - B. Moses
 - C. Lot
 - D. Noah
73. During the raising of Lazarus, the disciples did **NOT** want to go back to Bethany because
- A. they feared to be persecuted by the Jews.
 - B. Bethany was a long way from where they were.
 - C. it was late at night.
 - D. they did not want to leave Jesus.
74. Which one of the following miracles of Jesus shows that he had come to save all communities? Healing
- A. the bleeding woman.
 - B. the Centurion's servant
 - C. Peter's mother-in-law
 - D. the blind Bartimaeus
75. Which one of the following commandments shows respect for other people's property?
- A. Do not covet your neighbours property.
 - B. Observe the Sabbath day and keep it holy.
 - C. Do not steal
 - D. Do not commit murder.

76. Among the following groups of people who were told by John the Baptist not to collect more than is required according to Luke 3:13?
- A. Tax collectors B. Pharisees
 - C. Soldiers D. Sadducees
77. When Jesus was taken before the Jewish council he was accused of
- A. claiming to be the son of God.
 - B. telling people not to pay taxes.
 - C. claiming to be the king of Jews.
 - D. telling people to rebel against authority.
78. Which one of the following is a gift of the Holy Spirit?
- A. Faithfulness B. Kindness
 - C. Joy D. Faith
79. In the Apostle's Creed what is the **MAIN** message for Christians?
- A. Obedience to God.
 - B. Expressing faith and testimony.
 - C. The role of the Holy spirit.
 - D. Expressing love for our fellow Christians.
80. Which one of the following statements in the Lord's prayer shows that God is our provider?
- A. Forgive us our debts.
 - B. Deliver us from evil.
 - C. Give us our daily bread.
 - D. Thy kingdom come.
81. Three of the following were done to Jesus on the day he was crucified **EXCEPT**
- A. the chief priest made Jesus to kneel before them.
 - B. soldiers stabbed him with a spear.
 - C. soldiers divided his clothes.
 - D. soldiers dressed Jesus with a robe.
82. According to Genesis 19:30-38 which of the following forms of sexual misuse was committed by Lot when he misused his leisure?
- A. Lesbianism
 - B. Adultery
 - C. Fornication
 - D. Incest
83. Children are named after ancestors in traditional African societies **MAINLY** to
- A. trace the origin of a family.
 - B. keep off bad spirits.
 - C. make the children as famous as their ancestors.
 - D. make children live like their ancestors
84. The **MAIN** reason why rituals are performed after a person is buried in traditional African societies in order to
- A. find out what has caused the death.
 - B. make the dead be accepted by ancestors.
 - C. ask God for forgiveness.
 - D. chase away the spirits of the dead.
85. In some traditional African societies children are dressed in charms and amulets in order to
- A. make them look smart.
 - B. please God and people.
 - C. prevent them from witchcraft.
 - D. make them happy.
86. Which one of the following is a **COMMON** practise between Christians and traditional African believers. They both
- A. offer libation to the ancestors.
 - B. believe in the holy trinity.
 - C. recite verses during worship.
 - D. believe in reconciliation.
87. Julia a born again Christian realises that Kimaru whom she wants to marry is a drunkard. As a Christian what is the **BEST** action for Julia to take?
- A. Stop the marriage plans.
 - B. Talk to Kimaru to stop drinking.
 - C. Report him to the chief.
 - D. Advise him to be taking a little.
88. Kanini is a standard eight girl who gets pregnant. As a Christian how **BEST** can you advise her? Tell her to
- A. give birth and later continue with her education.
 - B. carry out an abortion.
 - C. get married to the man responsible.
 - D. drop out of school to avoid shame.
89. "... go and make disciples of all nation." Matthew 28:19. This was fulfilled when
- A. Jesus sent the seventy two to preach.
 - B. Europeans came to explore Africa.
 - C. missionaries brought the good news to Africa.
 - D. Jesus accepted to die for mankind.
90. The white missionaries taught Africans how to read **MAINLY** to
- A. make them get jobs in the colonial government
 - B. improve their living standards.
 - C. make them stop their cultural practices.
 - D. spread the gospel to fellow Africans.

SECTION B
ISLAMIC RELIGIOUS EDUCATION

61. "You have been offered many favours, turn in prayer to your Lord and sacrifice and those who mock you up are the losers." This is a full message from surah
A. Al-Nasr B. Al-Kauthar
C. Al-Alaq D. Al-Asr
62. Which mockery did the prophet (p.b.u.h) get from the Qureish people? That he
A. never had baby boys.
B. had stayed for long without Wahyi.
C. had lost his beloved uncle and wife.
D. stayed lonely in cave Hira.
63. The following are favours of Allah that He bestowed upon prophet Muhammad stated in both surahs Dhuha and Inshirah. Which one belong to surah Inshirah? Allah (s.w)
A. gave him shelter when he was an orphan.
B. gave him guidance when he was wondering.
C. made for him da'awa activity that looked heavy to be easy.
D. made him rich from poor life.
64. The examples of righteous things man should endeavour to do that are mentioned in surah Asr are
A. enjoying good and forbidding evil
B. creating jobs and abolishing begging.
C. praying and giving out zakkat.
D. encouraging truth and patience.
65. If you want to know how the last day of Qiyama will be like, then read through all these chapters **EXCEPT** one. Which one?
A. Surah Qaariah
B. Surah Bayyina
C. Surah Zilzala
D. Surah Ghaashia
66. The prophet (p.b.u.h) guided that if a Muslim wants to do something he should
A. refer to God and his prophet.
B. do it with one heart.
C. put on it total concentration.
D. think of its outcome.
67. Angel Jibril (A.S) never stopped advising the prophet (p.b.u.h) about a _____ until he feared that he be made a relative to inherit property
A. servant B. neighbour
C. slave D. friend
68. Which of the following are sins which Allah (s.w) curses the two people involved in it?
A. Bribe and alcohol
B. Murder and theft
C. Fornication and adultery
D. Telling lies and false testimony
69. The following are sewn clothing that make up a shroud used in kafan for mayyit. Which one is **NOT**?
A. Lifaafa B. Izaar
C. Qamis D. Ihraam
70. The overall rituals performed to a dead Muslim are classified and rewarded as
A. sunna mu'aqada B. fardh qifaaya
C. waajibu D. fardh a'in
71. Which form of Hajj ibaadaat can be repeated as many times as a believer can afford and wishes in his/her life time?
A. Ifrad B. Tamatu
C. Umra D. Qiran
72. Which one of the following things will nullify the swaumi of fasting believer?
A. Missing a suhuur night meal.
B. Tasting a meal for sugar or salt.
C. Bathing on a hot sunny day.
D. Receiving a nutrient injection.
73. The two fardh prayers that should **NOT** be reduced even when combined in Salaatul Musaa'fir are
A. fajr and maghrib
B. dhuhr and asr
C. maghrib and isha
D. fajr and dhuhr
74. Sexual intercourse, monthly period and blood of giving birth are the impurities in
A. hadath asghar
B. hadath akbar
C. najis mughalladha
D. najis mukhaffafa
75. There are Sunna Qabliyya prayers before all the fardh prayers. However two of them have no Sunna Baadiyya. Which ones?
A. Maghrib and isha
B. Dhuhr and asr
C. Fajr and asr
D. Fajr and maghrib

76. Which choice shows the correct supplication recited in each of the following pillars of Salaat?



- | | | |
|------------------------------|---------------------------|---------------------------|
| A. Subhaana rabial adhiim | Subhaana rabial aalaa | Rabbi ighfirlii warhamnii |
| B. Subhaana rabial adhiim | Rabbanaa walakal hamd | Subhaana rabial aalaa |
| C. Rabbanaa walakal hamd | Rabbi ighfirlii warhamnii | Subhaana rabial adhiim |
| D. Rabbi ighfirlii warhamnii | Subhaana rabial adhiim | Subhaana rabial aalaa |

77. All the following salaats have four rakaats **EXCEPT** one. Which one?
 A. Asr B. Dhuhur
 C. Fajr D. Isha
78. Which of the following is **NOT** a prayer item mentioned in the dua said after performing wudhu?
 A. Good servanthood
 B. Forgiveness of sins.
 C. Cleanliness
 D. Protection from evils of man.
79. Following a number of miraculous temptations that nabii Ibrahim went through, he won all the following titles **EXCEPT** one. Which one?
 A. Haniifa Muslima B. Imaamu rusli
 C. Abu-l imaan D. Khaliilullah
80. Which of the following virtues develops a Muslims into love for welcoming guests?
 A. Generosity B. Kindness
 C. Hospitality D. Reliance
81. A full Islamic greeting recognises Allah (s.w) in three Attributes. Which ones? The
 A. source of peace, the most merciful, source of blessing.
 B. source of knowledge, most forgiving, the creator.
 C. opener, the provider and the forgiver.
 D. almighty, the designer, the gatherer.
82. Muslims should hold a lot of patience at the times of death, sickness and hazards as they are guided with the believe in ____ of Allah.
 A. last day B. angels
 C. holy books D. qadar
83. The following are choices of prophets who were close relatives. Which pairs **DOES NOT** show a father and his son?
 A. Nabii Musa (A.S) → Nabii Harun(A.S)
 B. Nabii Ibrahim (A.S) → Nabii Ismail (A.S)
 C. Nabii Zakariyya (A.S) → Nabii Yahya(A.S)
 D. Nabii Yaaqub (A.S) → Nabii Yusuf (A.S)
84. Angels of Allah believed to have licked knowledge of witchcraft during the reign of Nabii Suleiman are
 A. Raqib and Atid B. Haaruta and Maaruta
 C. Izraail and Israfiil D. Munkar and Nakiir
85. Upon the prophets arrival in Madina, He was welcomed in a house of
 A. Musai-lama bunil kadhaab
 B. Bilal bin Rabbah
 C. Abu Ayyub Al-Answariyyi
 D. Abuu sufian
86. Muharram was declared the first month of Islamic calendar in a consultative meeting held during the reign of Caliph
 A. Abubakar Swiddiq B. Ali bin Abi Talib
 C. Uthman bin Affaan D. Ummar bin Khataab
87. Which of the following is **NOT** a quality of a leader according to the Islamic tarbia?
 A. Consultative B. Autocratic
 C. Just in resources D. Firm decision maker
88. People who spread Islam along the coast of East Africa **MAINLY** as
 A. traders
 B. missionaries
 C. contractors
 D. reinforcement army men
89. Nabii Yusuf (A.S) fell as a victim of sexual harassment because of his
 A. honestly truth in the dreams he interpreted.
 B. fair distribution of meals in the government foodstore.
 C. handsome body physic and attractive face.
 D. eloquent speech and keen selection of words.
90. After the spread of discipline knowledge, different Islamic societies mainly of youth served in all the following capacities **EXCEPT**
 A. teachers, tutors, instructors and lecturers
 B. doctors, nurses and body parts specialists.
 C. road and railway line engineers.
 D. distillation and distribution of industrial beer.