

SOCIAL STUDIES PAPER

CLASS FIVE

2015

AVAILABLE ONLINE AT:

Schools Net Kenya Consultancy

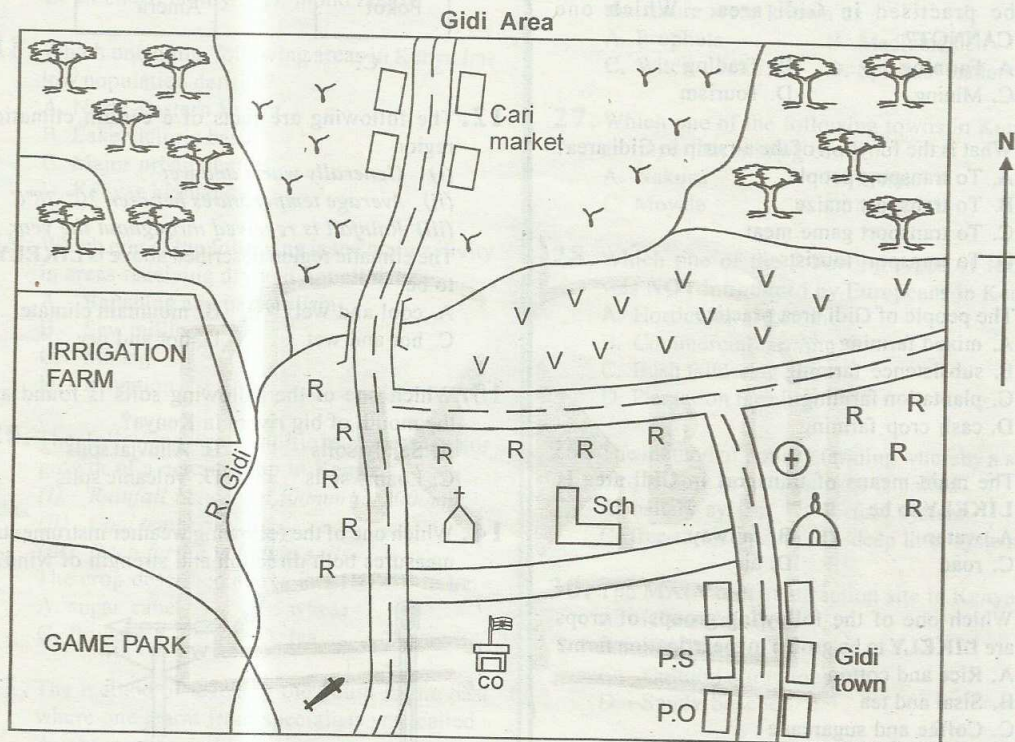
P.O. Box 8076 – 00200 Nairobi, Kenya | Tel: +254202319748

E-mail: infosnkenya@gmail.com | www.schoolsnetkenya.com

SOCIAL STUDIES AND RELIGIOUS EDUCATION

Time: 2 hours 15 min

PART I SOCIAL STUDIES



SCALE 0 1 2 3 4 5 6 7 8 9 10 11 12 13 KM

KEY

	Tarmac road		Maize		Hospital
	Murrum road		Potatoes		Post office
	Buildings		Beans		Police station
	Mosque		Forest		School
	Air strip		Church		County office

Study the map of Gidi area and answer questions 1 - 7

- The direction of Cari market from Gidi town is
A. North East B. North West
C. South East D. South West
- The head of Gidi area is
A. Chief B. D.O
C. D.C D. Governor
- Three of the following economic activities can be practised in Gidi area. Which one CANNOT?
A. Farming B. Trading
C. Mining D. Tourism
- What is the function of the airstrip in Gidi area?
A. To transport people
B. To transport maize
C. To transport game meat
D. To transport tourists
- The people of Gidi area practice
A. mixed farming
B. subsistence farming
C. plantation farming
D. cash crop farming
- The main means of transport in Gidi area is **LIKELY** to be
A. water B. railway
C. road D. air
- Which one of the following groups of crops are **LIKELY** to be grown in the irrigation farm?
A. Rice and cotton
B. Sisal and tea
C. Coffee and sugarcane
D. Tea and millet
- A good map must have the following qualities **EXCEPT** one. Which one?
A. Scale B. Area
C. Title D. Key
- Which one of the following physical features is shared by Kenya and Uganda **ONLY**?
A. Lake Victoria B. The Rift Valley
C. Mt. Elgon D. Mt. Kilimanjaro
- In traditional Kenyan societies festivals and ceremonies were held **MAINLY** for people to
A. show their talents
B. eat special food
C. meet their relatives
D. mark major events

- Which one of the following groups of communities in Kenya is made up Cushitic speakers?

Rendile
Borana
Somali

A.

Turkana
Maasai
Samburu

B.

Luo
Nandi
Pokot

C.

Sanye
Pokomo
Ameru

D.

- The following are facts of a certain climatic region

(i) Generally warm and wet

(ii) Average temperatures between 20°-28°C

(iii) Rainfall is received throughout the year

The climatic region described above is **LIKELY** to be

A. cool and wet

B. mountain climate

C. hot and wet

D. hot and dry

- Which one of the following soils is found at the mouth of big rivers in Kenya?

A. Sandy soils

B. Alluvial soils

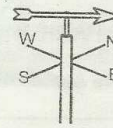
C. Loamy soils

D. Volcanic soils

- Which one of the following weather instruments measures both direction and strength of wind?



A.



B.



C.



D.

- Which one of the following rivers is **CORRECTLY** matched with the place it flows to? River

A. Kerio

- Indian Ocean

B. Ewaso Nyiro North

- Lorian swamp

C. Athi

- Lake Victoria

D. Nyando

- Lake Turkana

16. Which one of the following is **true** about clans in traditional Kenyan society?

- A. They were headed by a chief
- B. They were formed by people of the same age set
- C. They were made up of people with a common ancestor
- D. They were made up by warriors

17. A family with only one parent is known as

- A. nuclear family
- B. single parent family
- C. extended family
- D. mono family

18. Which one of the following areas in Kenya has low population density?

- A. North-Eastern Kenya
- B. Lake victoria basin
- C. Major urban centres
- D. Kenyan highlands

19. Which one of the following is the main activity in areas receiving dry and hot climate?

- A. Ranching and pastoralism
- B. Saw milling
- C. Mining
- D. Irrigation

20. The following are conditions necessary for growth of a certain crop in Kenya

- (i) Rainfall between 1400mm to 2000mm
- (ii) Cool temperature
- (iii) Deep fertile volcanic soils

The crop described above is **LIKELY** to be

- A. sugar cane
- B. wheat
- C. flowers
- D. tea


21. The method of teaching the youth in the past where one learnt from specialists was called

- A. observation and imitation
- B. story telling
- C. apprenticeship
- D. proverbs

22. In which of the following vegetations are you **LIKELY** to find acacia and baobab trees?

- A. Savanna woodland
- B. Scrub vegetation
- C. Mountain vegetation
- D. Savanna grassland

23. The method of fishing shown below is



- A. pulse-seining
- B. trawling
- C. net drifting
- D. hook and line

24. Which one of the following is used to control wind erosion?

- A. Mono-cropping
- B. Over-stocking
- C. Building gabions
- D. Afforestation

25. The **MOST** recent means of passing information is the use of the

- A. letters
- B. telegram
- C. telephone
- D. Internet

26. In the past people who had power to foretell the future were known as

- A. Prophets
- B. Medicinemen
- C. Witch doctors
- D. Spiritual leaders

27. Which one of the following towns in Kenya is an important mining centre?

- A. Nakuru
- B. Malindi
- C. Moyale
- D. Magadi

28. Which one of the following types of farming was **NOT** introduced by Europeans in Kenya?

- A. Horticultural farming
- B. Commercial farming
- C. Bush fallowing
- D. Plantation farming

29. The method of poultry farming whereby a single bird is kept in its own cage is called

- A. battery system
- B. fold system
- C. free-range system
- D. deep litter system

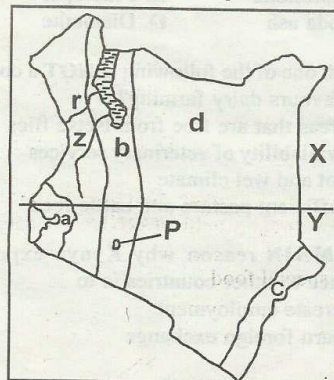
30. The **MAIN** tourist attraction site in Kenya is?

- A. Historical sites
- B. Wildlife
- C. Cultural attractions
- D. Sandy beaches

31. Which one of the following is the **odd** one out?

- A. Elgon teak
- B. Camphor
- C. Spruce
- D. Oak

Use the map below to answer questions 32-36



32. Which of the region marked **a, b, c** and **d** are you **LIKELY** to find inselbergs?
 A. a B. d
 C. c D. b
33. The country marked **x** is known as
 A. Sudan B. Ethiopia
 C. Uganda D. Somali
34. Which of the following is **NOT** true about the line marked **Y**?
 A. It is marked 0°
 B. It is a line of latitude
 C. It passes through Nairobi
 D. It divides the earth into two equal halves
35. The rivers marked **r** and **z** are
 A. Turkwel and Kerio
 B. Turkwel and Ewaso Nyiro
 C. Nzoia and Nyando
 D. Kerio and Mara
36. Which of the following minerals is mined in the lake marked **P**?
 A. Limestone B. Diatomite
 C. Soda ash D. Fluorspar
37. Which of the following group of fish is caught in marine fishing ground?
 A. Tilapia, sardines, trout
 B. Tuna, parrot fish, mullet
 C. Blackbass, dagaa, sail fish
 D. Cat fish, salmon, tilapia
38. Which one of the following is the cheapest method of preserving fish?
 A. Sun-drying B. Smoking
 C. Refrigeration D. Canning
39. The following are uses of a certain mineral
 (i) *Used in water purification*
 (ii) *Used in soft drink and beer manufacturing*
 (iii) *Used in making soap and paints*
 The mineral described above is
 A. Limestone B. Fluorspar
 C. Soda ash D. Diatomite
40. Which one of the following is **NOT** a condition that favours dairy farming?
 A. Areas that are free from tsetse flies
 B. Availability of veterinary services
 C. Hot and wet climate
 D. Sufficient pasture and cattle feed
41. The **MAIN** reason why Kenya export her produce to other countries is to
 A. create employment
 B. earn foreign exchange
 C. get raw materials
 D. encourage business growth
42. The growing of flowers in Kenya is known as
 A. floriculture B. market gardening
 C. verticulture D. horticulture
43. The **BEST** means of transport that is used to transport perishable goods is
 A. pipeline B. water
 C. air D. road
44. The following are importance of moral values in the society. Which one is **NOT**?
 A. Help people to develop good habits
 B. Enable people to lead a good life
 C. Promote unity and harmony
 D. Enable people to be irresponsible
45. Which of the following bodies buys tea from farmers and process it?
 A. K.C.C B. K.T.D.A
 C. K.M.C D. C.B.K
46. Which one of the following is **NOT** a characteristic of traditional methods of farming?
 A. Farmers used simple tools
 B. The land belonged to communities
 C. The farmers practised subsistence farming
 D. Fertilisers and manure were used
47. Which one of the statements below explains what is corruption?
 A. Refusing to defend one's country
 B. Favouring people from one country
 C. Employing relatives
 D. Asking for bribes so as to offer services
48. Which one of the following is the **BEST** to deal with criminals in Kenya?
 A. Mob justice
 B. Inform the police
 C. Arrest the criminals
 D. Helping them to escape
49. The instrument used to detect the amount of alcohol taken by a motorist is known as
 A. Alco-blow B. Alcohol meter
 C. Alcohol liser D. Thermometer
50. One of the following waterfalls is found on River Athi. Which one?
 A. Thomson falls B. Lugard falls
 C. Chania falls D. Fourteen falls
51. Labour day in Kenya is celebrated on
 A. 20th October B. 1st June
 C. 1st May D. 12th December

52. The third president of Kenya was known as
 A. Jomo Kenyatta B. Daniel arap Moi
 C. Raila Odinga D. Mwai Kibaki
53. Laws in Kenya are made in
 A. Parliament B. High court
 C. State house D. University
54. The next General Election in Kenya will be held in year
 A. 2013 B. 2017
 C. 2020 D. 2018
55. "in common bond united" The following line is found in _____ stanza of our National anthem.
 A. 1 B. 2
 C. 2 D. 4
56. Which one of the following could NOT be produced by the traditional craftsmen?
 A. Baskets B. Barkcloth
 C. Pots D. Papers
57. Which one of the following is represented by the letter marked X in the table below

Kaputei	Lotikipi	Awara	X
---------	----------	-------	---

- A. Mwea tebere B. Merti
 C. Kulal D. Yatta

58. Areas set aside to be used as homes for wild animals are called
 A. Suntuaries B. Orphanages
 C. City parks D. Gameparks
59. A Kenyan citizen is legible for an identity card at the age of
 A. 12 years B. 21 years
 C. 18 years D. 16 years
60. The road sign shown below means



- A. No U-turn
 B. No entry
 C. Bumps ahead
 D. No overtaking

PART II: RELIGIOUS EDUCATION

SECTION A:

CHRISTIAN RELIGIOUS EDUCATION


61. Which sin did Adam and Eve commit?
A. Talking to the snake
B. Covering themselves with leaves
C. Knowing they were naked
D. Disobeying God's command
62. Joseph was sold to an Egyptian called _____ as a slave.
A. Pharaoh
B. Herod
C. Potiphar
D. Daniel
63. Who among the following is NOT a patriarch?
A. Jacob
B. Abraham
C. Isaac
D. Jesus
64. The prophet who was sent to David when he took Uriah's wife was known as?
A. Prophet Nathan
B. Prophet Elisha
C. Prophet Micah
D. Prophet Jeremiah
65. God promised Abraham all the following EXCEPT
A. He would have many descendants
B. He would be given a kingdom
C. He would be blessed
D. He would get a son
66. Which commandment was broken by Israelites at Mt. Sinai?
A. First
B. Third
C. Fourth
D. Second
67. When Moses was called by God he was living in
A. Midian
B. Haran
C. Canaan
D. Egypt
68. "I choose you before I gave you life and before you were born I selected you to be a prophet to the nations". These words were spoken by God to
A. Isaac
B. Jeremiah
C. Isaiah
D. Moses
69. The second king of Israel was
A. Saul
B. David
C. Ahab
D. Solomon
70. Which one of the following did NOT happen in the garden of Gethsemane?
A. Jesus produced sweat that looked like drops of blood
B. Judas Iscariot came to arrest Jesus
C. The angel of the Lord strengthened Jesus
D. The soldiers divided Jesus clothes
71. Who among the following women did NOT visit the tomb where Jesus was buried?
A. Salome
B. Mary mother of Jesus
C. Tabitha
D. Mary Magdalene
72. Ananias and Sapphira died because
A. they lied to the disciples
B. they sold their land
C. they lied to the Holy Spirit
D. they lied to Paul
73. On which occasion according to the Bible were these words said "This is my son, my chosen, listen to him"
A. crucifixion
B. birth
C. Baptism
D. transfiguration
74. Who among the following climbed a sycamore tree to see Jesus?
A. Zachaeus
B. Ananias
C. Peter
D. Simon
75. Happy are the meek for they shall
A. obtain mercy
B. see God
C. inherit the earth
D. be called sons of God
76. Which one of the following towns is known as the city of David?
A. Nazareth
B. Jerusalem
C. Damascus
D. Bethlehem
77. According to apostles creed the word Catholic means
A. Universal
B. God
C. Holy
D. Church
78. Most of the twelve disciples of Jesus were
A. tax collectors
B. teachers of the law
C. lawyers
D. fishermen
79. Which one of the following places is known as the place of skull?
A. Golgotha
B. Gethsemane
C. Antioch
D. Calvary
80. The time we spend preparing for Christmas is known as
A. Lent
B. Magnificent
C. Happiness
D. Advent
81. The church is
A. where people become disciples
B. a place where people worship
C. a community of people who believe in Christ
D. a building

82. The wife of Moses was called
A. Deborah B. Miriam
C. Rebecca D. Zipporah
83. The bread that is taken during the Holy communion represent
A. the blood of Jesus
B. the Holy Spirit
C. the body of Jesus
D. the love of Jesus
84. According to the prophet Jeremiah the new covenant would be different from the old because the laws would be
A. written in the Bible
B. written on the stone tablets
C. sealed by the blood of animals
D. written in the hearts of the people
85. John a class five is always stealing his classmates lunch. He breaks the _____ commandment.
A. ninth B. tenth
C. sixth D. eighth
86. Complete the following line from The Apostles Creed "He ascended into heaven and"
A. He will come to judge the living and the dead
B. He descended into hell
C. Sits on the right hand of God
D. He rose from dead
87. According to Luke 20:19-25 Jesus advised the Pharisees to pay taxes to
A. God B. Holy Spirit
C. Priest D. Roman Emperor
88. A person who believes in Jesus shows all the following EXCEPT
A. Pride B. Love
C. Joy D. Peace
89. After calling the first disciples. Jesus gave a new name to
A. James B. Simon
C. John D. Andrew
90. The story of the prodigal son teaches us about
A. faithfulness B. trust
C. forgiveness D. faith

SECTION B:

ISLAMIC RELIGIOUS EDUCATION

61. In Surah At-Takaathul Muslims are warned against _____
A. praying from houses and avoiding Mosques
B. begging and avoiding working
C. doing evil and forgetting forgiveness
D. piling wealth and forgetting Allah
62. To make good use of time, Surah Asr encourages Muslims to _____
A. pray always and rely on Allah
B. welcome guests and be hospitable
C. tell truth and have patience
D. think before they act
63. Surah Fiyi tells us that _____ attempted to destroy holy kaaba but Allah stopped him.
A. Fir'aun B. Dhul-Qarnain
C. Raahib Baghira D. Abrah Ashram
64. The Quraish people called the prophet "Abtar" in Surah Kauthar meaning "One who _____"
A. never had baby boys
B. lost his uncles and parents
C. never received
D. received prophethood
65. Surah Al-Fatiha is known as the pillar of Salaat because it _____
A. it is the opening chapter of Qur'an
B. must be recited in any salaah
C. it is the mother of Qur'an
D. it is a dua
66. A group of hypocrites are called _____ in Arabic.
A. Mushiriquun B. Khaasiriin
C. Musrifin D. Munaafiquun
67. Pupils like to confuse kindness and generosity. All these are examples of kindness; which one is generosity?
A. Giving out your wealth to be used by other people in need
B. Pushing a lame person
C. Giving a thirsty animal water to drink
D. Helping the blind walk safe
68. The prophet insisted to Muslims to be honest and _____ even if it is bitter.
A. remain patient B. tell truth
C. get persecution D. fight kufir
69. Which of these teachings of the prophet is **WRONGLY** stated?
A. Toileting: Face away from Qibla while toileting
B. Eating: Eat when the food is hot
C. Drinking: When you drink pause three times
D. Saluting: Say greeting first before any other talks

70. A good child who prays for his/her parents, helps people and respects them is called _____.
 A. Sadakatil Jaariya B. Akhul Muslim
 C. Anifa Muslima D. Walad Swaleh
71. Which one among these is a choice of sunna prayers performed **before** and **after** Fardh prayer?
 A. Dhuha and Dhuhr
 B. Kusuf and Khusuf
 C. Qabliyya and Baadiyya
 D. Taraweh and Tahajjud
72. Which one of the following is **NOT** a condition of prayers?
 A. Be free from Najis and hadath
 B. Have Udhu
 C. Be a member of any religion
 D. Face Qibla
73.  This person is in **Rukoo**. What will he say to change to **Itidaal**?
 A. Allahu Akbar
 B. Assalam aleikum warahmatullah
 C. Aamiin
 D. Sami'-a Llahu Liman hamida
74. Light Najis is called Najis _____.
 A. Mukhaffafa B. Mustaurasit
 C. Mughalladha D. Haraam
75. You should have at least 40 heads of _____ or _____ for you to give out any of them as zakkat.
 A. camels or buffalos
 B. chicken or ducks
 C. sheep or goats
 D. cows or camels
76. Which one of these salaats has got **less than** four rakaats?
 A. Ishai B. Dhuhr
 C. Asr D. Maghrib
77. It is sunna to wash the recommended parts of udhu _____ times.
 A. three three B. two two
 C. one one D. four four
78. A person who has Najis of a dog or a pig should _____.
 A. take tayammum
 B. not touch the Qur'an
 C. sprinkle clean water on the Najis
 D. wash seven times
79. Which attribute of Allah is **WRONGLY** matched with the meaning?
 A. Al-Khaaliq → the designer
 B. Al-Razzaaq → the provider
 C. Al-Aleem → the all knowing
 D. Al-Malik → the king
80. All prophets of Allah were "Sin free" and so they were all _____.
 A. Qaaniitiin B. Muslimeen
 C. Muttaqeen D. Maasumeen
81. The role played by Angel Ridhwaan is to
 A. give books of deeds
 B. remove souls of good people
 C. take care of paradise
 D. ask questions in the grave
82. One of the following person should **NOT** receive zakkat and infact he/she is shame to Muslims Yaumul Qiyama. Who is this?
 A. An orphan B. A slave
 C. A debtor D. A beggar
83. Christians also have similar names to these Islamic names. Which one is same in Islam and Christianity?
 A. Ibrahim B. Nuh
 C. Yahya D. Adam
84. When the prophet led a prayer of all prophets and Angels in Masjid Aqsa, he was from that time called
 A. Khaatimul Ambiya'a
 B. Saadiqul Amin
 C. Rasuulullah
 D. Imaamul Mursaliin
85. In which town do we find Masjid Aqsa?
 A. Riadh B. Makka
 C. Madina D. Jerusalem
86. Orphans are _____.
 A. very poor people
 B. very old men and women who needs our help
 C. children whose father and mother died
 D. very rich people who should pay zakkat
87. In the first revelation _____ found the prophet Muhammad in cave Hira.
 A. Angel Izrail B. Angel Mikail
 C. Angel Israfiil D. Angel Jibril
88. _____ was not a practice in the prophet's Mosque.
 A. Business trading B. Muslim gathering
 C. Daawa preaching D. Place of worship
89. How old was the prophet when he married his first wife. Lady Khadija?
 A. 53 years B. 12 years
 C. 25 years D. 40 years
90. Many people came up to help in building the prophets mosque. This shows that Muslims should have _____.
 A. equality B. unity
 C. energy D. many children