

# SCIENCE PAPER

## CLASS FOUR

### 2015

**AVAILABLE ONLINE AT:**

Schools Net Kenya Consultancy

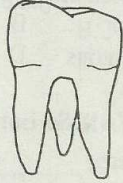
**P.O. Box 8076 – 00200 Nairobi, Kenya | Tel: +254202319748**

**E-mail: [infosnkenya@gmail.com](mailto:infosnkenya@gmail.com) | [www.schoolsnetkenya.com](http://www.schoolsnetkenya.com)**

## SCIENCE

Time: 1 hour 40 minutes

1. The tooth drawn is called



- A. a premolar      B. a canine  
C. an incisor      D. a molar

2. The organ in the body for the sense of sight is the

- A. tongue      B. eye  
C. mouth      D. skin

3. Which one of the following is the use of a neem tree?

- A. Provides food  
B. Gives us soft drinks  
C. Gives us medicine  
D. Its flowers are used to make insecticides

4. All the following are methods of care of our teeth **EXCEPT**

- A. visiting a dentist regularly.  
B. brushing our teeth after every meal.  
C. eating food rich in calcium.  
D. sharing toothbrushes and toothpastes.

5. Lavender a class three pupil wanted to remove air from water. What did she do?

- A. Boiled the water  
B. Put the water in a clear glass  
C. Drank the water  
D. Putting the water in a fridge

6. A doctor who treats our teeth is known as

- A. an optician  
B. a doctor  
C. a dentist  
D. a veterinary officer

7. Study the weather chart and answer questions 7 - 10

DAYS	MORNING	AFTERNOON
Monday		
Tuesday		
Wednesday		
Thursday		
Friday		

Which day did the children carry umbrellas in the morning?

- A. Friday      B. Monday  
C. Tuesday      D. Thursday

8. Which two days were the **BEST** to wash clothes?

- A. Monday morning and Wednesday morning  
B. Friday afternoon and Wednesday morning  
C. Tuesday and Thursday afternoon  
D. Monday afternoon and Friday morning

9. Which day did not experience cloudy weather?

- A. Monday      B. Tuesday  
C. Wednesday      D. Thursday

10. There was no sun on one of the following days. Which one?

- A. Thursday      B. Tuesday  
C. Friday      D. Monday

11. Shadows are longest

- A. at night      B. in the afternoon  
C. at noon      D. in the morning

12. Which of the following is **NOT** a method of weed control?  
 A. Use of chemicals  
 B. Mulching  
 C. Planting  
 D. Slashing
13. \_\_\_\_\_ is not a cereal crop.  
 A. Tea                      B. Sorghum  
 C. Wheat                  D. Millet
14. \_\_\_\_\_ is sprinkled on the floors of non-cemented latrines in order to disinfect them.  
 A. Water                  B. Ash  
 C. Soil                     D. Saw-dust
15. A thread like structure used to clean in between the teeth is called a  
 A. thread                  B. toothbrush  
 C. dental floss          D. rope
16. The practice of watering of our crops during the dry season is known as  
 A. planting                B. winnowing  
 C. harvesting            D. irrigation
17. Which one is **NOT** a source of water?  
 A. River                    B. Borehole  
 C. Lake                    D. Tap
18. Class three pupils from Milimani Primary were asked to carry soil that can make long ribbons. Which type of soil did they bring to school?  
 A. Loam                    B. Sandy  
 C. Clay                    D. Cotton soil
19. Which one of the following is **NOT** a special sound?  
 A. A screaming child  
 B. Sound from a radio  
 C. A car hooting  
 D. An ambulance siren
20. The following are problems related to teeth. Which one is **NOT**?  
 A. Shedding of teeth  
 B. Bad breath  
 C. Tooth decay  
 D. Tooth cavity
21. A weed is any plant that  
 A. grows faster than other crops  
 B. grows in the forest  
 C. grows where it is not wanted  
 D. grows where it is wanted
22. Three of the following are examples of tubers. Which one is **NOT**?  
 A. Cassava                B. Arrow roots  
 C. Irish potatoes        D. Beans
23. In the word AIDS. Letter D stands for  
 A. Desire  
 B. Deficiency  
 C. Dependency  
 D. Direct
24. An artificial tooth is called a  
 A. denture  
 B. dentist  
 C. plaque  
 D. doctor
25. When you wave your hand to your friend to say goodbye without talking, we say that you are making a  
 A. sign                      B. gesture  
 C. wave                    D. goodbye
26. Matata fell sick one afternoon at school. He was rushed to the hospital to see a  
 A. teacher  
 B. parent  
 C. doctor  
 D. driver
27. When your parent works very hard in the shamba he feels  
 A. good  
 B. pain  
 C. relaxed  
 D. tired
28. The following are ways of storing water. Which one is **NOT**?  
 A. Tanks  
 B. Dams  
 C. Drums  
 D. Rain



29. \_\_\_\_\_ is an example of a plant that grows in water or places near water.

- A. Cactus tree
- B. Acacia tree
- C. Banana plant
- D. Mangrove tree

30. Which one of the following **CANNOT** be seen during the day?

- A. Sun
- B. Moon
- C. Stars
- D. Clouds

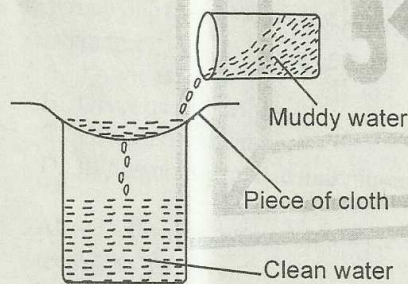
31. Farmers are normally advised to plough during the \_\_\_\_\_ season.

- A. rainy
- B. dry
- C. windy
- D. cloudy

32. A \_\_\_\_\_ is a house of a pig.

- A. sty
- B. hutch
- C. pen
- D. kennel

33. Study the diagram below



The above method of cleaning water is called

- A. filtering
- B. sieving
- C. boiling
- D. irrigation

34. Which type of soil is always the **BEST** for growing of crops?

- A. Dry soil
- B. Clay soil
- C. Sandy soil
- D. Loam soil

35. The type of teeth used for crushing and grinding food are known as

- A. canines
- B. molars
- C. incisors
- D. canines and premolars

36. Which one is the **BEST** way of controlling weeds?

- A. Slashing
- B. Mulching
- C. Digging them out
- D. Uprooting

37. Food remains in our mouth are acted on by germs to produce a harmful substance called

- A. acid
- B. cavities
- C. dental floss
- D. gum disease

38. Which one of the following objects reflects light?

- A. A book
- B. A metallic spoon
- C. A stone
- D. A blanket

39. Soil which is good for modelling is obtained from

- A. a football field
- B. a building site
- C. near a river
- D. in the desert

40. Which one of the following is used to transport water in towns?

- A. Bottles
- B. Donkeys
- C. Pots
- D. Pipes

41. Bees protect themselves by

- A. biting
- B. coiling
- C. stinging
- D. running off

42. A weather chart is used for

- A. recording weather
- B. observing weather
- C. measuring weather
- D. changing weather

43.

Tea
Ketepa
Chai

The above products are examples of \_\_\_\_\_ crops.

- A. beverage
- B. oil
- C. tuber
- D. food


44. We are advised by a dentist to always brush our teeth

- A. upwards and downwards
- B. across the teeth
- C. upwards and across
- D. downwards and across

45. Which one of the following is **NOT** a way of maintaining good health?

- A. Resting
- B. Sleeping
- C. Eating excessively
- D. Doing exercise

46. This face shows one is



- A. excited
- B. angry
- C. happy
- D. surprised

47. Which of the following is **NOT** a drink made from plants?

- A. Tea
- B. Milk
- C. Cocoa
- D. Coffee

48. Which one of the following is **NOT** a way of caring for animals?

- A. Housing them
- B. Beating them
- C. Treating them
- D. Feeding them

49. The diagram below produces.



- A. light
- B. heat
- C. sound
- D. water

50. Human beings have \_\_\_\_\_ sets of teeth.

- A. 2
- B. 4
- C. 3
- D. 32