

MATHEMATICS PAPER
CLASS ONE
2015

AVAILABLE ONLINE AT:

Schools Net Kenya Consultancy

P.O. Box 8076 – 00200 Nairobi, Kenya | Tel: +254202319748

E-mail: infosnkenya@gmail.com

MATHEMATICS

YOUR NAME	
NAME OF YOUR SCHOOL	

Fill in the missing numbers

1.

8			11		13
---	--	--	----	--	----

2.

	40		60		80
--	----	--	----	--	----

3. , 1, , 3,

4. $0 + \square = 6$

5. $8 + \square = 9$

6. $\square - 8 = 5$




7. $9 - \square = 4$

8. $6 + 2 + 4 = \underline{\hspace{2cm}}$

9. $4 + 0 + 3 = \underline{\hspace{2cm}}$

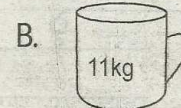
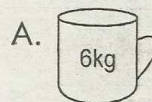
10. $0 + 0 + 9 = \underline{\hspace{2cm}}$

Name the shapes

11. 	12. 
13. 	

14. Two hands have fingers.

15. Which one holds less?



16. 5 boys have _____
legs

17. $\begin{array}{c} \text{H H H} \\ \text{H H H} \\ \text{H H H} \end{array} - \begin{array}{c} \text{H H} \\ \text{H H} \end{array} = \underline{\hspace{2cm}}$

18. $15 - 8 = \underline{\hspace{2cm}}$

19. $36 + 13 = \underline{\hspace{2cm}}$

20. $\begin{array}{r} 18 \\ - 9 \\ \hline \end{array}$

21. $\begin{array}{r} 8 \\ + 40 \\ \hline \end{array}$

22. $\begin{array}{r} 10 \\ - 9 \\ \hline \end{array}$

23. $\begin{array}{r} 85 \\ + 13 \\ \hline \end{array}$

24. $\begin{array}{r} 21 \\ - 9 \\ \hline \end{array}$

25. $55 - 22 = \underline{\hspace{2cm}}$

26. $66 + 11 = \underline{\hspace{2cm}}$

27. Three triangles
have _____ sides.

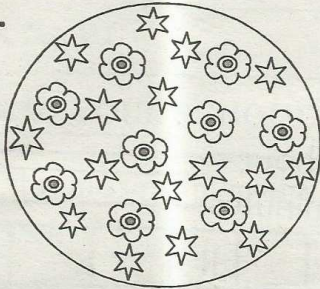
28. _____ is the fifth
day of the week.

29. $\begin{array}{r} \square \\ + 3 \\ \hline 9 \end{array}$

30. $\begin{array}{r} 23 \\ + 4 \\ \hline \end{array}$

31. 5 fish have _____ legs

32.



How many flowers can you see? _____

33. What is twenty four minus thirteen?

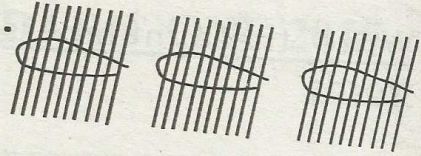
34. $\begin{array}{r} \text{XXXX} \\ \text{XXXX} \end{array} + \begin{array}{r} \text{XXX} \\ \text{XXX} \end{array} + \begin{array}{r} \text{XX} \\ \text{XX} \end{array} =$

35. 4 tens + 3 ones =

36. 5 tens = _____

37. _____ = 1 tens and 0 ones.

38.

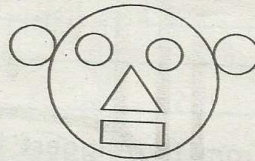


= _____ tens.

39. $50 + 30 =$ _____

40. $60 - 20 =$ _____

41.



How many circles can you see? _____

42. What is the shape of the nose? _____

Write these numbers in words

43.50 = _____

44.46 = _____

45.38 = _____

Arrange from the biggest to the smallest.

46. 12, 8, 5, 9, 7, 11

47. 3, 5, 2, 0, 4, 1

48. Sh.20 + Sh.5 = _____

49. 1 hour = _____
minutes.

50. This rectangle is divided
into _____ parts.

