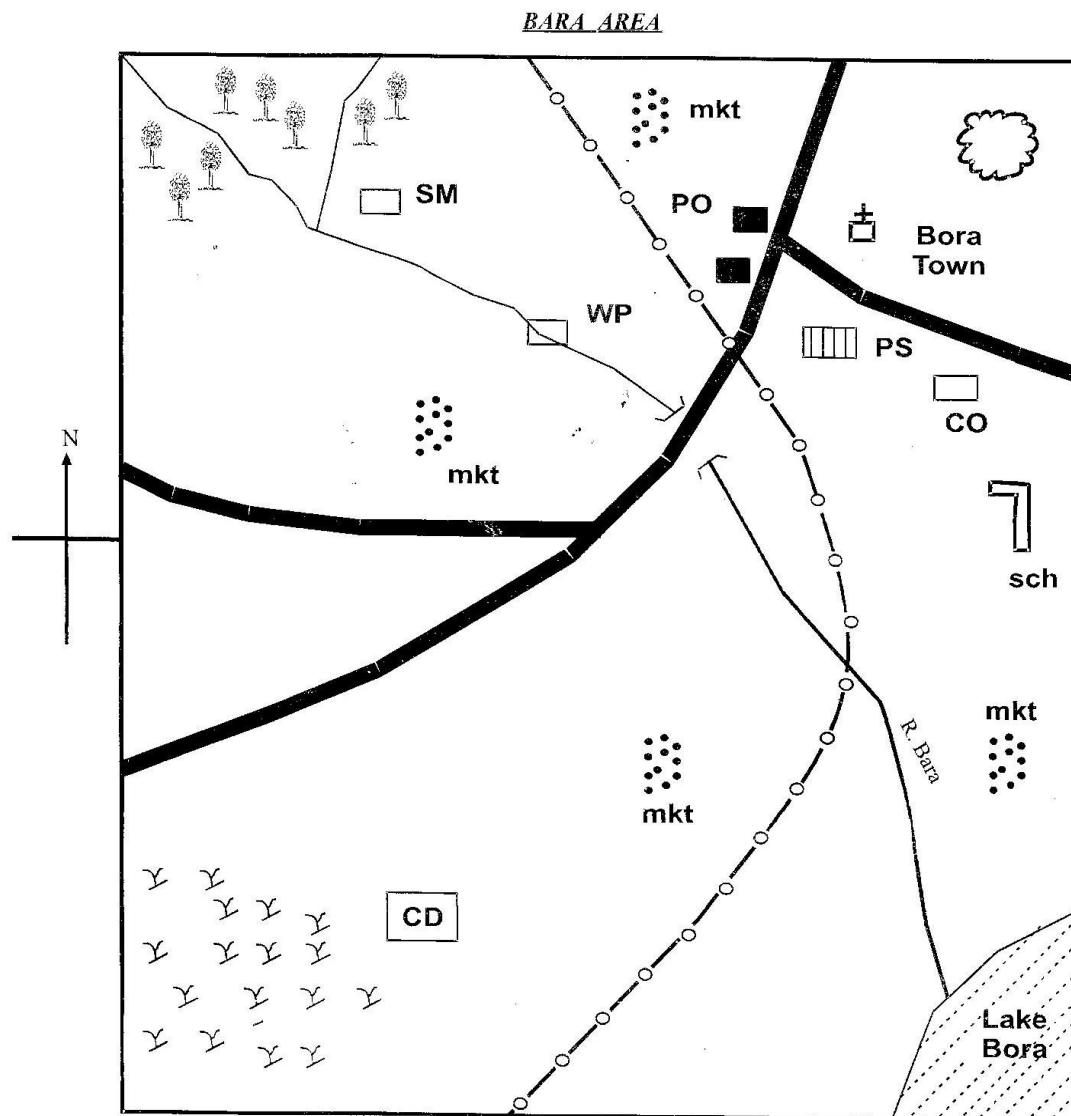
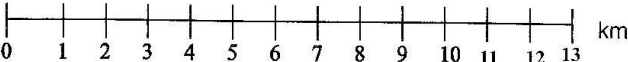








# KCPE PREDICTION 2020

## SOCIAL STUDIES & CRE



<b>Key:-</b>	<b>SCALE:</b>	
<b>MKT</b> Market	 Grassland	<b>P.O</b> Post office
 Sub county boundary	 Quarry	<b>C.O</b> County offices
 Road	<b>SM</b> Saw mill	 Church
 Forest	<b>PS</b> Police station	<b>C.D</b> Cattle dip
		<b>WP</b> Water pump

Compiled & distributed by Schools Net Kenya, P.O. Box 15509-00503, Nairobi | Tel: +254202319748

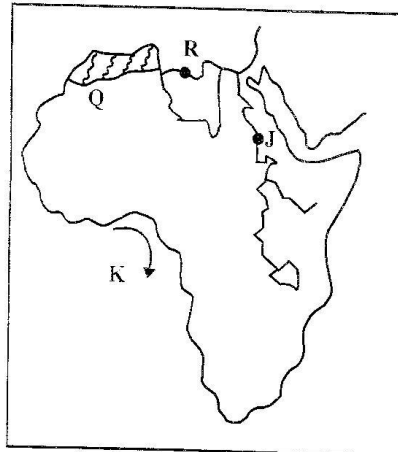
E-mail: [infosnkenya@gmail.com](mailto:infosnkenya@gmail.com) | ORDER ANSWERS ONLINE at [www.schoolsnetkenya.com](http://www.schoolsnetkenya.com)

Study the map of Bara area above and answer questions 1 - 7.

1. The reforestation taking part in the Northern part of Bara area is aimed at
  - A. providing more timber
  - B. protecting water catchment
  - C. increasing the source of fuel
  - D. protecting wild animals
2. The land in Bara area slopes towards
  - A. South East
  - B. North West
  - C. North
  - D. South West
3. What feature is formed at the mouth of river Bara?
  - A. An estuary
  - B. A delta
  - C. A confluence
  - D. A distributary
4. Which one of the following is the **MAIN** economic activity in Bara area?
  - A. Saw milling
  - B. Trade
  - C. Transport
  - D. Mining
5. The **MOST** senior administrator in Bara area is
  - A. governor
  - B. member of parliament
  - C. mayor
  - D. senator
6. The **MAIN** source of water for the people of Bora town is
  - A. borehole
  - B. river
  - C. lake
  - D. rainfall

7. The **MAIN** economic activity carried out in the South West of Bora area is
  - A. fishing
  - B. dairy farming
  - C. mining
  - D. ranching
8. Which one of the following statements is **TRUE** about customary marriages in Kenya?
  - A. Magistrates conduct customary marriages
  - B. Marriage certificates are issued
  - C. Marriage is conducted by elders
  - D. Polygamy is not allowed
9. Which one of the following is **NOT** a result of rapid population growth?
  - A. Unemployment
  - B. Environmental destruction
  - C. Low food production
  - D. Decreased number of dependents

Use the map of Africa below to answer questions 10 - 13.



10. Name the town marked R
  - A. Tunis
  - B. Cairo
  - C. Tripoli
  - D. Alexandria
11. The vegetation of the shaded area marked Q consists of
  - A. evergreen trees and little grass
  - B. scattered bushes and thorns
  - C. coniferous trees and sweet smelling herbs
  - D. scattered trees and tall grass

12. The ocean current marked K is  
 A. Guinea warm current  
 B. Benguela cold current  
 C. Guinea cold current  
 D. Canary cold current
13. The multi purpose river project marked J is  
 A. Aswan high dam  
 B. Kariba dam  
 C. Volta river scheme  
 D. The Seven Folks scheme
14. Which one of the following statements is **TRUE** about the European settler farming in Kenya?  
 A. They introduced agriculture in Kenya  
 B. They imported labour from Europe  
 C. They practised mono cropping  
 D. They introduced the use of diesel driven machines in farms
15. Which artifact among the following was used for both hunting and fishing in traditional African communities?  
 A. Hooks  
 B. Bows and arrows  
 C. Fishing baskets  
 D. Spears
16. The following are some characteristics of a type of vegetations;  
 (i) *Have small thorny bushes*  
 (ii) *Trees have long deep roots*  
 (iii) *Plants have thick stems*  
 (iv) *Some trees have no leaves*  
 The type of vegetation described above is  
 A. tropical rain forest  
 B. savanna vegetation  
 C. Mediterranean vegetation  
 D. desert vegetation
17. Which one of the following methods is used to mine diatomite at Kariandusi?  
 A. Panning  
 B. Drilling  
 C. Open cast  
 D. Shaft
18. Which one of the following is NOT a responsibility of children in a family?  
 A. Respecting adults  
 B. Taking care of the family property  
 C. Sharing out family resources  
 D. Helping with the house hold chores
19. One of the following towns serves as a sea port and a capital city. Which one?  
 A. Lagos  
 B. Mombasa  
 C. Luanda  
 D. Cape town
20. The Ntemis were famous chiefs among the  
 A. Baganda  
 B. Nyamwezi  
 C. Hehe  
 D. Khoisan
21. Below is a description of a country in Africa;  
 (i) *It borders the Atlantic ocean to the South*  
 (ii) *It's a major producer of petroleum*  
 (iii) *It's other neighbours are Benin and Cameroon*  
 The county described above is  
 A. Ghana  
 B. Gabon  
 C. Ivory coast  
 D. Nigeria
22. Which one of the following weather instruments is **CORRECTLY** matched with the weather element?  
 A. Hygrometer - Air pressure  
 B. Anemometer - Direction of wind  
 C. Barometer - Atmospheric pressure  
 D. Windvane - Speed of wind
23. Fidel took his neighbours to court for destroying his property. The method used by Fidel to resolve the conflict is known as  
 A. arbitration  
 B. litigation  
 C. negotiation  
 D. mediation

24. Below are conditions that favour the growth of a cash crop in Africa;
- (i) *High temperature of between 25°C- 30°C*
  - (ii) *High rainfall of above 2000mm per years*
  - (iii) *High humidity*
  - (iv) *Well drained fertile soils*
- The conditions listed above favours the growth of
- A. cocoa
  - B. tea
  - C. pyrethrum
  - D. coffee
25. The **MAIN** type of fish caught in lake Tanganyika is
- A. trout
  - B. dagaa
  - C. tilapia
  - D. Nile perch
26. The **MAIN** problem threatening forest vegetation in Africa is
- A. deforestation
  - B. high temperature
  - C. destruction by wild animals
  - D. insects such as locusts
27. The following are facts about a climatic region in Africa;
- (i) *It lies between 5° - 15° North*
  - (ii) *It experiences two dry and two wet seasons*
  - (iii) *Dry periods are usually hot with temperature of about 32°C*
- The climatic region described above is
- A. Equatorial climate
  - B. desert climate
  - C. tropical climate
  - D. temperature climate
28. Which one of the following is **NOT** development taking place in pastoral areas in Africa?
- A. Drilling of boreholes
  - B. Provision of veterinary services
  - C. Cross breeding of animals
  - D. Overstocking
29. Which one of the following traditional activities **DOES NOT** promote harmony among the people?
- A. Intermarriages
  - B. Initiation ceremonies
  - C. Cattle rusting
  - D. Consulting rain makers
30. Many teenage pregnancies experienced in Kenya are as a result of
- A. rape
  - B. mixed schools
  - C. leaving girls at home alone
  - D. failure to observe moral values
31. The following are characteristics of particular forest in Africa;
- (i) *Trees are mainly hardwood*
  - (ii) *Trees is no undergrowth*
  - (iii) *Trees are tall*
  - (iv) *Tree leaves form layers*
- The forest described above is
- A. mangrove forest
  - B. Mediterranean forest
  - C. tropical rain forest
  - D. highland forest
32. In which country did the French use the policy of assimilation?
- A. Senegal
  - B. Algeria
  - C. Tunisia
  - D. Morocco

33. By which process was the Quattara depression in Egypt formed?
- Down warping
  - Volcanic action
  - Wind action
  - Human activities
34. Three of the following towns grew as industrial towns. Which one did **NOT**?
- Nairobi
  - Addis Ababa
  - Jinja
  - Arusha
35. The **MOST** appropriate place for pedestrians to cross Thika Super highway is at
- zebra crossing
  - Bumps
  - foot bridge
  - round about
36. Which one of the following is **NOT** a primary industry?
- Tannery
  - Lumbering
  - Coffee mill
  - Steel rolling
37. Which one of the following drugs is legally accepted in Kenya?
- Alcohol
  - Cocaine
  - Heroin
  - Bhang
38. Anita has been stopped from joining a woman self help group. Which right has she been denied?
- Freedom of association
  - Freedom of assembly
  - Freedom of movement
  - Freedom of worship
39. The **MAIN** problem facing tourism in Maasai Mara Game Reserve is
- poaching
  - poor state of roads
  - insecurity
  - environmental pollution
40. Which one of the following is an invisible export from Kenya?
- Carbondioxide
  - Petroleum
  - Tourism
  - Tea
41. Who was the first African president to retire from office voluntarily?
- Julius Nyerere
  - Leopold Sedar
  - Nelson Mandela
  - Jomo Kenyatta
42. Who among the prominent leaders successfully mediated peace accord in Kenya after the post election violence in 2007 - 2008?
- Graca Machel
  - Desmond Tutu
  - Jakaya Kikwete
  - Kofi Annan



43. The following crops are grown at Perkerra irrigation scheme. Which one is **NOT**?
- A. Rice
  - B. Onion
  - C. Pawpaws
  - D. Seed maize
44. Which one of the following statements is **TRUE** about the Berlin conference? It was agreed that:-
- A. there would be armed struggle to acquire colonies in Africa
  - B. all European power to use the same system of administration in their colonies
  - C. European powers to peacefully share out the African continent
  - D. there would be no boundaries among different African countries
45. The following are problems affecting major urban centres in Eastern Africa. Which one **DOES NOT** affect Kampala, Uganda?
- A. Traffic congestion
  - B. Unemployment
  - C. Water shortage
  - D. Crime
46. Which one of the following officials is **CORRECTLY** matched with the unit they represent?
- A. Women Representatives - County
  - B. Sub County Commissioner - County
  - C. Governor - Ward
  - D. Senator - Constituency
47. Upon his death, the king of the Old Ghana kingdom was succeeded by
- A. his favourite son
  - B. his first son
  - C. his brother
  - D. his nephew
48. Chapter two of the constitution is about
- A. the bill of rights
  - B. the legislature
  - C. the republic
  - D. devolution
49. A three year old child found within the borders of Kenya is assumed to be a citizen by
- A. birth
  - B. registration
  - C. dual action
  - D. adoption
50. People with special needs are catered for in communication by
- A. use of sign languages
  - B. covering of all trenches
  - C. construction of ramps
  - D. providing white canes
51. The chief accounting officer in any state department in Kenya is
- A. principal secretary
  - B. cabinet secretary
  - C. the president
  - D. secretary to the cabinet

52. Samori Toure of the Mandinka resisted which colonial power in West Africa?
- A. British
  - B. German
  - C. French
  - D. Italians
53. Three of the following are problems facing ECOWAS. Which one is **NOT**?
- A. Brought limited movement of people in members countries
  - B. Production of similar goods
  - C. Inefficient infrastructures connecting member countries
  - D. Lack of a common currency among member states
54. Which one of the following is the current ruling coalition in Kenya?
- A. Hand shake
  - B. BBI
  - C. Jubilee coalition
  - D. NASA
55. The **MAIN** factor to consider when locating a furniture making industry is
- A. availability of market
  - B. availability of transport
  - C. availability of power
  - D. availability of water supply
56. Three of the following are requirements of a presidential candidate **EXCEPT**;
- A. must present nomination papers to the returning officers
  - B. must be 35 years and above
  - C. must be a registered voter in a constituency
  - D. must be a holder of a university degree
57. The process of national election begins with
- A. announcement of the election date
  - B. dissolution of parliament
  - C. campaigns by candidates
  - D. presentation of nomination papers
58. The type of soil commonly found on the slopes of Mt. Kenya is
- A. sandy soil
  - B. alluvial soil
  - C. clay soil
  - D. volcanic soil
59. Three following mountains were formed in the same way **EXCEPT**;
- A. Usambara mountain
  - B. Ruwenzori mountain
  - C. Pare mountain
  - D. Atlas mountain
60. The following conditions can lead to a by election in a constituency **EXCEPT**;
- A. if an MP is imprisoned for six month
  - B. when the MP dies
  - C. when the MP is declared bankrupt
  - D. when an MP defects to a different political party

**SECTION II : CHRISTIAN RELIGIOUS  
EDUCATION**

61. Which one of the following consequences was a result of Adam's disobedience to God?  
A. Crush the serpent's head  
B. Bitten by the snake on the head  
C. Sweat in order to eat  
D. Pain during child birth
62. The following happened immediately after the flood **EXCEPT**;  
A. command to have many children  
B. offered sacrifice  
C. put all types of animals into the ark  
D. sent out the raven
63. Which of the following is **NOT TRUE** about Abraham?  
A. Nations were blessed through Him  
B. Was called by God when he was in Ur  
C. Died at the age of 175 years  
D. Circumcision started with Him
64. What do we learn from the story of Joseph's temptation by Potiphar's wife?  
A. We can overcome any temptation  
B. We can interpret dreams  
C. Family members can be jealous  
D. We can serve God even in prison
65. "*I am who I am*" Exodus 3:14, this statement was made  
A. when Moses was running away from Pharaoh  
B. when Moses wanted to marry Zipporah  
C. when Moses was given the Ten commandments  
D. when Moses was being sent to Egypt
66. The following happened during the Passover **EXCEPT**;  
A. Egyptians first borns died  
B. Israelites ate meat while seated  
C. the Israelites ate roasted meat  
D. the angel of death by passed Israelites houses
67. Which of the following was David's achievement?  
A. Built the temple  
B. Married Bethsheba  
C. United all tribes of Israel  
D. Was annointed by prophet Nathan
68. Which of the following is the reason why Elijah offered sacrifice at Mount Carmel?  
A. To prove Yahweh is the true God  
B. To compete with the 450 prophets of Baal  
C. To annoint prophet Elisha  
D. To say a prayer to God
69. Which of the following was **NOT** said by angel Gabriel about Jesus?  
A. He will be called the son of most high  
B. He will be conceived by the power of the Holy spirit  
C. His coming will be prepared by John the baptist  
D. The child will be powerful
70. Which of the following is **NOT TRUE** about the gifts brought to baby Jesus?  
A. Gold symbolized kingship  
B. Myrrh symbolized priesthood  
C. The magi bought gifts and worshipped  
D. There were three types of gifts
71. The following were descriptions of Jesus during dedication. Which one was **NOT**?  
A. Saviour of mankind  
B. Saviour of the Jews  
C. Light to the Gentiles  
D. God with us
72. Arrange the following in order on what happened during the baptism of Jesus;  
(i) *Heaven opened*  
(ii) *Holy spirit descended*  
(iii) *Voice was heard from heaven*  
(iv) *steps out of water*  
(v) *Baptised*  
A. i, ii, iii, iv, v  
B. v, iv, i, ii, iii  
C. v, ii, iii, i, iv  
D. v, i, ii, iii, iv
73. Which of the following was a teaching of Jesus about enemies?  
A. Your enemies should be your friends  
B. Do not associate with your enemies  
C. Run away from enemies  
D. Pray for your enemies
74. Which of the following parables teaches on wise use of talents and abilities. The parables of  
A. the three servants  
B. the rich man and Lazarus  
C. the ten virgins  
D. the sower
75. Which of the following miracles **does not** show that Jesus had power over nature?  
A. Raising of Jairus daughter  
B. Feeding of five thousand men  
C. Cursing of the fig tree  
D. Healing of the blind
76. Which of the following is the lesson learnt during the event of transfiguration?  
A. Jesus came to fulfil the law  
B. Jesus appears as a prophet  
C. We should worship Jesus at the mountains  
D. We should be dedicated disciples of Jesus



77. "This is my body which is given for you....."  
Luke 22:19, these words were said by Jesus during  
A. the trial of Jesus  
B. the teachings of Jesus  
C. the last supper  
D. the temptation of Jesus
78. Arrange in order the events that took place;  
(i) *Jesus prayed at Gethsamane*  
(ii) *Jesus is taken to pilate*  
(iii) *Jesus is taken to Ciaphas*  
(iv) *Jesus is taken to Herod*  
(v) *Peter cut the soldier's ear*  
(vi) *Jesus is arrested*  
A. v, i, iii, iv, ii, vi  
B. i, v, vi, iii, ii, iv  
C. i, vi, v, iii, iv, ii  
D. i, vi, v, iv, iii, ii
79. During crucifixion, the following happened **EXCEPT**  
A. the tombs opened  
B. the solders divided his cloths  
C. a voice was heard from heaven  
D. there was darkness for three hours
80. The **MAIN** reason why the early church chose deacons was to  
A. help in distribution of food  
B. help in preaching the gospel  
C. spend time in prayer  
D. baptise believers
81. The **MAIN** reason why babies were **NOT** exposed to strangers in traditional African society was  
A. to protect them from people with evil eyes  
B. to avoid killing them  
C. children were not used to strangers  
D. to avoid bad influence
82. During circumcision as a rite of passage, in ATR. The young boys learnt the following **EXCEPT**;  
A. witnessing and discipleship  
B. secrets of the clan  
C. clans beliefs practices  
D. responsible behaviour
83. Which of the following practices is found in both Christianity and African traditional religions?  
A. Receiving Holy communion  
B. Consulting ancestral spirits  
C. Respect for human life  
D. Offering libation
84. Which of the following actions by Christians demonstrates a fruit of the Holy spirit?  
A. Giving advice to others  
B. Giving food to the hungry  
C. Healing the sick  
D. Preaching the good news
85. Which of the following activities **BEST** promote good relationship between parents and children?  
A. Children being allowed to visit relatives  
B. Children asking advice from parents  
C. Parents paying school fees  
D. Parents being role models
86. Mutua who is a rich man is thinking on how to use his extra money. Which is the **BEST** advice for him as a Christian?  
A. Build a bigger house for the family  
B. Buy a farm  
C. Take a trip a broad  
D. Pay school fees for the orphans
87. Your friend Susan **DOES NOT** want to wash dishes at home. As a Christian which is the best advice for her?  
A. Ask her parents to employ house help  
B. Move out of home  
C. Tell a friend to talk to the parents  
D. Tell her to understand work is good
88. Antony your friend has lost your pencil. As a Christian you should  
A. demand payments  
B. report him to the parents  
C. report him to the teacher  
D. forgive him
89. Mary a standard Eight pupil tells you that her parents want her to get married to a wealthy old man. What is the **BEST** action for her to take as a Christian?  
A. Run away from home  
B. Report the matter to the area chief  
C. Seek help from friends  
D. Seek help from her teacher
90. Which of the following **BEST** shows how Christians are helping to reduce the spread of HIV/AIDS?  
A. Being the role model  
B. Teaching on behaviour change  
C. Counselling the sick  
D. Providing ARVS