

KENYA NATIONAL EXAMINATION COUNCIL

KCSE 2009

CHEMISTRY

PAPER 1

AVAILABLE ONLINE AT:

Schools Net Kenya Consultancy

P.O. Box 8076 – 00200 Nairobi, Kenya | Tel: +254202319748


E-mail: infosnkenya@gmail.com | www.schoolsnetkenya.com

1. The ionization energies for three elements A, B and C are shown in the table below:

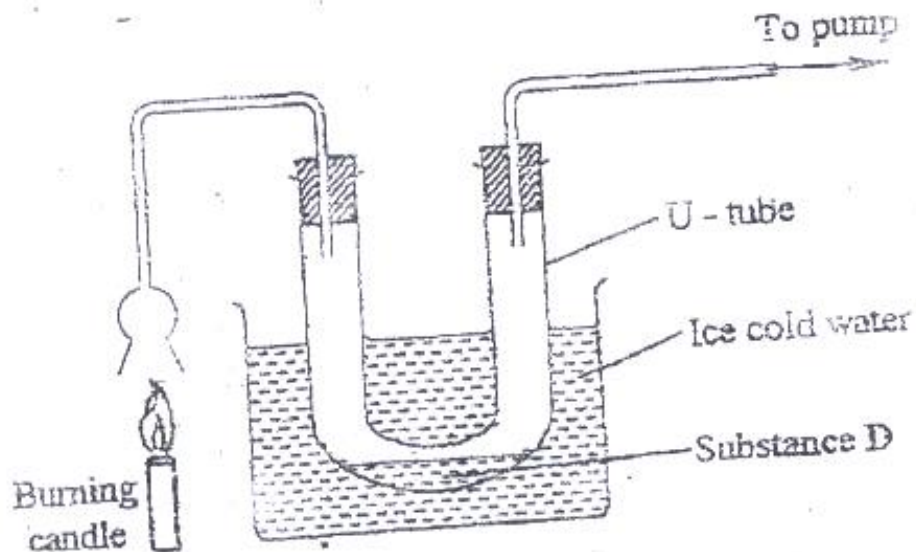
Element	A	B	C
Ionisation energy (kJ/mole)	519	418	494

- a) what is meant by ionization energy? (1 mk)
- b) which element is the strongest reducing agent? Give a reason. (2 mks)
2. Hardness of water may be removed by either boiling or addition of chemicals
- a) write an equation to show how boiling removes hardness of water. (1 mk)
- b) name two chemicals that are used to remove hardness of water. (2 mks)
3. The atomic number of sulphur is 16.

Write the electron arrangement of sulphur in the following: (2 mks)



4. An experiment was set up as shown in the diagram below:



substance D.

(1 mk)

a) Identify

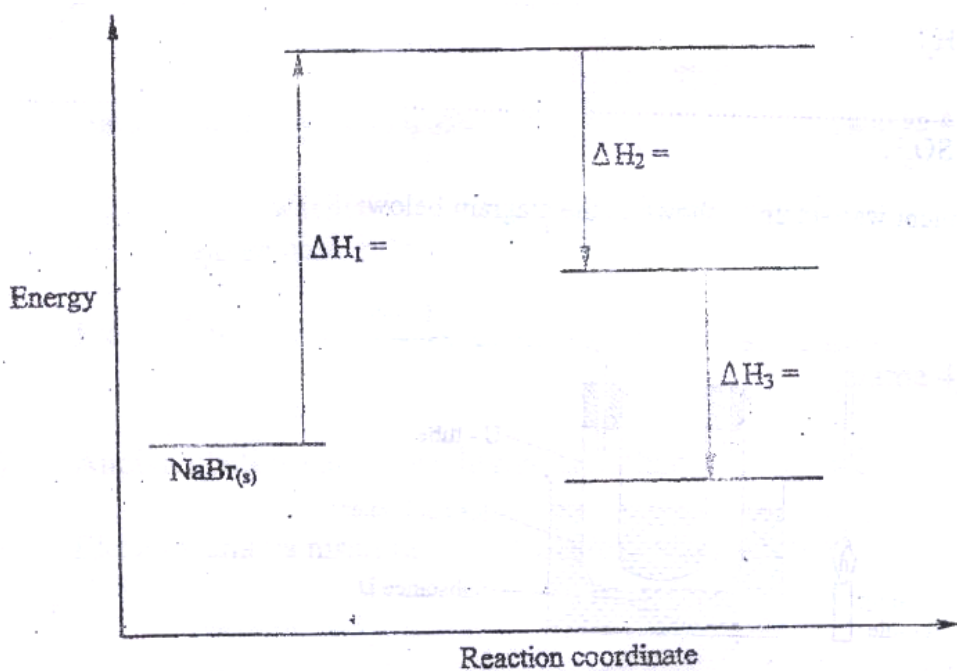
b) Describe how the other product of the burning candle could be prevented from getting into the environment. (2 mks)

5. In terms of structure and bonding, explain why the melting point of oxygen is much lower than that of sodium. (3 mks)

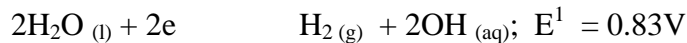
6. An isotope of element E has 34 neutrons and its mass number is 64. E forms a cation with 28 electrons. Write the formula of the cation with 28 electrons. Write the formula of the cation indicating the mass and atomic numbers.

(1mk)

7. When aluminium oxide was electrolysed, 1800kg of aluminium metal were obtained.
- a) Write equation for the formation of aluminium metal (1 mk)
- b) Calculate the quantity of electricity in faradays used (Al=27) (2 mks)
8. Using dots (.) and crosses (x) , show bonding in:
- a) The compound formed when nitrogen reacts with fluorine
(Atomic numbers F=9, N=7); (1mk)
- b) Sodium oxide.
(Atomic numbers Na= 11, O = 8) (1 mk)
9. a) what is meant by molar heat of solution? (1 mk)
- b) the lattice energy of sodium bromide and hydration energies of sodium and bromide ions are: 733,406 and 335 kJmol⁻¹ respectively.
- i) Complete the energy cycle diagram below by inserting the values of ΔH_1 , ΔH_2 , and ΔH_3 (1 ½ mks)



- ii) Determine the molar heat of solution of solid sodium bromide. (½ mk)
10. Hydrogen and oxygen can be obtained by electrolysis of acidified water.
Using equations for the reactions at the electrodes, explain why the volume of hydrogen obtained is twice that of oxygen. (2mks)
11. Starting with 50 cm³ of 2.8M sodium hydroxide, describe how a sample of pure sodium sulphate crystals can be prepared. (3 mks)
12. The standard reduction potentials of two half –cells are:



Draw a labelled diagram of an electro chemical cell that can be constructed using the two half-cells (3 mks)

13. When 8.53 of sodium nitrate were heated in an open test-tube the mass of oxygen gas produced was 0.83 g . Given the equation of the reaction as



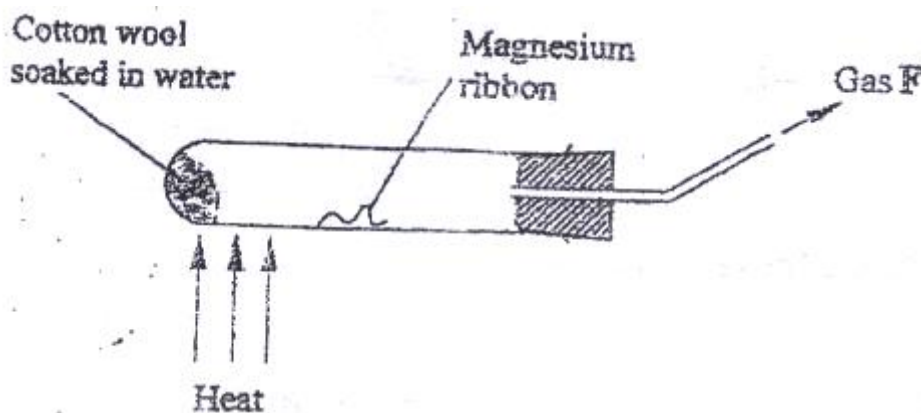
Calculate the percentage of sodium nitrate that was converted to sodium nitrite (Na =

23.0 N = 14.0 O = 16.0) (3 mks)

14. a) Draw and name the structure of the compound formed when one mole of ethyne reacts with one mole of hydrogen bromide. (2mks)

b) Draw the structures of the alkynes whose molecular formula is C_4H_6 (1 mk)

15. a student used the set up shown in the diagram below in order to study the reactions of some metals with steam. The experiment was carried out for ten minutes



a) What observation would be made if gas F is ignited? (1 mk)

b) When the experiment was repeated using iron powder instead of magnesium ribbon very little gas F was obtained.

i) Give a reason for this observation (1 mk)

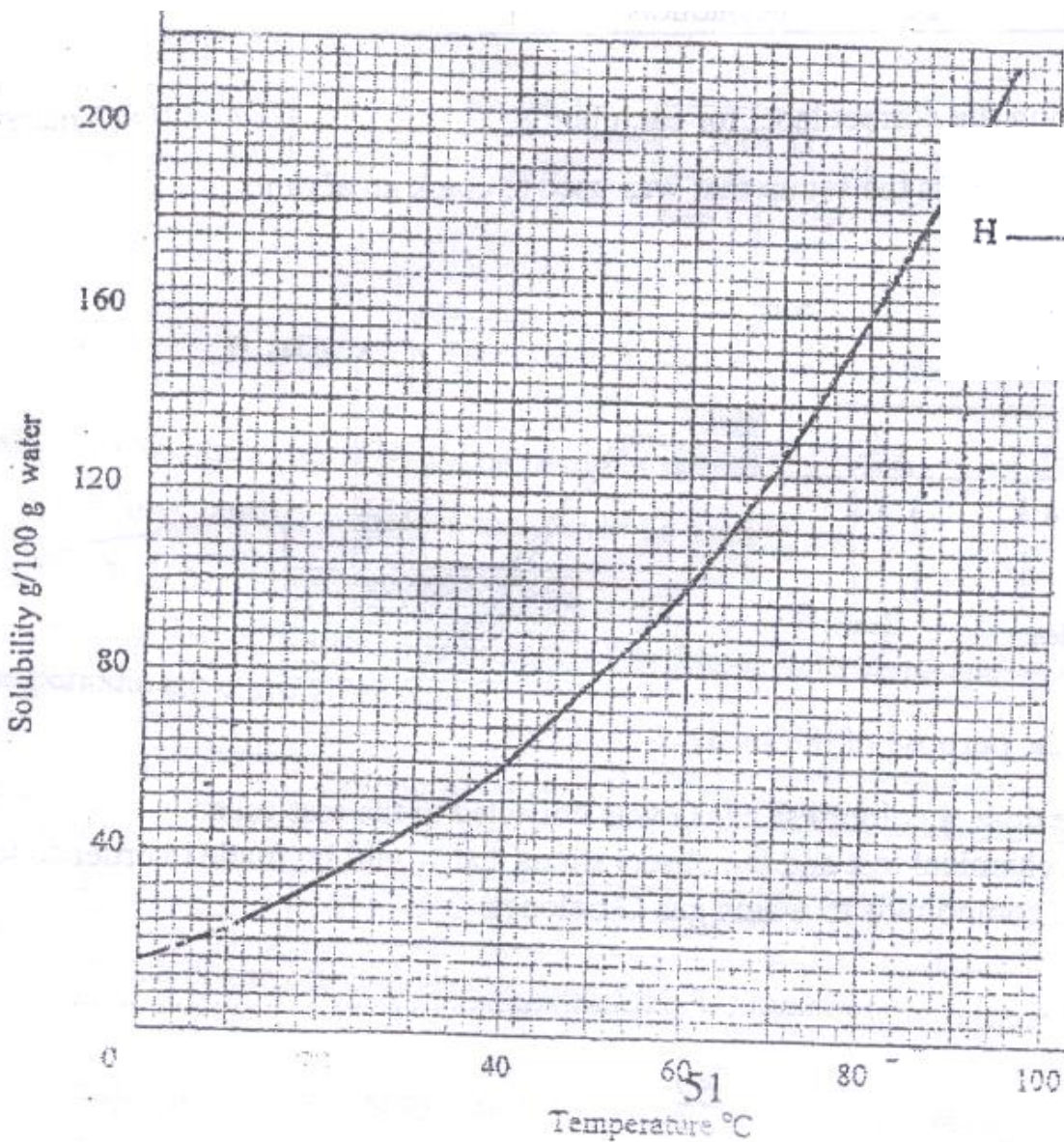
- ii) What change in the conditions of the experiment should the student have made in order to increase the volume of gas F Produced? (1mk)

16. The solubility curve of potassium nitrate is shown below.

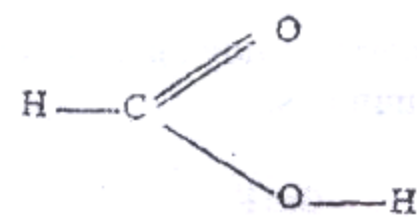
a) Determine the solubility of potassium nitrate at 50°C (1 mk)

b) Determine the molar concentration of saturated potassium nitrate at 50°C

($K=39.0$ $O=16.0$ $N=14.0$ and density of water 1 g/cm^3). (2 mks)



17.



The structure of methanoic acid is

What is the total number of electrons used for bonding in a molecule of methanoic acid?

Give reasons.

(2 mks)

18. Bottles of sodium carbonate, sodium chloride and sugar have lost their labels.

A student prepares and tests an aqueous solution of a sample from each bottle.

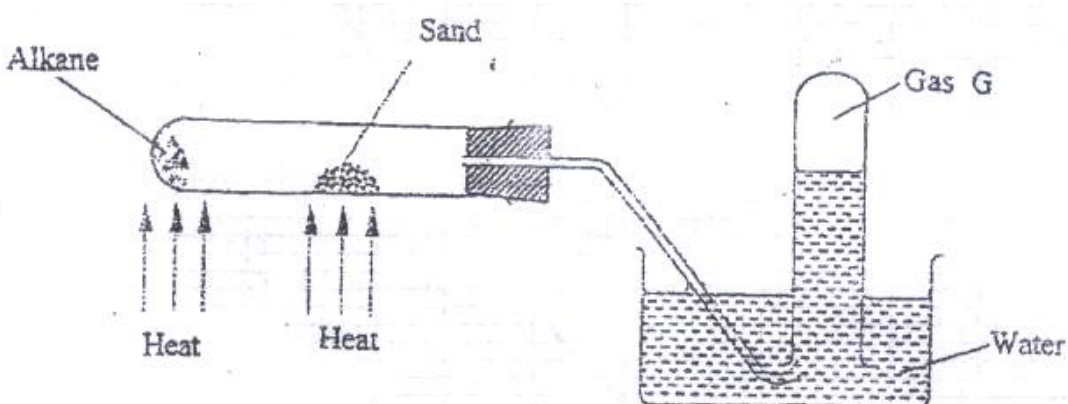
The results obtained are as shown in the table below.

Bottle	PH	Electrical Conductivity	Correct label
1	7	Conducts	
2	7	Does not conduct	
3	10	conducts	

Complete the table by filling the correct label for each bottle.

(3 mks)

19) The figure below represents the set up that was used to crack an alkane.



a) What was the purpose of the sand? (1 mk)

b) After some time, a colourless gas G collected in the test-tube.

Describe a chemical test and the observations that would be made in order to identify the class of compounds to which gas G belongs. (2 mks)

20. Classify the following processes as either chemical or physical. (3 mks)

Process	Type of change
a) Heating copper (II) sulphate crystals	
b) Obtaining kerosene from crude oil	
c) Souring of milk	

21. Give the name of the product formed when magnesium reacts with phosphorus.

(1 mk)

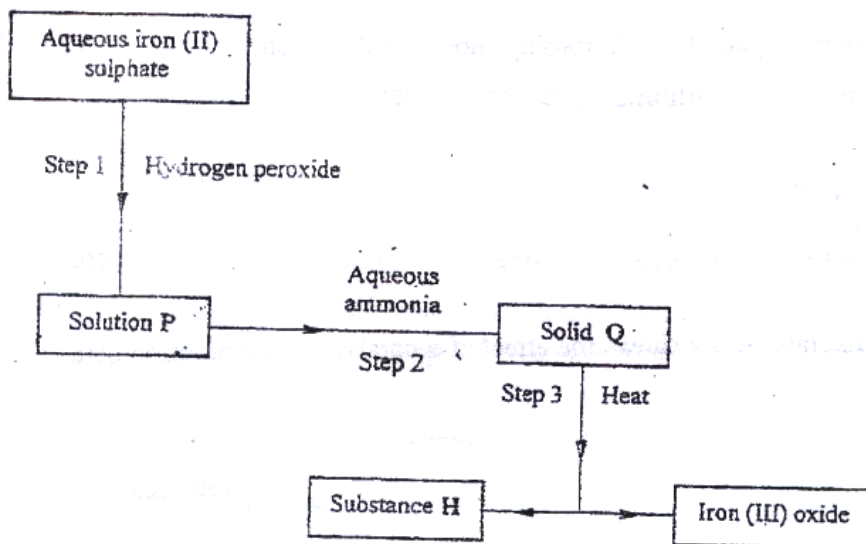
22. a student added very dilute sulphuric (VI) acid to four substances and recorded the observations shown in the table below.

Test	Substance	Gas given off
1	Sodium	Yes
2	Iron	No
3	Carbon	Yes
4	Copper	No

For which tests are the observations wrong? Explain

(3 mks)

23. Use the flow chart below to answer the questions that follow.



- a) What observation would be made in step I? (1 mk)
- b) Name another substance that could be used in step 2. (1 mk)
- c) Give the name of substance H. (1 mk)

24. The boiling points of some compounds of hydrogen with some elements in groups 4 and 6 of the periodic table are given below.

Compound	Boiling point (⁰ C)	Compound	Boiling point(⁰ C)

CH ₄	-164.0	H ₂ O	100.0
SiH ₄	-112.0	H ₂ S	-61.0

- a) Which of the compounds CH₄ and SiH₄ has stronger intermolecular forces?

(1 mk)

- b) Explain why the boiling points of H₂O and H₂S show different trends from that of CH₄ and SiH₄

(2mks)


25. For each of the following reactions, state the observation and write the formula of the Compound responsible for the observation:

- a) Bromine water is added to aqueous potassium iodide; (1 ½ mks)

- b) Excess aqueous ammonia is added to copper (II) hydroxide (precipitate).

(1 ½ mks)

26. The graph below shows the relationship between pressure and the temperature of a gas in a fixed volume container.



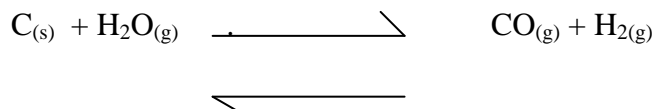
Pressure

(Pa)

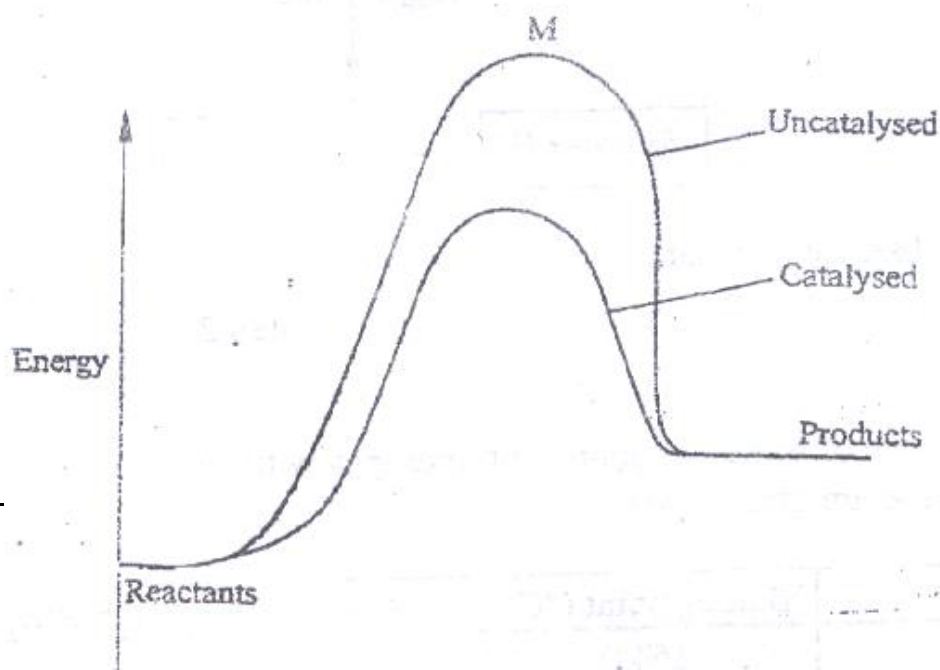
Temperature ($^{\circ}\text{C}$)

- a) State the relationship between pressure and temperature that can be deduced from the graph. (1 mk)
- b) Using kinetic theory, explain the relationship shown in the graph. (2 mks)

27. The following reaction is in equilibrium in a closed container



State giving reasons how an increase in pressure would affect the amount of hydrogen. (2 mks)



28. The energy level diagram below shows the effect of a catalyst on

the reaction path.

a) What does point M represent?

(1 mk)

ANSWERS:

Order a copy of answers from www.schoolsnetkenya.com/order-e-copy

Email: infosnkenya@gmail.com / Tel.: +254202319748

NB> We charge Kshs. 100 ONLY to meet website, e-resource compilation and provision costs