

READ THESE INSTRUCTIONS CAREFULLY

1. You have been given this question paper and a separate answer sheet. The question paper contains 50 questions, **Time: 2 hours 15 minutes**

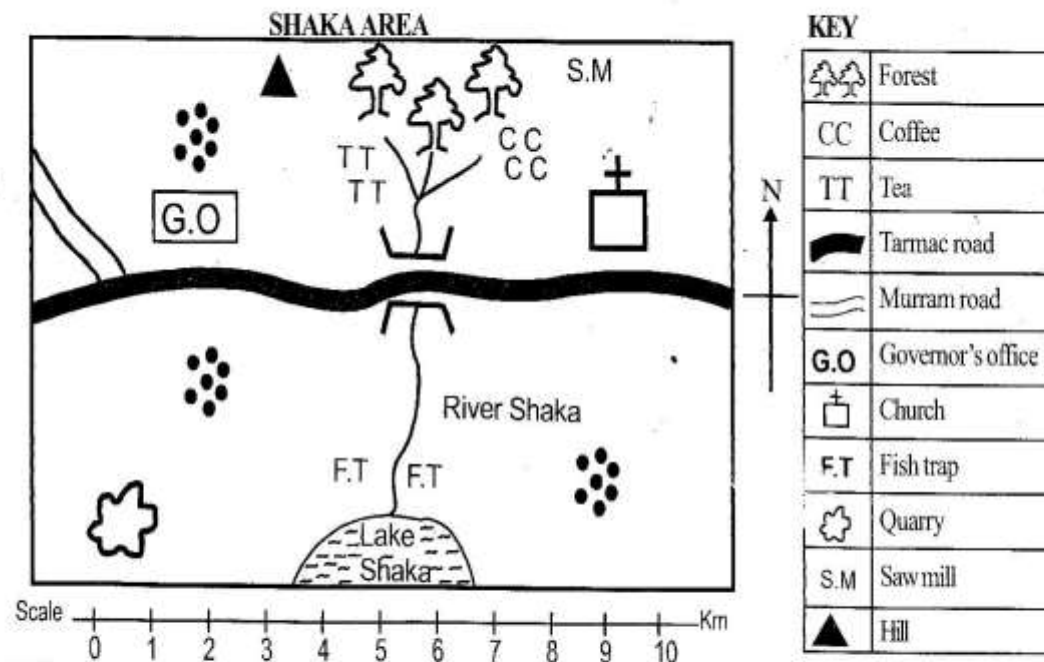
2. Make sure that you have written on the answer sheet.

(i) Your name

(ii) Name of your school

(iii) KNEC Assessment number

Study the map of Shaka Area below and then answer questions 1 to 7.



- What is the **likely** climatic condition of the area North of Shaka area?
 - Hot and wet
 - Hot and dry
 - Cool and wet
 - Cool and dry
- The residents of Shaka area belong to which religion?
 - Christianity
 - Islamic
 - pagan
 - Traditionalists.
- River Shaka is **likely** to flow from
 - West
 - East
 - South
 - North
- Who is **likely** to be the elected head of Shaka area?
 - Chief
 - Governor
 - Senator
 - Presidents.
- The settlement patterns formed in Shaka area is known as
 - dense
 - linear
 - nucleated
 - scattered.
- Which of the following man made feature is found in Shaka area?
 - Bridge
 - Hill
 - River
 - Lake.
- What is the direction of the quarry from the forest?
 - North West
 - North East
 - South East
 - South West.
- Grade 6 learners went for an educational trip. Along the way they came across the road sign below

The road sign instructs the driver

 - to proceed with caution
 - that there is no entry
 - that there is danger ahead
 - that there is no parking
- The **main** tourist attraction in Coastal region of Kenya is
 - Pre-historic sites
 - Wildlife
 - Sandy beaches
 - Warm temperature.

10. The following are duties of certain school administrator:

i) *He or she is in charge of discipline*
 ii) *Takes minutes during staff meeting*
 iii) *He makes the block timetable*

The school administrator described above is likely to be

- A. deputy headteacher B. senior teacher
 C. class teacher D. headteacher
11. Which one of the following communities is the **odd** one out?

A. Taita B. Kikuyu
 C. Abagusii D. Acholi

12. Grade 6 learners were asked to list the importance of historic built environment. Which one is **not** correct?

A. Help to conserve our culture
 B. They are used as boundaries
 C. Help us to appreciate our history
 D. Remind us of our history

13. The following are drainage features **except**

A. swamps B. lakes
 C. valley D. river.

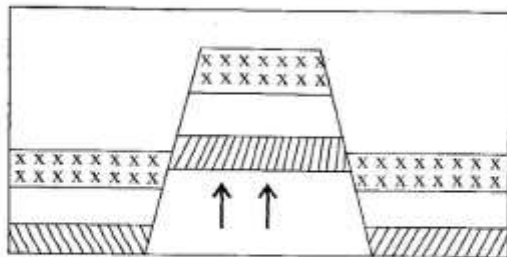
14. Which one of the following statements is **not** true about longitudes?

A. They run from North to South
 B. The main longitude is the Prime Meridian
 C. They are used to locate places on a map
 D. They are parallel to each other

15. Grade 6 learners were asked to list the countries crossed by the equator. Choose the group that shows the countries crossed by the equator.

A. Tanzania, Somalia and Sudan
 B. Kenya, Uganda and Somalia
 C. Ethiopia, Kenya and Uganda
 D. Sudan, Uganda and Somalia

Use the diagram below to answer questions 16 and 17.

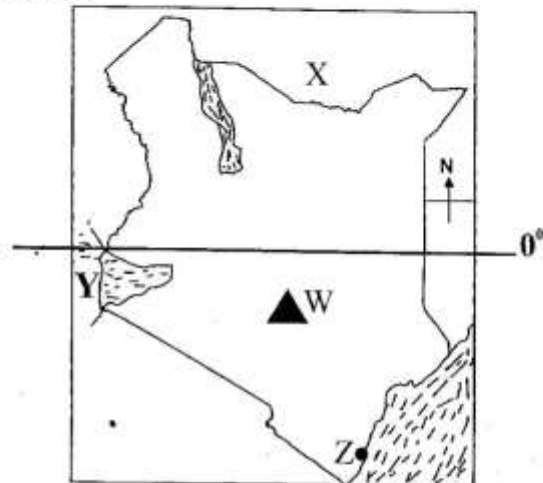


16. Which one of the following is **not** an example of the above drawn mountain?

A. Ruwenzori mountain B. Danakil Alps
 C. Pare mountain D. Mount Longonot

17. The above diagram shows the formation of
 A. block mountain B. fold mountain
 C. volcanic mountain D. residual mountain

Use the map of Kenya below to answer questions 18 -21.



18. Identify the country marked X

A. Uganda B. Somalia
 C. Tanzania D. Ethiopia

19. The water body marked Y is

A. Lake Victoria
 B. Red Sea
 C. Indian Ocean
 D. Lake Turkana

20. Nancy and her family lived near the area marked W. Which is the most likely climatic condition that they experienced?

A. Arid and semi-arid conditions
 B. Modified equatorial climate
 C. Mountain climatic condition
 D. Modified tropical climatic

21. The country marked Z is

A. Nairobi B. Mombasa
 C. Trans Nzoia D. West Pokot

22. During a Social Studies lesson, Grade 6 learners were told that Nairobi city has more people living there compared to rural areas in Kenya. What could be the reason for this?

A. Nairobi is more beautiful and attractive for one to live in
 B. Nairobi is a bigger town than other areas in Kenya
 C. Rural areas have no roads, water and big houses
 D. Nairobi has many job opportunities for people to take.

23. Grade 6 learners were asked to state reasons as to why Nairobi National Museums preserved for many years. Who wrote an **incorrect** answer?
- A. **Elvis** : It is a good site for birthday parties
 B. **Dorcas** : It attracts tourists
 C. **Levi** : We get to learn our past history through it.
 D. **Asha** : It is used to preserve traditional artefacts
24. The **main** source of the government revenue is
 A. loans B. court fines
 C. taxes D. grants.
25. Which means of transport is the slowest and cheapest?
 A. Air B. Water
 C. Railway D. Road.
26. Grade 6 learners of Bright Star Academy were asked to name the three arms of the government. Which one is **not** correct?
 A. Executive B. Legislature
 C. Judiciary D. Cabinet
27. Which of the following statements is true about democracy in school? It
 A. enables learners to make right decision
 B. promotes tribalism in school
 C. helps teachers in allocating duties to the learners
 D. discourages learners from talking about issues affecting them
28. Which of the following is a cultural practise that will violate the rights of a learner in your school?
 A. Offering sacrifices B. Naming ceremonies
 C. Initiation rites D. Early marriages.
29. Which of the following duties is performed by the governors?
 A. Collecting court fines
 B. Making laws that govern our nation
 C. Initiating development projects in the county
 D. Maintaining law and order in the country
30. Grade 6 learners were planning to start a peace project in their school. Which of the following will make their project successful
 A. Changing the project activities which bring desired results
 B. Sharing duties and responsibilities fairly
 C. Assigning duties to non-members of the group
 D. Misappropriating the project money
31. The following are traditional methods of instructions **except**
 A. riddle B. apprenticeship
 C. songs D. reading
32. Three of the following are methods of fishing mostly used in sea fishing. Which one is **not**?
 A. Hook and line method B. Purse seining
 C. Trawling D. Net drifting.
33. A group of people who share their common origin from the same ancestor is called
 A. age set B. community
 C. clan D. family
34. The capital city of Eritrea is
 A. Dodoma B. Asmara
 C. Kigali D. Khartoum
35. Mining has many effects to the environment. Which one of the following is **not**?
 A. It destroys the beauty of the land
 B. It leads to wastage of agricultural land
 C. It causes air, water and soil pollution
 D. It earns revenue to the government.

SECTION B:

CHRISTIAN RELIGIOUS EDUCATION

36. Learners of Heri Primary Schol were learning about the creation story. Man was created on which day?
 A. Sixth B. Seventh
 C. First D. Fifth
37. What value do Christians learn from the story of Jacob wrestling with God?
 A. Forgiveness B. Teamwork
 C. Determination D. Jealousy
38. The gift of the Holy Spirit which helps Christians to make right decisions that please God and others is
 A. speaking in tongues
 B. wisdom
 C. healing
 D. performing miracles.
39. Grade 6 learners learnt about the call of the first disciples of Jesus. Who among the following were the first two disciples of Jesus?
 A. Simon and Andrew
 B. Judas Iscariot and Matthew
 C. Matthew and Thomas
 D. Simon and James.
40. John was asked by his CRE teacher to recite the Apostles' Creed. Which of the following lines is **not** found in the Apostles' creed?
 A. I believe in God
 B. Father, Almighty
 C. Creator of heaven and earth
 D. May your kingdom come.
41. The **main** lesson we learn from the story of Elisha recovering an axe is that
 A. we should have faith in God
 B. we should give up easily
 C. Christians should not believe in God
 D. we should believe in idols.

42. Your CRE teacher has asked learners to group the books of the Bible according to the Old and New Testament. Which group contains the books of the New Testament only?
A. Leviticus, Luke, Genesis
B. Mark, Haggai, John
C. Genesis, Acts, John
D. Matthew, John, Romans
43. Which one of the following commandments teaches us that God is supreme?
A. Do not accuse anyone falsely
B. Do not commit adultery
C. Do not desire another man's property
D. Do not worship any other God.
44. The last words that Jesus spoke before he died were
A. Eloi eloi
B. I am thirsty
C. it is finished
D. father forgive them
45. In Luke 22:17 "*Then Jesus took a cup gave thanks to God and said, take this and share it among yourselves.*" On which occasion did this take place?
A. Baptism
B. Last supper
C. Transfiguration
D. Temptation
46. Prophet Elisha healed a Syrian who was suffering from leprosy. His name was
A. Naaman
B. Stephen
C. Lazarus
D. Bartimeaus.
47. During C.R.E lesson, Grade 6 learners discussed marriage. From the discussion, God created a woman to be a man's
A. helper
B. worker
C. teacher
D. Holy Spirit
48. When we use the Holy Bible as a guide, we can acquire all the following values **except**
A. cooperation
B. love
C. unity
D. stealing
49. Marriage is important in Christianity because
A. it is a source of wealth
B. dowry is paid in plenty
C. it provides companionship
D. cake is normally shared.
50. By healing the ten lepers; Jesus wanted to teach the importance of
A. pride
B. thankfulness
C. kindness
D. wealth.
37. How many verses are there in Surat Al An Nasr?
A. Three
B. Four
C. Five
D. Six.
38. "*Until you visit your graves*" the phrases from Surat Al Takathur refers to
A. burying Muslim
B. piling of wealth
C. death
D. visiting the cemetery
39. How many Qur'ash were in the battle of Badr against Muslim?
A. 313
B. 1000
C. 700
D. 300
40. The actions and way of the life of prophet Muhammed (S.A.W) are
A. faradh
B. Sunnah
C. Sayings
D. Hadith
41. During the dry season, Muhammad led Muslims to prayer _____ in order to assist Allah for rain.
A. salat al sefers
B. salat al dhuha
C. salat al khusuf
D. salat al istigal
42. Another name of Angel jibril is
A. Ruuhul Aman
B. Halilu Allah
C. Assadn Allah
D. none.
43. The attribute of Allah that means the forgiveness is
A. Al-Aliim
B. Ar-Rahman
C. Al-Ghiful
D. Ar-Razzaq
44. Among the prophets who is among the ulul AZM
A. Nuh
B. Zakaria
C. Yusufu
D. Adam
45. Allah revealed Holy Books, among them is taurat which was revealed to prophet
A. Dewood
B. Muhammad
C. Musa
D. Issa
46. How many fardh rakaats are there in ishaa prayers?
A. Two
B. Three
C. Four
D. Five.
47. The minimum amount required for praying Zakat is called
A. sunnah
B. nisab
C. iqamah
D. tayammam
48. Who among the following should Zakah be given to?
A. Orphans
B. The dead
C. The widows
D. The reborn
49. What is the **main** lesson from fasting?
A. Sacrifice
B. Love for the poor
C. Self control
D. Being poor.
50. Which one of the following is **not** a pillar of Hajj?
A. Say
B. Tawaf
C. Arafah
D. Jamarat

SECTION B:

ISLAMIC RELIGIOUS EDUCATION

36. Which one of the following is not another name of Surat Al-Fatiha
A. Ashifaa
B. Surat al hem
C. Seven repeated verse
D. Mother of the book