

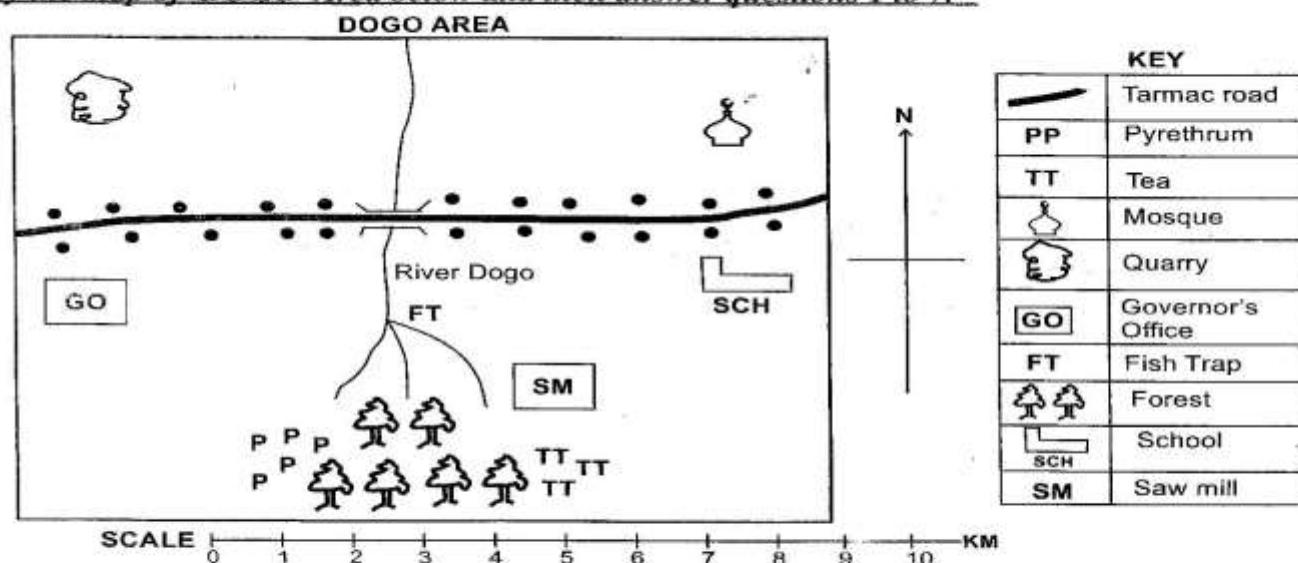
**READ THESE INSTRUCTIONS CAREFULLY.**

1. You have been given this question paper and a separate answer sheet. The question paper contains 50 questions.
2. Make sure that you have written on the answer sheet.

(i) Your name \_\_\_\_\_ (ii) Name of your school \_\_\_\_\_ (iii) KNEC Assessment number \_\_\_\_\_

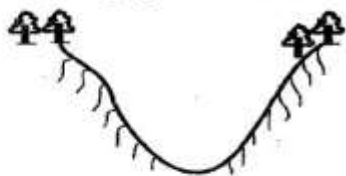
Time: 2hrs 15mins

**Study the map of DOGO Area below and then answer questions 1 to 7.**



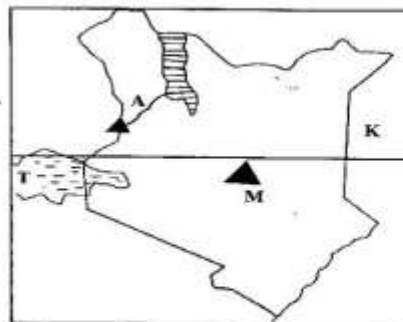
1. The type of settlement pattern found in Dogo area is known as  
A. nucleated  
B. dense  
C. linear  
D. sparse
2. The residents of Dogo area are **likely** to be  
A. Muslims  
B. Christians  
C. Pagans  
D. Hindus
3. People of Dogo area move from one place to another using which form of transport?  
A. Water  
B. Air  
C. Railway line  
D. Road
4. Grade Five learners were asked by their Social Studies teacher to identify an activity carried out at the quarry. What activity is it?  
A. Fishing  
B. Mining  
C. Farming  
D. Trading
5. Learners were asked to describe the location of the forest from the Quarry. What helps them do that?  
A. Key  
B. Scale  
C. Compass  
D. Frame
6. Teacher Andrew asked learners to point out a learning institution. Which one is **correct**?  
A. School  
B. Saw mill  
C. Quarry  
D. Fish trap
7. Dogo area is likely to be headed by  
A. Senator  
B. Women representative  
C. Member of County Assembly  
D. Governor
8. Grade Five learners were asked by their Social Studies teacher to identify the smallest county in Kenya. Which one is it?  
A. Isiolo  
B. Mombasa  
C. Machakos  
D. Kirinyaga

9. Identify the physical feature shown below.



- A. Swamp  
B. Hill  
C. Valley  
D. Ocean
10. Which of the following is an activity mostly done during the rainy season?  
A. Planting crops  
B. Tilling land  
C. Harvesting  
D. Building house
11. During a class discussion, learners were asked to list the economic activities carried out in our country. Which of the following is **not**?  
A. Trading  
B. Lumbering  
C. Mining  
D. Washing
12. Three of the following are traditional artefacts found in a museum **except**  
A. calabash  
B. laptop  
C. spear  
D. traditional stool
13. The following are characteristics of a climatic region in Kenya.  
i) *Receives low rainfall of less than 250mm per year*  
ii) *Has cloudless skies*  
iii) *Experience high temperatures of between 25°C to 45°C*  
The climatic region described above is  
A. tropical climate  
B. equatorial climate  
C. desert climate  
D. mountain climate
14. A Member of a County Assembly is elected to represent an area called  
A. ward  
B. location  
C. constituency  
D. county
15. Three of the following are aspects of traditional education **except**  
A. had no common syllabus  
B. teachers were mainly the elders  
C. had no reading and writing  
D. learners used the internet to acquire knowledge

Use the map of Kenya below to answer questions 16 to 19.



16. Identify the country neighbouring Kenya to the West marked **K**.  
A. South Sudan  
B. Somalia  
C. Tanzania  
D. Ethiopia
17. The physical feature marked **M** is called  
A. mt. Elgon  
B. mt. Longonot  
C. mt. Kenya  
D. mt. Marsabit
18. The river marked **A** is called  
A. River Kerio  
B. River Nzoia  
C. River Turkwel  
D. River Yala
19. The lake marked **T** is known as  
A. lake Victoria  
B. lake Nakuru  
C. lake Baringo  
D. lake Turkana
20. A traditional method of education where a learner was attached to an expert and learnt through observation is called  
A. riddles  
B. proverbs  
C. storytelling  
D. apprenticeship
21. Which one of the following is a traditional food?  
A. Rice  
B. Millet  
C. Coffee  
D. Tea
22. The children go to get knowledge and skills at  
A. museum  
B. shrine  
C. school  
D. church
23. A group of people who have a common ancestor form a  
A. clan  
B. family  
C. forest  
D. infrastructure



24. Grade Five learners were asked to list down child rights. Who was **wrong**?  
 A. Tom-work  
 B. Neema - clothes  
 C. Aisha - food  
 D. Elly - education
25. Learners in Nyeri County carried umbrellas to school, some wore heavy jackets and scarves. The season was likely to be  
 A. windy  
 B. dry  
 C. hot  
 D. rainy
26. Three of the following are Bantu communities **except**  
 A. Abagusii  
 B. Luo  
 C. Taita  
 D. Ameru
27. It is important to have an administrative structure in the school so as to  
 A. allow learners to rest  
 B. ensure responsibilities in a school are clearly defined and carried out  
 C. promote conflicts in a school  
 D. allow learners to rest
28. The following are aspects of a culture of different communities **except**  
 A. the dressing code  
 B. the language they use  
 C. the cars they drive  
 D. the food they eat
29. Three of the following are ways of conserving historic built environment **except**  
 A. repairing their walls  
 B. writing our names on them  
 C. fencing them  
 D. cutting long grasses around them
30. The following were early means of transport. Which one is **not**?  
 A. Rafts  
 B. Human portage  
 C. Pack animals  
 D. Air
31. Which one of the following is **not** an example of a resource found in Kenya?  
 A. Clouds  
 B. Soil  
 C. Forest  
 D. Minerals
32. Who is responsible of maintaining law and order in our country?  
 A. Governor  
 B. Member of County Assembly  
 C. Police  
 D. President
33. Naomi explained to her class the factors affecting population distribution in their county. Which one of the following was **wrong**?  
 A. Government policy  
 B. Age of the people  
 C. Farming activities  
 D. Climate
34. Grade Five learners discussed some elements of a map. Which one did they **not** mention?  
 A. Key  
 B. Frame  
 C. Scale  
 D. Railway
35. Sammy was asked to match some communities with their language group. Which one was **correctly** matched?
- |    | Community | Language group     |
|----|-----------|--------------------|
| A. | Luo       | River-lake Nilotes |
| B. | Turkana   | Bantu              |
| C. | Gabra     | Cushites           |
| D. | Asians    | Pakistans          |
- Part A: CHRISTIAN RELIGIOUS EDUCATION**
36. Three of the following statements are **true** about the Bible **except**  
 A. it is used to rebuke demons  
 B. it teaches the truth  
 C. it is used to swear for wrong doing  
 D. it was written by people inspired by the Holy Spirit
37. "We are wonderfully and fearfully made". These words are found in the book of  
 A. Psalms  
 B. Proverbs  
 C. John  
 D. Luke
38. Mukhebi went to visit his grandmother during the school holiday. How **best** could he spend his leisure time?  
 A. Playing with his cousins  
 B. Wrestling with his juniors  
 C. Swimming in the nearby lake  
 D. Fetching water for his grandmother
39. Three of the following are members of the nuclear family **except**  
 A. mother  
 B. uncle  
 C. daughter  
 D. father
40. Who among the following was the father of Samson?  
 A. Manoah  
 B. Joseph  
 C. Japheth  
 D. Noah

41. What lesson do Christians learn from the healing of the ten lepers? They should be  
A. caring B. hardworking  
C. thankful D. obedient
42. The Old Testament has 39 books. Its last book is  
A. Revelation B. Genesis  
C. Matthew D. Malachi
43. God created the world in how many days?  
A. Seven B. Six  
C. Five D. Four
44. A man and his family were saved from floods by God. The man was  
A. Noah B. Elijah  
C. David D. Moses
45. Angel Gabriel visited Mary and told her she will have a baby by the power of  
A. angel B. prophets  
C. Holy Spirit D. Joseph
46. Jesus was baptised in the River  
A. Galilee B. Tigris  
C. Nile D. Jordan
47. Who betrayed Jesus?  
A. John B. Judas Iscariot  
C. Peter D. James
48. A good leader is someone who is  
A. kind B. jealous  
C. proud D. selfish
49. A person who believes in Jesus shows all the following **except**  
A. joy B. love  
C. pride D. obedience
50. Jesus was born in a place called  
A. Judea B. Jericho  
C. Bethlehem D. Nazareth

#### **Part B: ISLAMIC RELIGIOUS EDUCATION**

36. Saying Alhamdulillah shows  
A. anger B. greed  
C. patience D. gratitude
37. What should a Muslim do before touching the Quran?  
A. Sleep B. Eat  
C. Make Wudhu D. Wear shoes
38. Which surah teaches us about the oneness of Allah(S.W.T)?  
A. Kafirun B. Falaq  
C. Iklhas D. Nas
39. What is the meaning of the word "Islam"?  
A. Peace and submission to Allah(S.W.T)  
B. Fasting  
C. Prayer  
D. Trustfulness

40. Prophet Muhammad(S.A.W) worked as a  
A. carpenter  
B. shepherd  
C. farmer  
D. healing
41. How many daily prayers are compulsory for Muslims?  
A. Six  
B. Five  
C. Four  
D. Three
42. Which of the following shows respect to parents?  
A. Ignoring them  
B. Helping them  
C. Shouting at them  
D. Disobeying them
43. The Quran was revealed in which month?  
A. Muharram  
B. Shawwal  
C. Dhu'l-Hijjah  
D. Ramadhan
44. Which pillar of Islam teaches Muslims to believe in one God?  
A. Swalah  
B. Zakah  
C. Shahadah  
D. Saum
45. The angel of death is known as  
A. Jibril  
B. Malik  
C. Israfiil  
D. Izrail
46. The mother of prophet Muhammad is  
A. Khadijah  
B. Maryam  
C. Hajar  
D. Amina
47. Ramadhan is \_\_\_\_\_ in the Islamic calendar.  
A. 9  
B. 10  
C. 11  
D. 12
48. Who was the prophet that built the kaaba?  
A. Musa  
B. Ibrahim  
C. Nuh  
D. Adam
49. Surah Al-Falaq has \_\_\_\_\_ verses.  
A. 4 B. 6  
C. 5 D. 3
50. Which prophet was known for his patience?  
A. Ayub B. Isa  
C. Harun D. Adam