

**READ THESE INSTRUCTIONS CAREFULLY.**

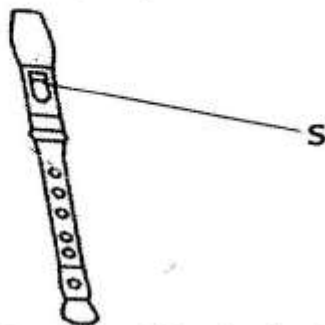
1. You have been given this question paper and a separate answer sheet. The question paper contains 50 questions.
2. Make sure that you have written on the answer sheet.


(i) Your name

(ii) Name of your school

(iii) KNEC Assessment number

**Study the following diagram and answer questions 1 and 2.**



1. What is the name of the device shown above?  
A. Marimba  
B. Adungu  
C. Descant recorder  
D. Shaker
2. Identify the name of the part labelled S.  
A. Mouth piece  
B. Head joint  
C. Window  
D. Thumb hole
3. The art of using brush to apply paint on a surface is known as  
A. colouring  
B. painting  
C. drawing  
D. brushing
4. Gifton was making a ball using the macrame technique. Which of the following materials did she use?  
A. Clay  
B. Small stone  
C. Grocery bags  
D. Sticks
5. Grade Five learners were making montage. Their teacher asked them to collect the items and materials they would use. Who among the following collected an item that was **not** used?  
A. **Ondimu** - old newspapers  
B. **Osinde** - glue  
C. **Gloria** - camera  
D. **Joseph** - scissors
6. Teacher Tom wanted to show the Grade Five learners how the gymnastic skills are executed. Identify the digital device he used.  
A. Laptop  
B. Smartwatch  
C. Smartphone  
D. Digital camera
7. Study the image below and identify the baton exchange skill being executed.  
  
A. Non-visual baton exchange  
B. Visual baton exchange  
C. Downsweep baton exchange  
D. Upsweep baton exchange
8. Grade 5 learners were improvising calligraphy pens. The learners collected the following items. Which one was **not** used?  
A. Sisal sticks  
B. Old pen tubes  
C. Ink  
D. Bamboo sticks
9. Sam mixed a red coloured ink and a blue coloured ink. Identify the observation that he made.  
A. There was more ink  
B. The resulting ink changed to purple  
C. The resulting ink changed to orange  
D. The red ink became darker
10. How are wind instruments played?  
A. By hitting  
B. By shaking  
C. By blowing  
D. By placing them in wind
11. Grade Five learners were preparing for a netball game. Which of the following activities was **not** done?  
A. Squats  
B. Stretching  
C. Jogging  
D. Sprints

12. The school choir composed a song in praise and to show loyalty to our country Kenya. This type of song is known as
- love song
  - gospel song
  - topical song
  - patriotic song

13. Which of the following is an element of photography?

- Lighting
- Camera
- Colour of subject
- Overlapping

14. Which of the following is the last line in the Kenya National Anthem?

- Let all with one accord
- Fill every heart with thanksgiving
- Let one and all arise
- And the glory of Kenya

15. The moments of silence in a rhythm are known as

- pitch
- dynamics
- tempo
- rests

16. Study the following Kodally hand sign



Identify the solfa syllable that matches with the hand sign above.

- do
- re
- mi
- fa

17. Which of the following solfa syllables has the highest pitch?

- Mi
- Fa
- Do
- Re

18. Isikuti is a folk song performed by one of the following communities in Kenya. Which one?

- Agikuyu
- Abagusii
- Kamba
- Luhya


19. Grade Five learners were learning the dye and tie fabric decoration technique. They collected the following items. Identify one that was **not** used.

- |                  |             |
|------------------|-------------|
| A. Cotton fabric | B. Pigment  |
| C. Water         | D. Palettes |

20. Grade Five learners visited a swimming pool facility. Their teacher told them to follow the swimming safety precautions. Which among the following is **not** a safety precaution that they followed?

- Warm-up before starting
- Do not swim when feeling sick
- Ensure safe entry
- Push others into the pool when they are scared

21. The following drawing was made by a Grade Five learner.



Identify the drawing technique that was applied to create texture above.

- Shading
- Smudging
- Cross-hatching
- Painting

22. A chemical that is used in the tie and dye technique to prevent the shading of colour is known as

- dye
- fixative
- salt
- dye bath


23. Identify the finger that is used to cover the back hole when playing the descant recorder.

- Right hand thumb finger
- Left hand middle finger
- Right hand index finger
- Left hand thumb finger

24. The following are sources of soil used in the pottery technique. Which one is **not**?



- A long the coast
- Near river banks
- In swampy areas
- On ant hills

25. Identify the following musical instrument.



- Chivoti
- Bung'o
- Muturiru
- Nzumari



26. Kinuthia cut pictures of balls from newspapers and used glue to stick them on a surface to create a pictorial composition. This picture making technique is known as
- mosaic
  - photography
  - montage
  - creative composition
27. Grade Five learners were improvising crayons. They were asked to collect locally available materials for the activity. Who among the following collected an item that was not needed?
- Badaso** - coloured chalk
  - Komora** - charcoal
  - Jillo** - white chalk
  - Buya** - coloured candle wax
28. Which of the following items is **not** used in the crayon-etching technique?
- Wax crayons
  - Black ink
  - Toothpick
  - Paint brush
29. The player who play together in a team of football are known as
- opponents
  - teammates
  - referees
  - audience
30. Identify the name of the following music symbol.
- 
- Crotchet
  - Pair of quavers
  - Minim
  - Note value
31. How many players make a team in a game of netball?
- 7
  - 6
  - 11
  - 14
32. Which of the following is a **not** a secondary colour?
- Orange
  - Purple
  - Green
  - Yellow
33. During a crayon-etching activity, the teacher asked the Grade 5 learners to avoid working under the sun. Why?
- So as the sun would not completely dry the artworks
  - So as they would not sweat a lot
  - To avoid melting the wax crayons
  - To avoid making dull artworks
34. Grade Five learners were listening to a song and writing down the rhythms they heard in their music books. Identify the skill they were practising.
- Listening to music
  - Checking strong and weak beats
  - Audio identification of rhythms
  - Oral identification of rhythms
35. Which of the following colours is the first one from the top on the Kenyan flag?
- Red
  - White
  - Green
  - Black
36. During a football game, Susan, a Grade Five learner was seen hitting the ball as shown below.
- 
- Identify the football kicking skill she was executing.
- Instep kick
  - Outside of the foot kick
  - Dribbling
  - Step trap
37. During a painting activity, Ben was seen executing the following activities;
- Wet the entire paint surface with clean water*
  - Load paint brush with paint mixed with water and applied it evenly across the wet surface using smooth strokes*
  - Let the paint spread naturally*
- Identify the painting technique he was practising
- Water painting technique
  - Graded wash technique
  - Flat wash technique
  - Clean wash technique

38. When creating a melody, Grade Five learners moved from one syllable to the adjacent one following regular intervals. This is a melody creating technique known as
- narrow leaps
  - stepwise motion
  - step-by-step motion
  - step leaps
39. Which of the following is a quality of a card?
- Card design
  - Colour
  - Calligraphy
  - Size
40. In a game of rounders, the player who hits the ball and runs round the pitch is known as
- base
  - runner
  - batter
  - fielder
41. The following is a drawing of a rounder's bat.



Identify the name of the part labelled W.

- Grip
  - Knob
  - Tip
  - Barrel
42. Grade Five teacher asked the learners to create rhythms and listen to each other's rhythms and review them. Which of the following shows the correct way of appreciating the rhythms?
- Clapping and tapping
  - Correcting their mistakes while they are performing
  - Listening silently to the tune and walking away
  - Deleting the recorded rhythms
43. Which of the following parts of a drum is used to make the sound produced louder?
- Head
  - Membrane
  - Base
  - Resonator
44. The diagram that is used to indicate the relationships among colours is known as
- drawing
  - tonal variation
  - colour wheel
  - hue

45. Which of the following is a material used to improvise relay batons?
- Piece of metal
  - Bamboo stick
  - Piece of rope
  - Rounders bat
46. Identify the name of the following items used in football.



- Papier mache
  - Marking cones
  - Football markers
  - Training cones
47. The movable items and objects used in a folk dance to enhance the performance are known as
- costumes
  - instruments
  - props
  - puppets
48. The technique of fabric decoration that involves cutting smaller pieces of fabric and sewing them onto a fabric of a different colour is known as
- sewing
  - patching
  - pasting
  - applique
49. The techniques applied when entering the swimming pool during swimming are known as
- water games
  - water entry techniques
  - feet first entry
  - swimming
50. The technique applied when making the rounders baton is known as
- weaving
  - braiding
  - carving
  - casting