

**READ THESE INSTRUCTIONS CAREFULLY**

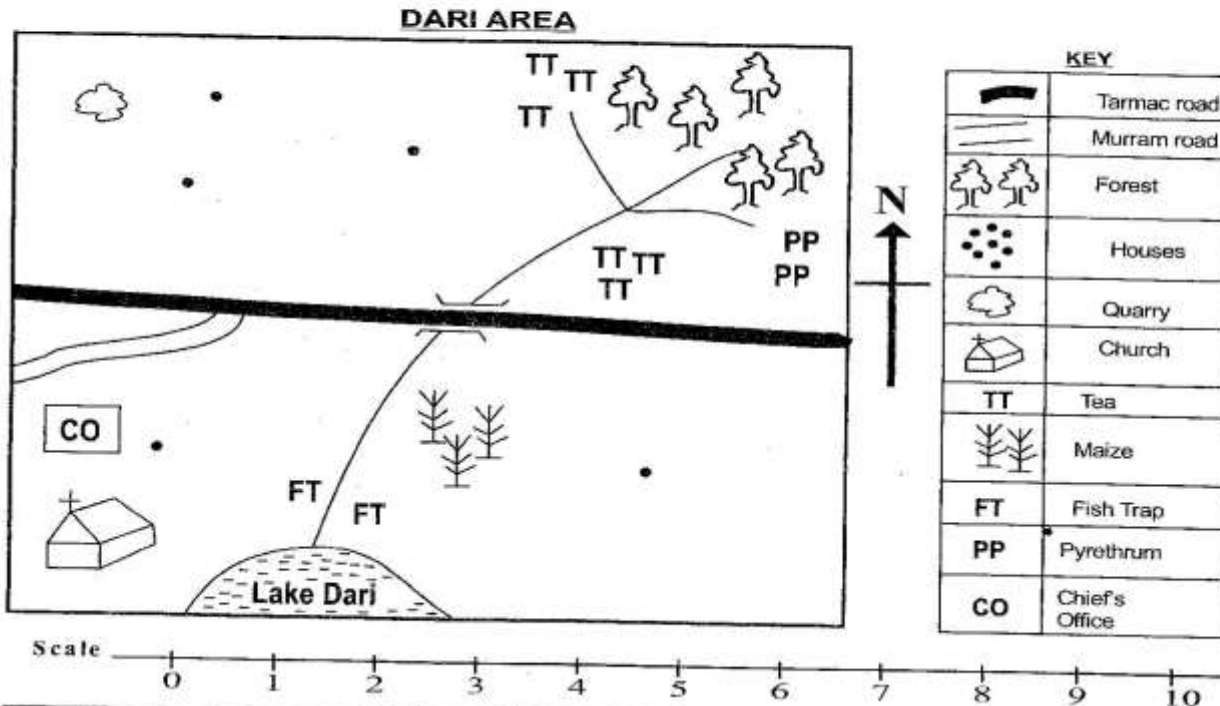
1. You have been given this question paper and a separate answer sheet. The question paper contains **50** questions.
2. Make sure that you have written on the answer sheet.

(i) Your name

(ii) Name of your school

(iii) KNEC Assessment Number

**Study the map of Dari Area below and then answer questions 1 to 7**



1. The people of Dari area are likely to be
  - A. Pagans
  - B. Muslims
  - C. Hindus
  - D. Christians
2. Identify the settlement pattern formed in Dari area,
  - A. Sparse
  - B. Dense
  - C. Nucleated
  - D. Linear
3. What is the direction of the forest from the lake?
  - A. South West
  - B. South East
  - C. North East
  - D. North West
4. The **main** means of transport in Dari area is
  - A. water
  - B. road
  - C. air
  - D. railway

5. Name the **main** cash crop grown in Dari area.

- A. Maize
- B. Pyrethrum
- C. Coffee
- D. Tea

6. Dari area is **likely** to be headed by a

- A. chief
- B. governor
- C. Member of Parliament
- D. president

7. Which one of the following activities takes place around the lake?

- A. Mining
- B. Trading
- C. Transport
- D. Fishing

8. Grade Four learners of Ufanisi primary school on Monday afternoon wore light clothes. The weather was likely to be

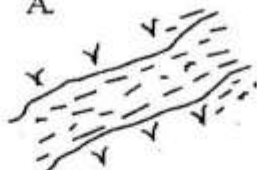
- A. cold
- B. rainy
- C. hot
- D. stormy

9. Our country Kenya is divided into how many counties?

- A. 57
- B. 47
- C. 27
- D. 37

10. Kamau wants to practise fishing. Which of these physical features would be the best for this activity?

A.




B.



C.



D.



11. People in the community need to work together and in unity so as to

- A. be playful
- B. to kill thieves
- C. enjoy themselves
- D. help each other solve challenges

12. Driving a car can become very difficult when the weather is

- A. sunny
- B. calm
- C. rainy
- D. windy

13. The diagram below is a product of traditional industry.



It is called

- A. hut
- B. pot
- C. umbrella
- D. portfolio

14. The Kenyan flag has got how many colours?

- A. Four
- B. Six
- C. Three
- D. Five

15. Grade Four learners visited the historic buildings in their county. Historic buildings in our county should be

- A. destroyed
- B. burned
- C. closed
- D. conserved

16. The **best** soil for growing crops is

- A. clay
- B. silt
- C. loamy
- D. sandy

17. Peoples' way of life is their

- A. family
- B. culture
- C. tradition
- D. custom

18. Many sub-locations make a

- A. county
- B. location
- C. sub-county
- D. village

19. When it rains for a long time, we are **likely** to experience

- A. floods
- B. drought
- C. wind
- D. famine

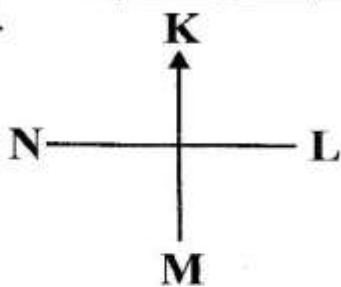
20. Which of the following is **not** a way of caring for soil?

- A. Mulching
- B. Planting trees
- C. Manuring
- D. Burning

21. The vegetation that grows on its own is called

- A. planted
- B. forest
- C. natural
- D. scrub

24.



22. Points K, L, M and N are called  
A. compass  
B. cardinal points  
C. direction  
D. key
23. The direction between L and M is  
A. South East  
B. North East  
C. South West  
D. North West
24. The instrument above is **mostly** used by  
A. learners  
B. parents  
C. doctors  
D. pilots
25. Nelly was going home after school. She saw a stranger following her. Which of the following places should she go?  
A. Nearby forest  
B. In a dark place  
C. Nearby police station  
D. Nearby bush
26. Grade Four learners were learning about the cultural events. Cultural events are important because they bring people  
A. disunity  
B. together  
C. shame  
D. conflict
27. Tendo came across the symbol shown below.



The weather represented is

- A. sunny  
B. rainy  
C. calm  
D. cloudy
28. When people depend on each other, they become  
A. close  
B. enemies  
C. strangers  
D. angry

29. Which people depend on each other for various reasons, is called

- A. culture  
B. tradition  
C. interdependence  
D. marriage
30. Marion and her friends were modelling shapes using clay. The soil was  
A. sand  
B. silt  
C. loam  
D. clay
31. Grade four learners were given presents by their teacher. The learners could express their feelings on their  
A. legs  
B. face  
C. neck  
D. elbow
32. Forests are important in our country because they are a source of  
A. timber  
B. water  
C. fire  
D. meat
33. Jael wanted to carry potatoes to the market. Which animal did she use?  
A. Turkey  
B. Rabbit  
C. Donkey  
D. Sheep
34. Three of the following are nuclear members of a family **except**  
A. daughter  
B. mother  
C. son  
D. uncle
35. The sun sets in the  
A. East  
B. West  
C. South  
D. North

## **SECTION B: RELIGIOUS EDUCATION**

### **Part A: CHRISTIAN RELIGIOUS EDUCATION**

36. Jesus set a good example of a good leader. To be a good leader, one must be  
A. honest  
B. cruel  
C. harsh  
D. selfish
37. The birth of Jesus was made known to many through  
A. a dream  
B. an angel  
C. a prophet  
D. a priest

38. The first people to be created by God were  
A. Hannah and Elkanah  
B. Mary and Joseph  
C. Adam and Eve  
D. Zechariah and Elizabeth
39. The Holy book used by Christians is called  
A. Quran  
B. kamusi  
C. dictionary  
D. Bible
40. The death of Jesus showed God's \_\_\_\_\_ for mankind.  
A. love  
B. hatred  
C. jealousy  
D. shame
41. When do Christians celebrate the birth of Jesus Christ?  
A. Easter  
B. Christmas  
C. Madaraka Day  
D. Jamhuri Day
42. We should \_\_\_\_\_ our enemies.  
A. beat  
B. hate  
C. ignore  
D. love
43. Christians worship in  
A. temple  
B. shrine  
C. church  
D. mosque
44. The first book in the New Testament is known as  
A. Genesis  
B. Matthew  
C. Luke  
D. Leviticus
45. Solomon the king asked God to give him  
A. wisdom  
B. money  
C. fees  
D. children
46. How many books are in the New Testament?  
A. 66  
B. 39  
C. 48  
D. 27
47. Jesus changed water into wine at  
A. Galilee  
B. Nain  
C. Cana  
D. Jericho
48. If we want to do well in our assessment, we should be  
A. disobedient  
B. hardworking  
C. lazy  
D. rebellious
49. During the flood, God told Noah to build  
A. an ark  
B. a ship  
C. a storey building  
D. a house
50. How many commandments were given to Moses?  
A. 12  
B. 18  
C. 8  
D. 10

## Part B: ISLAMIC RELIGIOUS EDUCATION

36. Who is the last prophet in Islam?  
A. Prophet Musa  
B. Prophet Issa  
C. Prophet Ibrahim  
D. Prophet Muhammad
37. The book revealed to prophet Muhammad (S.A.W) is called  
A. Bible  
B. Torat  
C. Quran  
D. Zabur
38. Which direction do Muslims face when praying?  
A. West  
B. East  
C. Makkah  
D. Jerusalem
39. Which angel brought messages to Allah(S.W.T)?  
A. Jibril  
B. Israfil  
C. Mikail  
D. Malik
40. Fasting during the month of Ramadhan teaches  
A. angry  
B. lazy  
C. patient  
D. selfish
41. How many pillars of Islam are there in Islam?  
A. Four  
B. Five  
C. Six  
D. Seven
42. Saying the truth always shows  
A. Taqwa  
B. honesty  
C. greed  
D. laziness
43. Prophet Nuh was saved from the flood by  
A. fire  
B. horse  
C. cave  
D. boat
44. Muslims give zakat to  
A. travel abroad  
B. help the poor  
C. buy clothes  
D. build schools
45. Muslims break their fast with  
A. water only  
B. rice  
C. dates and water  
D. tea and bread
46. What do we say after sneezing?  
A. Masha Allah  
B. Alhamdulillah  
C. Bismillah  
D. Subna Allah
47. Who is the father of prophet Ismail?  
A. Prophet Adam  
B. Prophet Issa  
C. Prophet Muhammad  
D. Prophet Ibrahim
48. Nasr means  
A. help  
B. dawn  
C. mankind  
D. jinn
49. The attributes of Allah (S.W.T) that means He is the most merciful is  
A. Ar-Rahiim  
B. Al-Wahab  
C. Al-Wadud  
D. Al-Qazaq
50. Al-Salaam means  
A. king  
B. all seeing  
C. all hearing  
D. source of peace