

READ THESE INSTRUCTIONS CAREFULLY

1. You have been given this question paper and a separate answer sheet. The question paper contains 50 questions.
2. Make sure that you have written on the answer sheet.

(i) Your name

(ii) Name of your school

(iii) KNEC Assessment Number

1. Grade Four learners were asked to bring the following locally available materials;

i) Bottle tops

ii) Y-shaped stick

ii) Wire

Which percussion instrument did they want to make?

- A. Kayamba B. Drum
C. Gourds D. Shakers
2. Benson mixed blue and red colours in equal proportions. The final colour he got was
A. purple B. orange
C. green D. yellow
 3. Below is a diagram of a music costume



Where is the costume worn? Round the

- A. waist B. neck
C. wrist D. ankle
4. Three of the following materials were used by Joan to draw a picture. Which one was not needed?
A. Rubber B. Sand
C. Paper D. Pencil

5. What happens when you add a black colour into a container with white colour?

A. White colour becomes lighter
B. The mixture turns black
C. The mixture turns grey
D. There is no change of colour


6. The following materials can be used to improvise a ball **except**

A. sawdust B. old mattress
C. papers D. threads



7. Which one of the following is not a percussion instrument?

A. Drum B. Rattles
C. Gourd D. Nyatiti

8. Identify the netball skill below used by Hellen during a class demonstration.



A. Shooting B. Passing
C. Defending D. Catching

9. How many stanzas are there in the Kenya National Anthem?
A. Four B. Two
C. Three D. Five
10. Which part of the body touches the ball when performing a chest pass in netball?
A. Hands B. Chest
C. Legs D. Head
11. The song "Hush little baby" is an example of
A. sacred song B. topical song
C. patriotic song D. lullaby song
12. The French rhythm name of the following musical note is
- 
- A. ta-te B. taa
C. taa-aa D. te-fe
13. Using lines, dots and shades to make pictures is known as
A. drawing B. crayon etching
C. painting D. modelling
14. The following are secondary colours **except**
A. purple B. orange
C. blue D. green
15. A complete netball team is made up of how many players?
A. Nine B. Five
C. Six D. Seven
16. To create a rhythm, we can do all the following **except**
A. tapping B. slapping
C. clapping D. stamping
17. In crayon etching, scratching is done using a
A. long tool B. blunt tool
C. thin tool D. sharp tool
18. A kayamba is played by
A. shaking B. hitting
C. plucking D. blowing
19. The line, "Kenya istahili heshima" is found in which stanza of the Kenya National Anthem?
A. Second B. First
C. Third D. Fourth
20. Which solfa syllable is shown by the hand sign below?
- 
- A. m B. r
C. d D. s
21. The following animals provide us with the skin needed in leather work. Which one does **not**?
A. Cow B. Dog
C. Sheep D. Goat
22. A well-tuned drum has the required
A. pitch B. sound
C. speed D. volume
23. The most commonly used body part when playing volleyball is
A. head B. legs
C. hands D. back
24. When singing the Kenya National Anthem, we stand at attention to show
A. peace B. love
C. unity D. respect
25. A good melody starts and ends on solfa syllable
A. r B. d
C. m D. s

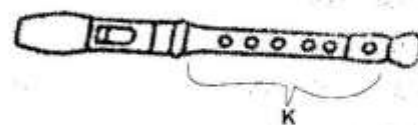
Grade 4 Creative Arts & Sports

26. Grade Four learners were asked by their Creative Arts teacher to name the soil used in modelling. The **correct** answer they gave was
- A. clay B. sand
C. loam D. manure
27. The following are equipment used when playing the game of rounders. Which one is **not**?
- A. Bats B. Hoop
C. Balls D. Post markers
28. Samuel burnt green sticks to make a material he needed for drawing. What did he make?
- A. Pencil B. Chalk
C. Charcoal sticks D. Ash
29. Choose the **correct** arrangement of colours of the Kenyan flag from top to bottom.
- A. White → black → red → white → green
B. Green → white → red → white → black
C. Red → white → green → white → black
D. Black → white → red → white → green
30. To make any colour lighter, we add ____ colour.
- A. blue B. white
C. black D. yellow
31. Which one of the following devices **cannot** be used to take photographs?
- A. A desktop computer
B. A tablet
C. A camera
D. A smartphone
32. The following are short distance races in athletics events. Which one is **not**?
- A. 10000metres B. 200metres
C. 100metres D. 400metres

33. A trio is a music performance of how many voices?
- A. One B. Four
C. Two D. Three
34. Which one of the following is **not** a product of woodwork?
- A. Rack B. Bench
C. Bench D. Footwear
35. Angela wanted to apply paint on a surface. Which material did she use?
- A. Brush B. Marker pen
C. Palette D. Pencil
36. Identify the warm-up activity shown below.




- A. Rope skipping B. High knee
C. Forward roll D. Jogging in place
37. The following are non-melodic percussion instruments. Which one is **not**?
- A. Shakers B. Marimba
C. Drum D. Kayamba
38. The musical instrument shown below is a descant recorder.



- Identify the part labelled K.
- A. Head joint B. Mouth piece
C. Foot joint D. Middle joint

39. Grade Four learners drew the following pictures from observation.



What is the name of the drawing?

- A. Collage B. Montage
C. Mosaic D. Still life drawing
40. Emma wanted to stick picture cut-outs onto a surface. Which one of the following cheapest adhesive did she use?
A. Water B. Flour paste
C. Office glue D. Mud
41. Before diving into a swimming pool, one should check the _____ of the pool.
A. size B. colour
C. depth D. position
42. Dribbling the ball is common in the following ball games **except**
A. netball B. handball
C. football D. basketball
43. A netball team will win only through
A. hard work B. obedience
C. practise D. teamwork
44. Kenyan folk songs are **not** sung during
A. initiation B. famine
C. marriage D. work
45. A piece of music can be either fast or slow. This is known as
A. dynamics B. pitch
C. tempo D. rhythm

46. Which one of the following skills **does not** make use of hands?

A. Throwing B. Catching
C. Passing D. Kicking

47. To express love to one's country, which songs should we sing?

A. Patriotic songs
B. Topical songs
C. Action songs
D. Popular songs

48. Identify the gymnastic skill shown below.



A. Side roll
B. Crab balance
C. Head balance
D. Forward roll

49. After visiting the animal orphanage, Mwikali was asked by her Creative Arts teacher to draw a warthog. She drew the warthog from

A. imagination
B. observation
C. memory
D. guesswork

50. Chebet ran 10000 metres and finished in the second position. Which medal was she awarded?

A. Bronze medal
B. Platinum medal
C. Gold medal
D. Silver medal