

Name _____ Date: _____

Learner's Number (KNEC ASSESSMENT NO.) _____

Grade _____ Gender: Boy ☐ Girl ☐

School Name _____ School Code

Answer all the questions in the space provided

FOR OFFICIAL USE ONLY

The grid below is to be filled by the teacher after marking the learner's work

Assessment Rubric

Learning areas	Exceeds expectation 4	Meet expectation 3	Approaching expectation 2	Below expectation 1
Environmental (30 marks)	30	24 - 29	8 - 23	0 - 7
Creative (10 marks)	10	8 - 9	3 - 7	0 - 2
R.E. 10 marks	10	8 - 9	3 - 7	0 - 2

ENVIRONMENTAL ACTIVITIES.

Draw and colour two personal items

1.	2.

3. Taking good care of our bodies is _____ hygiene.
(body, personal)
4. Pumice stone is used for _____
(combing hair, cleaning the feet)
5. Food like _____ and _____ are not good for my teeth. (milk, sweets, mango, biscuits)

6. _____ is a common accident at home. **(Sick, Cook, Cut)**

7. The items we use to cook and serve food are called _____.
(materials, furniture, utensils)

8. Food, clothes and shelter are _____.
(basic needs, wants, personal items)

Name two ways of keeping our school environment clean

9. _____

10. _____

11. We raise our flag on _____ and _____

12. The National Anthem has two verses. _____ **(True, False)**

Write two child rights

13. _____

14. _____

Draw the foods we buy from the market

15. Carrots

16. Maize

Name the different weather symbols

17.



18.



19.



(Cloudy, Rainy, Windy)

20. When it is hot we wear _____ clothes. **(heavy, light)**

Name the types of clothes we wear when the weather is cold.

21.



22.



23.



(Scarf, Mavin, Jacket)

3. We read surah Al-Nas _____ sleeping. (**after, before**)
4. I recite surah _____ in swalah. (**Fatiha, Ikhlas, Nas**)

Draw and colour the following Allah's creation.

5. Sun	6. Star

CREATIVE ACTIVITIES


Give two words that are used to describe texture.

1. _____
2. _____

Write two directions in which turning can be done.

3. _____
4. _____

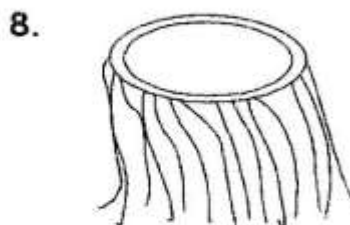

5. Mueni made the picture below by cutting small pieces of materials and pasting them onto a surface.



This picture is called a _____ (**collage, mosaic**)

6. A _____ makes a melodic sound. (**book, clock**)

Name the props used when performing singing games.



(**Sisal skirt, Shakers, Hula hoop**)

10. Which part of the body is mostly used when kicking? _____