

---

**KENYA NATIONAL EXAMINATION COUNCIL  
REVISION MOCK EXAMS 2016  
TOP NATIONAL SCHOOLS**

**KAPSABET BOYS HIGH SCHOOL  
GEOGRAPHY  
Paper 2**

**SCHOOLS NET KENYA**  
Osiligi House, Opposite KCB, Ground Floor  
Off Magadi Road, Ongata Rongai | Tel: 0711 88 22 27  
E-mail: [infosnkenya@gmail.com](mailto:infosnkenya@gmail.com) | Website: [www.schoolsnetkenya.co](http://www.schoolsnetkenya.co)

# KAPSABET BOYS HIGH SCHOOL TRIAL AND PRACTICE EXAM 2016

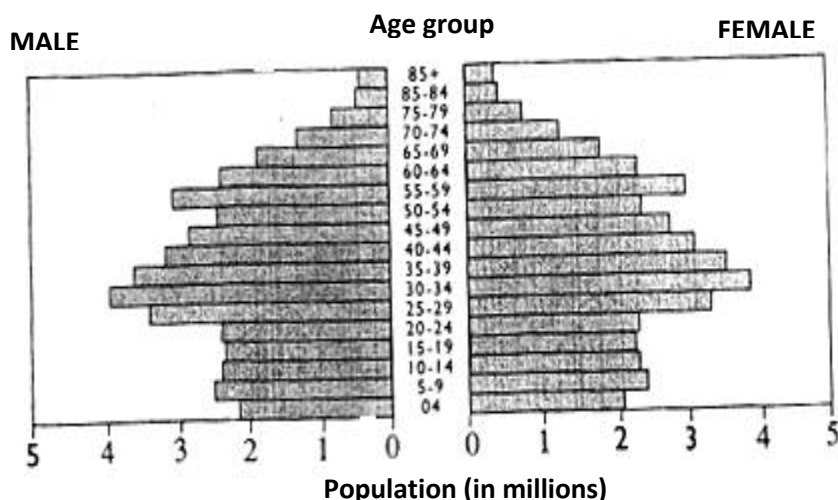
## Paper 2

### Section A

1. (a) Mention **three** measures taken by the East African countries to manage wildlife (3mks)  
 (a) A part from game parks and reserves, give **two** other tourist attraction sites in Kenya (2mks)
2. (a) What is market gardening? (1mk)  
 (b) State **four** factors that favour market gardening in Kenya. (4mks)
3. (a) Give **two** reasons for the decline in the use of letters as a mode of communication in Kenya. (2mks)  
 (b) Mention **three** benefits of road expansion in Kenya (3mks)
4. (a) List **two** factors hindering exploitation of natural forest in Kenya (2mks)  
 (b) Give **three** characteristics of planted forests (3mks)
5. (a) Give the difference between visible trade and invisible trade (2mks)  
 (b) State **three** benefits that Kenya will get from the renewal of East African cooperation. (3mks)

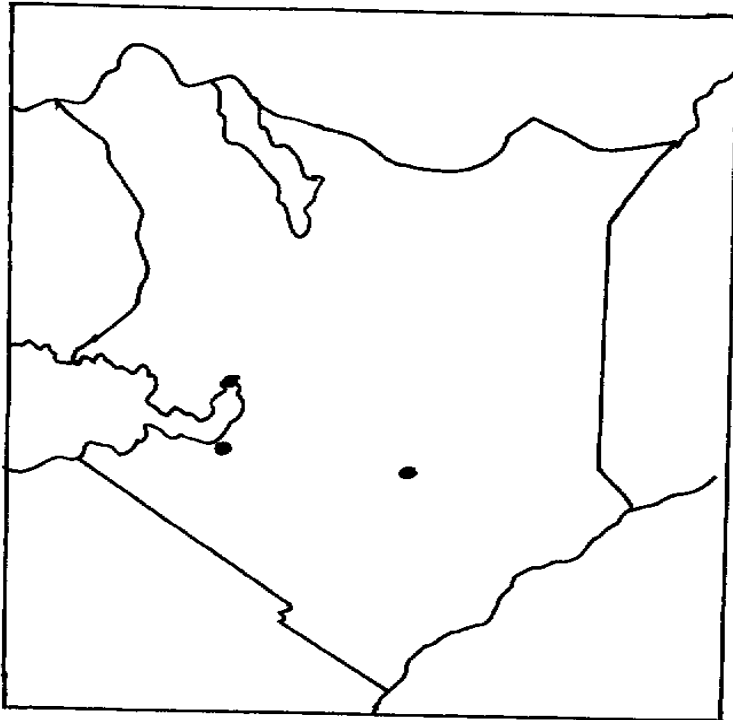
### SECTION B

6. Study the population pyramid below to answer question 6(a)



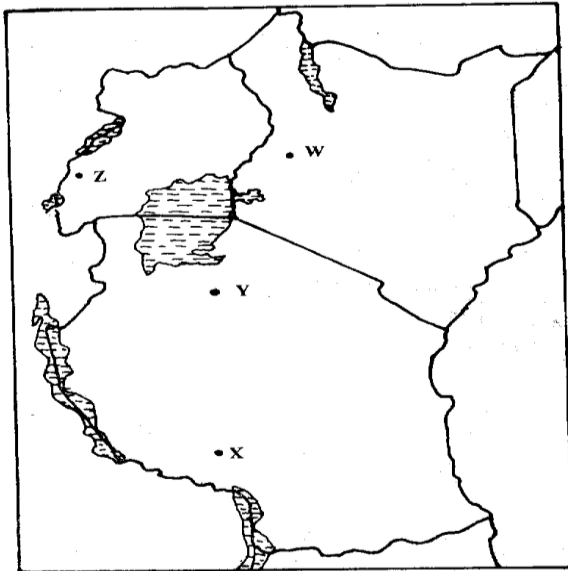
- (a)
  - (i) Identify **one** country that is represented by the pyramid above (1mk)
  - (ii) Give **three** characteristics of the population represented by the pyramid (3mks)
  - (iii) Give **three** disadvantages of population structure represented by the pyramid. (3mks)
- (b) Define the following terms
  - (i) Census (2mks)
  - (ii) Fertility (2mks)
- (c) Identify **three** types of internal migration (3mks)
- (d) Explain how the following influences population increase in Kenya.
  - (i) Early marriage
  - (ii) Improved medical care
  - (iii) Cultural beliefs (6mks)

7. (a) State **three** physical conditions that favour large scale sugarcane farming in Kenya. (3mks)
- (b) Describe the cultivation of sugarcane in the lake region of Kenya from the preparation of land (6mks)
- (c) Explain **five** problems facing sugarcane farming in Kenya. (10mks)
- (d) Your class visited a sugar factory for a field study on sugar processing.
- (i) Outline **four** stages of sugar processing that the class may have observed.(4mks)
- (ii) Name **two** by-products of sugar that the class may have identified during the study. (2mks)
8. (a) (i) Differentiate between fishing and fisheries (2mks)
- (ii) What are pelagic fish? (1mk)
- (iii) Give **two** examples of pelagic fish (2mks)
- (b) Fish farming stations`



- (i) Name the fish farming stations/points marked **A, B** and **C** (3mks)
- (ii) State **three** characteristics of fish farming in Kenya (3mks)
- (iii) Explain **three** ways through which fish farming contributes to the economy of Kenya. (6mks)
- (c) (i) Describe trawling method of fishing (4mks)
- (ii) Compare fishing in Kenya and Japan under the following sub-headings
- (i) Marketing (2mks)
- (ii) Nature of the coastline (2mks)
9. (a) (i) What is industrialization? (2mks)
- (ii) State **four** benefits of decentralizing industries in Kenya (4mks)
- (iii) Give **four** reasons why Kenya should become an industrialized country (4mks)
- (b) State **five** reasons why the development of the Jua kali industry is encouraged in Kenya (5mks)
- (c) Explain **five** factors which influenced the location of Iron and Steel industry in the Ruhr Region of Germany. (10mks)

10. Use the map of East Africa to answer question (a)(i).



- (a) (i) Identify the materials mined in the areas marked **W**, **X**, **Y** and **Z**. (4mks)  
(ii) Name **two** sea ports through which some of the minerals mined in East Africa are exported (2mks)
- (b) (i) State **three** ways in which mining derelicts can be reclaimed (3mks)  
(ii) Explain **four** ways in which diamond mining contributes in the economy of South Africa (8mks)
- (c) (i) What is energy crisis? (1mk)  
(ii) State three causes of energy crisis in Kenya? (3mks)  
a. (i) State **two** problems that affect hydro-electric power production along river Tana. (2mks)  
(ii) Give **two** factors which hinder the expansion of Geothermal power production in Kenya. (2mks)