



# RISING STAR EXAMINATION SERIES STANDARD SIX

YEAR 2021

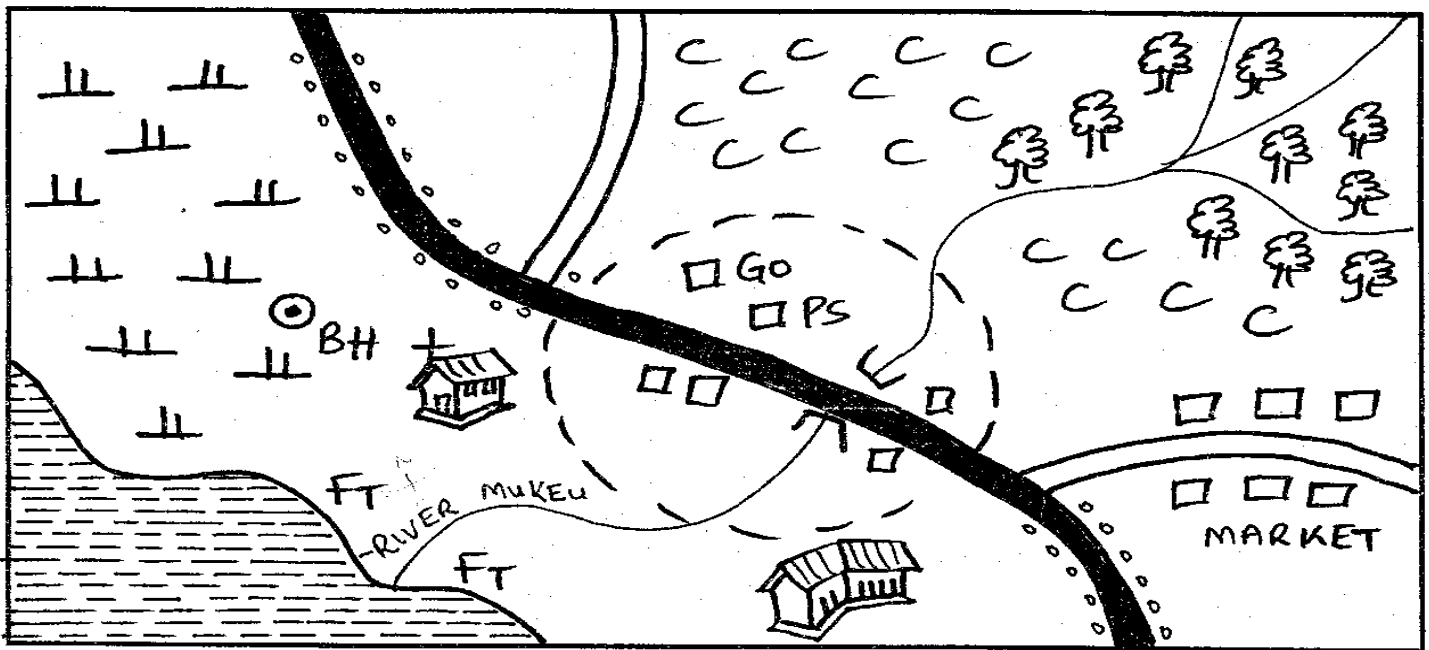
## SOCIAL STUDIES & C.R.E

### HOW TO USE THE ANSWER SHEET

- Use only an ordinary pencil.
- Make sure that you have written on the answer sheet:-  
(i) Your Name                      (ii) Name of your School
- For each question, show the correct answer by drawing a line in the brackets in which the letter you have chosen is written.

Time: 2 Hrs 15 Mins

### KASI AREA




SCALE: 0cm 1 2 3 4 5 6 7 8 9 10Km

KEY		
Tarmac road	Church	Forest
Coffee	Borehole	Governor's office
Fish trap	Lake	Scrub
Police station	School	Town boundary
Settlement	River & bridge	Murrum road

Use the map of Kasi area to answer questions 1-7.

- River Mukeu flows from \_\_\_\_\_.  
A. North East                      B. South East  
C. South West                      D. North West
- Soko area is administered by:-  
A. chief                              B. senator  
C. governor                          D. D.C
- Which of the following economic activity is **NOT** carried out in Kasi area?  
A. Mining                            B. Fishing  
C. Farming                          D. Trading
- Which climatic condition is experienced in the Western side of Kasi area?  
A. Hot and wet                      B. Cool and wet  
C. Cool and dry                      D. Hot and dry
- The settlement pattern of Kasi area can best be described as \_\_\_\_\_ settlement.  
A. sparse                              B. dense  
C. linear                                D. clustered
- Most people living in Kasi area are:-  
A. Pagans                            B. Christians  
C. Islams                              D. Traditionalists
- Which cash crop is grown in Kasi area?  
A. Forest                              B. Tea  
C. Maize                                D. Coffee
- The following are countries of Eastern Africa apart from:-  
A. Egypt                              B. Burundi  
C. Rwanda                            D. Eritrea
- The **MAIN** line of longitude marked  $0^{\circ}$  is called:-  
A. Equator                            B. Green wich meridian  
C. Artic circle                        D. Tropic of Cancer
- Which one of the following factors **DOES NOT** influence climate?  
A. Relief                                B. Winds  
C. Latitudes                          D. Longitudes
- The diagram below shows the formation of a \_\_\_\_\_



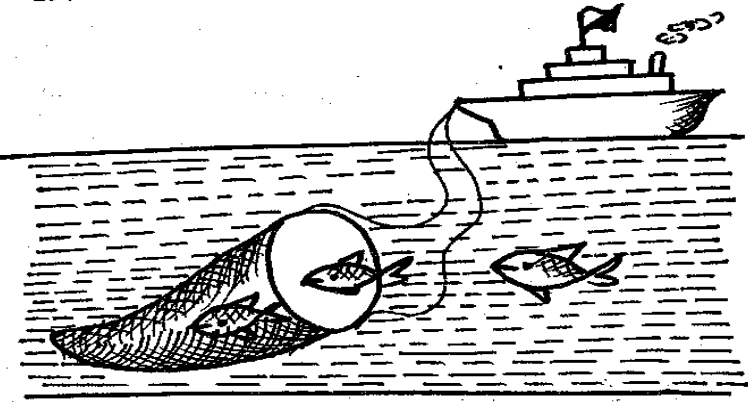
- |                    |                          |
|--------------------|--------------------------|
| A. sea breeze      | B. convectional rainfall |
| C. relief rainfall | D. land breeze           |

- Much rain in Eastern Africa is caused by:-  
A. N.E monsoon winds  
B. S.W monsoon winds  
C. Harmattan winds  
D. South East monsoon winds
- Below are some communities in Eastern Africa. Which one of them is **NOT** River-Lake Nilote?  
A. Datoga  
B. Luo  
C. Alur  
D. Shilluk
- The following were reasons that led to the migration of the Bantu. Which one was **NOT**?  
A. Avoid attacks from their neighbours  
B. Search of fertile land  
C. Search of water and pasture  
D. Over population
- Which of the following was the original homeland of the Luo?  
A. Congo forest  
B. Bahr-el-Ghazal  
C. Saudi Arabia  
D. Horn of Africa
- Which one of the following is **NOT** a responsibility of children?  
A. Serving the community using their talents and abilities  
B. Going to school  
C. Assisting parents at home  
D. Providing protection and security for the family
- Which of the following is **NOT** an importance of the cultural artefacts?  
A. Help us understand the history of a community  
B. Show us how tools were developed  
C. Decorating the museum  
D. Telling us about the culture of our ancestors
- The following are conditions necessary for the growth of a certain crop in Eastern Africa:

- Deep, fertile, well drained volcanic soils
- Cool temperatures
- High altitude of between 1520 and 2280m
- High rainfall of at least 1250mm to 1650mm per year

- The above conditions are suitable for the growth of:-
- tea
  - sisal
  - wheat
  - sugarcane

19.



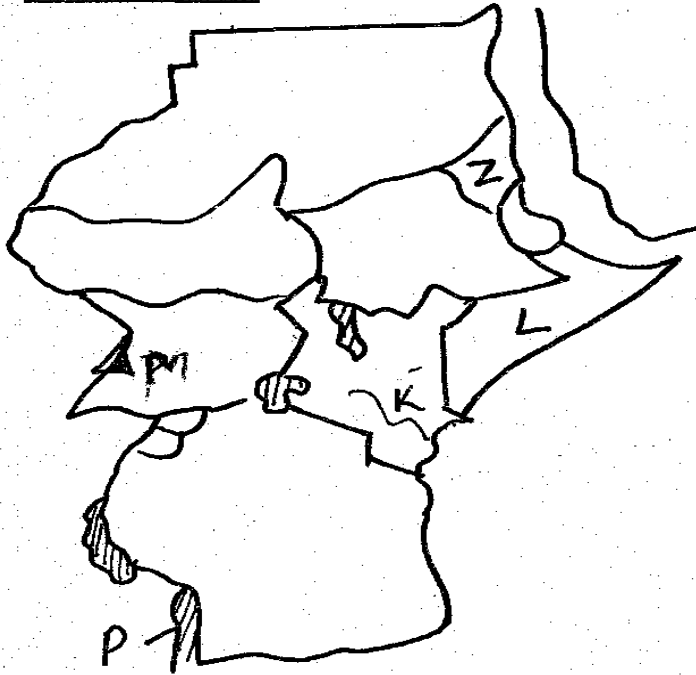
The above method of fishing is called:-

- A. trawling
- B. long lining
- C. net drifting
- D. purse seining

20. Which one of the following is **NOT** an inland fish?

- A. Tilapia
- B. Nile Perch
- C. Tuna
- D. Trout

Use the map of Eastern Africa below to answer questions 21-25.



21. The country marked **Z** is called:-

- A. Eritrea
- B. Djibouti
- C. Rwanda
- D. Burundi

22. The river marked **K** is:-

- A. Rufiji
- B. Rungwa
- C. Tana
- D. Ruvuma

23. The physical feature marked **M** was formed through a process known as:-

- A. downwarping
- B. volcanicity
- C. faulting
- D. deposition

24. The lake marked **P** is called:-

- A. L. Kivu
- B. L. Malawi
- C. L. Tana
- C. L. Kyoga

25. The central city of the country marked **L** is

- A. Dodoma
- B. Mogadishu
- C. Khartoum
- D. Juba

26. Below is the information about a religion in Eastern Africa:

- (i) It receives high rainfall of over 1500mm per year
- (ii) Receives convectional rainfall
- (iii) It has high humidity
- (iv) Experiences high temperatures throughout the year
- (v) No dry season

The climate condition experienced in the above region is:-

- A. Tropical climate
- B. Desert climate
- C. Equatorial climate
- D. Sub-tropical climate

27. The **MAIN** tourist attraction in Eastern Africa is:-

- A. wildlife
- B. historical sites
- C. sandy beaches
- D. cultural heritage

28. The major road that starts from Cape Town in South Africa to Cairo in Egypt is called:-

- A. Trans African Highway
- B. Trans Sahara Highway
- C. Great African Highway
- D. The Great North Road

29. Which one of the following is **NOT** a manufacturing industry?

- A. Textile industry
- B. Tobacco industry
- C. Paper industry
- D. Glass industry

30. The best method of transport for transporting perishable goods is:-

- A. road
- B. water
- C. air
- D. railway

31. Beef farming is practiced in large farms called:-

- A. plantations
- B. ranches
- C. farms
- D. paddocks


32. Which one of the following is **NOT** a benefit of trade?

- A. Creation of employment
- B. Production of similar goods
- C. Exchange of information
- D. Promoting cooperation

33. The **BEST** measure that can be used to reduce road accidents in Eastern Africa is:-  
 A. using correct road signs  
 B. constructing speed bumps  
 C. educating road users  
 D. enforcing traffic rules

34. Which one of the following is **NOT** a problem facing urban centres in Eastern Africa?  
 A. Employment  
 B. Growth of slums  
 C. Traffic jams  
 D. Street families

35.



The above weather instrument is called:-

- A. windvane  
 B. barometer  
 C. windsock  
 D. anemometer
36. The instrument above is used to measure:-  
 A. direction of wind  
 B. strength of wind  
 C. air pressure  
 D. speed of wind
37. The **MAIN** type of vegetation found in the coastal areas is:-  
 A. savannah vegetation  
 B. mangrove vegetation  
 C. swamp vegetation  
 D. miombo woodland
38. The following are examples of block mountains in Eastern Africa. Which one is **NOT**?  
 A. Mt. Ruwenzori  
 B. Mt. Pare  
 C. Mt. Meru  
 D. Mt. Usambara
39. Lokitipi, Serengeti, Bilesha and Awara are examples of:-  
 A. plains  
 B. plateaus  
 C. valleys  
 D. highlands
40. The following is a swampy lake in Eastern Africa. Which one is it?  
 A. L. Kivu  
 B. L. Malawi  
 C. L. Tanganyika  
 D. L. Kyoga
41. The council of elders among the Ameru was known as:-  
 A. Njuri Impeere  
 B. Njuri Ncheke  
 C. Ntuiko  
 D. Kiruka

42. I was a Kamba leader, prophet and medicineman. I took part in long distance trade. Who am I?

A. Mekatilili  
 B. Koitalel Arap Samoei  
 C. Masaku  
 D. Lenana

43. The following are human rights **EXCEPT**:-

A. right to life  
 B. right to do anything  
 C. right to food  
 D. right to education

44. \_\_\_\_\_ is love for one's country.

A. Citizenship  
 B. Socialism  
 C. Democracy  
 D. Patriotism

45. The following are factors that undermine peace. Which one is **NOT**?

A. Democracy  
 B. Unemployment  
 C. Corruption  
 D. Conflicts

46. Who among the following leaders did not resist British colonial rule?

A. Koitalel Arap Samoei  
 B. Mekatilili wa Menza  
 C. Nabongo Mumia  
 D. Kabaka Mwanga

47. Which one of the following is **NOT** a responsibility of a Kenyan citizen?

A. Paying taxes  
 B. Punishing wrong doers  
 C. Voting  
 D. Obeying the law

48. Which of the following is a way in which a person can become a Kenyan citizen?

A. By association  
 B. By voting  
 C. By naturalization  
 D. By registration

49. The body incharge of elections in Kenya is:-

A. IEBC  
 B. ECK  
 C. Judiciary  
 D. IIEBC

50. General elections are held after every \_\_\_\_\_ years.

A. 10  
 B. 3  
 C. 5  
 D. 7

51. Which one of the following is **NOT** a form of child abuse?

A. Forced marriage  
 B. Child labour  
 C. Female circumcision  
 D. Disciplining

52. The powerful Nandi leader who fearlessly fought the British during the colonial period was:-  
 A. Nabongo Mumia  
 B. Koitalel Arap Samoei  
 C. Sakawa  
 D. Mekatilili wa Menza
53. \_\_\_\_\_ is the arm of government that makes and implements government policies.  
 A. Legislature  
 B. Judiciary  
 C. Parliament  
 D. Executive
54. The fourth president of Kenya is:-  
 A. Mwai Kibaki  
 B. Jomo Kenyatta  
 C. Uhuru Kenyatta  
 D. Daniel Arap Moi
55. Which one of the following was **NOT** a way in which communities interacted in the past?  
 A. Birthdays  
 B. Trade  
 C. Games and sports  
 D. Marriage
56. The traditional method of farming in which land was cultivated for a period of time, then left to regain fertility is:-  
 A. shifting cultivation  
 B. slash and burn  
 C. rotational burning  
 D. bush fallowing
57. Which of the following problems **DOES NOT** face pastoralists?  
 A. Cross breeding  
 B. Drought  
 C. Animal diseases  
 D. Lack of market
58. Industries affects the environment negatively in three of the following ways. Which one is **NOT**?  
 A. Development  
 B. Pollution  
 C. Destruction of land  
 D. Destruction of forests
59. Kenya achieved her independence in the year \_\_\_\_\_.  
 A. 1964  
 B. 1960  
 C. 1963  
 D. 1962
60. Who among the following is an ex-officio member of parliament.  
 A. Women representative  
 B. The senator  
 C. Members of parliament  
 D. Nominated members

**SECTION II**  
**CHRISTIAN RELIGIOUS EDUCATION**

61. Human beings are the best of God's creation mainly because they:-  
 A. possess bigger brains  
 B. can argue with God  
 C. were created in God's image  
 D. were created last
62. From the story of Adam and Eve, we see that disobedience leads to:-  
 A. death  
 B. blessing  
 C. judgement  
 D. salvation
63. According to Bukusu, God created the world in \_\_\_\_\_ days.  
 A. seven  
 B. two  
 C. six  
 D. eight
64. Christians respond to God's creation by:-  
 A. cutting trees for charcoal  
 B. taking care of animals  
 C. hunting all wild animals  
 D. clearing all forests to plant crops
65. The story of the garden of Eden teaches us how to:-  
 A. destroy all trees  
 B. care for God's given environment  
 C. drain all swamps for better use  
 D. mind our own business
66. The fall of human beings is recorded in the book of:-  
 A. Genesis  
 B. Exodus  
 C. Psalms  
 D. Mathew
67. New life is:-  
 A. receiving new clothes  
 B. learning together  
 C. changing from old ways to new ones  
 D. celebrating together
68. Which one of the following occasions **does not** mark new life in traditional African society?  
 A. Marriage  
 B. Birth  
 C. Baptism  
 D. Initiation
69. Abraham left the country of Haran and went to the country of:-  
 A. Canaan  
 B. Mesopotamia  
 C. Damascus  
 D. Samaria
70. Faith without action is dead. Who said these words?  
 A. Peter  
 B. Paul  
 C. John  
 D. James
71. By sending Jesus Christ, God wanted us to:-  
 A. crucify Him  
 B. love our friends only  
 C. be baptized by Him  
 D. share new life with him



72. A tenth of what we have which we give to God is called:-  
 A. a tithe  
 B. a sacrifice  
 C. an offering  
 D. a wave offering
73. Your classmate Jane has refused to lend you a pen. As a Christian, what action would you take?  
 A. Ask the classteacher to talk to her  
 B. Tell her to help others  
 C. Report her to the class prefect  
 D. Take the pen from her
74. Faith visits the sick and gives them food. The fruit of the Holy Spirit shown is:-  
 A. patience  
 B. joy  
 C. peace  
 D. kindness
75. The Passover was first celebrated by Israelites in:-  
 A. Canaan                      B. Wilderness  
 C. Egypt                        D. Haran
76. The event during which all the male first borns of Egypt were killed by the angel of death was called:-  
 A. Passover  
 B. Last supper  
 C. Pentecost  
 D. Easter
77. The resurrection of Jesus teaches Christians that they should:-  
 A. be sad when their friends die  
 B. wait for Jesus to come  
 C. go to graves to look for the dead  
 D. believe in eternal life
78. Three of the following names are given to last supper. Which one is **NOT**?  
 A. Holy communion  
 B. Eucharist  
 C. Lord's supper  
 D. Holy meal
79. Three of the following are values required during the breaking of bread. Which one is **NOT**?  
 A. Generosity                  B. Sorrow  
 C. Humility                      D. Gladness
80. Jesus rose from the death on the \_\_\_\_\_ day.  
 A. second                        B. first  
 C. third                            D. seventh
81. Which one of the following is an example of a person with special needs?  
 A. A blind person  
 B. A short person  
 C. A fat person  
 D. A healthy person
82. Repentance means \_\_\_\_\_  
 A. a change of mind  
 B. not caring about a mistake you have made  
 C. being sorry for a mistake you may have made  
 D. feeling and saying sorry for a mistake you have made
83. In *John 6:1-14*, Jesus fed a crowd using:-  
 A. five loaves of bread and two fish  
 B. two loaves of bread and five fish  
 C. five loaves of bread and a few small fish  
 D. changing stones into five loaves and two fish
84. A Christian can support a person infected with HIV/AIDS by:-  
 A. providing with spoons  
 B. avoiding sharing food with them  
 C. providing them with medicines  
 D. avoiding talking to them
85. Which one of the following is **NOT** a fruit of the Holy Spirit?  
 A. Humility  
 B. Patience  
 C. Knowledge  
 D. Kindness
86. After Jesus healed the demon possessed men, he sent the demons to the:-  
 A. graves  
 B. forest  
 C. city  
 D. pigs
87. The statement "who was conceived by the Holy spirit" is found in the:-  
 A. Lords prayer  
 B. Hymn books  
 C. Apostle's creed  
 D. National Anthem
88. Which of the following miracles shows Jesus power to forgive sins?  
 A. Changing water into wine  
 B. Healing the paralytic  
 C. Calming the storm  
 D. Raising Lazarus
89. The Holy Spirit came upon Jesus during baptism in form of:-  
 A. a dove                              B. a cross  
 C. fire                                    D. a voice
90. Which of the following is the best thing to do when you collect a thousand shillings note in the school compound?  
 A. Keep it to yourself  
 B. Give it to the teacher  
 C. Buy sweets for your friend  
 D. Give it to your parents