

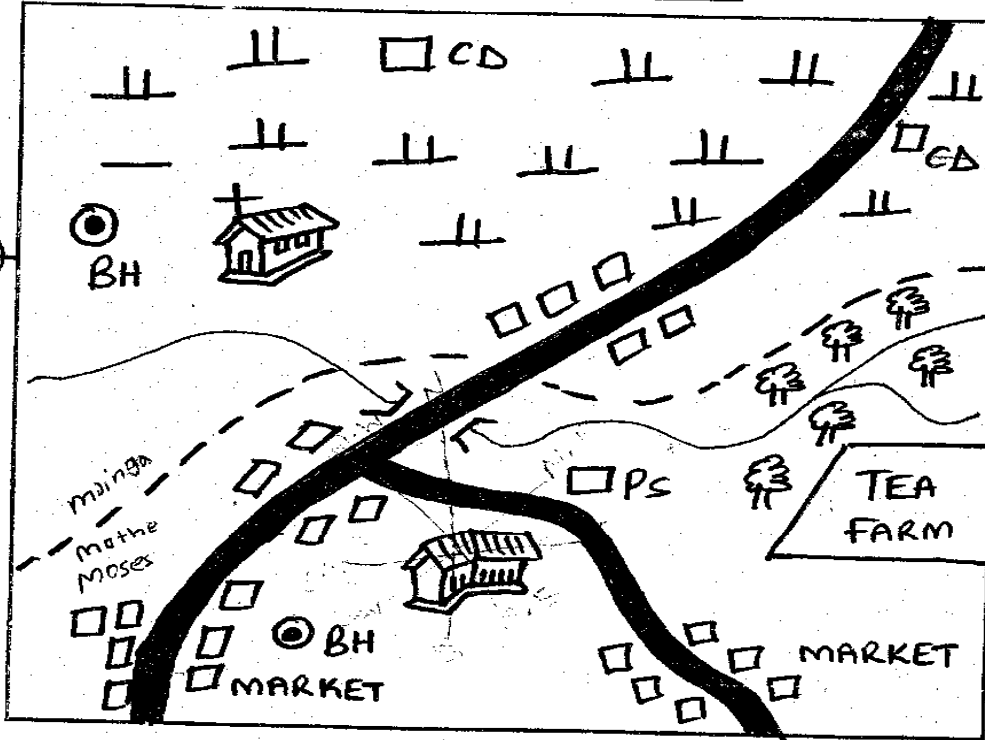


RIISING STAR EXAMINATION SERIES
STANDARD FIVE
YEAR 2021

SOCIAL STUDIES & C.R.E

Time: 2 hrs 15min

PAMBO AREA



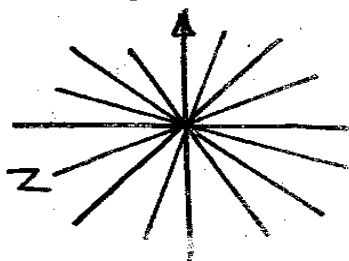
KEY	
	Permanent buildings
	Sub-county boundary
	Church
	Cattle dip
	Forest
	Shrubs
	Police station
	School
	Bore hole
	River and bridge

Study the map of Pambo area and use it to answer questions 1-7.

- The direction of the school from the cattle dip is:-
 A. South West B. North East
 C. North D. South
- Which economic activity is carried out in the North of the map?
 A. Pastoralism B. Forestry
 C. Crop farming D. Mining
- Most of the people in Pambo area are likely to be:-
 A. Muslims B. Hindus
 C. Christians D. Pagans
- The type of soil found in the Eastern side of the map is:-
 A. clay soil B. loam soil
 C. volcanic soil D. sandy soil
- What is the climate of the area to the East of the map?
 A. Hot and wet B. Hot and dry
 C. cool and dry D. Cool and wet
- The highest point on the map is likely to be found near the:-
 A. quarry B. school
 C. forest D. lake
- Pambo area is headed by:-
 A. Governor
 B. Chief
 C. Senator
 D. M.P
- Which of the following promotes peace and unity in our country?
 A. Stealing B. Lawlessness
 C. Tribalism D. Harmony
- How best can democracy be applied in school by learners?
 A. Choosing prefects
 B. Forming tribal clubs
 C. Making noise
 D. Choosing what to be taught

STD 5/SOCIAL STUDIES / C.R.E

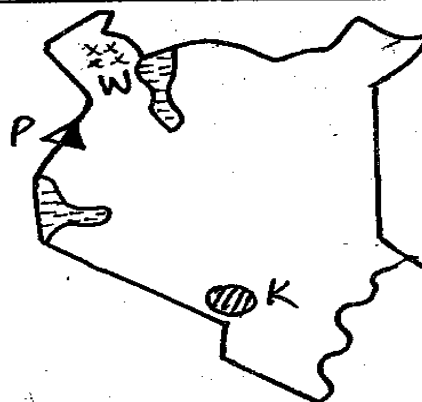
10. Which body managed National Park like Aberdare National park?
 A. National police services
 B. The defence force
 C. Forest wardens
 D. Kenya wildlife services
11. Which of the following is **NOT** an element of a map?
 A. Compass B. Key C. Colour D. River
12. The compass direction marked Z is:-



- A. W.N.W
 B. S.S.E
 C. W.S.W
 D. S.S.W

13. Kenya covers an area of how many square km?
 A. 582646 B. 5199 C. 4369 D. 1000
14. Which country borders Kenya to the South?
 A. Somalia B. Uganda C. Tanzania D. Sudan
15. The steep sides of the Rift Valley are called:-
 A. cracks B. escarpments
 C. faults D. inselbergs
16. River Ewaso Nyiro has its source in the:-
 A. Aberdare ranges B. Mount Kenya
 C. Mount Elgon D. Mount Longonot
17. _____ does not affect the climate of a given area.
 A. Latitude B. Longitude C. Winds D. Altitude
18. Which one of the features below is the odd one out?
 A. Lakes B. Plateaus C. Oceans D. Rivers
19. In Kenya, the official exercises of counting people countrywide is conducted after every _____ years.
 A. 5 B. 35 C. 18 D. 10
20. The safest point for a pedestrian to cross a busy road is at:-
 A. bend B. junction
 C. round about D. foot bridge
21. Which of the following rivers is known by two different names at the source and at the mouth?
 A. River Tana B. River Nzoia
 C. River Athi D. River Turkwel
22. Which of the following do the Turkana and the Kipsigis have in common?
 A. Both communities belong to the highlands Nilotes
 B. Both communities originated from Southern Sudan
 C. Both communities are Plain Nilotes
 D. Both communities are mainly pastoralists
23. Lowland forests in Kenya are mainly found in:-
 A. Western region B. Coastal region
 C. Mount Kenya region D. Nyanza region

Use the map below to answer questions 24-27.




24. The feature marked W is:-
 A. River Tana B. Yatta plateau
 C. Lotikipi plain D. Kiangwell swamp
25. The lake marked K is called:-
 A. Lake Magadi B. Lake Victoria
 C. Lake Nakuru D. Lake Turkana
26. The feature marked P is:-
 A. Aberdare ranges B. Mt. Elgon
 C. Mt. Lesatima D. Mt. Marsabit
27. The town marked X is:-
 A. Lowdar B. Mandera
 C. Wajir D. Marsabit
28. Three of the following are ways that were used in traditional education to teach the youth. Which one is **NOT**?
 A. Imitation B. Stories
 C. Apprenticeship D. Reading
29. The North-Eastern part of Kenya is sparsely populated mainly because:-
 A. it has poor roads and no railway
 B. it is very hot and there are very few town
 C. it has low rainfall an infertile soils
 D. it is dry and insecure
30. Which of the following is a drainage features?
 A. Valleys B. Basins C. Plains D. Lowlands
31. The diagram below shows that there is:-



- A. road junction ahead
 B. railway crossing ahead
 C. round about ahead
 D. cattle crossing
32. A good citizen of Kenya is the one who:-
 A. goes to church regularly
 B. obeys the law of the land
 C. owns a lot of property
 D. attends political rallies

33. The planting of trees where they have been cut is known as:-
 A. afforestation B. reafforestation
 C. deforestation D. forestry
34. The most Northern point of Kenya is:-
 A. Mandera B. Vanga C. Kibish D. Mombasa
35. The person in-charge of controlling debates in national assembly is:-
 A. president B. governor C. speaker D. senator

Use the diagram below to answer questions 36 and 37.



36. The above type of rainfall is likely to fall at:-
 A. Nyeri B. Kisumu C. Nairobi D. Kirinyaga
37. The rainfall above is called
 A. convectional B. relief
 C. cyclonic D. orographic
38. People who run away from their country because of wars are called:-
 A. runners B. athletes C. citizens D. refugees
39. Cool winds that blow from sea to the land during the day are known as:-
 A. land breeze B. land winds
 C. sea winds D. sea breeze
40. The cheapest and most common fishing preserving method is:-
 A. smoking B. freezing
 C. sun-drying D. refrigeration
41. A group of people sharing a common ancestor are:-
 A. family B. generation C. age-set D. clan
42. Special skills in traditional African communities were learned through:-
 A. apprenticeship B. legends
 C. story telling D. songs and dances
43. The official counting of people in Kenya is called:-
 A. addition B. census
 C. referendum D. election
44. Which of the following lake is not found in the Rift Valley?
 A. Lake Victoria B. Lake Bogoria
 C. Lake Baringo D. Lake Naivasha
45. Employment of members of your family only is called:-
 A. tribalism B. community
 C. clanlism D. nepotism
46. Short thorny trees growing in dry areas are called:-
 A. pine B. oak C. acacia D. cedar

47. What is the main economic activity of the Plain Nilotes?
 A. Pastoralism B. Fishing C. Trade D. Cultivators
48. Which of the following communities **DOES NOT** belong to the Western Bantu?
 A. Abaluhya B. Abakuria C. Abagusii D. Akamba
49. Artefacts are important because:-
 A. they are kept in museum
 B. they are made by skilled people
 C. they show the history of the way of life of a community
 D. they can be sold for a lot of money
50. Mangrove forests are found mainly in:-
 A. Coastal region B. Western region
 C. Central region D. Nyanza region
51. Which of the following is **NOT** a type of soil?
 A. Fertile soil B. Alluvial soil
 C. Sandy soil D. Loamy soil
52. One of the measures taken in Kenya to reduce road accidents is:-
 A. introducing seat belts in vehicles
 B. building more tarmac roads
 C. introducing speed governors in public transport vehicles
 D. removing old vehicles from the roads
53. The Semites came to Kenya mainly to:-
 A. trade B. preach C. fish D. farm
54. Alluvial soil is also called:-
 A. volcanic soils B. fertile soils
 C. loam soils D. young soils
55. Keeping a large number of animals in a small area is a practice called:-
 A. over cropping B. monocropping
 C. over grazing D. overstocking
56. The **MAIN** tourist attraction at lake Bogoria is:-
 A. wildlife B. hot springs
 C. sand beaches D. historical sites
57. The rules governing a country are contained in:-
 A. constituency B. Kenya gazette
 C. constitution D. magazine
58. On 20th October of every year Kenya celebrates:-
 A. Mashujaa day B. Kenyatta day
 C. Jamhuri day D. Labour day
59. Which Kenyan community is **CORRECTLY** matched with its area of origin?
 A. Luo - Bahr-el-Ghazal
 B. Taita - Shungwaya
 C. Iteso - Congo forest
 D. Maasai - Eastern Ethiopia
60. African traditional education took place
 A. only when you are old enough
 B. only when you are young
 C. throughout a person's life
 D. after initiation

C.R.E

61. Who is your neighbour?
A. Those who are agemates
B. My brothers and sisters
C. Anyone in need
D. The person next to you
62. Human beings were given authority to:-
A. eat all wild animals
B. take care of God's creation
C. obey the ten commandments
D. obey God's prophets
63. We should care for animals and plants because:-
A. they are God's creation
B. they attract tourists
C. our friends will be happy
D. teachers will not punish us
64. In the beginning when God created the universe the earth was:-
A. full of rocks
B. dark and empty
C. formless and desolate
D. full of people
65. Irresponsible girl-boy relationship may lead to three of the following except:-
A. drug abuse
B. HIV infection
C. happy life
D. teenage pregnancy
66. In school we have rules that tell us what we should do but in the Bible we have _____
A. commandments
B. rules
C. laws
D. churches
67. Catholic means:-
A. prayer
B. Roman
C. universal
D. Jewish
68. The Bible says "whoever refuses to work is not allowed _____"
A. to sleep
B. to eat
C. to talk
D. to play
69. A baby stays in the mother's womb for _____ months.
A. six
B. nine
C. twelve
D. ten
70. Our bodies are the _____ of the Holy spirit, so we should not misuse them.
A. fruits
B. church
C. temple
D. way
71. A covenant is _____
A. a king
B. an agreement
C. a proverb
D. a talk
72. The following are Christian values except:-
A. fame
B. honest
C. purity
D. mercy
73. Emotions are among _____
A. feelings
B. love
C. interest
D. friendship
74. Where did Jesus grow up? -
A. Egypt
B. Galilee
C. Nazareth
D. Bethlehem
75. Atieno likes attending Sunday school every Sunday. This helps her grow _____
A. emotionally
B. spiritually
C. quickly
D. physically
76. Jesus was crucified at _____
A. Golgotha
B. Egypt
C. Jericho
D. Nazareth
77. Who coveted Naboth's vineyard?
A. Elijah
B. Ahab
C. David
D. Saul
78. The disciples James and John were the sons of _____
A. Simon
B. Timothy
C. Emmanuel
D. Zebedee
79. The New Testament has _____ books.
A. 12
B. 27
C. 39
D. 66
80. A person is seen to be a true Christian by:-
A. the way he talks
B. the way he thinks
C. the way he acts
D. the way he dresses
81. _____ was the first Christian martyr.
A. Ahab
B. Stephen
C. Paul
D. Elijah
82. The Holy Bible was written by:-
A. God himself
B. Jesus Christ
C. Holy Spirit
D. People inspired by God
83. "I believe in God the father, maker of heaven and earth" This is part of _____
A. hymn
B. Psalm
C. Apostles creed
D. the Lords prayer
84. When Moses fled from Egypt to Midian he lived with:-
A. Caleb
B. Joshua
C. Aaron
D. Jethro
85. When we have problems, we should _____
A. pray to God
B. cry
C. kill ourselves
D. hide
86. When Jesus was baptized, the Holy Spirit came down in form of:-
A. dove
B. angel
C. pigeon
D. the holy spirit
87. _____ was told to make an Ark.
A. Moses
B. Elijah
C. Jeremiah
D. Noah
88. Who among the following introduced Christianity in Kenya?
A. Indians
B. British
C. Arabs
D. Missionaries
89. Jesus promised his disciples a helper. This helper was:-
A. a Saviour
B. God
C. Holy Spirit
D. David
90. We can help the needy by _____
A. taking them to pastors
B. crying
C. laughing at them
D. donating to them