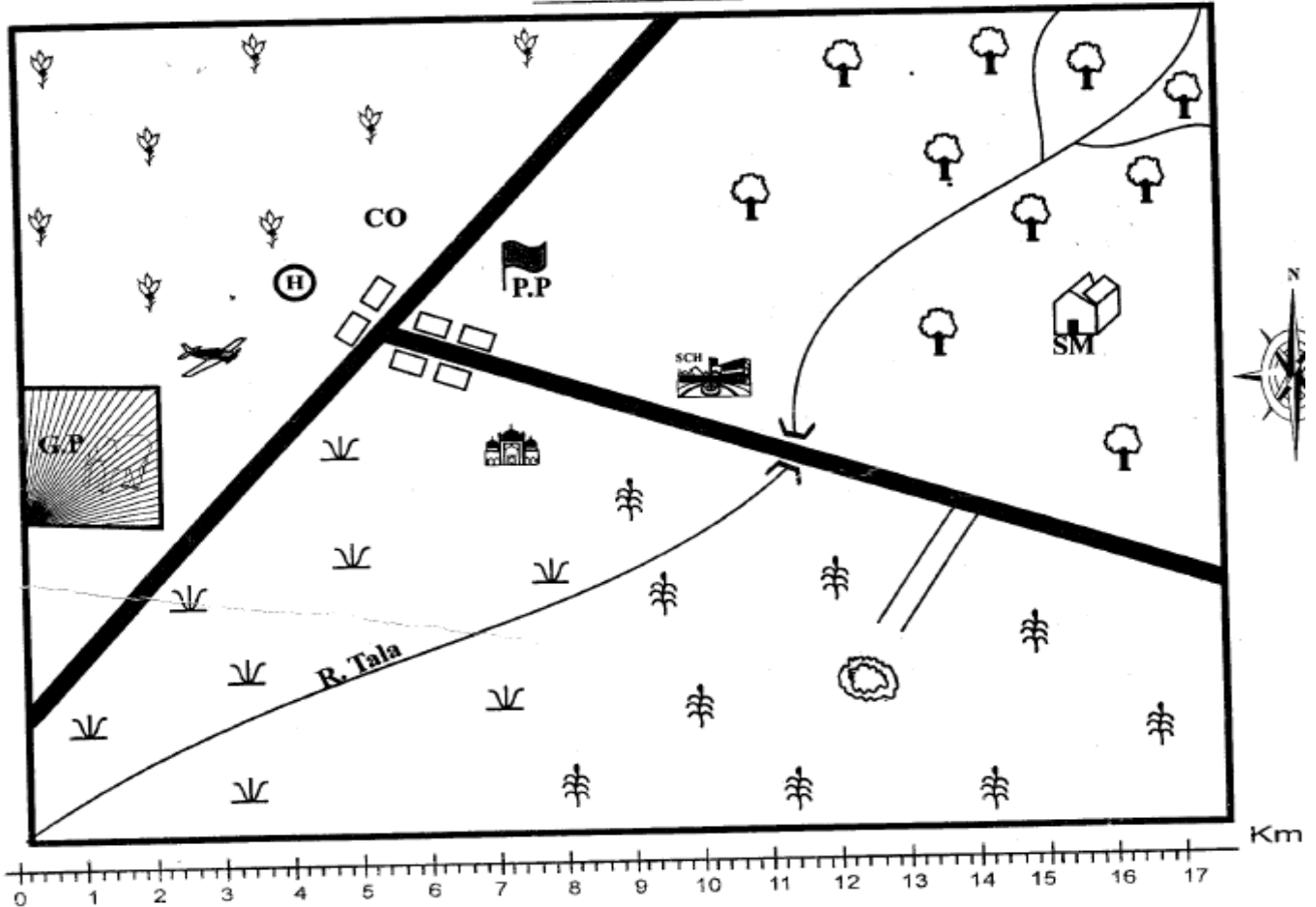



















STANDARD FIVE

SOCIAL STUDIES AND
RELIGIOUS EDUCATION Time: 2hrs 15mins

KANGUNDO AREA.

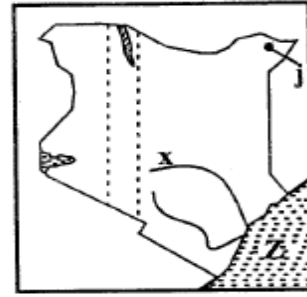


	Forest		Mosque		School
	Quarry		Air strip		Tarmac road
	Maize		Grassland		Murram road
	Coffee		Health Centre		River and bridge
	Game Park		Police Post		Permanent buildings
	County Offices		Saw Mills		

Study the map of Kangundo area and use it to answer questions 1 -7.

- River Tala flows from _____ to _____
A. North east to south west
B. North west to south east
C. South west to north east
D. North east to south east
- The head of Kangundo area is:-
A. senator
B. chief
C. governor
D. mp
- The **main** religion of the people in the area is:-
A. christianity
B. islam
C. paganism
D. traditionalism
- The **main** staple food of the people of Kangundo area is:-
A. coffee
B. rice
C. wheat
D. maize
- Which one of the following economic activities is **not** practised in the area?
A. Farming
B. Lumbering
C. Fishing
D. Mining
- The **main** means of transport in the area is:-
A. road
B. air
C. water
D. railway
- The people of Kangundo area get water from:-
A. a dam
B. the river
C. a lake
D. a swamp
- Kenya was colonized by the:-
A. Germans
B. Italians
C. French
D. British
- The **first** president of Kenya died in the year:-
A. 2002
B. 1963
C. 1978
D. 1992
- Three of the following people are elected by voters **except**:-
A. Chief Justice
B. M.P
C. Governor
D. President
- A person who loves his country is a:-
A. loyal
B. patriot
C. citizen
D. Kenyan
- Which one of the following is **not** abuse of human rights?
A. Right to fresh air.
B. Right to balanced diet.
C. Right to shelter.
D. Forcing children to go to school.
- Which one of the following colours of the national flag represents vegetation?
A. Black
B. Red
C. Green
D. White

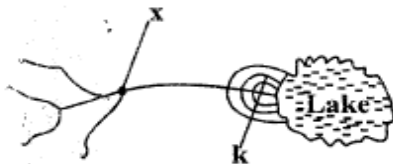
Use the diagram below to answer questions 14 to 16.



- The river marked x is:-
A. River Athi
B. River Nzoia
C. River Tana
D. River Nyando
- The town marked j is:-
A. Wajir
B. Garissa
C. Marsabit
D. Mandera
- The water body marked Z is known as:-
A. Indian Ocean
B. Lorian Swamp
C. Lake Victoria
D. Lake Turkana
- Which one of these is **not** an element of a map?
A. Key
B. Shape
C. Frame
D. Title
- Three of the following are examples of relief features. Which one is **not**?
A. Hills
B. Valleys
C. Plateaus
D. Swamps
- The other name for Alluvial soil is:-
A. black cotton
B. loam soil
C. young soils
D. volcanic soils
- Which one of these skills was taught to boys **only**?
A. Hunting
B. Medicine
C. How to cook
D. Collecting firewood
- Which one of the following is **not** a cash crop?
A. Coffee
B. Cotton
C. Pyrethrum
D. Sorghum
- Which one of the following minerals is found at Lake magadi?
A. Limestone
B. Soda ash
C. Flouspar
D. Diatomite
- The meat from a sheep is called:-
A. beef
B. mutton
C. pork
D. bacon
- Which one of the following is **not** a soft wood?
A. Cedar
B. Cypress
C. Pine
D. Camphor
- Chicken that are reared to provide meat are called:-
A. broilers
B. layers
C. grade
D. traditional

26. Which one of the following animals was **not** used for transport?
 A. Oxen
 B. Donkey
 C. Horse
 D. Carmel
27. Laws that we use in our counties are made by:-
 A. MCAs
 B. Governor
 C. Senator
 D. Speaker
28. Which one of the following is **not** a traditional form of communication?
 A. Using drums.
 B. Writing of letters.
 C. Using horns.
 D. Using smoke.
29. Which one of the following is **not** a quality of a good citizen?
 A. Promoting peace.
 B. Being fair.
 C. Patriotism
 D. Disobedience
30. Three of the following are causes of disagreement between pupils and teachers. Which one is **not**?
 A. Arriving at school early.
 B. Poor grades.
 C. Misbehaviour in class.
 D. Failure to respect teachers.
31. Which one of the following is **not** a function of a county governor?
 A. To head the county executive.
 B. To initiate development in the county.
 C. To make laws to be used in the county.
 D. To receive important visitors in the county.

Use the physical feature below to answer questions 32 and 33.



32. Which one of the following is the correct name of the part marked x?
 A. Confluence
 B. Delta
 C. Tributary
 D. Distributary
33. The part of the diagram marked k is:-
 A. confluence
 B. an estuary
 C. delta
 D. tributary
34. The needle of a compass always points towards:-
 A. East
 B. South
 C. West
 D. North
35. Which one of the following rivers drains into Lorian swamp?
 A. River Mara
 B. Ewaso Nyiro North
 C. River Kerio
 D. River Turkwel
36. Three of the following are importance of vegetation. Which one is **not**?
 A. Home for biting snake.
 B. Source of timber.
 C. Making furnitures.
 D. Source of medicine.
37. A group of people who were initiated together formed:-
 A. an age set
 B. a community
 C. a family
 D. an age group
38. Which one of the following was **not** a method of teaching in traditional African society?
 A. Use of riddles.
 B. Use of stories.
 C. Use of proverbs.
 D. Use of books.
39. Growing of flowers in a farm **only** is called:-
 A. viticulture
 B. market gardening
 C. floriculture
 D. agriculture
40. Which one of the following fish is **not** found in fresh water areas?
 A. Tilapia
 B. Mudfish
 C. Tuna
 D. Nile perch
41. The people who hunt and kill wildlife illegally are called:-
 A. poachers
 B. terrorists
 C. tourist
 D. criminals
42. Which one of the following is a symbol of national unity?
 A. Map of Kenya
 B. National flag
 C. Parliament
 D. Presidency
43. Which one of the following is **not** a function of National Police Service?
 A. Maintaining law and order.
 B. Arresting suspects.
 C. Inspecting vehicles.
 D. Beating criminals.
44. Who is the current leader of opposition in Kenya?
 A. Musalia Mudavadi
 B. William Ruto
 C. Raila Odinga
 D. Kalonzo Musyoka
45. The people's way of life is their:-
 A. culture
 B. stories
 C. taboos
 D. curse
46. Kenya is divided into _____ counties.
 A. 290
 B. 67
 C. 45
 D. 47
47. The cutting down of trees without replacing them is known as:-
 A. agro forestry
 B. deforestation
 C. afforestation
 D. re-afforestation

48. A member of parliament (MP) is elected to represent:-
 A. constitution B. a county ward
 C. a constituency D. a county
49. Population census is held in Kenya after every _____ years.
 A. 10 B. 7
 C. 4 D. 5
50. The road sign below means:-



- A. Round about B. Danger ahead
 C. Road junction D. Road crossed
51. Which one of the following is the **smallest** county in Kenya?
 A. Mombasa B. Turkana
 C. Marsabit D. Nairobi
52. Which one of the following relief regions is cool and wet?
 A. Coastal lowlands B. Plateau
 C. Rift valley D. Highlands
53. Three of the following are sub-groups of Nilotes. Which one is **not**?
 A. River Lake Nilotes
 B. Bantu Nilotes
 C. Highland Nilotes
 D. Plain Nilotes
54. In traditional African societies, stories were usually told by:-
 A. friends in the field
 B. teachers in school
 C. grandparents in the evening
 D. parents in the morning
55. Which of the following counties grows tea on large scale?
 A. Machakos B. Kisumu
 C. Garissa D. Kericho
56. The method of rearing chicken, where chicken move freely around the homestead is called:-
 A. free range system
 B. deep litter system
 C. modern system
 D. the battery system
57. Which one of the following lakes has hot springs or geysers?
 A. Lake Nakuru B. Lake Bogoria
 C. Lake Victoria D. Lake Naivasha
58. Which one of the following is **not** a traditional industry?
 A. Weaving
 B. Pottery
 C. Wood carving
 D. Vehicle making

59. Three of the following are importance of democracy in a school. Which one is **not**?
 A. Enables decision making.
 B. Promotes unity.
 C. Causes strikes.
 D. Promotes equality.
60. Labour day is celebrated on:-
 A. 20th October B. 1st May
 C. 1st June D. 12th December

C.R.E

61. The stories of creation are recorded in the book of:-
 A. Matthew B. Exodus
 C. Genesis D. Numbers
62. The followers of Christ were first called Christians at:-
 A. Rome B. Antioch
 C. Ephesus D. Galatia
63. The wisemen who came to see baby Jesus were from the:-
 A. North B. West
 C. South D. East
64. Where was Moses living when God called him?
 A. In Egypt B. In Midian
 C. In Canaan D. In Haran
65. How long did Jesus take to send the Holy spirit after his ascension?
 A. Eight days B. Forty days
 C. Ten days D. Fifty days
66. How many times was Samuel called by God:-
 A. Twice B. Thrice
 C. Four times D. Five times
67. Who among the following people sang until the gates of prison opened?
 A. Peter and James B. Paul and Silas
 C. Philip and John D. Paul and Peter
68. Who anointed the first King of Israel?
 A. Nathan B. Kish
 C. Jesse D. Samuel
69. Moses received the ten commandments on Mount:-
 A. Carmel B. Sinai
 C. Ararat D. Olives
70. The disciples of Jesus waited for the Holy Spirit in:-
 A. Jerusalem B. Bethlehem
 C. Bethany D. Cana
71. Who among the following people killed an Egyptian?
 A. Moses
 B. David
 C. Isaac
 D. Abraham

72. Ananias and Sapphina died because:-
 A. they cheated the Holy Spirit
 B. they betrayed the disciples
 C. they neglected their duties
 D. they were lazy
73. On which Occasion were these words said; "This is my son with whom I am pleased. Listen to him." During the:-
 A. temptation of Jesus
 B. baptism of Jesus
 C. transfiguration of Jesus
 D. Crucifixion of Jesus
74. A true Christian witness should **not**:-
 A. be kind
 B. be ready to confess his sins
 C. lead a holy life
 D. be a hypocrite
75. Complete the statement: Happy are the humble:-
 A. they will receive what God has promised
 B. they will see God
 C. they will be shown mercy
 D. God will call them his children
76. Who among the following people was **not** a fisherman?
 A. James
 B. John
 C. Matthew
 D. Peter
77. The woman whom Jesus healed had been bleeding for:-
 A. ten years
 B. twelve years
 C. five years
 D. eight years
78. Who prophesied about the coming of the Holy Spirit?
 A. Hosea
 B. Micah
 C. Isaiah
 D. Joel
79. The first miracle of Jesus was:-
 A. turning stones into bread
 B. changing water into wine
 C. walking on water
 D. calming the storm
80. In traditional African society, people believed that God:-
 A. created everything on earth
 B. looks like humans
 C. has a son
 D. loves Jesus
81. How many times was Jesus tempted?
 A. Once
 B. Twice
 C. Thrice
 D. Four times
82. Christians are expected to:-
 A. love their friends only
 B. love their enemies
 C. revenge against their enemies
 D. punish sinners
83. In traditional African society, people worshiped in:-
 A. tents
 B. churches
 C. temples
 D. shrines
84. A community of believers who worship together are called:-
 A. missionaries
 B. Catholics
 C. church
 D. multitude
85. What happened after the disciples of Jesus had received the Holy Spirit?
 A. They had a common meal.
 B. They spoke in tongues.
 C. They got baptised.
 D. They wrote the bible.
86. How many apostles of Jesus received the Holy Spirit?
 A. Twelve
 B. Ten
 C. Eleven
 D. Six
87. Who among the following people was thrown into a den of lions?
 A. Shadrack
 B. Daniel
 C. Meshack
 D. Abednego
88. Which one of the following is a quality of a good leader?
 A. Must be disorderly.
 B. Must be sober.
 C. Must be wealthy.
 D. Must have faults.
89. Which commandment teaches Christians to worship God on the seventh day?
 A. Observe the sabbath day and keep it Holy.
 B. Do not use God's name in vain.
 C. Worship no other god but me.
 D. Honour your father and mother.
90. Who among the following people committed murder?
 A. Peter
 B. King Saul
 C. Abel
 D. Cain
- I.R.E**
61. "By the steeds that run" is a verse from surah:-
 A. Nasr
 B. Adiyat
 C. Kauthar
 D. Maun
62. Patience is a virtue encouraged in surah:-
 A. Asr
 B. Fiyil
 C. Falaq
 D. Masad
63. Which surah mentions a river in paradise?
 A. Kauthar
 B. Kafirun
 C. Nasr
 D. Qariah
64. The striking hour in the day of judgment is mentioned in surah:-
 A. Qariah
 B. Nas
 C. Asr
 D. Takathur
65. Which surah curses an uncle of the prophet?
 A. Masad
 B. Kafirun
 C. Quraish
 D. Takathur
66. The prophet S.A.W described fasting as a:-
 A. shield
 B. barrier
 C. punishment
 D. torture

67. Optional prayers that come before faradh prayers are called:-
 A. Sunnah Dhuha
 B. Sunnah Baadiyah
 C. Sunnah Witr
 D. Sunnah Qabliyah
68. Swalat magharib comprises of:-
 A. 4 rakaah
 B. 2 rakaah
 C. 3 rakaah
 D. 1 rakaah
69. Who is **not** a recipient of Zakat?
 A. Orphan
 B. Debtor
 C. Needy
 D. Poor
70. Who among the following was sent as a vicegerent on earth?
 A. Muhammad
 B. Ibrahim
 C. Nuh
 D. Adam
71. The attribute of Allah "The source of peace" is:-
 A. Al-muumin
 B. Al-Qudus
 C. Assalaam
 D. Al-Malik
72. The prophet preached islam secretly for:-
 A. 23 years
 B. 63 years
 C. 3 years
 D. 13 years
73. Nabii Daud A.S killed a fierce fighter called:-
 A. Talut
 B. Herod
 C. Abraha
 D. Jalut
74. The prophet used to meet representatives of Yathrib people at:-
 A. Qubaah
 B. Aqabah
 C. Mina
 D. Badr
75. How many categories of people should receive Zakat according to the holy Qur'an?
 A. 8
 B. 6
 C. 12
 D. 4
76. Iddul-fitr celebration is marked in the month of:-
 A. Ramadhan
 B. Shaawwal
 C. Safar
 D. Dhul-Hijjah
77. The prophet went for Isra-wal miiraj in the month of:-
 A. Rajab
 B. Safar
 C. Muharram
 D. Shaaban
78. The forenoon sunnah prayer is called:-
 A. Qabliyah
 B. Duhur
 C. Baadiyah
 D. Dhuha
79. The expert in observing footprints was:-
 A. Waraqah
 B. Abu-Ayyub
 C. Suraqah
 D. Abu-Musa
80. The wife of Nabii Adam A.S was called:-
 A. Hawa
 B. Sarah
 C. Hajr
 D. Khadijah
81. The angel in charge of revelation is:-
 A. Israfil
 B. Jibril
 C. Malik
 D. Raqib
82. Which of the following is heavy najis?
 A. Blood
 B. Feaces
 C. Puppy
 D. Urine
83. Hajj is conducted in the month of:-
 A. Safar
 B. Ramadhan
 C. Dhul-Qaadah
 D. Dhul-Hijjah
84. The Faradh prayers performed at dawn is:-
 A. Maghrib
 B. Asr
 C. Fajr
 D. Duhur
85. The prophet who was thrown in a well was:-
 A. Ayyub
 B. Musa
 C. Yussuf
 D. Yunus
86. Who among the following children of the prophe did **not** belong to lady Khadijah?
 A. Ibrahim
 B. Fatma
 C. Kassim
 D. Um-Kulthum
87. Which of the following is **not** a name of the Kaabah?
 A. Baitul Attiq
 B. Baitu-Allah
 C. Baitel-Maqdis
 D. Baitul-Haraam
88. The mother of the prophet died at:-
 A. Badr
 B. Mina
 C. Abuwai
 D. Abudhab
89. During the open mission the prophet S.AW went to:-
 A. Yathrib
 B. Taif
 C. Mt. Hirah
 D. Mt. Swafah
90. The third article of faith is to believe in:-
 A. prophets
 B. zakat
 C. angels
 D. books