

GRADE TWO

MATHEMATICAL ACTIVITIES

NAME:	
SCHOOL:	

Fill in the missing numbers.

1. 27, _____, _____, 30


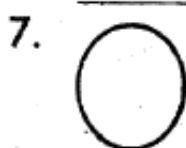
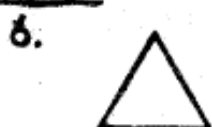
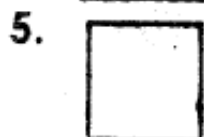
2. 32, _____, _____, 35

Add.

3. $\begin{array}{c} \triangle \triangle \triangle \triangle \triangle \\ \triangle \triangle \triangle \triangle \triangle \end{array} + \begin{array}{c} \triangle \triangle \\ \triangle \end{array} = \underline{\hspace{2cm}}$

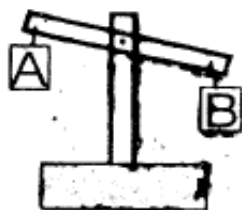
4. $\begin{array}{c} r r r r \\ r r r r \end{array} + r r r = \underline{\hspace{2cm}}$

Name the shapes



9. A triangle has _____ sides

10. Which one is heavier?



Write in symbols.


11. Twenty six - _____

12. Forty four - _____

13. Ninety two - _____

14. One cow has one tail. How many tails do 4 cows have? _____

15. Draw half a circle.



16. _____ is the fifth month of the year.

17. What is the place value of 3 in 300? _____

18. 9 hundreds 0 tens 9 ones = _____

19. Which pencil is shorter?




20. $9 + 4 + 6 =$ _____

21. $3 + 3 + 3 =$ _____ \times _____ $=$ _____

22. $4 + 4 + 4 =$ _____ \times _____ $=$ _____

23. _____ is the third month of the year.

24. Draw an oval



25. $0 + \square = 1.1$

26. $6 - \square = 4$

27. $\square + 4 = 11$

28. $9 + 3 + 2 =$ _____

29. 001 = _____ hundreds
_____ tens _____ ones.

30. $16 + 2 =$ _____

31. $3 + 4 =$ _____

32. $9 + 6 =$ _____

33. Which one is lighter:
A. bag or B. pencil? _____

34. Which one is longer?

A. B.

35. Multiply 3 by 10 = _____

36. An hour has _____ minutes.

37. A week has _____ days.

38. 9 = _____ hundreds _____ tens _____ ones.

39. 17 = _____ hundreds _____ tens _____ ones.

Divide.

40. $12 \div 4 =$ _____

41. $9 \div 3 =$ _____

42. $2 + 2 =$ _____

43. $10 \div 5 =$ _____

44.  = _____

45.
$$\begin{array}{r} 40 \\ -10 \\ \hline \end{array}$$

46.
$$\begin{array}{r} 46 \\ +15 \\ \hline \end{array}$$

47. $56 - 26 =$ _____

48. Kamau had 6 oranges. He shared them equally among his 2 daughters. How many oranges did each daughter get?

49. $3 \times 5 =$ _____

50. $3 \times 2 =$ _____