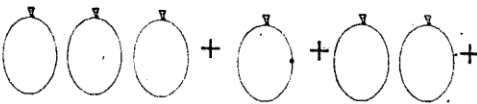


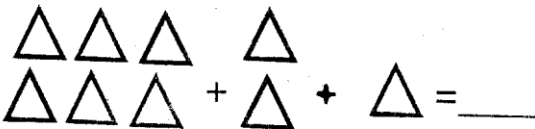
GRADE ONE

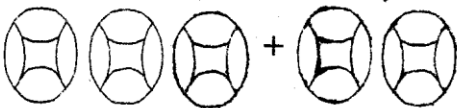
MATHEMATICAL ACTIVITIES

NAME:	
SCHOOL:	

Count and add.

1.  = _____

2.  = _____

3.  = _____

4. $\begin{matrix} r & r & r & r \\ & r & r & \end{matrix}$ = _____

Write the next number.

5. 14 _____ 6. 36 _____

7. 21 _____ 8. 19 _____

9. 29 _____

Write in words

Example 1 - one

10. 4 = _____

13. 3 = _____

11. 6 = _____

14. 5 = _____

12. 7 = _____

15. 10 = _____


16. Circle the shortest.



17.





Draw the next shape.




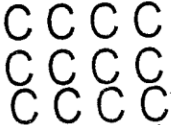
Count and write in words.

Example  = one

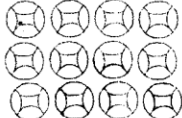
21.  = _____

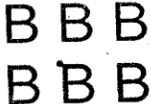
22.  = _____

23.  = _____

24.  _____

25.  _____

26.  _____

27.  _____

Fill in the missing number.

28. 10, 20, 30, _____, _____

29. 25, 30, 35, _____, _____, 50

Fill in the place values.

30. 27 = _____ tens _____ ones.

31. 72 = _____ tens _____ ones.

32. 46, _____ tens _____ ones

Write in numbers.

34. eleven = _____

35. seventeen = _____

36. eight = _____

37. I have _____ fingers on both hands.

38. There are _____ days in a week.







Draw these shapes.

39.	40.	41.
Oval	Circle	Star

Add using counters.

42. $4 + 2 =$ 43. $1 + 1 =$

44. $5 + 2 =$

45.  +  = 
 +  = 

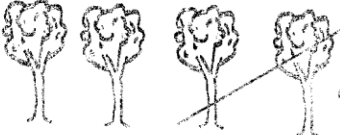
Find the missing number.


46. $5 + \square = 7$

47. $3 + \square = 6$

48. $\square + 7 = 9$

Subtraction

49.  $4 - 2 =$ _____

50.  $5 - 3 =$ _____