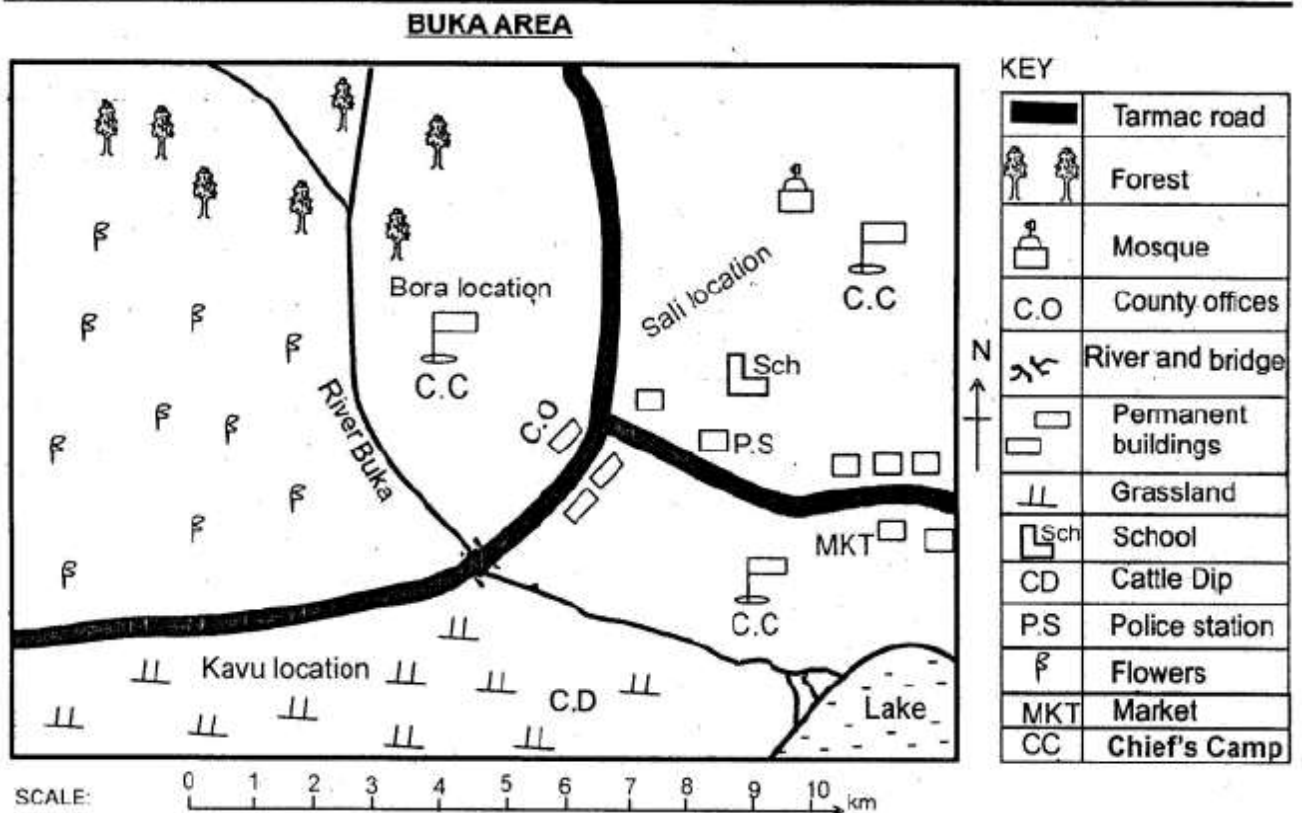


# STANDARD FOUR TERM TWO EXAM 2018

## SOCIAL STUDIES AND RELIGIOUS EDUCATION

Time: 2hrs 15min



Study the map of Buka area and answer questions 1-7.

1. How many chiefs are in Buka area?  
A. 1                      B. 3  
C. 2                      D. 4
2. River Buka starts from the:-  
A. bridge                B. lake  
C. forest                D. flowers.
3. What is the direction of the cattle dip from the mosque?  
A. North East        B. North West  
C. South East        D. South west.
4. The **main** cash crop grown in Buka area is:-  
A. coffee                B. flowers  
C. tea                    D. forest.
5. Which location in Buka area has a school?  
A. Sali location    B. Buka location  
C. Kavu location    D. Bora location
6. The religion practised by people in Buka area is:-  
A. Islamic              B. Christianity  
C. Hinduism          D. Traditionalism.
7. Which of the following is a man-made feature in Buka area?  
A. River                B. Forests  
C. Bridge              D. Valley
8. The **largest** city in Kenya is:-  
A. Kisumu            B. Mombasa  
C. Nairobi            D. Nakuru.

9. The compass direction between East and South is:-

- A. East South      B. North East  
C. North West      D. South East.

10. Which of the following is **not** a way of people's life?

- A. Food eaten.      B. Ways of worship.  
C. Way of dressing.      D. Walking style.

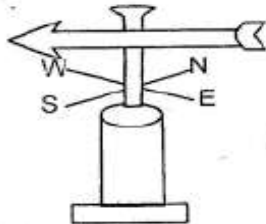
11. In the past, people's dressing was **mainly** influenced by:-

- A. climate      B. houses  
C. culture      D. traditions.

12. Many trees growing together form:-

- A. vegetation      B. a forest  
C. a farm      D. grass.

13. The following is a weather instrument. It is used to show:-



- A. speed of wind      B. rainfall  
C. temperature      D. direction of wind.

14. A group of people who speak a similar language form a:-

- A. tribe      B. language group  
C. population      D. clan.

15. Who among the following belongs to nilotic language group?

- A. Luo      B. Rendile  
C. Akamba      D. Agikuyu

16. A school worker who is send to deliver letters from school is called a:-

- A. secretary      B. school burser  
C. watchman      D. messenger.

17. The following are elements of weather. Which one is **not**?

- A. Rain      B. Trees  
C. Wind      D. Clouds

18. The right of passage that marks the change from childhood to adulthood is called:-

- A. naming  
B. festivals  
C. initiation  
D. birth.

19. The roofs of traditional houses were covered with:-

- A. grass      B. iron sheets  
C. tiles      D. bricks.

20. Things that we use to make our lives good are called:-

- A. food      B. basic needs  
C. resources      D. human wants.

21. Which one of the following is **not** a cash crop?

- A. Coffee      B. Cotton  
C. Tea      D. Rice

22. The national anthem of Kenya has \_\_\_\_\_ stanzas.

- A. 2      B. 5  
C. 3      D. 1

23. Which of the following is **not** a way of keeping our school clean?

















- A. Picking litter.  
B. Use of dust bins.  
C. Throwing papers through the window.  
D. Not tearing papers.

24. Three of the following are rights of the children **except**:-

- A. birthday  
B. food  
C. shelter  
D. identity.

25. The following are family celebrations **except**:-  
 A. wedding B. naming  
 C. birthday D. music festivals
26. The land found between two raised areas is called a:-  
 A. mountain B. valley  
 C. plain D. river.
27. Traditional places of worship were called:-  
 A. churches B. mosques  
 C. shrines D. temples.
28. Rainfall is measured in units called :-  
 A. millimetres B. centimetres  
 C. litres D. metres.
29. Three of the following materials are made from papyrus reeds **except**:-  
 A. baskets B. iron sheets  
 C. mats D. furniture.
30. A place where people meet to buy and sell goods and service is called a:-  
 A. shop B. supermarket  
 C. market D. stall.
31. Vegetation that grows on its own is called:-  
 A. indigenous B. planted  
 C. grassland D. natural.
32. Three of the following are physical features **except**:-  
 A. plains B. forests  
 C. valleys D. mountains.
33. Rivers that flow during rainy seasons only are called \_\_\_\_\_ rivers.  
 A. permanent B. temporary  
 C. seasonal D. dams
34. Which of the following is **not** a use of trees?  
 A. Provides timber.  
 B. A source of medicine.  
 C. Provide firewood.  
 D. A source of minerals.
35. Which of the following is **not** a colour in traffic lights?  
 A. Blue B. Amber  
 C. Red D. Green.
36. Three of the following are social activities in a school. Which one is **not**?  
 A. Songs B. Games  
 C. Learning D. Worship
37. Several sub-locations make a:-  
 A. division B. district  
 C. county D. location.

**The following is a weather chart. Use it to answer questions 38 - 40.**

DAY	MORNING	AFTERNOON
Monday	 	
Tuesday		
Wednesday	 	 
Thursday	 	 
Friday	 	

38. On which day did the pupils go to school in light clothes?  
 A. Tuesday B. Monday  
 C. Friday D. Wednesday
39. On Tuesday, the weather was \_\_\_\_\_ in the afternoon.  
 A. sunny B. rainy  
 C. calm D. cloudy
40. On which day was winnowing **best** in the afternoon?  
 A. Thursday B. Tuesday  
 C. Wednesday D. Friday
41. Which one of the following was **not** a festival in traditional African society?  
 A. Birth B. Music  
 C. Drama D. Harvest
42. The vegetation that grows along the banks of rivers is called:-  
 A. swamp B. riverine  
 C. papyrus D. natural.

43. The **main** means of transport in our county is :-  
 A. air                      B. water  
 C. road                     D. railway.
44. The acceptable ways of behaviour in a society are called:-  
 A. morals                  B. rules  
 C. traditions               D. customs.
45. In traditional African societies, children were named according to the following, **except**:-  
 A. time of birth    B. Bible names  
 C. animals            D. grandparents.
46. Another **name** for domestic animals is:-  
 A. pets                      B. wild animals  
 C. orphanage            D. tame animals.
47. Sick people in the past were treated by:-  
 A. doctors  
 B. priests  
 C. witch doctors  
 D. medicinemen.
48. A wet marshy area is called a:-  
 A. lake                      B. swamp  
 C. riverine                D. valley.
49. Which one of the following is the **main** source of water?  
 A. Tap                      B. Basin  
 C. Rain                     D. Pipes
50. Another name for grassland is:-  
 A. forest                  B. woodland  
 C. wetland                D. savanna.
51. The Luo call their God:-  
 A. Were                    B. Nyasaye  
 C. Ngai                    D. Engoro.
52. A low lying flat land is called:-  
 A. valley                    B. highland  
 C. plateau                 D. plain.
53. In our national flag, the green colour represents:-  
 A. blood                  B. people  
 C. peace                  D. vegetation.
54. The people living around lakes are likely to be:-  
 A. farmers                B. fishermen  
 C. miners                 D. swimmers.
55. Which one of the following is a child's right?  
 A. Schooling.  
 B. Overfeeding  
 C. Punishment  
 D. Employment
56. Which one of the following is **not** an importance of working together?  
 A. Brings unity.  
 B. Improves welfare.  
 C. Promotes war.  
 D. Promotes togetherness.
57. Which one of the following physical features provides good grazing fields for animals?  
 A. Plains                    B. Valleys  
 C. Hills                     D. Mountains.
58. Another name for a dam is a:-  
 A. borehole                B. lake  
 C. reservoir                D. water body.
59. Which one of the following language groups **mostly** live in towns in our county?  
 A. Bantus                    B. Cushites  
 C. Asians                    D. Nilotes
60. Who among the following is the current president of Kenya?  
 A. Mwai Kibaki  
 B. Uhuru Kenyatta  
 C. Jomo Kenyatta  
 D. Daniel Arap Moi

**PART II: RELIGIOUS EDUCATION**

**SECTION A:**

**CHRISTIAN RELIGIOUS EDUCATION**

61. The earth and everything in it was created by:-  
A. people                      B. God  
C. angels                      D. animals.
62. Who among the following was a son of Noah?  
A. Shem                      B. Jacob  
C. Enock                      D. Andrew
63. Abraham's wife was called:-  
A. Elizabeth                      B. Rachel  
C. Eve                      D. Sarah.
64. Jacob worked for \_\_\_ years to marry Rachel.  
A. 4 years                      B. 14years  
C. 7 years                      D. 3 years
65. The daughters- in- law of Naomi were:-  
A. Ruth and Orpha  
B. Mary and Anna  
C. Ruth and Rebecca  
D. Orpha and Martha.
66. Moses led the Israelites out of:-  
A. Egypt                      B. Israel  
C. Canaan                      D. Samaria.
67. Who among the following was the first king of Israel?  
A. Saul                      B. David  
C. Solomon                      D. Ahab
68. The mother of Samuel was called:-  
A. Elizabeth                      B. Magdalene  
C. Hannah                      D. Naomi.
69. The Bible has \_\_\_\_ books.  
A. 66  
B. 39  
C. 72  
D. 27
70. Jesus was born and laid in a:-  
A. bed  
B. hospital  
C. house  
D. manger.
71. The father of Jesus was:-  
A. James  
B. Joseph  
C. Isaiah  
D. Mark.
72. The wisemen were led by a \_\_\_ to where Jesus was born.  
A. light  
B. cloud  
C. star  
D. sign
73. Jesus was baptised in river:-  
A. Galilee  
B. Tana  
C. Tiberias  
D. Jordan.
74. The first disciples of Jesus worked as:-  
A. carpenters  
B. fishermen  
C. doctors  
D. tax collectors.
75. Jesus healed a blind man called:-  
A. Bartimaeus  
B. Michael  
C. Bartholomew  
D. Simon.

76. Jesus changed water into wine at \_\_\_\_ of Galilee.  
 A. Canaan                      B. Bethany  
 C. Samaria                      D. Cana
77. \_\_\_\_\_ betrayed Jesus.  
 A. Mark                      B. James  
 C. Judas                      D. Thomas
78. Who was the disciple that Jesus loved most?  
 A. John                      B. Andrew  
 C. Mathew                      D. Peter
79. Jesus said, "Let the little children come to \_\_\_\_\_."  
 A. church  
 B. God  
 C. me  
 D. pray
80. Jesus was crucified and died on:-  
 A. Good Friday  
 B. Easter Sunday  
 C. Last supper  
 D. Sabbath.
81. Peter raised \_\_\_\_\_ from the dead in Joppa.  
 A. Tabitha  
 B. Deborah  
 C. Sarah  
 D. Anna
82. Who among the following people was **not** a patriarch?  
 A. Moses  
 B. Daniel  
 C. Joseph  
 D. Isaac.
83. The Gikuyu people call their God:-  
 A. Enkai                      B. Mulungu  
 C. Ngai                      D. Nyasaye.
84. Children should always respect their:-  
 A. peers  
 B. elders  
 C. sisters  
 D. cousins.
85. We should always take care of the \_\_\_\_\_ people.  
 A. needy  
 B. strong  
 C. rich  
 D. happy
86. We should read the Bible and pray:-  
 A. monthly  
 B. on Sundays only  
 C. twice a week  
 D. everyday.
87. The **best** thing for us to do during our free time is to:-  
 A. visit the orphans  
 B. play with friends  
 C. read the story books  
 D. talk about others.
88. Christians worship in a:-  
 A. mosque                      B. temple  
 C. church                      D. house.
89. We should always \_\_\_\_\_ those who wrong us.  
 A. abuse                      B. beat  
 C. embrace                      D. forgive
90. The following qualities of a good leader **except**:-  
 A. willing to serve  
 B. proud of his ability  
 C. does not steal  
 D. tells the truth always.