

# GRADE THREE END TERM 2 EXAM, 2018

## MATHEMATICS ACTIVITIES

NAME ..... SCHOOL ..... Date: .....

### Add

1. 
$$\begin{array}{r} 14 \\ + 79 \\ \hline \end{array}$$

2. 
$$\begin{array}{r} 67 \\ + 17 \\ \hline \end{array}$$

3. 
$$\begin{array}{r} 53 \\ + 79 \\ 67 \\ \hline \end{array}$$

4. 
$$\begin{array}{r} 412 \\ + 567 \\ \hline \end{array}$$

5. 
$$\begin{array}{r} 670 \\ + 315 \\ \hline \end{array}$$

6. \_\_\_\_\_ is the sixth month of the year.

7. \_\_\_\_\_ is the last day of the week.

### Write in words

8. 100 \_\_\_\_\_

9. 722 \_\_\_\_\_

10. 915 \_\_\_\_\_

11. 157 \_\_\_\_\_

12. 59 \_\_\_\_\_

### Write in symbols.

13. Two hundred and sixty five  
\_\_\_\_\_

14. Three hundred and seventy  
\_\_\_\_\_

15. Nine hundred and ninety nine  
\_\_\_\_\_

16. Three hundred and thirty two  
\_\_\_\_\_

17. Four hundred and twenty seven  
\_\_\_\_\_

### Take away

18.  $76 - 4 =$

19. 
$$\begin{array}{r} 82 \\ - 30 \\ \hline \end{array}$$

20.  $339 - 62 =$

21.  $999 - 66 =$

22.  $50 - 20 =$

23. 
$$\begin{array}{r} 402 \\ - 260 \\ \hline \end{array}$$

24.  $\frac{1}{2}$  of 10 = \_\_\_\_\_

25.  $\frac{1}{4}$  of 16 = \_\_\_\_\_

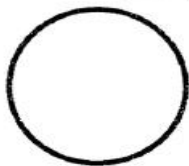
26.  $\frac{1}{8}$  of 32 = \_\_\_\_\_

27. Half of 16 is \_\_\_\_\_

28. A quarter of 20 is \_\_\_\_\_


**Name the shapes**

29.




\_\_\_\_\_

30.



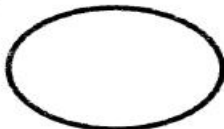
\_\_\_\_\_

31.



\_\_\_\_\_

32.



\_\_\_\_\_

33.



\_\_\_\_\_

34. What is the time?



\_\_\_\_\_

35.



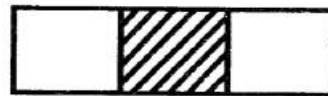
\_\_\_\_\_

36. What fraction is shaded?



\_\_\_\_\_

37. What fraction is not shaded?



38.  $6 \times 2 =$  \_\_\_\_\_

39.  $5 \times 3 =$  \_\_\_\_\_

40.  $4 \times 0 =$  \_\_\_\_\_

41. Arrange from the smallest to the largest

99, 108, 213, 62, \_\_\_\_\_

42. What is the next number in the pattern?

4, 8, 12, 16, \_\_\_\_\_

**Fill in the missing numbers**

43. 120, 130, \_\_\_\_\_, \_\_\_\_\_, 160

44. 200, 300, \_\_\_\_\_, \_\_\_\_\_, \_\_\_\_\_

45. 990, 991, \_\_\_\_\_, \_\_\_\_\_

46. 90 take away 40 = \_\_\_\_\_

47. A farmer had 70 cows. 20 cows died. How many was he left with? \_\_\_\_\_

48. Mr. Kamau has 16 goats. He bought 12 goats. How many goats does he have altogether? \_\_\_\_\_

49. ○○○○

○○○○

○○○○

\_\_\_\_ x \_\_\_\_ = \_\_\_\_

50. ○○

○○

○○

\_\_\_\_ x \_\_\_\_ = \_\_\_\_