



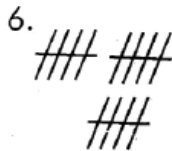
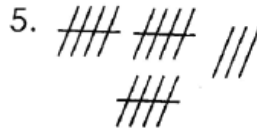
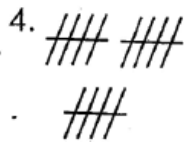
END TERM 2 EXAM, 2018

Mathematics Activities Grade 2

Count and write.



Count the tallies.



Circle the lesser number.

7. 92 90
8. 191 192
9. 43 69
10. 22 24
11. 10 20
12. 130 103

Write in words.

13. 40 _____
14. 100 _____
15. 90 _____
16. 10 _____
17. 20 _____
18. 8 _____
19. 17 _____

Write the days of the week.

20. _____
21. _____
22. _____
23. _____
24. _____
25. _____

Fill in the missing numbers.

26. 0, 5, 10, 15, 20, 25, 30, __, __, __
27. 0, 2, 4, 6, 8, 10, 12, 14, __, __, __
28. 0, 4, 8, 12, 16, 20, 24, __, __, __
29. 0, 10, 20, 30, 40, 50, 60, __, __, __
30. 20, 40, 60, 80, __, __, __

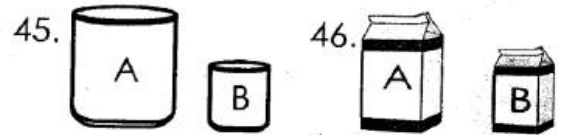
Add.

31. $40 + 42 + 8 =$
32. $52 + 32 + 2 =$
33. $42 + 52 + 10 =$
34. $62 + 61 + 30 + =$
35. $30 + 90 + 10 =$
36. $100 + 11 + 1 =$
37. $100 + 1 + 101 =$

Subtract.

38. $52 - 20 =$
39. $30 - 29 =$
40. $28 - 20 =$
41. $100 - 80 =$
42. $70 - 20 =$
43. $50 - 42 =$
44. $69 - 9 =$

Which one is bigger?



47. Tuta has 180 goats, while Tito has 130 goats. How many goats do they have altogether?

48. John has 80 sweets while Steve has 30 sweets. How many sweets do they have altogether?

Who is older.



Susan
10 years

Joe
8 years



Father
28 years

Son
16 years