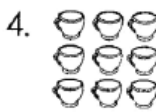
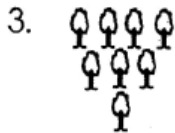
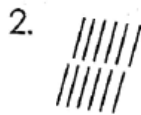
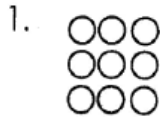


# GRADE 2 END TERM 2 EXAM, 2018

## Mathematics Activities Grade 1

### Count and write.



### Fill in the place value chart.

	tens	ones
5. 43	_____	_____
6. 44	_____	_____
7. 92	_____	_____
8. 63	_____	_____
9. 21	_____	_____

### Add:-

10.  $11 + 8 =$

11.  $20 + 3 =$

12.  $14 + 4 =$

13.  $16 + 6 =$

14.  $10 + 20 =$

### Subtract.

15.  $20 - 10 =$

16.  $15 - 5 =$

17.  $16 - 6 =$

18.  $14 - 3 =$

19.  $19 - 4 =$

### Write in words.

20. 4 \_\_\_\_\_

21. 3 \_\_\_\_\_

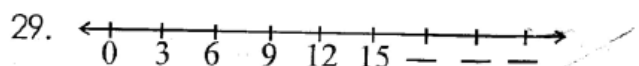
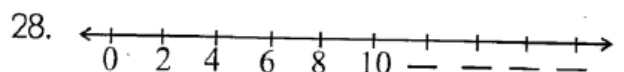
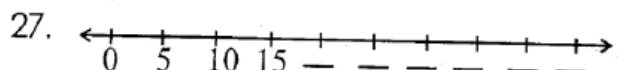
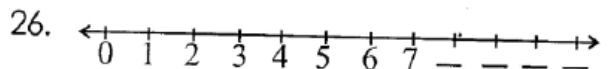
22. 10 \_\_\_\_\_

23. 20 \_\_\_\_\_


24. 6 \_\_\_\_\_

25. 7 \_\_\_\_\_

### Fill in the missing numbers.



**Which one is bigger?**



**Write in words.**

32. 20 \_\_\_\_\_

33. 15 \_\_\_\_\_

34. 10 \_\_\_\_\_

35. 6 \_\_\_\_\_

36. 7 \_\_\_\_\_


37. 8 \_\_\_\_\_

38. 9 \_\_\_\_\_

**Write either straight line or curved line.**



40. \_\_\_\_\_



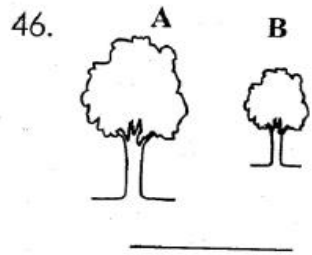

42. \_\_\_\_\_

**Draw.**


43. 20 dots

44. 3 triangles

**Which one is longer?**



**Who is taller?**



49. Two boys have \_\_\_\_\_ eyes.

50. Eight cows have \_\_\_\_\_ horns.