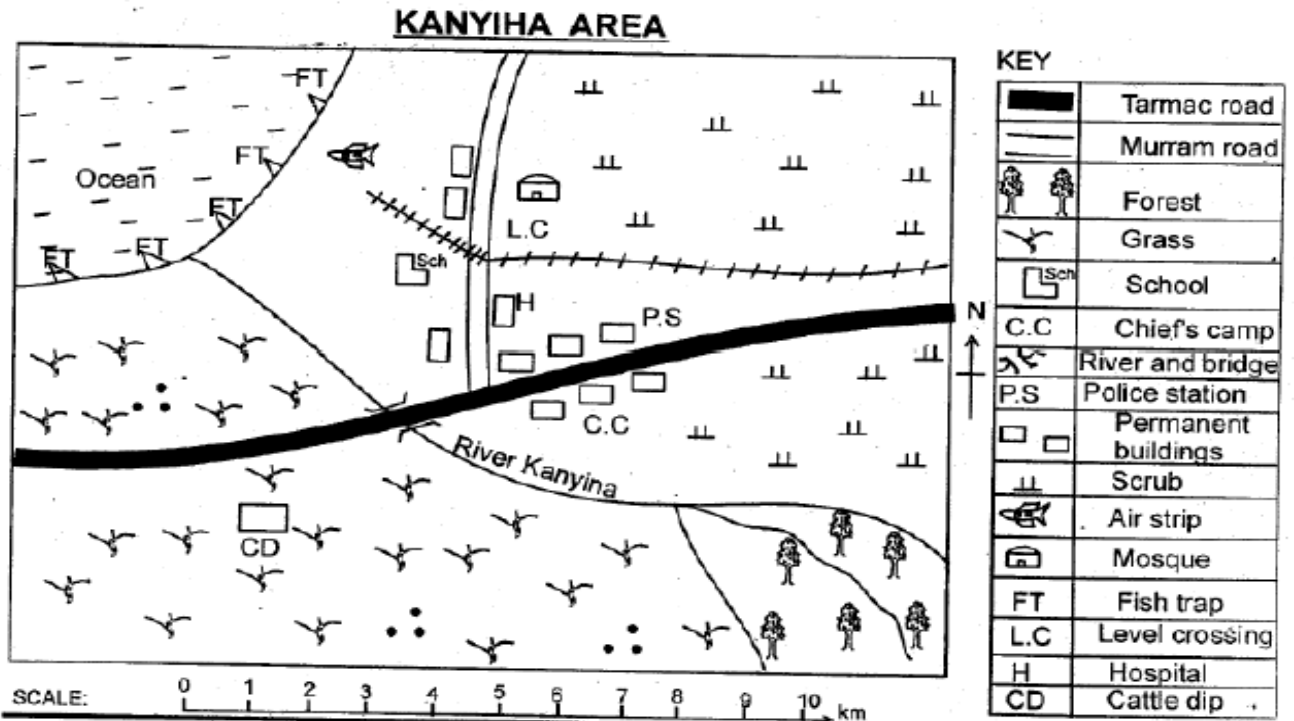


END TERM 1 EXAM 2018

STANDARD FOUR

SOCIAL STUDIES AND RELIGIOUS EDUCATION

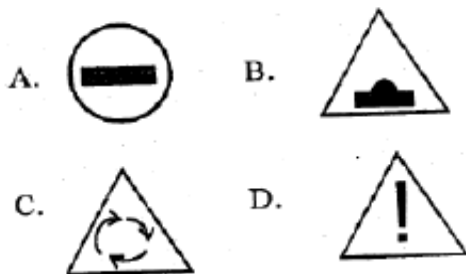
Time: 2Hr 15min



Study the map of Kanyiha area and answer questions 1-7.

1. The direction of the school from the cattle dip is:-
A. North East B. North West
C. South East D. South West
2. How many tributaries does river Kanyiha have?
A. 4 B. 3
C. 1 D. 5
3. Which of the following means of transport is not available at Kanyiha area?
A. Pipeline. B. Air.
C. Road. D. Railway.
4. Which one of the following shows Kanyiha area receives low rainfall? Presence of:-
A. ocean B. forest
C. scrubs D. river
5. River Kanyiha drains its water into:-
A. a forest B. a swamp
C. a lake D. an ocean
6. The people of Kanyiha area practise which religion?
A. Christianity B. Hindu
C. Islamic D. traditionalist
7. Kanyiha area is likely to be a:-
A. County B. sub county
C. division D. location
8. Which one of the following is a man made feature?
A. Mountains B. Dam
C. Plains D. Rivers
9. The following are parts of a family living house **except**:-
A. staffroom B. bedroom
C. sitting room D. kitchen
10. Rivers that flow throughout the year are known as:-
A. seasonal rivers B. tributaries
C. permanent rivers D. longrain rivers
11. The main points of a compass are called:-
A. Compass points. B. North points.
C. Cardinal points. D. Main points.

12. Which of the following road signs means bumps ahead?



13. The following are importance of mountains and hills **except**:-

- A. they are sources of rivers
- B. their slopes are used for farming
- C. they attract tourists
- D. they are used for transport

14. Low lying flat lands are known as:-

- A. plateaus
- B. valleys
- C. hills
- D. plains

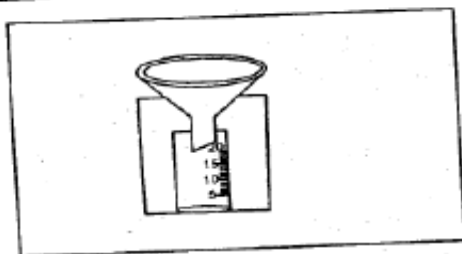
15. In which one of the following vegetation are acacia and baobab trees found?

- A. Scrub vegetation.
- B. Savanna vegetation.
- C. Swamp vegetation.
- D. Forest vegetation.

16. Which one of the following groups of crops consists of cash crops **only**?

- | | | | | | | | |
|--|----------|--------|-----------|--|------------|-----------|---------|
| A. <table border="1" style="display: inline-table; vertical-align: top; padding: 2px;"> <tr><td>Tea</td></tr> <tr><td>Cotton</td></tr> <tr><td>Sugarcane</td></tr> </table> | Tea | Cotton | Sugarcane | B. <table border="1" style="display: inline-table; vertical-align: top; padding: 2px;"> <tr><td>Coffee</td></tr> <tr><td>Pyrethrum</td></tr> <tr><td>Maize</td></tr> </table> | Coffee | Pyrethrum | Maize |
| Tea | | | | | | | |
| Cotton | | | | | | | |
| Sugarcane | | | | | | | |
| Coffee | | | | | | | |
| Pyrethrum | | | | | | | |
| Maize | | | | | | | |
| C. <table border="1" style="display: inline-table; vertical-align: top; padding: 2px;"> <tr><td>Potatoes</td></tr> <tr><td>Onions</td></tr> <tr><td>Bananas</td></tr> </table> | Potatoes | Onions | Bananas | D. <table border="1" style="display: inline-table; vertical-align: top; padding: 2px;"> <tr><td>Vegetables</td></tr> <tr><td>Fruits</td></tr> <tr><td>Sorghum</td></tr> </table> | Vegetables | Fruits | Sorghum |
| Potatoes | | | | | | | |
| Onions | | | | | | | |
| Bananas | | | | | | | |
| Vegetables | | | | | | | |
| Fruits | | | | | | | |
| Sorghum | | | | | | | |

Use the diagram below to answer questions 17 and 18.



17. The weather instrument above is known as:-

- A. thermometer
- B. rain gauge
- C. anemometer
- D. windsock.

18. The instrument above is used to measure:-

- A. strength of wind
- B. speed of wind
- C. temperature
- D. amount of rainfall.

19. Which one of the following is **not** an element of weather?

- A. Soil.
- B. Sunshine.
- C. Rain.
- D. Wind.

20. The activities people in our county do to earn a living are called:-

- A. resources
- B. social activities
- C. economic activities
- D. agriculture

21. The point of a compass found halfway between South and East is?

- A. South West.
- B. South East.
- C. North West.
- D. East.

22. Which one of the following vegetation is **likely** to be found in mountain vegetation?

- A. Shrub
- B. Bamboo
- C. Acacia
- D. Cactus

23. Which one of the following is an example of a social activity?

- A. Going to wars.
- B. Farming.
- C. Reading.
- D. Singing and dancing.

24. Which one of the following was taught to girls in olden days?

- A. Herding
- B. Hunting
- C. Collecting firewood.
- D. Protecting the community.

25. The **most** common method used in naming the children in many communities was after:-

- A. physical features
- B. seasons
- C. animals
- D. relatives.

26. The following were traditional ceremonies. Which one is **not**?

- A. Naming
- B. Marriage
- C. Graduation
- D. Initiation

27. Growing of crops for food is called:-

- A. cash crop farming
- B. irrigation farming
- C. subsistence farming
- D. mixed farming.

28. Poultry are kept **mainly** for:-

- A. manure and meat.
- B. eggs and meat.
- C. feathers and eggs.
- D. manure and eggs.

29. Kenya is divided into _____ counties.

- A. 8
- B. 63
- C. 210
- D. 47

30. Which one of the following is a moral value?

- A. Corruption
- B. Honesty
- C. Pride
- D. Stealing

31. The **most** common means of transport in our county is by:-

- A. road
- B. aeroplane
- C. train
- D. water

32. Which one of the following weather instruments is used to measure temperature?
A. Thermometer. B. Rain gauge. C. Windvane. D. Windsock.
33. The ceremony that marked the end of childhood to adulthood was called:-
A. naming B. marriage C. initiation D. birth.
34. Which one of the following is the fastest means of transport?
A. Air B. Road C. Water D. Railway
35. The following are members of nuclear family **except**:-
A. father B. uncle C. children D. mother.
36. People who live near our homes are called:-
A. strangers B. neighbours C. enemies D. classmates.
37. Buying and selling of goods and services is called:-
A. trade B. transport C. communication D. migration.
38. Which one of the following is a pack animal?
A. Cow. B. Donkey. C. Goat. D. Sheep.
39. Which one of the following colours of the national flag shows peace?
A. Red. B. Black. C. White. D. Green.
40. The area with many people is said to be:-
A. densely populated B. sparsely populated C. low populated D. evenly populated.
41. Which one of the following is **not** a part of cultural heritage?
A. Songs and dances. B. Artefacts. C. Clothing. D. Roads.
42. Which one is the best way of caring for animals?
A. Forcing animals to take water. B. Giving them little feeds. C. Giving calves a lot of feeds. D. Taking them to a veterinary when sick.
43. Which of the following groups consists of the basic family needs?
A.

| |
|----------|
| Food |
| Shelter |
| Clothing |

 B.

| |
|-----------|
| Education |
| Car |
| Food |

C.

| |
|--------------|
| Medical care |
| Clothing |
| Car |

 D.

| |
|-----------|
| Shelter |
| Schooling |
| Clothing |
44. A person who treats sick animals is called:-
A. nurse B. clinical officer C. optician D. veterinary.
45. Which one of the following is the most widely used dairy product?
A. Butter. B. Fresh milk. C. Yoghurt. D. Ghee.
46. Young people who learnt specialized skills in traditional Kenyan communities were called:-
A. worriers B. trainees C. apprentices D. elders.
47. The following are benefits of growing cash crops. Which one is **not**?
A. Source of income to the farmers. B. They create employment. C. They are source of food. D. They attract tourists.
48. Which one of the following is an example of a physical feature?
A. Plains. B. Roads. C. Vehicles. D. Building.
49. On 1st June every year Kenyan's celebrate:-
A. Jamhuri day B. Labour day C. Mashujaa day D. Madaraka day
50. People today communicate easily with people who are far away using:-
A. radio B. letters C. mobile phones D. newspapers
51. Which one of the following is **not** a domestic animal?
A. Hare B. Camel C. Dog D. Chicken
52. A member of parliament represents an area known as:-
A. county B. ward C. constituency D. district.
53. Which one of the following is **not** a traditional industry?
A. Pottery B. Glass making C. Weaving D. Iron working
54. Which one of the following is **not** an example of a building material?
A. Stone B. Furniture C. Iron sheet D. Cement
55. In olden days medicine was got from the following plants parts **except** :-
A. barks B. roots C. leaves D. flowers
56. The best soil for growing food crops is:-
A. clay B. sandy C. loamy D. black cotton.
57. The most common method of initiation practised by many communities in Kenya is:-
A. tattooing B. circumcision C. teeth removal D. decoration.
58. _____ are people who hunt wildlife unlawfully.
A. Wardens B. Hunters C. Tourists D. Poachers
59. The head of our county is the:-
A. member of parliament B. senator C. chief D. governor
60. We should cross a busy road at a:-
A. junction B. bridge C. pedestrian crossing D. roundabout.

PART II: RELIGIOUS EDUCATION

SECTION A: CHRISTIAN RELIGIOUS EDUCATION

61. On which day of creation did God create human beings?
A. Fifth. B. Fourth.
C. Seventh. D. Sixth.
62. The story of Moses and the children of Israel is found in the book of:-
A. Genesis B. Exodus
C. Joshua D. Kings
63. Which king of Israel killed Goliath?
A. Saul B. Ahab
C. David D. Solomon
64. Who among the following made a wrong choice?
A. Solomon B. Ruth
C. Ananias D. Levi
65. Elimelech and his family moved to the land of:-
A. Bethlehem B. Moab
C. Egypt D. Jericho
66. I was put into a den of lions, who am I?
A. Stephen B. Peter
C. Daniel D. Job
67. Who among the following prophets defeated the prophet of Baal at Mt. Camel?
A. Jonah B. Jeremiah
C. Micah D. Elijah
68. The name Samuel means:-
A. head of God B. saviour
C. appointed one D. God with us
69. The following are fruits of the Holy spirit except:-
A. love B. faith
C. joy D. kindness
70. Who among the following disciples of Jesus was a tax collector?
A. James. B. John.
C. Peter. D. Levi.
71. Which one of the following miracles of Jesus was performed at Capernaum?
A. Walking on water.
B. Healing the Roman officer's servant.
C. Turning water into wine.
D. Raising the son of the widow.
72. Jesus washed His disciples' feet as a sign of:-
A. love B. courage
C. generosity D. humility.
73. By walking on water, Jesus showed that he had power over:-
A. water B. death
C. nature D. people.
74. Which one of the following parables of Jesus teaches about forgiveness? The parable of:-
A. prodigal son B. lost sheep
C. mustard seed D. good samaritan.
75. Jesus was born in Bethlehem as prophesied by Prophet:-
A. Isaiah B. Jeremiah
C. Joel D. Micah.
76. Christians celebrate the birth of Jesus during:-
A. Easter B. Advent
C. Christmas D. Palm Sunday.
77. The following are qualities of a good leader **except**:-
A. honest B. courage
C. loving D. proud
78. In traditional Kenyan society, Abaluyhia called their God:-
A. Were B. Nyasaye
C. Enkai D. Engoro.
79. Who among the following people did Jesus name as sons of thunder?
A. Levi and John.
B. Peter and Andrew.
C. John and James.
D. Philip and Thomas.
80. Jesus was a refugee in:-
A. Israel B. Egypt
C. Jericho D. Rome.
81. Which one of the following statements is **not** found in the Lord's prayer?
A. Deliver us from evil.
B. I believe in everlasting life.
C. Thy will be done on earth.
D. Give us our daily bread.
82. On which mountain did Noah's ark rest after the flood?
A. Mt. Sinai. B. Mt. Olives.
C. Mt. Ararat. D. Mt. Horeb.
83. Which one of the following christian values was shown by Jesus when He fed a large crowd of people?
A. Humility. B. Generosity.
C. Sharing. D. Courage.
84. The Bible has _____ books.
A. 39 B. 27
C. 66 D. 65
85. The action of Jesus that teaches christians that there is life after death is:-
A. Feeding the hungry
B. Raising of Lazarus
C. Healing of sick
D. Driving out demons.
86. Jesus showed loyalty to His father by:-
A. obeying him all the time
B. praying with the people
C. healing the sick
D. doing what he wanted
87. Who among the following climbed a tree to see Jesus?
A. Nichodemus. B. Zachaeus.
C. Lazarus. D. John.
88. Which one of the following qualities did Jesus require from those He healed?
A. Respect. B. Courage.
C. Faith. D. Peace.
89. After the death of Jesus, _____ buried His body.
A. Simon of Cyrene.
B. Simon Peter.
C. Mary Magdarene.
D. Joseph of Arimathea.
90. In traditional Kenyan society, children were taught stories in order to:-
A. entertain them
B. make them creative
C. teach them moral values
D. keep the culture.