


STANDARD FOUR

END TERM 1 EXAM 2018

SCIENCE

- When tearing off meat from a bone, we use the:-
A. premolars B. incisors C. canines D. molars
- The best way of removing weeds is by:-
A. digging them out B. slashing
C. using mechanicals D. mulching
- Which one of the following is **NOT** seen at all in the sky during the day?
A. Moon B. Stars C. Sun D. Clouds
- A standard 3 class at Jila Primary did the experiment below. The experiment shows that soil contains:-



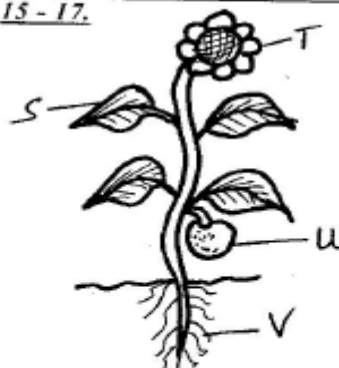
- Which one of the following diseases can be spread through the sharing of tooth brush?
A. Malaria B. Diarrhoea
C. HIV/AIDS D. Typhoid
- Which one of the following shapes of moon is a new moon?




- HIV means:-
A. Human Immune Voice
B. Human Immune Virus
C. Human Is Virus
D. Human Immunodeficiency Virus
- Which one of the following is **NOT** a cereal crop?
A. Rice B. Peas C. Sorghum D. Maize
- How should we brush our teeth?
A. Downwards and sideways
B. Upwards and downwards
C. Upwards and sideways
D. Across the mouth
- A young one of a sheep is called a:-
A. kid B. lamb C. puppy D. kitten
- Which of the following does **NOT** help an animal to grow healthy?
A. Proper housing B. Proper feeding
C. Adding fertilizer D. Proper medical care
- Which one of the following weeds can be eaten?
A. Oxalis B. Black jack
C. Datura D. Pig weed

- Water is made safe for drinking by:-
A. Boiling B. Filtering
C. Adding sugar D. Adding salt
- Which one of the following is **NOT** a use of water at home?
A. Drinking B. Washing
C. Fish rearing D. Bathing

Use the diagram below to answer questions 15 - 17.





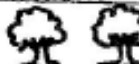





- The part marked T is the:-
A. fruit B. flower C. root D. leaf
- Which part is marked as the fruit?
A. T B. V C. U D. S
- The part marked V is the:-
A. stem B. branch C. root D. leaf
- Supplying water to crops is called:-
A. irrigation B. wedding
C. cultivation D. farming
- Which statement is **TRUE** about earthworms, snails, snakes and fish?
A. They all live in water
B. They all live in the soil
C. They do not have legs
D. They all have scales on their bodies
- AIDS is caused by:-
A. syndrome B. HIV C. immunity D. deficiency
- The two **MAIN** types of crops are:-
A. fibre and fruit crops
B. food and beverage crops
C. Oil and fibre crops
D. Food and cash crops
- Which of the following teeth will be the first to grow in a baby?

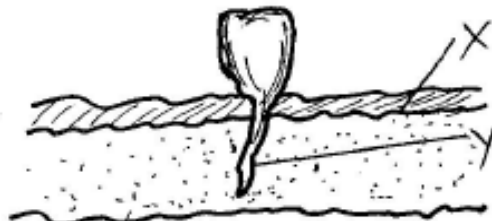


23. We eat the stem of:-
A. sugarcane B. orange C. banana D. carrot
24. When the weather is cold people put on _____
A. heavy clothes B. gum boots
C. light clothes D. many clothes
25. Birds kept on the farm for producing eggs are called:-
A. broilers B. layers C. pullets D. cupons
26. Nimbus clouds bring:-
A. drought B. rain C. light D. heat
27. In AIDS, the letter D stands for:-
A. Deficiency B. Doctor C. Day D. Dead
28. The small holes found in teeth are known as:-
A. dental cavities B. gingivitis
C. tooth decay D. cavities
29. Dark clouds bring:-
A. rain B. sun C. dust D. fog
30. Which one of the following is a legume plant?
A. Millet B. Peas C. Sorghum D. Wheat
31. Which one of the following is **NOT** a means of water transport?
A. Ferry B. Motor cycle C. Boat D. Canoe
32. Which animal has a different type of movement from the others?
A. Ostrich B. Bat C. Butterfly D. Mosquito
33. When we observe the sky at night, we are **NOT** able to see the:-
A. sky B. sun C. moon D. stars
34. The sticky substance that forms on the teeth when they are **NOT** cleaned properly is called:-
A. plaque B. cavity C. acid D. germs
35. When milk teeth fall off, they are replaced by a new set of teeth called:-
A. dentures B. wisdom teeth
C. permanent teeth D. deciduous teeth
36. Which one is a tuber crop?
A. Potatoes B. Sugarcane
C. Maize D. Avocado
37. Sport fishing is a _____ use of water.
A. farm B. domestic
C. recreational D. industrial
38. Plants that grow at a place where they are not wanted are called:-
A. blackjack B. pigweed
C. weeds D. oxalis
39. Which of the following animals are **CORRECTLY** matched with their products?
- | Animals | Products |
|------------|----------|
| A. Goats | - Beef |
| B. Cattle | - Eggs |
| C. Chicken | - Wool |
| D. Sheep | - Mutton |
40. The total number of teeth in the milk set of teeth are:-
A. 32 B. 16 C. 20 D. 22
41. Which one of the following is **NOT** a method of controlling weeds?
A. Watering B. Using chemicals
C. Uprooting D. Slashing

42. Which one of the following consists of cash crops only?
A. Coffee, tea, pyrethrum
B. Coffee, potatoes, tea
C. Sunflower, beans, cassava
D. Peas, carrots, sunflower
43. The name given to the different shapes of the moon is:-
A. orbit B. phases C. Gibbous D. Crescent
44. The condition of the atmosphere at a given place at a particular time is called
A. sky B. weather C. temperature D. surrounding
- Use the weather chart below to answer questions 45 - 47.

Day	Morning	Afternoon
Monday		
Tuesday		
Wednesday		
Thursday		

45. Which day was windy in the afternoon?
A. Monday B. Tuesday
C. Wednesday D. Thursday
46. On which two days did Kache use an umbrella?
A. Monday and Tuesday
B. Monday and Wednesday
C. Tuesday and Wednesday
D. Tuesday and Thursday
47. On which day was the weather sunny in the afternoon?
A. Monday B. Tuesday
C. Thursday D. Wednesday
48. Which statement is **CORRECT**?
A. AIDS has no cure
B. AIDS has cure
C. Any thin person has AIDS
D. AIDS causes HIV
- Use the diagram to answer questions 49-50.



49. The part marked X is the:-
A. jaw bone B. crown C. gum D. root
50. The part marked Y is the:-
A. root B. gum C. crown D. tooth