

# STANDARD 1 MID TERM 3 EXAMS 2017

## MATHEMATICS


000

DATE: .....


NAME: ..... SCHOOL: .....

Count and write in words


1.




2.




3.



4.



5.



Write the missing numbers

6. 20 \_\_\_\_\_, \_\_\_\_\_, \_\_\_\_\_ 24, 25

7. 13 \_\_\_\_\_ 11 \_\_\_\_\_ 9 \_\_\_\_\_

8. 44, 45 \_\_\_\_\_, \_\_\_\_\_ 48 \_\_\_\_\_

9. 3 \_\_\_\_\_ 5 \_\_\_\_\_, \_\_\_\_\_ 8 \_\_\_\_\_

10. \_\_\_\_\_ 56 \_\_\_\_\_ 58 \_\_\_\_\_ 60

11. 3 tens 4 ones = \_\_\_\_\_

12. 8 tens 0 ones = \_\_\_\_\_

13. 79 = \_\_\_\_\_ tens \_\_\_\_\_ ones

14. 63 = \_\_\_\_\_ tens \_\_\_\_\_ ones

15. 6 tens = \_\_\_\_\_

16.  $2 + 4 =$  \_\_\_\_\_

17.  $7 + 1 =$  \_\_\_\_\_

18.  $3 + 2 =$  \_\_\_\_\_

$$\begin{array}{r} 19. \quad 4 \\ + 4 \\ \hline \end{array}$$

$$\begin{array}{r} 20. \quad 6 \\ + 3 \\ \hline \end{array}$$

$$\begin{array}{r} 21. \quad 8 \\ + 3 \\ \hline \end{array}$$

$$\begin{array}{r} 22. \quad 10 \\ + 4 \\ \hline \end{array}$$

**Fill in the missing numbers**

23.  $3 + \underline{\quad} = 9$

24.  $\underline{\quad} + 5 = 9$

25.  $4 + \underline{\quad} = 8$

**Take away**


26.  $6 - 4 = \underline{\quad}$

27.  $7 - 3 = \underline{\quad}$

28.  $9 - 3 = \underline{\quad}$

29.  $4 - 4 = \underline{\quad}$

30. How many bottles have water?



$$\begin{array}{r} 31. \quad 40 \\ - 10 \\ \hline \end{array}$$

$$\begin{array}{r} 32. \quad 60 \\ - 20 \\ \hline \end{array}$$

$$\begin{array}{r} 33. \quad 90 \\ - 50 \\ \hline \end{array}$$

$$\begin{array}{r} 34. \quad 50 \\ - 30 \\ \hline \end{array}$$

**Match these numbers and words**

35. 15                      twelve

36. 20                      eight

37. 8                        fifteen

38. 12                      twenty


39.  $1 + 3 + 2 = \underline{\quad}$

40.  $2 + 3 + 4 = \underline{\quad}$

41. 1 year has  $\underline{\quad}$  months

42. 2 dogs have  $\underline{\quad}$  legs

43. Which tree is taller?



44. Take away  
 $000000 - 00 = \underline{\quad}$

45. 
$$\begin{array}{r} \text{5 pencils} \\ - \text{2 pencils} \\ \hline = \underline{\quad} \end{array}$$

**Find the next number in each of the following patterns**

46. 13, 14, 15, 16  $\underline{\quad}$

47. 5, 10, 15, 20  $\underline{\quad}$

48. 19, 18, 17, 16  $\underline{\quad}$

49. 8, 10, 12, 14  $\underline{\quad}$

50. 60, 50, 40, 30  $\underline{\quad}$