

STD 3 MID TERM 2, 2017

MATHEMATICS

NAME :	
SCHOOL :	

Fill in the missing numbers.

1. 200, 300, _____
 _____ 900
2. 120, 121, _____

Write the numbers in words or symbols.

3. 70 _____
4. One hundred and twenty _____
5. Thirty five _____
6. Fourteen _____

Add

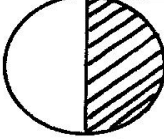

- | | |
|--|---|
| <ol style="list-style-type: none"> 7. $\begin{array}{r} 31 \\ + 24 \\ \hline \hline \end{array}$ 9. $\begin{array}{r} 723 \\ + 206 \\ \hline \hline \end{array}$ 11. $17 + 26 + 94 =$ _____ 12. $\begin{array}{r} 809 \\ + 146 \\ \hline \hline \end{array}$ 13. $16 =$ _____ tens _____ ones. | <ol style="list-style-type: none"> 8. $\begin{array}{r} 93 \\ + 41 \\ \hline \hline \end{array}$ 10. $\begin{array}{r} 39 \\ + 14 \\ \hline \hline \end{array}$ |
|--|---|

14. $135 =$ _____ hundreds _____ tens _____ ones.

Subtract

- | | |
|--|--|
| <ol style="list-style-type: none"> 15. $\begin{array}{r} 58 \\ - 3 \\ \hline \hline \end{array}$ 17. $\begin{array}{r} 97 \\ - 16 \\ \hline \hline \end{array}$ 19. $\begin{array}{r} 63 \\ - 45 \\ \hline \hline \end{array}$ | <ol style="list-style-type: none"> 16. $\begin{array}{r} 17 \\ - 9 \\ \hline \hline \end{array}$ 18. $\begin{array}{r} 345 \\ - 144 \\ \hline \hline \end{array}$ 20. $\begin{array}{r} 600 \\ - 200 \\ \hline \hline \end{array}$ |
|--|--|

What fraction is unshaded?

- | | |
|---|---|
| <ol style="list-style-type: none"> 21.  | <ol style="list-style-type: none"> 22.  |
|---|---|

23. Half of 6 = _____

Multiply

24. $\frac{1}{2}$ of 6 = _____
25. $4 \times 5 =$ _____
26. $10 \times 3 =$ _____
27. $6 \times 3 =$ _____

Divide

28. $9 \div 3 = \underline{\quad}$

29. $8 \div 4 = \underline{\quad}$

30. $20 \div 5 = \underline{\quad}$

31. There are $\underline{\quad}$ days in a week.

32. Sunday $\underline{\quad}$, Tuesday, wednesday

33. We come to school for $\underline{\quad}$ days.

Arrange the numbers from the smallest to the largest.


34. 7, 4, 10, 9, 3, 20,
 $\underline{\hspace{10em}}$

35. 21, 28, 7, 14, 42, 35,
 $\underline{\hspace{10em}}$

36. $\underline{\quad}$ is the third month of the year.

37. 2 cows have $\underline{\quad}$ legs.

38. What is the time?
 $\underline{\hspace{10em}}$



Fill in the missing numbers.

39. $3 \times \square = 27$


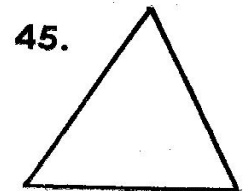
40. $15 - \square = 10$

41. $8 + \square = 14$

42. Take away 8 from 16 = $\underline{\quad}$

43. Musembi had 40 goats. he sold 12 goats. He was left with $\underline{\quad}$ goats.

Name the shapes.



47.
$$\begin{array}{r} 272\text{m} \\ -227\text{m} \\ \hline \hline \end{array}$$

48.
$$\begin{array}{r} 468\text{m} \\ +88\text{m} \\ \hline \hline \end{array}$$

49. $9 - \square = 7$

50. $6 - \square = 4$