


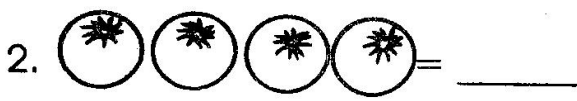
STD 1 MID TERM 2, 2017

MATHEMATICS

NAME: SCHOOL:



How many stars? = _____



5. $4 + 3 =$ _____

6. $5 + 5 =$ _____

7. $6 + 3 =$ _____

8. $7 - 7 =$ _____

9. $10 - 4 =$ _____

10. $8 - 5 =$ _____

Write the missing number

11. 9, 10, 11, _____, 13, 14

12. 110, 111, 112, _____, 114,
115

13. 10, 20, 30, _____, 50, 60

14.
$$\begin{array}{r} 25 \\ - 25 \\ \hline \end{array}$$

15.
$$\begin{array}{r} 18 \\ - 14 \\ \hline \end{array}$$

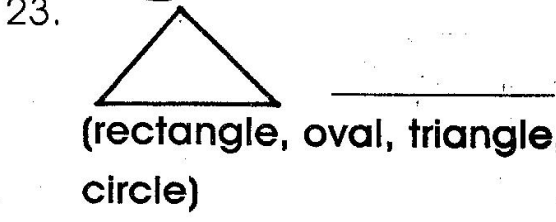
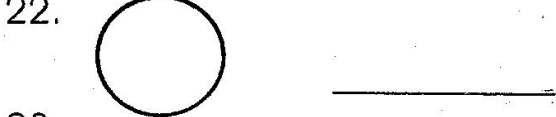
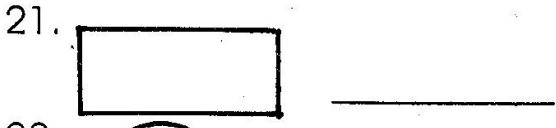
16.
$$\begin{array}{r} 34 \\ - 4 \\ \hline \end{array}$$

17.
$$\begin{array}{r} 11 \\ + 11 \\ \hline \end{array}$$

18. $9 + 5 =$ _____

19. $20 - 9 =$ _____

Name the shapes



Write in words

24. 7 _____

15. 12 _____

16. 4 tens 2 ones = _____

17. 99 = _____ tens _____ ones.

18. 49 = _____ tens _____ ones.

19. $14 - 1 = \square$

20.
$$\begin{array}{r} 70 \\ - 30 \\ \hline \end{array}$$

21. $40 - 10 = \square$

How many

2.  = _____

3. $6 + 5 + 7 = \underline{\hspace{2cm}}$

4. _____ = 5 tens + 4 ones.


5.
$$\begin{array}{r} 50 \\ + 20 \\ \hline \end{array} \quad \begin{array}{r} 36 \\ - 10 \\ \hline \end{array} \quad \begin{array}{r} 31 \\ - 10 \\ \hline \end{array}$$

7.
$$\begin{array}{r} 40 \\ - 30 \\ \hline \end{array}$$

8. $12 - 8 = \underline{\hspace{2cm}}$

9. $3 + 2 + 0 = \underline{\hspace{2cm}}$

How many small wheels

3.  = _____

STD 1 MATH

Add

41. $6 + 4 + 7 = \underline{\hspace{2cm}}$

42. 60 = _____ tens _____ ones

43. Which is longer?




44. Fill in the missing

5, 10, 15, 20, _____

45.
$$\begin{array}{r} 5 \\ 3 \\ + 1 \\ \hline \end{array}$$

46.
$$\begin{array}{r} 15 \\ + 10 \\ \hline \end{array}$$

47.
$$\begin{array}{r} 7 \\ - 6 \\ \hline \end{array}$$

48.  + _____ = _____

49. Arrange from the smallest to the largest 9, 6, 8, 5, 7, _____

50. Which is straight?

