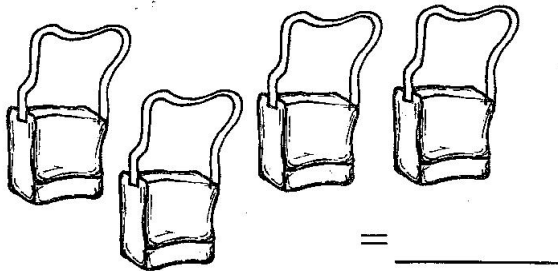
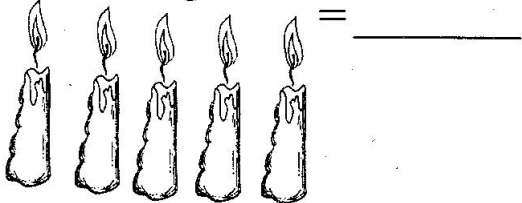
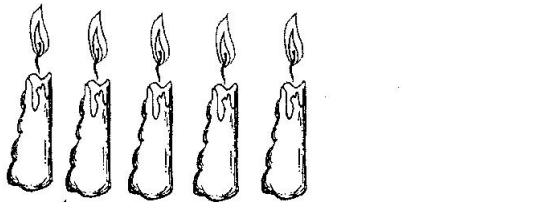



PRE-UNIT MID TERM 2, 2017

NUMBER WORK

Name School

Count and write.



Write in words.

0 _____
 3 _____
 10 _____
 6 _____

Add (+)

$2 + 1 + 3 = \underline{\quad}$

$4 + 2 + 0 = \underline{\quad}$

$$\begin{array}{r} 10 \\ + 2 \\ \hline \end{array}$$

$$\begin{array}{r} 12 \\ + 2 \\ \hline \end{array}$$

$$\begin{array}{r} 7 \\ + 3 \\ \hline \end{array}$$

$$\begin{array}{r} 6 \\ + 7 \\ \hline \end{array}$$

Take away (-)

$4 - 0 = \underline{\quad}$

$5 - 2 = \underline{\quad}$

$8 - 2 = \underline{\quad}$

Fill in the missing numbers

44 45 _____ 48 49

50 _____ 52 _____ 54