

NURSERY MID TERM 2, 2017

NUBER WORK

Name School

Draw balls.


4 = _____
 3 = _____
 5 = _____
 2 = _____

Add (+)





5 + 1 = _____
 4 + 3 = _____
 4 + 4 = _____
 2 + 0 = _____
 1 + 4 = _____

$\begin{array}{r} 3 \\ + 0 \\ \hline \end{array}$	$\begin{array}{r} 1 \\ + 4 \\ \hline \end{array}$
---	---

Circle all number 8.



Count and write.



Draw the shapes.

Circle	Oval